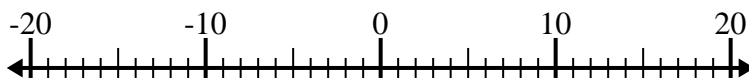




Résoudre chaque problème. Utilisez la droite numérique si besoin.

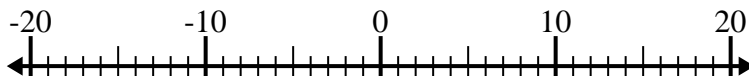
Réponses

1) $(-15) - (-7) =$ _____



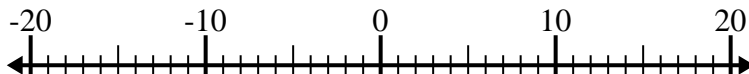
1. _____

2) $(-9) - 4 =$ _____



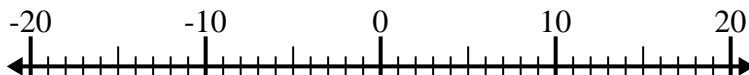
2. _____

3) $7 - (-13) =$ _____



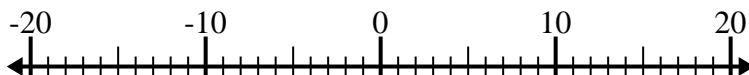
3. _____

4) $(-5) + (-11) =$ _____



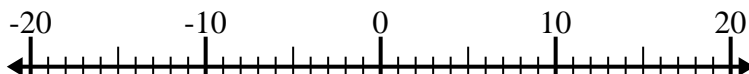
4. _____

5) $(-12) + 4 =$ _____



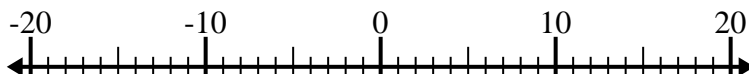
5. _____

6) $14 - (-2) =$ _____



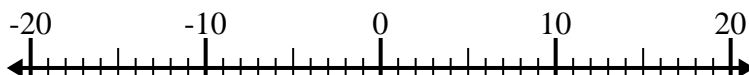
6. _____

7) $1 + (-13) =$ _____



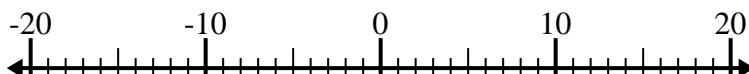
7. _____

8) $(-4) - (-7) =$ _____



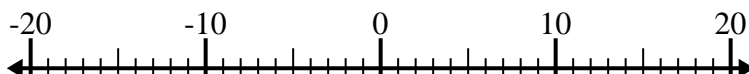
8. _____

9) $(-9) - 11 =$ _____



9. _____

10) $(-15) + (-1) =$ _____



10. _____



Résoudre chaque problème. Utilisez la droite numérique si besoin.

1) $(-15) - (-7) = \underline{-8}$



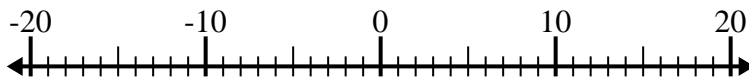
2) $(-9) - 4 = \underline{-13}$



3) $7 - (-13) = \underline{20}$



4) $(-5) + (-11) = \underline{-16}$



5) $(-12) + 4 = \underline{-8}$



6) $14 - (-2) = \underline{16}$



7) $1 + (-13) = \underline{-12}$



8) $(-4) - (-7) = \underline{3}$



9) $(-9) - 11 = \underline{-20}$



10) $(-15) + (-1) = \underline{-16}$



Réponses

1. **-8**

2. **-13**

3. **20**

4. **-16**

5. **-8**

6. **16**

7. **-12**

8. **3**

9. **-20**

10. **-16**