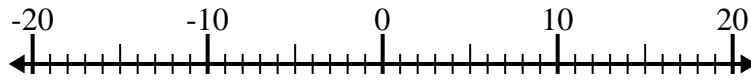




Résoudre chaque problème. Utilisez la droite numérique si besoin.

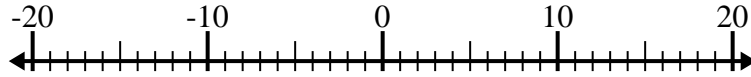
**Réponses**

1)  $(-3) - 9 =$  \_\_\_\_\_



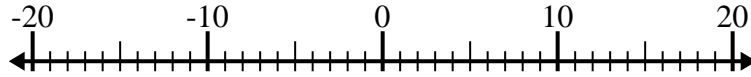
1. \_\_\_\_\_

2)  $(-11) + (-7) =$  \_\_\_\_\_



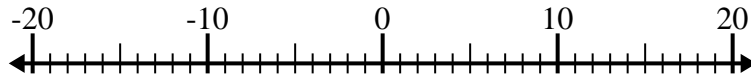
2. \_\_\_\_\_

3)  $(-15) + 11 =$  \_\_\_\_\_



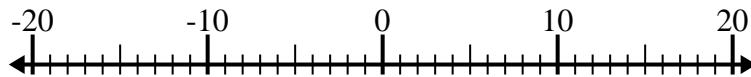
3. \_\_\_\_\_

4)  $10 - (-4) =$  \_\_\_\_\_



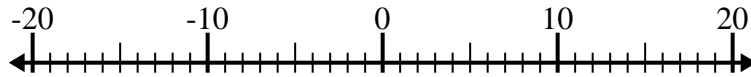
4. \_\_\_\_\_

5)  $(-2) + (-5) =$  \_\_\_\_\_



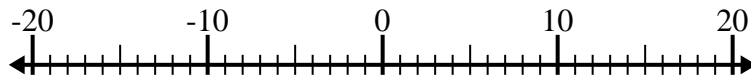
5. \_\_\_\_\_

6)  $(-14) - (-7) =$  \_\_\_\_\_



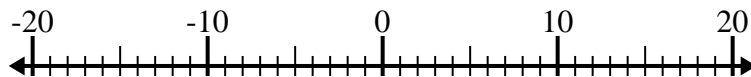
6. \_\_\_\_\_

7)  $(-10) - 1 =$  \_\_\_\_\_



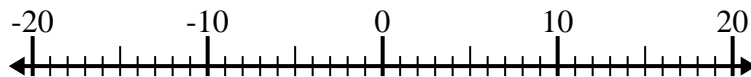
7. \_\_\_\_\_

8)  $10 - (-6) =$  \_\_\_\_\_



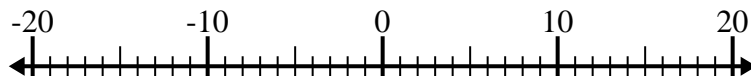
8. \_\_\_\_\_

9)  $13 + (-1) =$  \_\_\_\_\_



9. \_\_\_\_\_

10)  $(-8) + 4 =$  \_\_\_\_\_

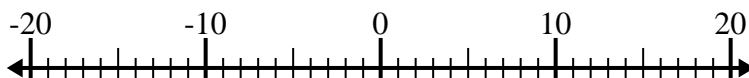


10. \_\_\_\_\_

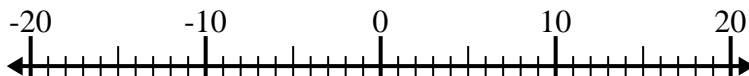


Résoudre chaque problème. Utilisez la droite numérique si besoin.

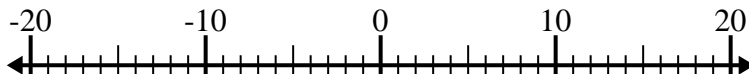
1)  $(-3) - 9 = \underline{-12}$



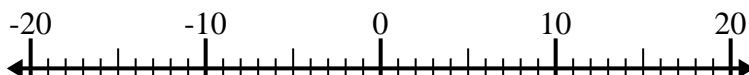
2)  $(-11) + (-7) = \underline{-18}$



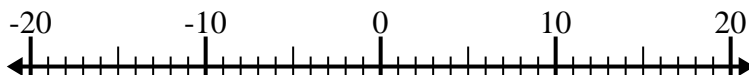
3)  $(-15) + 11 = \underline{-4}$



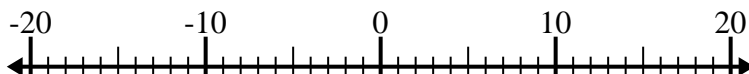
4)  $10 - (-4) = \underline{14}$



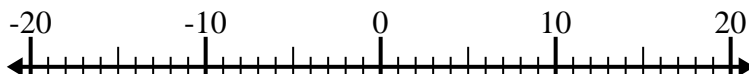
5)  $(-2) + (-5) = \underline{-7}$



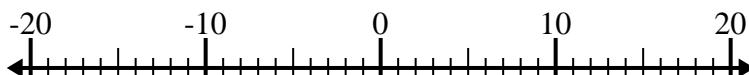
6)  $(-14) - (-7) = \underline{-7}$



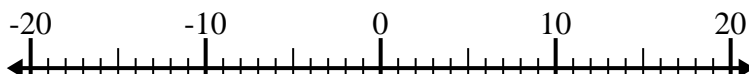
7)  $(-10) - 1 = \underline{-11}$



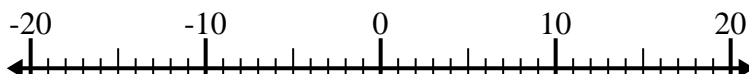
8)  $10 - (-6) = \underline{16}$



9)  $13 + (-1) = \underline{12}$



10)  $(-8) + 4 = \underline{-4}$



**Réponses**

1. **-12**

2. **-18**

3. **-4**

4. **14**

5. **-7**

6. **-7**

7. **-11**

8. **16**

9. **12**

10. **-4**