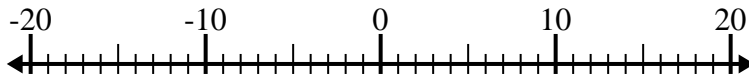




Résoudre chaque problème. Utilisez la droite numérique si besoin.

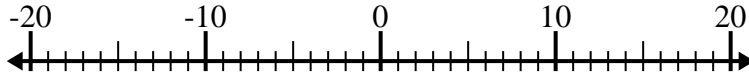
**Réponses**

1)  $(-4) - (-5) =$  \_\_\_\_\_



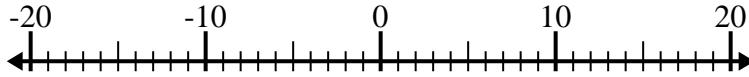
1. \_\_\_\_\_

2)  $5 - (-12) =$  \_\_\_\_\_



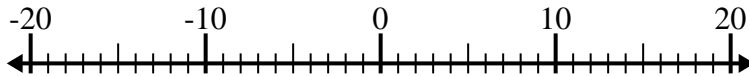
2. \_\_\_\_\_

3)  $(-4) - (-13) =$  \_\_\_\_\_



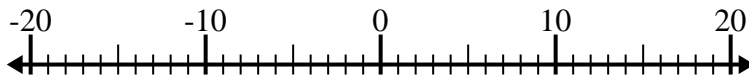
3. \_\_\_\_\_

4)  $12 + (-10) =$  \_\_\_\_\_



4. \_\_\_\_\_

5)  $(-1) - 13 =$  \_\_\_\_\_



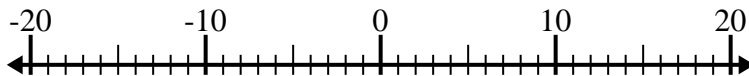
5. \_\_\_\_\_

6)  $(-5) + 15 =$  \_\_\_\_\_



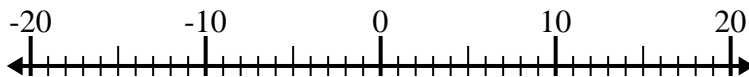
6. \_\_\_\_\_

7)  $(-11) + 1 =$  \_\_\_\_\_



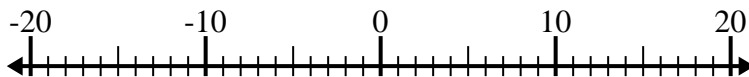
7. \_\_\_\_\_

8)  $14 - (-4) =$  \_\_\_\_\_



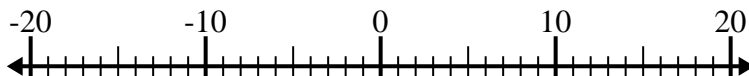
8. \_\_\_\_\_

9)  $(-2) - 14 =$  \_\_\_\_\_



9. \_\_\_\_\_

10)  $(-4) + (-1) =$  \_\_\_\_\_



10. \_\_\_\_\_



Résoudre chaque problème. Utilisez la droite numérique si besoin.

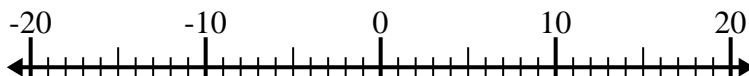
1)  $(-4) - (-5) = \underline{1}$



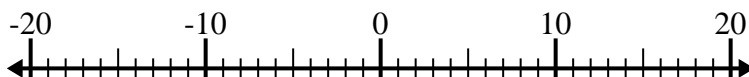
2)  $5 - (-12) = \underline{17}$



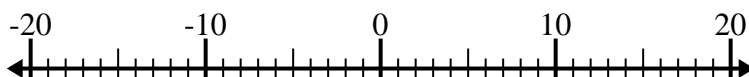
3)  $(-4) - (-13) = \underline{9}$



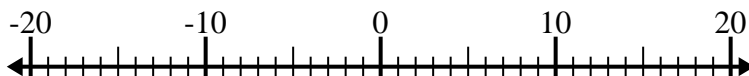
4)  $12 + (-10) = \underline{2}$



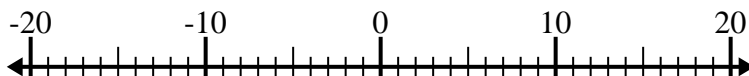
5)  $(-1) - 13 = \underline{-14}$



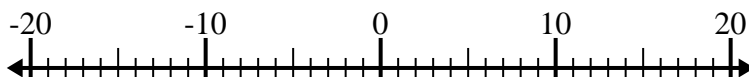
6)  $(-5) + 15 = \underline{10}$



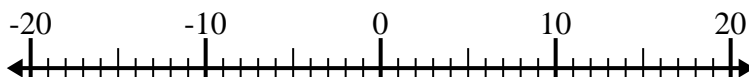
7)  $(-11) + 1 = \underline{-10}$



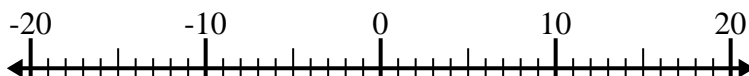
8)  $14 - (-4) = \underline{18}$



9)  $(-2) - 14 = \underline{-16}$



10)  $(-4) + (-1) = \underline{-5}$



**Réponses**

1. 1

2. 17

3. 9

4. 2

5. -14

6. 10

7. -10

8. 18

9. -16

10. -5