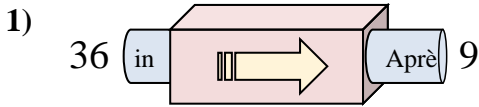
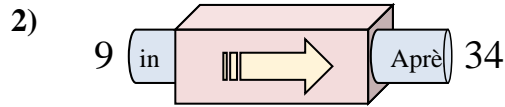




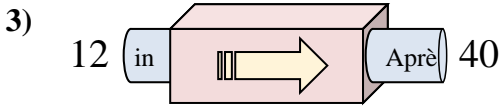
Déterminez la règle appliquée à chaque machine à fonctions.

**Réponses**

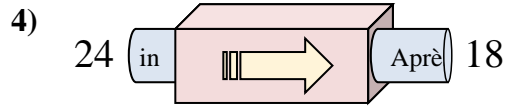
- A. Ajouter 30
- B. Soustraire 32
- C. Soustraire 31
- D. Soustraire 27



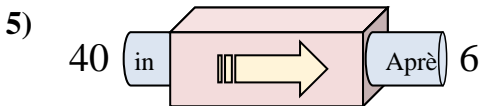
- A. Ajouter 23
- B. Soustraire 29
- C. Soustraire 21
- D. Ajouter 25



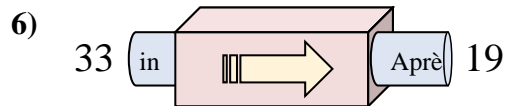
- A. Soustraire 30
- B. Ajouter 33
- C. Ajouter 29
- D. Ajouter 28



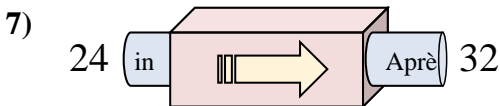
- A. Ajouter 4
- B. Soustraire 2
- C. Soustraire 6
- D. Soustraire 5



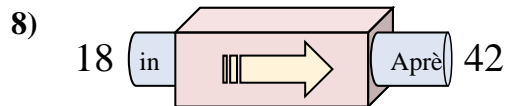
- A. Ajouter 29
- B. Soustraire 39
- C. Soustraire 34
- D. Ajouter 30



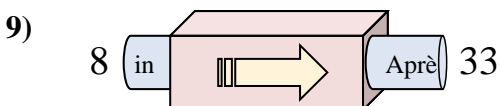
- A. Ajouter 16
- B. Soustraire 17
- C. Soustraire 14
- D. Soustraire 9



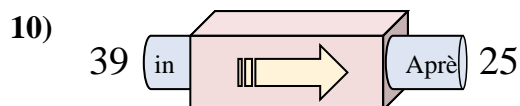
- A. Ajouter 11
- B. Ajouter 8
- C. Soustraire 12
- D. Ajouter 12



- A. Ajouter 24
- B. Ajouter 23
- C. Soustraire 23
- D. Ajouter 21



- A. Ajouter 25
- B. Soustraire 24
- C. Soustraire 26
- D. Ajouter 27

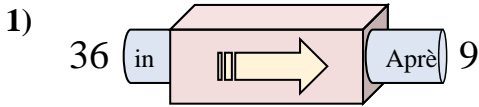


- A. Ajouter 9
- B. Ajouter 14
- C. Soustraire 10
- D. Soustraire 14

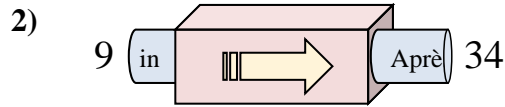
1. \_\_\_\_\_
2. \_\_\_\_\_
3. \_\_\_\_\_
4. \_\_\_\_\_
5. \_\_\_\_\_
6. \_\_\_\_\_
7. \_\_\_\_\_
8. \_\_\_\_\_
9. \_\_\_\_\_
10. \_\_\_\_\_



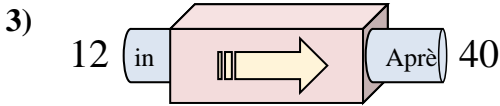
Déterminez la règle appliquée à chaque machine à fonctions.

**Réponses**

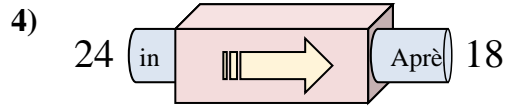
- A. Ajouter 30
- B. Soustraire 32
- C. Soustraire 31
- D. Soustraire 27



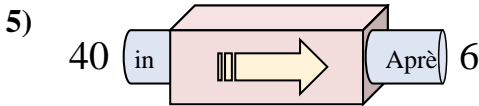
- A. Ajouter 23
- B. Soustraire 29
- C. Soustraire 21
- D. Ajouter 25



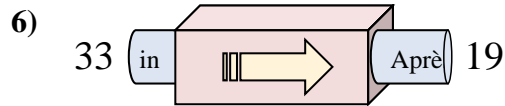
- A. Soustraire 30
- B. Ajouter 33
- C. Ajouter 29
- D. Ajouter 28



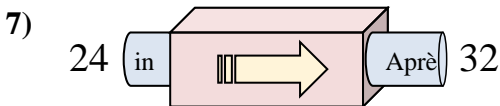
- A. Ajouter 4
- B. Soustraire 2
- C. Soustraire 6
- D. Soustraire 5



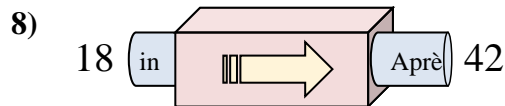
- A. Ajouter 29
- B. Soustraire 39
- C. Soustraire 34
- D. Ajouter 30



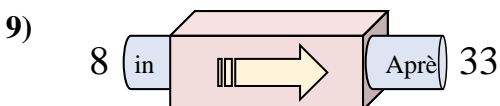
- A. Ajouter 16
- B. Soustraire 17
- C. Soustraire 14
- D. Soustraire 9



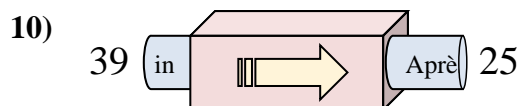
- A. Ajouter 11
- B. Ajouter 8
- C. Soustraire 12
- D. Ajouter 12



- A. Ajouter 24
- B. Ajouter 23
- C. Soustraire 23
- D. Ajouter 21



- A. Ajouter 25
- B. Soustraire 24
- C. Soustraire 26
- D. Ajouter 27



- A. Ajouter 9
- B. Ajouter 14
- C. Soustraire 10
- D. Soustraire 14

1. **D**
2. **D**
3. **D**
4. **C**
5. **C**
6. **C**
7. **B**
8. **A**
9. **A**
10. **D**