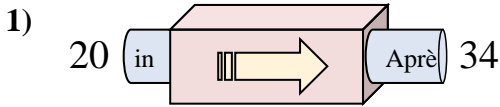
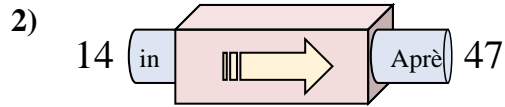




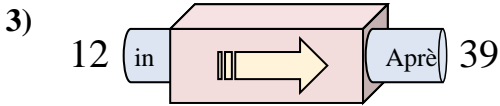
Déterminez la règle appliquée à chaque machine à fonctions.

Réponses

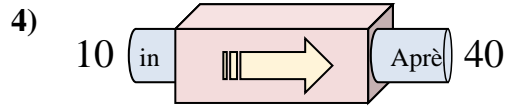
- A. Soustraire 13
- B. Ajouter 14
- C. Ajouter 12
- D. Ajouter 9



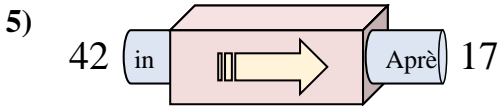
- A. Ajouter 32
- B. Ajouter 33
- C. Soustraire 35
- D. Ajouter 37



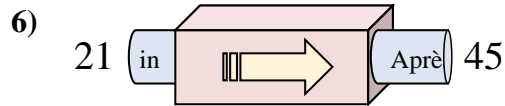
- A. Ajouter 31
- B. Ajouter 27
- C. Ajouter 26
- D. Soustraire 24



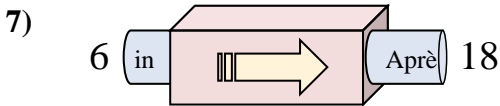
- A. Soustraire 28
- B. Soustraire 31
- C. Ajouter 26
- D. Ajouter 30



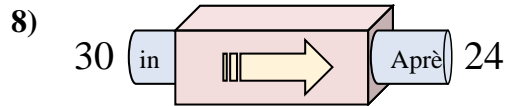
- A. Soustraire 29
- B. Ajouter 24
- C. Soustraire 25
- D. Ajouter 22



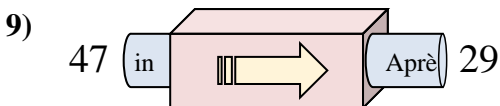
- A. Ajouter 24
- B. Ajouter 27
- C. Soustraire 29
- D. Ajouter 25



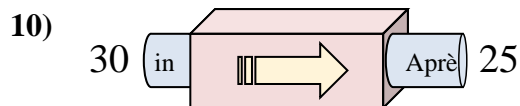
- A. Ajouter 9
- B. Ajouter 12
- C. Soustraire 9
- D. Ajouter 14



- A. Soustraire 6
- B. Ajouter 5
- C. Soustraire 11
- D. Soustraire 10



- A. Ajouter 22
- B. Soustraire 18
- C. Soustraire 21
- D. Soustraire 19

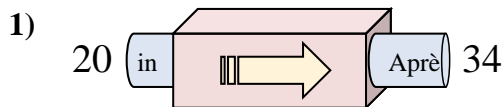


- A. Ajouter 8
- B. Ajouter 10
- C. Soustraire 7
- D. Soustraire 5

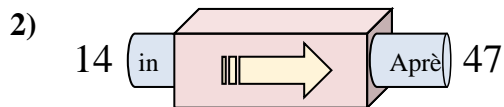
1. _____
2. _____
3. _____
4. _____
5. _____
6. _____
7. _____
8. _____
9. _____
10. _____



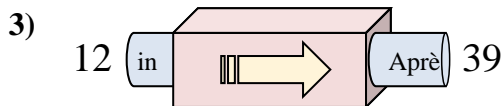
Déterminez la règle appliquée à chaque machine à fonctions.

Réponses

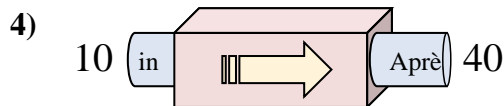
- A. Soustraire 13
- B. Ajouter 14
- C. Ajouter 12
- D. Ajouter 9



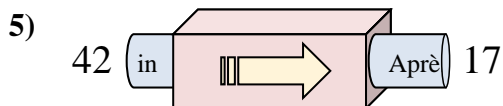
- A. Ajouter 32
- B. Ajouter 33
- C. Soustraire 35
- D. Ajouter 37



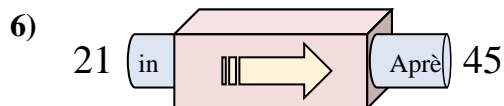
- A. Ajouter 31
- B. Ajouter 27
- C. Ajouter 26
- D. Soustraire 24



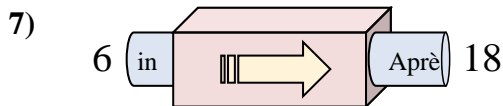
- A. Soustraire 28
- B. Soustraire 31
- C. Ajouter 26
- D. Ajouter 30



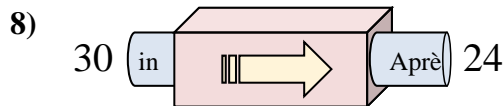
- A. Soustraire 29
- B. Ajouter 24
- C. Soustraire 25
- D. Ajouter 22



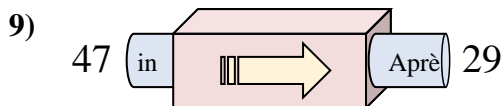
- A. Ajouter 24
- B. Ajouter 27
- C. Soustraire 29
- D. Ajouter 25



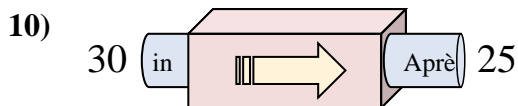
- A. Ajouter 9
- B. Ajouter 12
- C. Soustraire 9
- D. Ajouter 14



- A. Soustraire 6
- B. Ajouter 5
- C. Soustraire 11
- D. Soustraire 10



- A. Ajouter 22
- B. Soustraire 18
- C. Soustraire 21
- D. Soustraire 19



- A. Ajouter 8
- B. Ajouter 10
- C. Soustraire 7
- D. Soustraire 5

1. **B**2. **B**3. **B**4. **D**5. **C**6. **A**7. **B**8. **A**9. **B**10. **D**