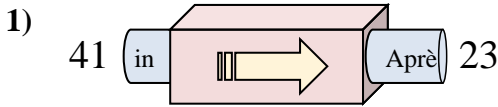
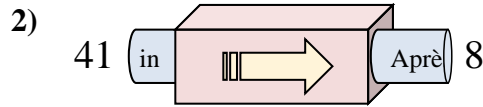




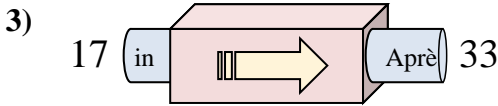
Déterminez la règle appliquée à chaque machine à fonctions.

Réponses

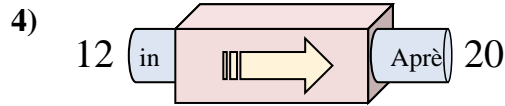
- A. Soustraire 18
- B. Ajouter 21
- C. Ajouter 16
- D. Soustraire 16



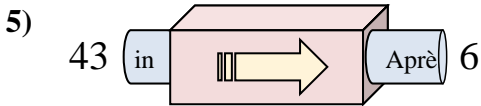
- A. Soustraire 33
- B. Soustraire 29
- C. Ajouter 31
- D. Soustraire 31



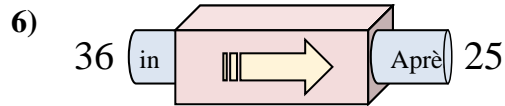
- A. Ajouter 16
- B. Soustraire 18
- C. Ajouter 20
- D. Ajouter 18



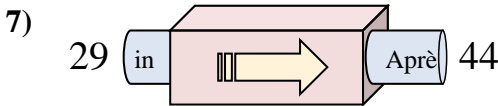
- A. Ajouter 11
- B. Soustraire 7
- C. Ajouter 7
- D. Ajouter 8



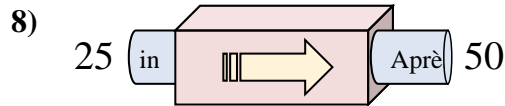
- A. Soustraire 37
- B. Soustraire 38
- C. Soustraire 34
- D. Ajouter 42



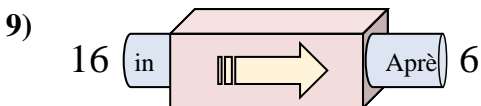
- A. Soustraire 14
- B. Soustraire 15
- C. Ajouter 8
- D. Soustraire 11



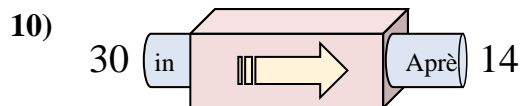
- A. Soustraire 12
- B. Ajouter 16
- C. Ajouter 17
- D. Ajouter 15



- A. Ajouter 30
- B. Soustraire 30
- C. Ajouter 25
- D. Ajouter 26



- A. Soustraire 6
- B. Soustraire 10
- C. Soustraire 15
- D. Soustraire 13

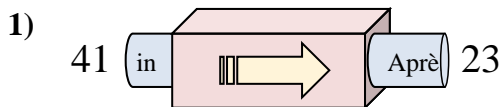


- A. Soustraire 19
- B. Soustraire 12
- C. Soustraire 16
- D. Ajouter 12

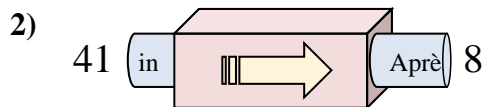
1. _____
2. _____
3. _____
4. _____
5. _____
6. _____
7. _____
8. _____
9. _____
10. _____



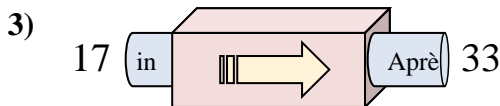
Déterminez la règle appliquée à chaque machine à fonctions.

Réponses

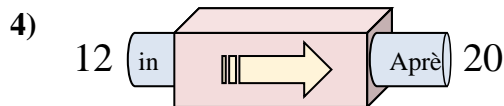
- A. Soustraire 18
- B. Ajouter 21
- C. Ajouter 16
- D. Soustraire 16



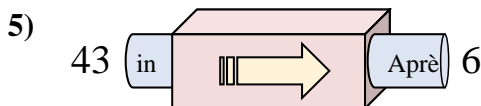
- A. Soustraire 33
- B. Soustraire 29
- C. Ajouter 31
- D. Soustraire 31



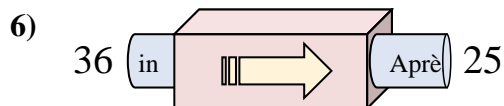
- A. Ajouter 16
- B. Soustraire 18
- C. Ajouter 20
- D. Ajouter 18



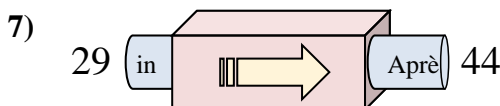
- A. Ajouter 11
- B. Soustraire 7
- C. Ajouter 7
- D. Ajouter 8



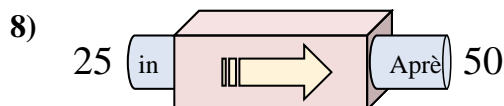
- A. Soustraire 37
- B. Soustraire 38
- C. Soustraire 34
- D. Ajouter 42



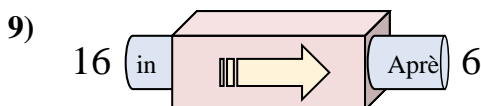
- A. Soustraire 14
- B. Soustraire 15
- C. Ajouter 8
- D. Soustraire 11



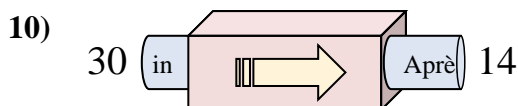
- A. Soustraire 12
- B. Ajouter 16
- C. Ajouter 17
- D. Ajouter 15



- A. Ajouter 30
- B. Soustraire 30
- C. Ajouter 25
- D. Ajouter 26



- A. Soustraire 6
- B. Soustraire 10
- C. Soustraire 15
- D. Soustraire 13



- A. Soustraire 19
- B. Soustraire 12
- C. Soustraire 16
- D. Ajouter 12

1. **A**2. **A**3. **A**4. **D**5. **A**6. **D**7. **D**8. **C**9. **B**10. **C**