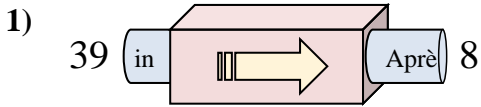
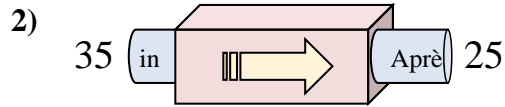




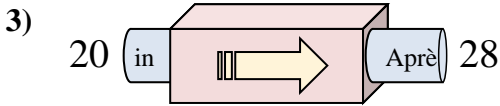
Déterminez la règle appliquée à chaque machine à fonctions.

**Réponses**

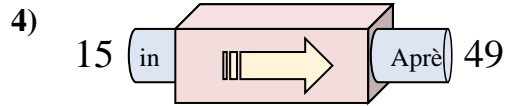
- A. Soustraire 34
- B. Ajouter 28
- C. Ajouter 26
- D. Soustraire 31



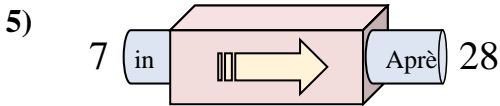
- A. Soustraire 6
- B. Soustraire 14
- C. Soustraire 10
- D. Ajouter 9



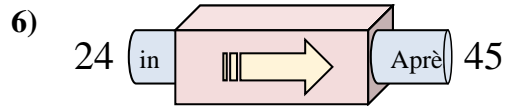
- A. Ajouter 3
- B. Ajouter 4
- C. Ajouter 9
- D. Ajouter 8



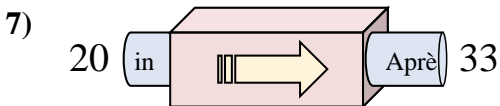
- A. Soustraire 36
- B. Ajouter 29
- C. Ajouter 34
- D. Ajouter 31



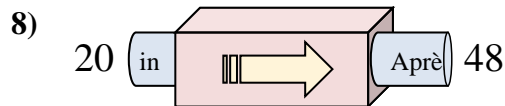
- A. Soustraire 20
- B. Ajouter 23
- C. Ajouter 20
- D. Ajouter 21



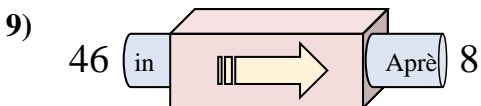
- A. Ajouter 17
- B. Soustraire 22
- C. Ajouter 18
- D. Ajouter 21



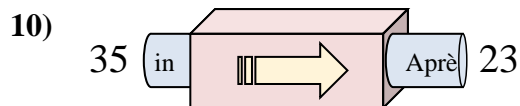
- A. Ajouter 9
- B. Ajouter 15
- C. Ajouter 17
- D. Ajouter 13



- A. Ajouter 28
- B. Soustraire 27
- C. Ajouter 25
- D. Ajouter 29



- A. Soustraire 42
- B. Soustraire 40
- C. Ajouter 34
- D. Soustraire 38

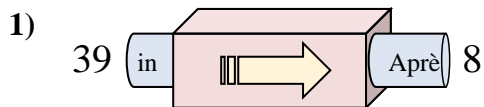


- A. Soustraire 10
- B. Soustraire 12
- C. Ajouter 17
- D. Ajouter 8

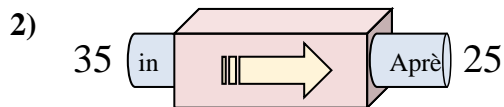
1. \_\_\_\_\_
2. \_\_\_\_\_
3. \_\_\_\_\_
4. \_\_\_\_\_
5. \_\_\_\_\_
6. \_\_\_\_\_
7. \_\_\_\_\_
8. \_\_\_\_\_
9. \_\_\_\_\_
10. \_\_\_\_\_



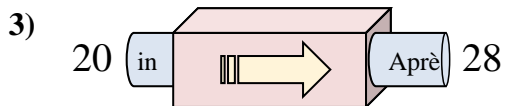
Déterminez la règle appliquée à chaque machine à fonctions.

**Réponses**

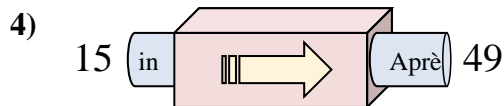
- A. Soustraire 34
- B. Ajouter 28
- C. Ajouter 26
- D. Soustraire 31



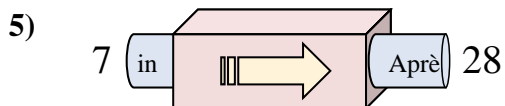
- A. Soustraire 6
- B. Soustraire 14
- C. Soustraire 10
- D. Ajouter 9



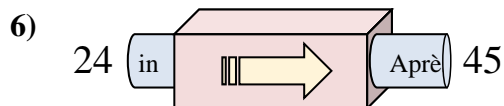
- A. Ajouter 3
- B. Ajouter 4
- C. Ajouter 9
- D. Ajouter 8



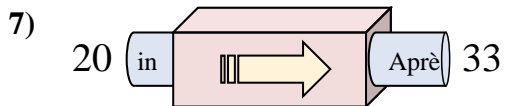
- A. Soustraire 36
- B. Ajouter 29
- C. Ajouter 34
- D. Ajouter 31



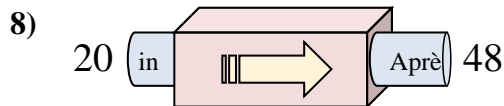
- A. Soustraire 20
- B. Ajouter 23
- C. Ajouter 20
- D. Ajouter 21



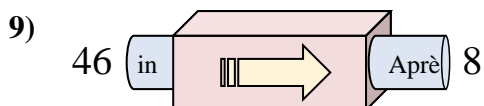
- A. Ajouter 17
- B. Soustraire 22
- C. Ajouter 18
- D. Ajouter 21



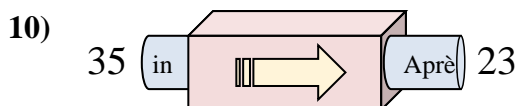
- A. Ajouter 9
- B. Ajouter 15
- C. Ajouter 17
- D. Ajouter 13



- A. Ajouter 28
- B. Soustraire 27
- C. Ajouter 25
- D. Ajouter 29



- A. Soustraire 42
- B. Soustraire 40
- C. Ajouter 34
- D. Soustraire 38



- A. Soustraire 10
- B. Soustraire 12
- C. Ajouter 17
- D. Ajouter 8

1. **D**2. **C**3. **D**4. **C**5. **D**6. **D**7. **D**8. **A**9. **D**10. **B**