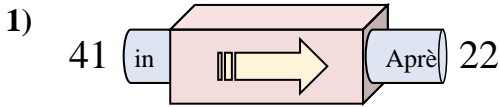
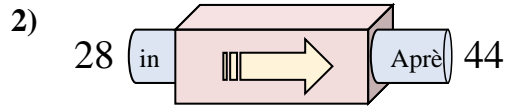




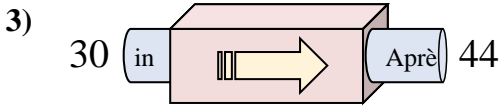
Déterminez la règle appliquée à chaque machine à fonctions.

**Réponses**

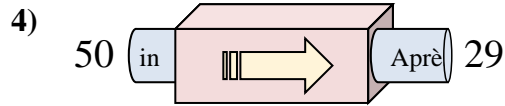
- A. Soustraire 19
- B. Ajouter 16
- C. Soustraire 24
- D. Ajouter 24



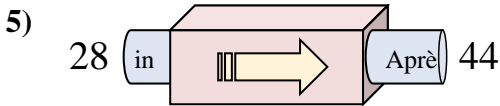
- A. Ajouter 16
- B. Ajouter 18
- C. Soustraire 16
- D. Ajouter 21



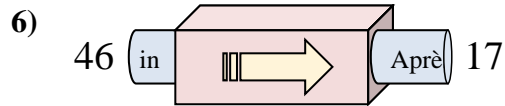
- A. Ajouter 12
- B. Ajouter 17
- C. Soustraire 18
- D. Ajouter 14



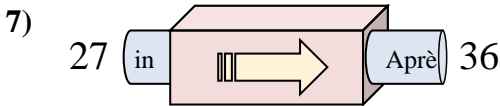
- A. Ajouter 23
- B. Soustraire 21
- C. Ajouter 24
- D. Soustraire 23



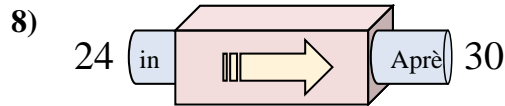
- A. Ajouter 12
- B. Ajouter 19
- C. Ajouter 16
- D. Ajouter 21



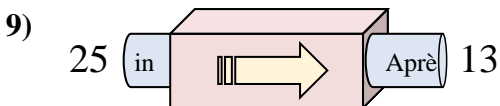
- A. Soustraire 25
- B. Soustraire 29
- C. Ajouter 31
- D. Ajouter 34



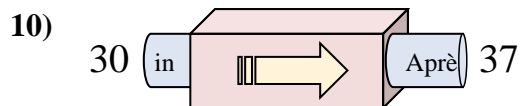
- A. Ajouter 7
- B. Ajouter 6
- C. Ajouter 9
- D. Soustraire 13



- A. Soustraire 7
- B. Ajouter 2
- C. Ajouter 6
- D. Ajouter 10



- A. Ajouter 12
- B. Soustraire 8
- C. Ajouter 11
- D. Soustraire 12

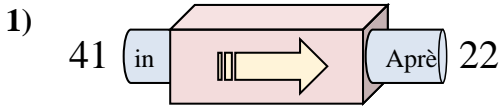


- A. Ajouter 7
- B. Ajouter 9
- C. Ajouter 3
- D. Soustraire 3

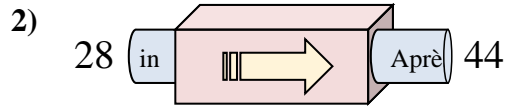
1. \_\_\_\_\_
2. \_\_\_\_\_
3. \_\_\_\_\_
4. \_\_\_\_\_
5. \_\_\_\_\_
6. \_\_\_\_\_
7. \_\_\_\_\_
8. \_\_\_\_\_
9. \_\_\_\_\_
10. \_\_\_\_\_



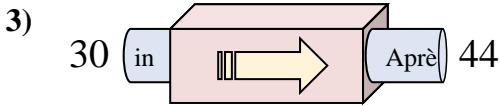
Déterminez la règle appliquée à chaque machine à fonctions.

**Réponses**

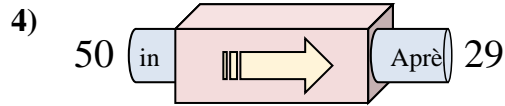
- A. Soustraire 19
- B. Ajouter 16
- C. Soustraire 24
- D. Ajouter 24



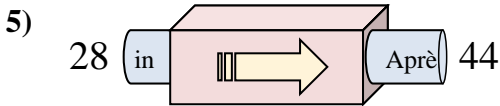
- A. Ajouter 16
- B. Ajouter 18
- C. Soustraire 16
- D. Ajouter 21



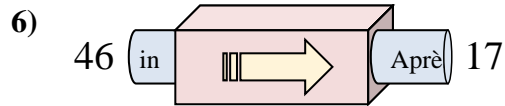
- A. Ajouter 12
- B. Ajouter 17
- C. Soustraire 18
- D. Ajouter 14



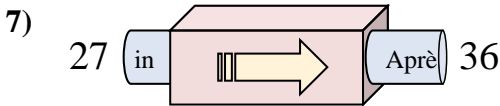
- A. Ajouter 23
- B. Soustraire 21
- C. Ajouter 24
- D. Soustraire 23



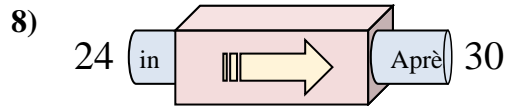
- A. Ajouter 12
- B. Ajouter 19
- C. Ajouter 16
- D. Ajouter 21



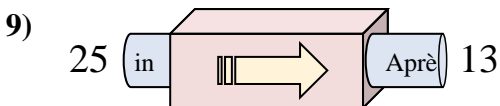
- A. Soustraire 25
- B. Soustraire 29
- C. Ajouter 31
- D. Ajouter 34



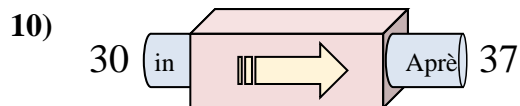
- A. Ajouter 7
- B. Ajouter 6
- C. Ajouter 9
- D. Soustraire 13



- A. Soustraire 7
- B. Ajouter 2
- C. Ajouter 6
- D. Ajouter 10



- A. Ajouter 12
- B. Soustraire 8
- C. Ajouter 11
- D. Soustraire 12



- A. Ajouter 7
- B. Ajouter 9
- C. Ajouter 3
- D. Soustraire 3

1. **A**
2. **A**
3. **D**
4. **B**
5. **C**
6. **B**
7. **C**
8. **C**
9. **D**
10. **A**