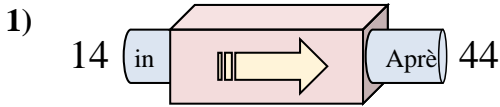
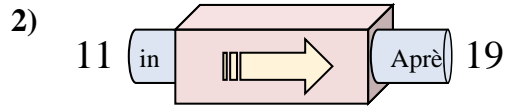




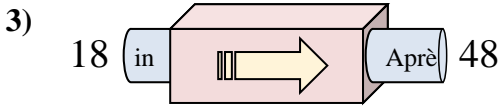
Déterminez la règle appliquée à chaque machine à fonctions.

Réponses

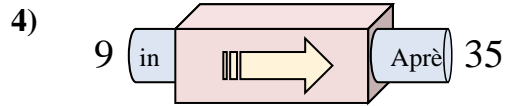
- A. Ajouter 27
- B. Ajouter 30
- C. Ajouter 25
- D. Soustraire 32



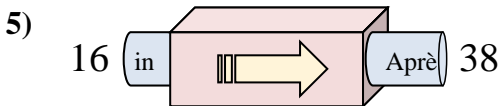
- A. Ajouter 8
- B. Ajouter 6
- C. Soustraire 3
- D. Ajouter 4



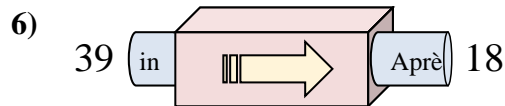
- A. Soustraire 25
- B. Ajouter 30
- C. Ajouter 29
- D. Ajouter 34



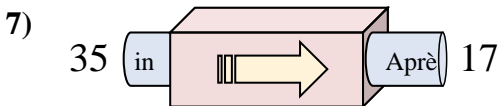
- A. Ajouter 28
- B. Ajouter 26
- C. Soustraire 30
- D. Soustraire 22



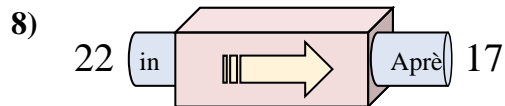
- A. Ajouter 22
- B. Ajouter 27
- C. Ajouter 24
- D. Soustraire 17



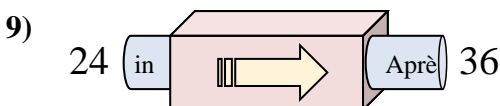
- A. Soustraire 20
- B. Soustraire 23
- C. Soustraire 16
- D. Soustraire 21



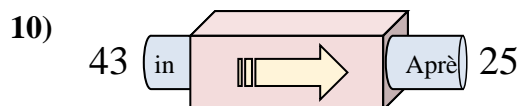
- A. Soustraire 17
- B. Ajouter 21
- C. Soustraire 14
- D. Soustraire 18



- A. Soustraire 10
- B. Ajouter 2
- C. Soustraire 6
- D. Soustraire 5



- A. Soustraire 17
- B. Soustraire 12
- C. Ajouter 12
- D. Ajouter 9

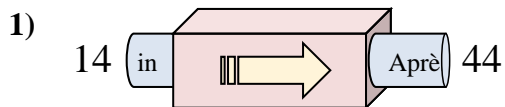


- A. Ajouter 15
- B. Soustraire 16
- C. Ajouter 13
- D. Soustraire 18

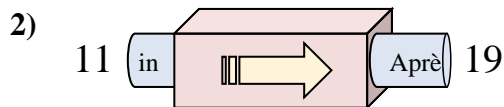
1. _____
2. _____
3. _____
4. _____
5. _____
6. _____
7. _____
8. _____
9. _____
10. _____



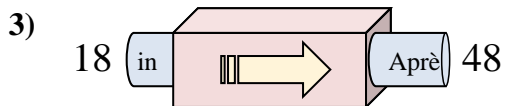
Déterminez la règle appliquée à chaque machine à fonctions.

Réponses

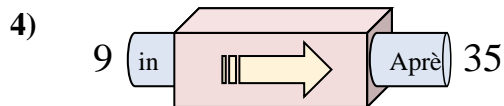
- A. Ajouter 27
- B. Ajouter 30
- C. Ajouter 25
- D. Soustraire 32



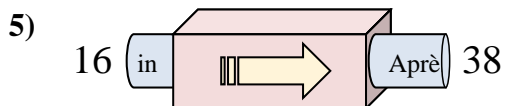
- A. Ajouter 8
- B. Ajouter 6
- C. Soustraire 3
- D. Ajouter 4



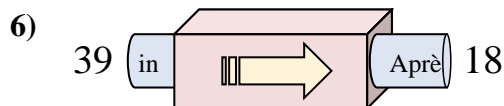
- A. Soustraire 25
- B. Ajouter 30
- C. Ajouter 29
- D. Ajouter 34



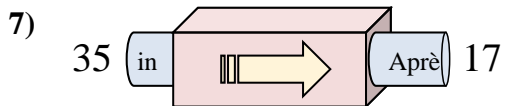
- A. Ajouter 28
- B. Ajouter 26
- C. Soustraire 30
- D. Soustraire 22



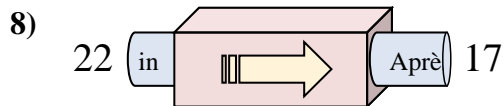
- A. Ajouter 22
- B. Ajouter 27
- C. Ajouter 24
- D. Soustraire 17



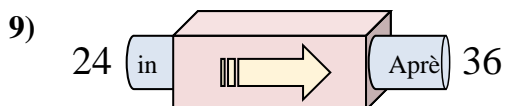
- A. Soustraire 20
- B. Soustraire 23
- C. Soustraire 16
- D. Soustraire 21



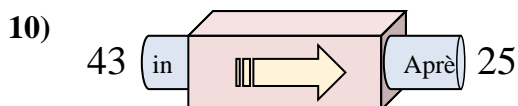
- A. Soustraire 17
- B. Ajouter 21
- C. Soustraire 14
- D. Soustraire 18



- A. Soustraire 10
- B. Ajouter 2
- C. Soustraire 6
- D. Soustraire 5



- A. Soustraire 17
- B. Soustraire 12
- C. Ajouter 12
- D. Ajouter 9



- A. Ajouter 15
- B. Soustraire 16
- C. Ajouter 13
- D. Soustraire 18

1. **B**2. **A**3. **B**4. **B**5. **A**6. **D**7. **D**8. **D**9. **C**10. **D**