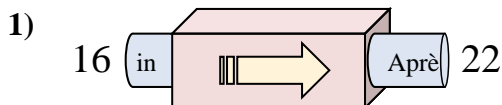
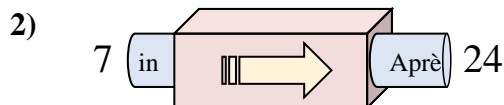




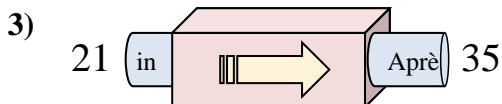
Déterminez la règle appliquée à chaque machine à fonctions.

Réponses

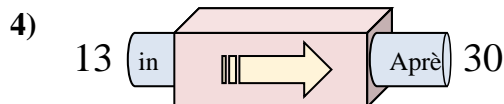
- A. Ajouter 11
- B. Ajouter 7
- C. Ajouter 6
- D. Ajouter 5



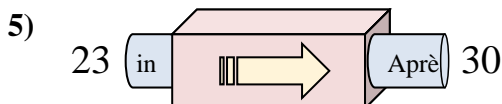
- A. Ajouter 17
- B. Ajouter 18
- C. Soustraire 14
- D. Soustraire 18



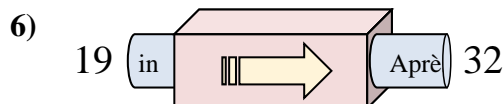
- A. Soustraire 11
- B. Ajouter 18
- C. Ajouter 14
- D. Soustraire 15



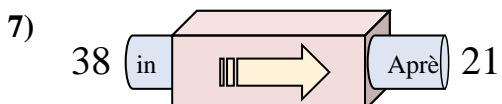
- A. Ajouter 18
- B. Ajouter 21
- C. Ajouter 17
- D. Soustraire 19



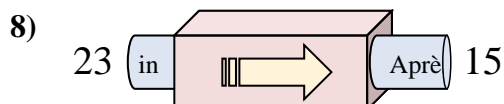
- A. Soustraire 11
- B. Ajouter 7
- C. Soustraire 3
- D. Ajouter 4



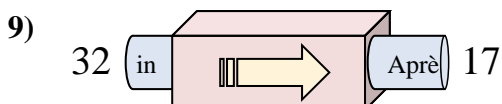
- A. Soustraire 13
- B. Ajouter 13
- C. Ajouter 17
- D. Soustraire 8



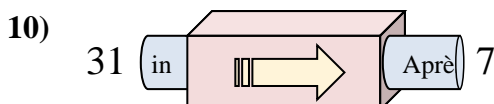
- A. Soustraire 18
- B. Soustraire 17
- C. Ajouter 13
- D. Soustraire 14



- A. Soustraire 9
- B. Soustraire 11
- C. Soustraire 8
- D. Ajouter 9



- A. Soustraire 11
- B. Soustraire 15
- C. Ajouter 10
- D. Soustraire 20

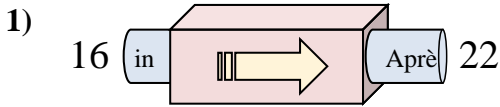


- A. Soustraire 19
- B. Soustraire 25
- C. Soustraire 24
- D. Ajouter 22

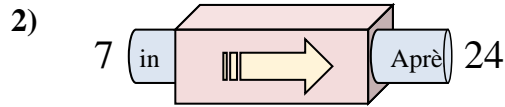
1. _____
2. _____
3. _____
4. _____
5. _____
6. _____
7. _____
8. _____
9. _____
10. _____



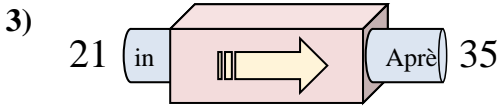
Déterminez la règle appliquée à chaque machine à fonctions.

Réponses

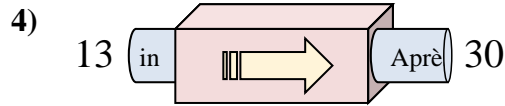
- A. Ajouter 11
- B. Ajouter 7
- C. Ajouter 6
- D. Ajouter 5



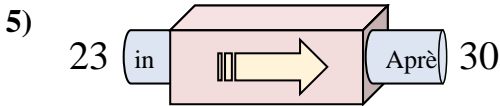
- A. Ajouter 17
- B. Ajouter 18
- C. Soustraire 14
- D. Soustraire 18



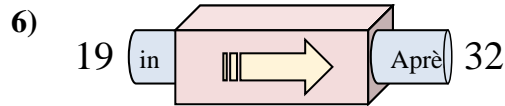
- A. Soustraire 11
- B. Ajouter 18
- C. Ajouter 14
- D. Soustraire 15



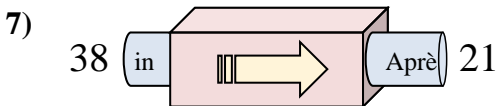
- A. Ajouter 18
- B. Ajouter 21
- C. Ajouter 17
- D. Soustraire 19



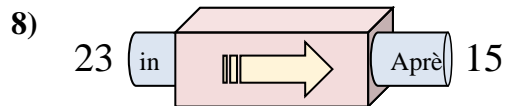
- A. Soustraire 11
- B. Ajouter 7
- C. Soustraire 3
- D. Ajouter 4



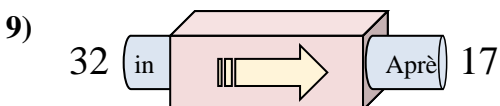
- A. Soustraire 13
- B. Ajouter 13
- C. Ajouter 17
- D. Soustraire 8



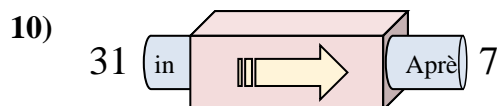
- A. Soustraire 18
- B. Soustraire 17
- C. Ajouter 13
- D. Soustraire 14



- A. Soustraire 9
- B. Soustraire 11
- C. Soustraire 8
- D. Ajouter 9



- A. Soustraire 11
- B. Soustraire 15
- C. Ajouter 10
- D. Soustraire 20

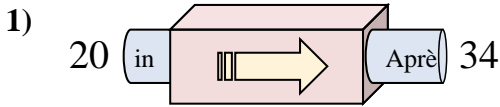


- A. Soustraire 19
- B. Soustraire 25
- C. Soustraire 24
- D. Ajouter 22

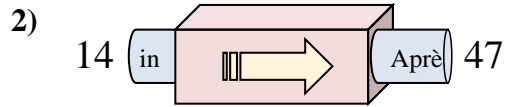
1. **C**
2. **A**
3. **C**
4. **C**
5. **B**
6. **B**
7. **B**
8. **C**
9. **B**
10. **C**



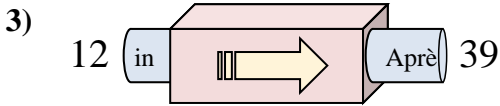
Déterminez la règle appliquée à chaque machine à fonctions.

Réponses

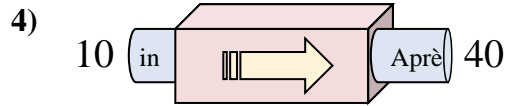
- A. Soustraire 13
- B. Ajouter 14
- C. Ajouter 12
- D. Ajouter 9



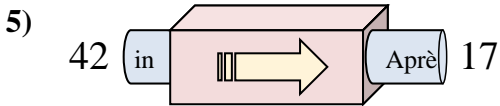
- A. Ajouter 32
- B. Ajouter 33
- C. Soustraire 35
- D. Ajouter 37



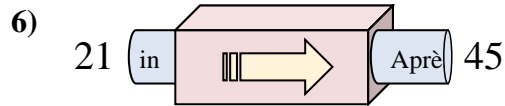
- A. Ajouter 31
- B. Ajouter 27
- C. Ajouter 26
- D. Soustraire 24



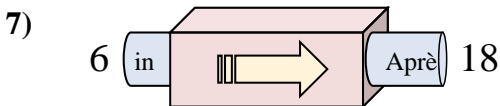
- A. Soustraire 28
- B. Soustraire 31
- C. Ajouter 26
- D. Ajouter 30



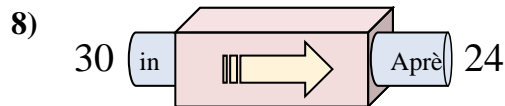
- A. Soustraire 29
- B. Ajouter 24
- C. Soustraire 25
- D. Ajouter 22



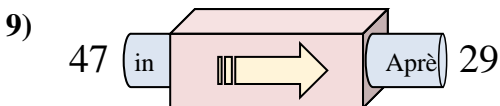
- A. Ajouter 24
- B. Ajouter 27
- C. Soustraire 29
- D. Ajouter 25



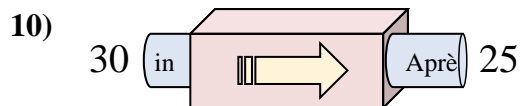
- A. Ajouter 9
- B. Ajouter 12
- C. Soustraire 9
- D. Ajouter 14



- A. Soustraire 6
- B. Ajouter 5
- C. Soustraire 11
- D. Soustraire 10



- A. Ajouter 22
- B. Soustraire 18
- C. Soustraire 21
- D. Soustraire 19

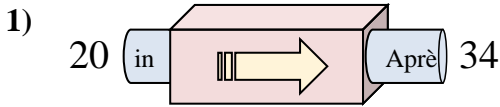


- A. Ajouter 8
- B. Ajouter 10
- C. Soustraire 7
- D. Soustraire 5

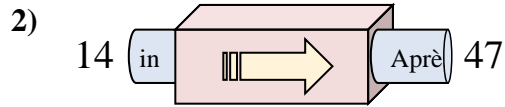
1. _____
2. _____
3. _____
4. _____
5. _____
6. _____
7. _____
8. _____
9. _____
10. _____



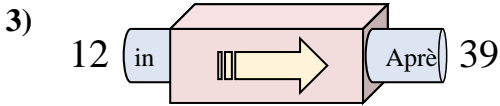
Déterminez la règle appliquée à chaque machine à fonctions.

Réponses

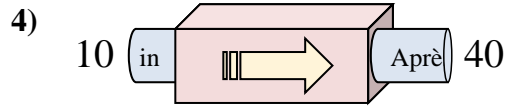
- A. Soustraire 13
- B. Ajouter 14
- C. Ajouter 12
- D. Ajouter 9



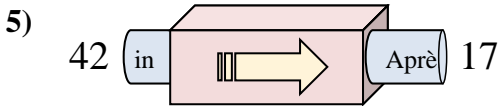
- A. Ajouter 32
- B. Ajouter 33
- C. Soustraire 35
- D. Ajouter 37



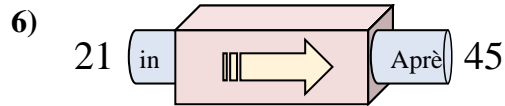
- A. Ajouter 31
- B. Ajouter 27
- C. Ajouter 26
- D. Soustraire 24



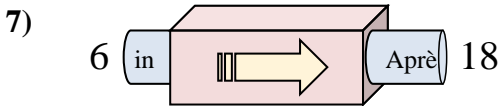
- A. Soustraire 28
- B. Soustraire 31
- C. Ajouter 26
- D. Ajouter 30



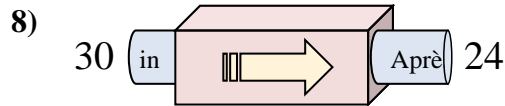
- A. Soustraire 29
- B. Ajouter 24
- C. Soustraire 25
- D. Ajouter 22



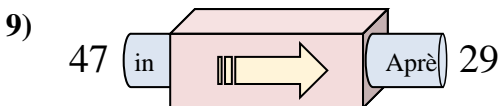
- A. Ajouter 24
- B. Ajouter 27
- C. Soustraire 29
- D. Ajouter 25



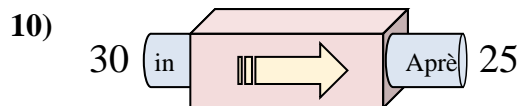
- A. Ajouter 9
- B. Ajouter 12
- C. Soustraire 9
- D. Ajouter 14



- A. Soustraire 6
- B. Ajouter 5
- C. Soustraire 11
- D. Soustraire 10



- A. Ajouter 22
- B. Soustraire 18
- C. Soustraire 21
- D. Soustraire 19

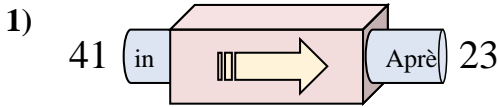


- A. Ajouter 8
- B. Ajouter 10
- C. Soustraire 7
- D. Soustraire 5

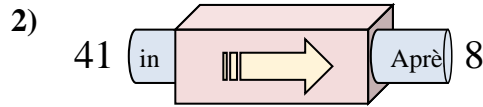
1. **B**
2. **B**
3. **B**
4. **D**
5. **C**
6. **A**
7. **B**
8. **A**
9. **B**
10. **D**



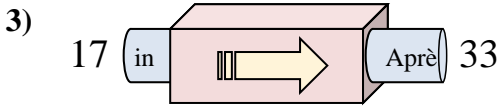
Déterminez la règle appliquée à chaque machine à fonctions.

Réponses

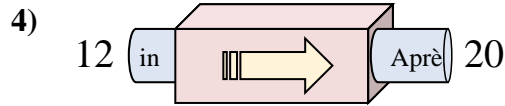
- A. Soustraire 18
- B. Ajouter 21
- C. Ajouter 16
- D. Soustraire 16



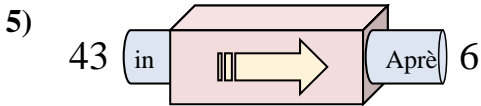
- A. Soustraire 33
- B. Soustraire 29
- C. Ajouter 31
- D. Soustraire 31



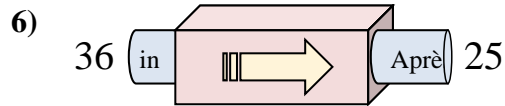
- A. Ajouter 16
- B. Soustraire 18
- C. Ajouter 20
- D. Ajouter 18



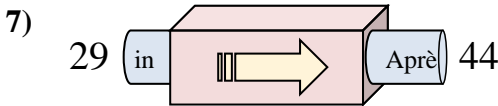
- A. Ajouter 11
- B. Soustraire 7
- C. Ajouter 7
- D. Ajouter 8



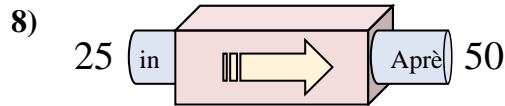
- A. Soustraire 37
- B. Soustraire 38
- C. Soustraire 34
- D. Ajouter 42



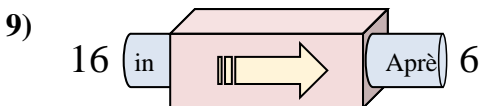
- A. Soustraire 14
- B. Soustraire 15
- C. Ajouter 8
- D. Soustraire 11



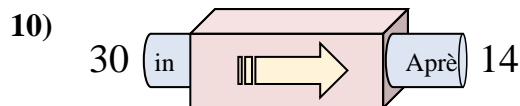
- A. Soustraire 12
- B. Ajouter 16
- C. Ajouter 17
- D. Ajouter 15



- A. Ajouter 30
- B. Soustraire 30
- C. Ajouter 25
- D. Ajouter 26



- A. Soustraire 6
- B. Soustraire 10
- C. Soustraire 15
- D. Soustraire 13

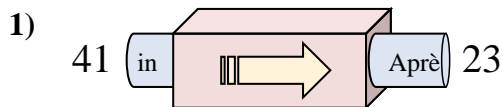


- A. Soustraire 19
- B. Soustraire 12
- C. Soustraire 16
- D. Ajouter 12

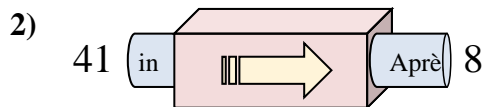
1. _____
2. _____
3. _____
4. _____
5. _____
6. _____
7. _____
8. _____
9. _____
10. _____



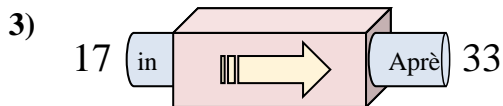
Déterminez la règle appliquée à chaque machine à fonctions.

Réponses

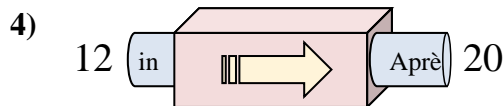
- A. Soustraire 18
- B. Ajouter 21
- C. Ajouter 16
- D. Soustraire 16



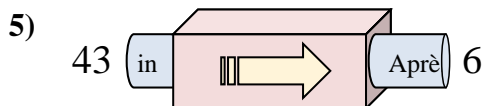
- A. Soustraire 33
- B. Soustraire 29
- C. Ajouter 31
- D. Soustraire 31



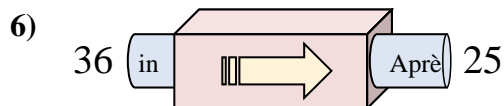
- A. Ajouter 16
- B. Soustraire 18
- C. Ajouter 20
- D. Ajouter 18



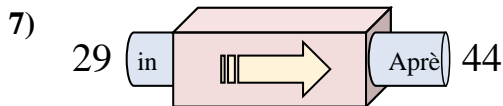
- A. Ajouter 11
- B. Soustraire 7
- C. Ajouter 7
- D. Ajouter 8



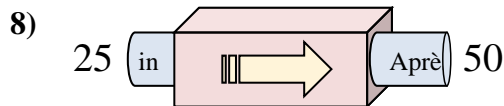
- A. Soustraire 37
- B. Soustraire 38
- C. Soustraire 34
- D. Ajouter 42



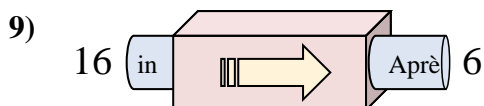
- A. Soustraire 14
- B. Soustraire 15
- C. Ajouter 8
- D. Soustraire 11



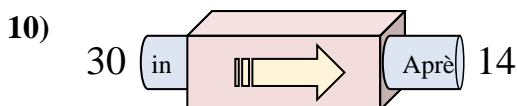
- A. Soustraire 12
- B. Ajouter 16
- C. Ajouter 17
- D. Ajouter 15



- A. Ajouter 30
- B. Soustraire 30
- C. Ajouter 25
- D. Ajouter 26



- A. Soustraire 6
- B. Soustraire 10
- C. Soustraire 15
- D. Soustraire 13

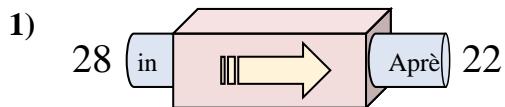


- A. Soustraire 19
- B. Soustraire 12
- C. Soustraire 16
- D. Ajouter 12

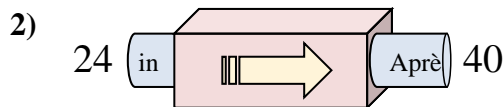
1. **A**2. **A**3. **A**4. **D**5. **A**6. **D**7. **D**8. **C**9. **B**10. **C**



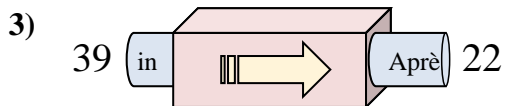
Déterminez la règle appliquée à chaque machine à fonctions.

Réponses

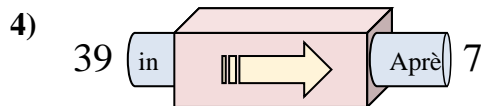
- A. Soustraire 5
- B. Soustraire 11
- C. Soustraire 6
- D. Ajouter 5



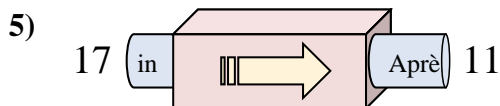
- A. Ajouter 20
- B. Ajouter 17
- C. Soustraire 19
- D. Ajouter 16



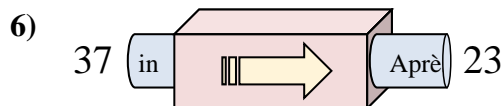
- A. Ajouter 17
- B. Soustraire 17
- C. Soustraire 20
- D. Soustraire 19



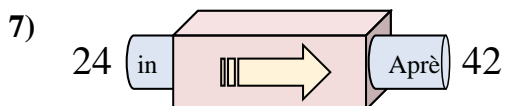
- A. Soustraire 30
- B. Soustraire 35
- C. Soustraire 32
- D. Soustraire 34



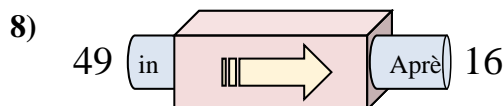
- A. Ajouter 9
- B. Soustraire 8
- C. Soustraire 6
- D. Soustraire 2



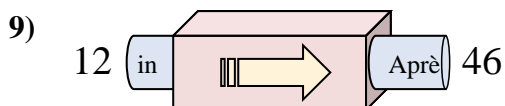
- A. Soustraire 12
- B. Ajouter 10
- C. Soustraire 14
- D. Soustraire 15



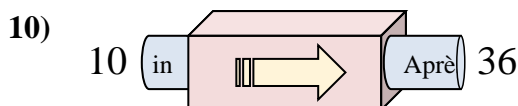
- A. Ajouter 18
- B. Ajouter 15
- C. Ajouter 22
- D. Ajouter 14



- A. Soustraire 33
- B. Soustraire 32
- C. Ajouter 32
- D. Ajouter 30



- A. Ajouter 37
- B. Ajouter 32
- C. Ajouter 34
- D. Ajouter 38

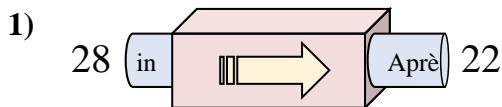


- A. Ajouter 29
- B. Ajouter 26
- C. Soustraire 29
- D. Ajouter 30

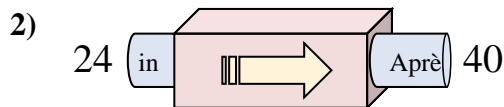
1. _____
2. _____
3. _____
4. _____
5. _____
6. _____
7. _____
8. _____
9. _____
10. _____



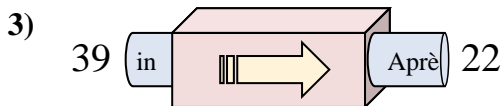
Déterminez la règle appliquée à chaque machine à fonctions.

Réponses

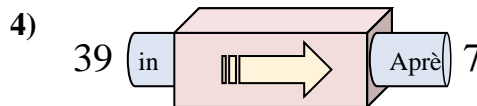
- A. Soustraire 5
- B. Soustraire 11
- C. Soustraire 6
- D. Ajouter 5



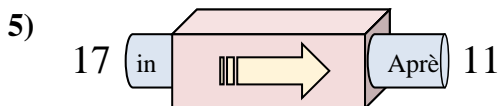
- A. Ajouter 20
- B. Ajouter 17
- C. Soustraire 19
- D. Ajouter 16



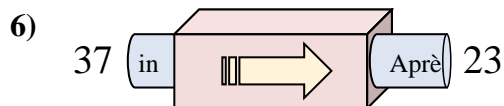
- A. Ajouter 17
- B. Soustraire 17
- C. Soustraire 20
- D. Soustraire 19



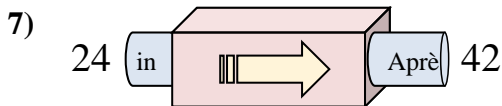
- A. Soustraire 30
- B. Soustraire 35
- C. Soustraire 32
- D. Soustraire 34



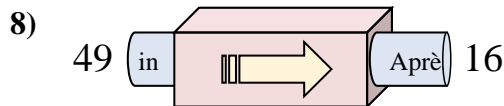
- A. Ajouter 9
- B. Soustraire 8
- C. Soustraire 6
- D. Soustraire 2



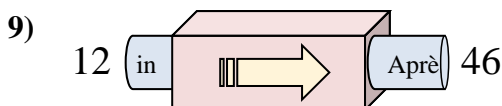
- A. Soustraire 12
- B. Ajouter 10
- C. Soustraire 14
- D. Soustraire 15



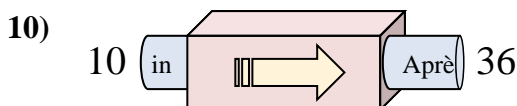
- A. Ajouter 18
- B. Ajouter 15
- C. Ajouter 22
- D. Ajouter 14



- A. Soustraire 33
- B. Soustraire 32
- C. Ajouter 32
- D. Ajouter 30



- A. Ajouter 37
- B. Ajouter 32
- C. Ajouter 34
- D. Ajouter 38

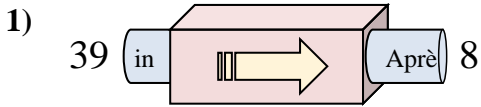


- A. Ajouter 29
- B. Ajouter 26
- C. Soustraire 29
- D. Ajouter 30

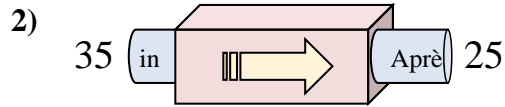
1. **C**2. **D**3. **B**4. **C**5. **C**6. **C**7. **A**8. **A**9. **C**10. **B**



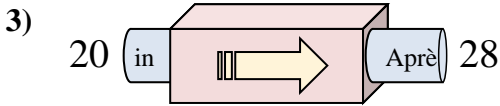
Déterminez la règle appliquée à chaque machine à fonctions.

Réponses

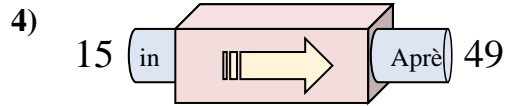
- A. Soustraire 34
- B. Ajouter 28
- C. Ajouter 26
- D. Soustraire 31



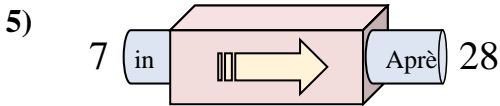
- A. Soustraire 6
- B. Soustraire 14
- C. Soustraire 10
- D. Ajouter 9



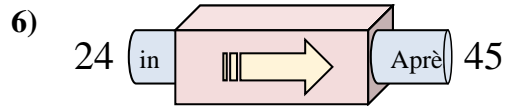
- A. Ajouter 3
- B. Ajouter 4
- C. Ajouter 9
- D. Ajouter 8



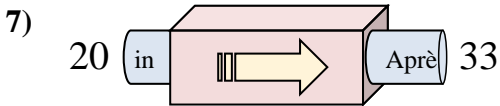
- A. Soustraire 36
- B. Ajouter 29
- C. Ajouter 34
- D. Ajouter 31



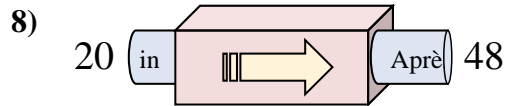
- A. Soustraire 20
- B. Ajouter 23
- C. Ajouter 20
- D. Ajouter 21



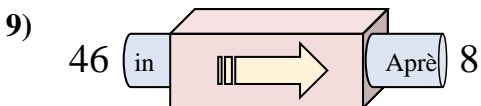
- A. Ajouter 17
- B. Soustraire 22
- C. Ajouter 18
- D. Ajouter 21



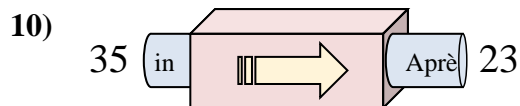
- A. Ajouter 9
- B. Ajouter 15
- C. Ajouter 17
- D. Ajouter 13



- A. Ajouter 28
- B. Soustraire 27
- C. Ajouter 25
- D. Ajouter 29



- A. Soustraire 42
- B. Soustraire 40
- C. Ajouter 34
- D. Soustraire 38

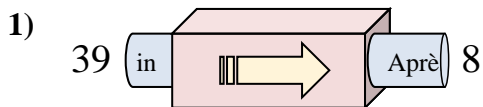


- A. Soustraire 10
- B. Soustraire 12
- C. Ajouter 17
- D. Ajouter 8

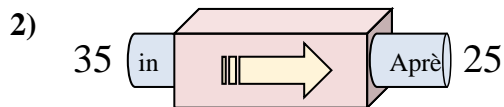
1. _____
2. _____
3. _____
4. _____
5. _____
6. _____
7. _____
8. _____
9. _____
10. _____



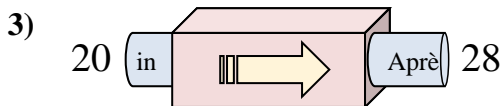
Déterminez la règle appliquée à chaque machine à fonctions.

Réponses

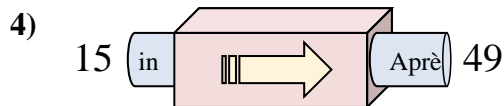
- A. Soustraire 34
- B. Ajouter 28
- C. Ajouter 26
- D. Soustraire 31



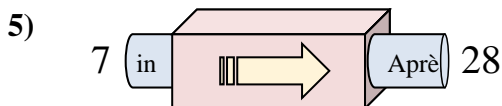
- A. Soustraire 6
- B. Soustraire 14
- C. Soustraire 10
- D. Ajouter 9



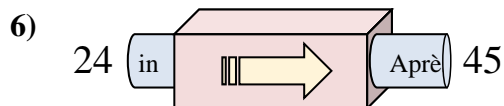
- A. Ajouter 3
- B. Ajouter 4
- C. Ajouter 9
- D. Ajouter 8



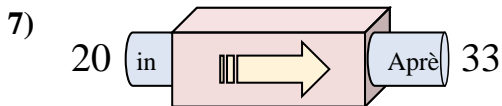
- A. Soustraire 36
- B. Ajouter 29
- C. Ajouter 34
- D. Ajouter 31



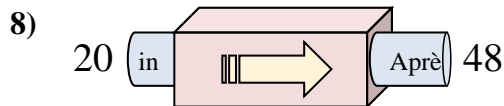
- A. Soustraire 20
- B. Ajouter 23
- C. Ajouter 20
- D. Ajouter 21



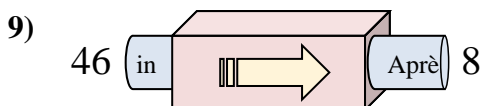
- A. Ajouter 17
- B. Soustraire 22
- C. Ajouter 18
- D. Ajouter 21



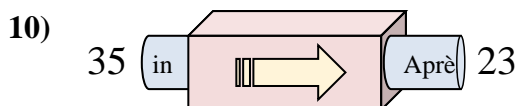
- A. Ajouter 9
- B. Ajouter 15
- C. Ajouter 17
- D. Ajouter 13



- A. Ajouter 28
- B. Soustraire 27
- C. Ajouter 25
- D. Ajouter 29



- A. Soustraire 42
- B. Soustraire 40
- C. Ajouter 34
- D. Soustraire 38

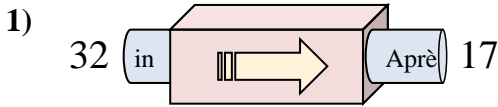


- A. Soustraire 10
- B. Soustraire 12
- C. Ajouter 17
- D. Ajouter 8

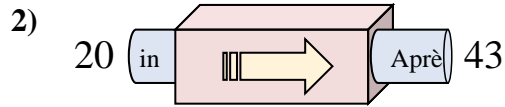
1. **D**2. **C**3. **D**4. **C**5. **D**6. **D**7. **D**8. **A**9. **D**10. **B**



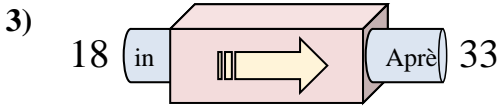
Déterminez la règle appliquée à chaque machine à fonctions.

Réponses

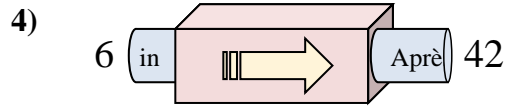
- A. Soustraire 20
- B. Soustraire 14
- C. Ajouter 12
- D. Soustraire 15



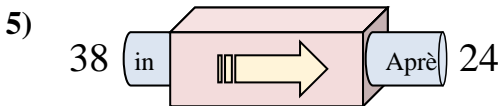
- A. Ajouter 24
- B. Ajouter 21
- C. Ajouter 20
- D. Ajouter 23



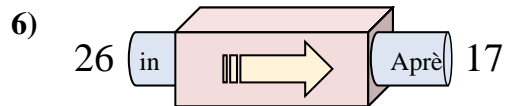
- A. Ajouter 15
- B. Soustraire 19
- C. Ajouter 17
- D. Ajouter 10



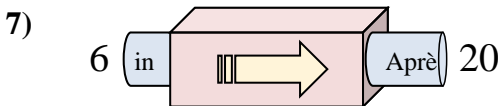
- A. Ajouter 31
- B. Soustraire 31
- C. Ajouter 36
- D. Soustraire 40



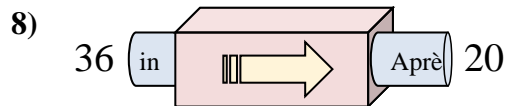
- A. Soustraire 12
- B. Soustraire 14
- C. Soustraire 13
- D. Ajouter 11



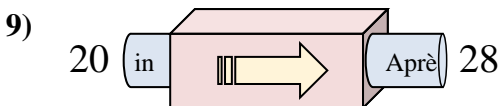
- A. Ajouter 6
- B. Soustraire 8
- C. Soustraire 9
- D. Soustraire 4



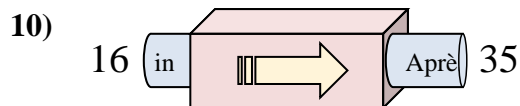
- A. Soustraire 13
- B. Soustraire 14
- C. Ajouter 18
- D. Ajouter 14



- A. Soustraire 16
- B. Soustraire 11
- C. Ajouter 16
- D. Soustraire 13



- A. Ajouter 5
- B. Ajouter 8
- C. Soustraire 11
- D. Ajouter 7

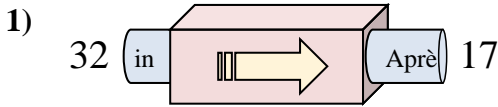


- A. Ajouter 24
- B. Ajouter 19
- C. Soustraire 16
- D. Soustraire 24

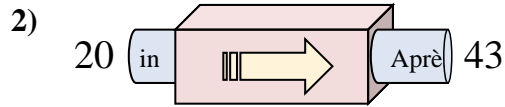
1. _____
2. _____
3. _____
4. _____
5. _____
6. _____
7. _____
8. _____
9. _____
10. _____



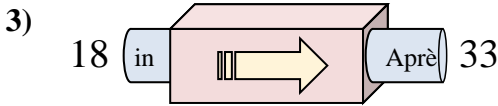
Déterminez la règle appliquée à chaque machine à fonctions.

Réponses

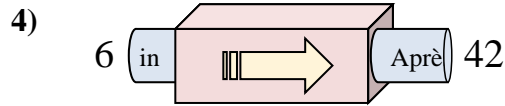
- A. Soustraire 20
- B. Soustraire 14
- C. Ajouter 12
- D. Soustraire 15



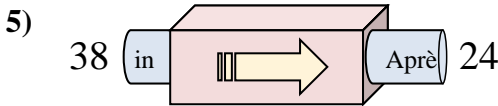
- A. Ajouter 24
- B. Ajouter 21
- C. Ajouter 20
- D. Ajouter 23



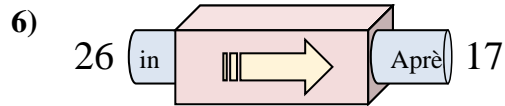
- A. Ajouter 15
- B. Soustraire 19
- C. Ajouter 17
- D. Ajouter 10



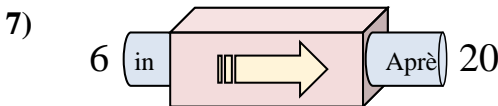
- A. Ajouter 31
- B. Soustraire 31
- C. Ajouter 36
- D. Soustraire 40



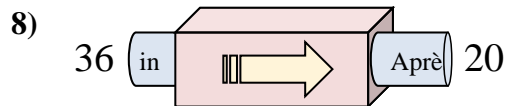
- A. Soustraire 12
- B. Soustraire 14
- C. Soustraire 13
- D. Ajouter 11



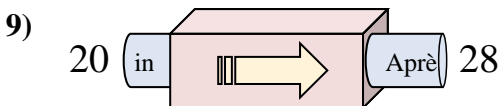
- A. Ajouter 6
- B. Soustraire 8
- C. Soustraire 9
- D. Soustraire 4



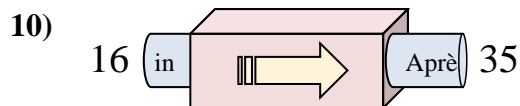
- A. Soustraire 13
- B. Soustraire 14
- C. Ajouter 18
- D. Ajouter 14



- A. Soustraire 16
- B. Soustraire 11
- C. Ajouter 16
- D. Soustraire 13



- A. Ajouter 5
- B. Ajouter 8
- C. Soustraire 11
- D. Ajouter 7

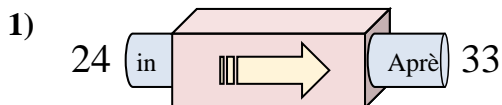


- A. Ajouter 24
- B. Ajouter 19
- C. Soustraire 16
- D. Soustraire 24

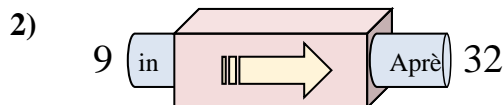
1. **D**
2. **D**
3. **A**
4. **C**
5. **B**
6. **C**
7. **D**
8. **A**
9. **B**
10. **B**



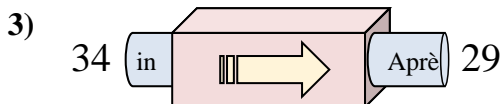
Déterminez la règle appliquée à chaque machine à fonctions.

Réponses

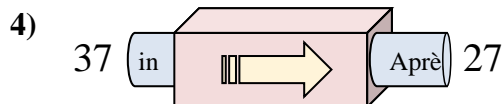
- A. Ajouter 12
- B. Soustraire 8
- C. Ajouter 13
- D. Ajouter 9



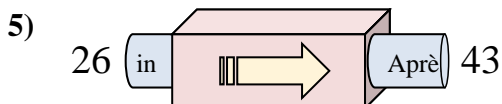
- A. Ajouter 25
- B. Ajouter 23
- C. Ajouter 26
- D. Soustraire 19



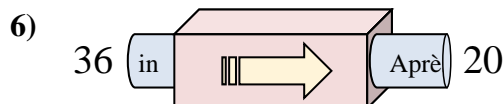
- A. Ajouter 7
- B. Soustraire 5
- C. Soustraire 6
- D. Ajouter 3



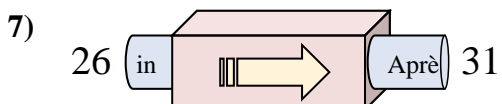
- A. Ajouter 13
- B. Soustraire 10
- C. Soustraire 15
- D. Soustraire 13



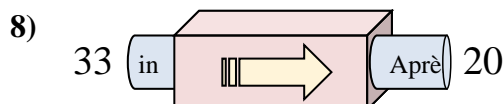
- A. Ajouter 14
- B. Soustraire 22
- C. Ajouter 15
- D. Ajouter 17



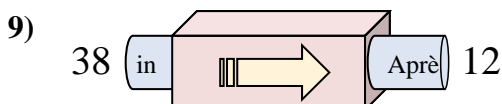
- A. Soustraire 16
- B. Ajouter 19
- C. Ajouter 21
- D. Soustraire 17



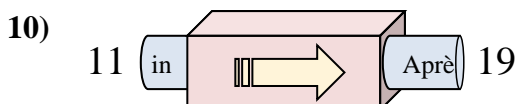
- A. Ajouter 5
- B. Soustraire 7
- C. Ajouter 7
- D. Soustraire 4



- A. Soustraire 16
- B. Ajouter 16
- C. Soustraire 8
- D. Soustraire 13



- A. Soustraire 29
- B. Soustraire 30
- C. Soustraire 26
- D. Ajouter 21



- A. Ajouter 8
- B. Ajouter 9
- C. Soustraire 13
- D. Ajouter 5

1. _____

2. _____

3. _____

4. _____

5. _____

6. _____

7. _____

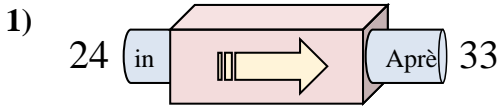
8. _____

9. _____

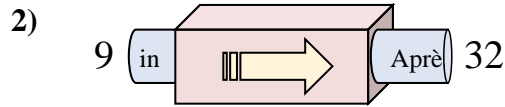
10. _____



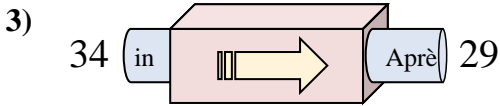
Déterminez la règle appliquée à chaque machine à fonctions.

Réponses

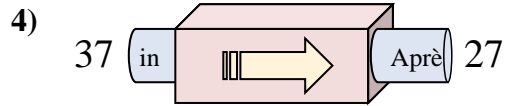
- A. Ajouter 12
- B. Soustraire 8
- C. Ajouter 13
- D. Ajouter 9



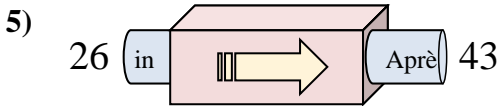
- A. Ajouter 25
- B. Ajouter 23
- C. Ajouter 26
- D. Soustraire 19



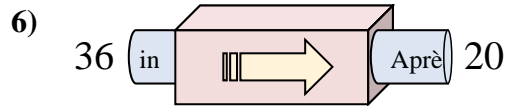
- A. Ajouter 7
- B. Soustraire 5
- C. Soustraire 6
- D. Ajouter 3



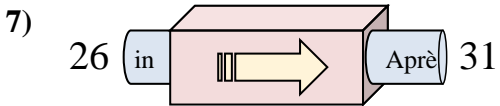
- A. Ajouter 13
- B. Soustraire 10
- C. Soustraire 15
- D. Soustraire 13



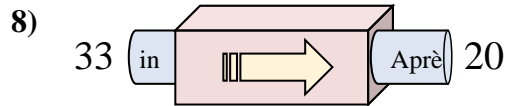
- A. Ajouter 14
- B. Soustraire 22
- C. Ajouter 15
- D. Ajouter 17



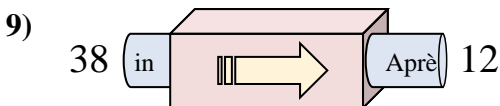
- A. Soustraire 16
- B. Ajouter 19
- C. Ajouter 21
- D. Soustraire 17



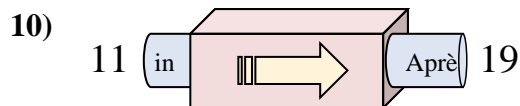
- A. Ajouter 5
- B. Soustraire 7
- C. Ajouter 7
- D. Soustraire 4



- A. Soustraire 16
- B. Ajouter 16
- C. Soustraire 8
- D. Soustraire 13



- A. Soustraire 29
- B. Soustraire 30
- C. Soustraire 26
- D. Ajouter 21

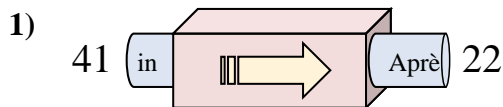


- A. Ajouter 8
- B. Ajouter 9
- C. Soustraire 13
- D. Ajouter 5

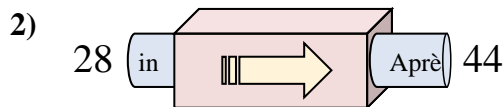
1. **D**
2. **B**
3. **B**
4. **B**
5. **D**
6. **A**
7. **A**
8. **D**
9. **C**
10. **A**



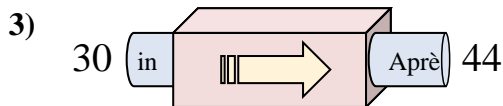
Déterminez la règle appliquée à chaque machine à fonctions.

Réponses

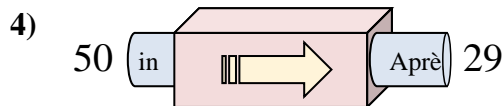
- A. Soustraire 19
- B. Ajouter 16
- C. Soustraire 24
- D. Ajouter 24



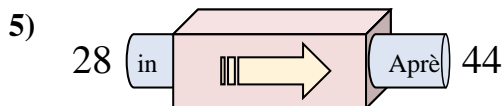
- A. Ajouter 16
- B. Ajouter 18
- C. Soustraire 16
- D. Ajouter 21



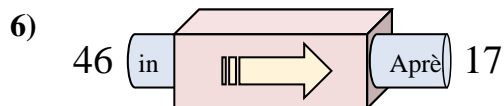
- A. Ajouter 12
- B. Ajouter 17
- C. Soustraire 18
- D. Ajouter 14



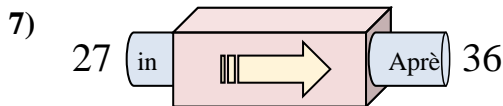
- A. Ajouter 23
- B. Soustraire 21
- C. Ajouter 24
- D. Soustraire 23



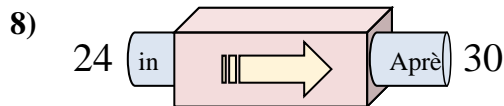
- A. Ajouter 12
- B. Ajouter 19
- C. Ajouter 16
- D. Ajouter 21



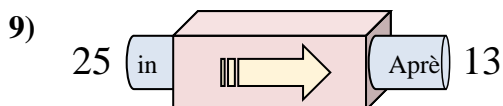
- A. Soustraire 25
- B. Soustraire 29
- C. Ajouter 31
- D. Ajouter 34



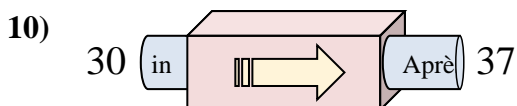
- A. Ajouter 7
- B. Ajouter 6
- C. Ajouter 9
- D. Soustraire 13



- A. Soustraire 7
- B. Ajouter 2
- C. Ajouter 6
- D. Ajouter 10



- A. Ajouter 12
- B. Soustraire 8
- C. Ajouter 11
- D. Soustraire 12

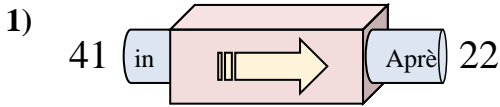


- A. Ajouter 7
- B. Ajouter 9
- C. Ajouter 3
- D. Soustraire 3

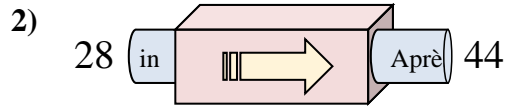
1. _____
2. _____
3. _____
4. _____
5. _____
6. _____
7. _____
8. _____
9. _____
10. _____



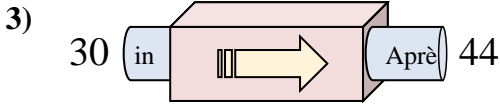
Déterminez la règle appliquée à chaque machine à fonctions.

Réponses

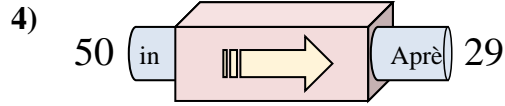
- A. Soustraire 19
- B. Ajouter 16
- C. Soustraire 24
- D. Ajouter 24



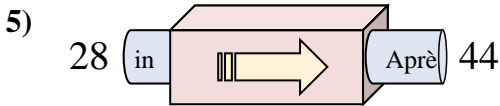
- A. Ajouter 16
- B. Ajouter 18
- C. Soustraire 16
- D. Ajouter 21



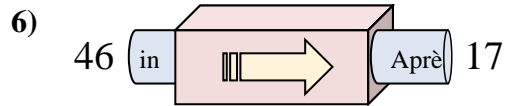
- A. Ajouter 12
- B. Ajouter 17
- C. Soustraire 18
- D. Ajouter 14



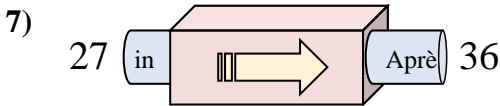
- A. Ajouter 23
- B. Soustraire 21
- C. Ajouter 24
- D. Soustraire 23



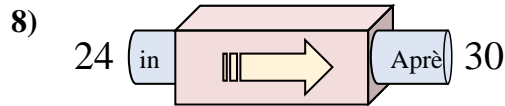
- A. Ajouter 12
- B. Ajouter 19
- C. Ajouter 16
- D. Ajouter 21



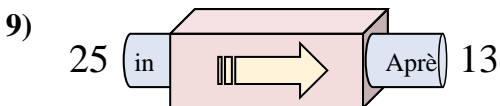
- A. Soustraire 25
- B. Soustraire 29
- C. Ajouter 31
- D. Ajouter 34



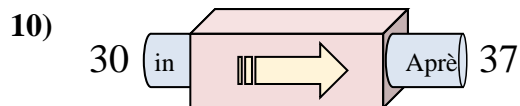
- A. Ajouter 7
- B. Ajouter 6
- C. Ajouter 9
- D. Soustraire 13



- A. Soustraire 7
- B. Ajouter 2
- C. Ajouter 6
- D. Ajouter 10



- A. Ajouter 12
- B. Soustraire 8
- C. Ajouter 11
- D. Soustraire 12

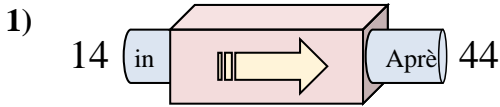


- A. Ajouter 7
- B. Ajouter 9
- C. Ajouter 3
- D. Soustraire 3

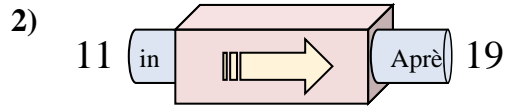
- 1. **A**
- 2. **A**
- 3. **D**
- 4. **B**
- 5. **C**
- 6. **B**
- 7. **C**
- 8. **C**
- 9. **D**
- 10. **A**



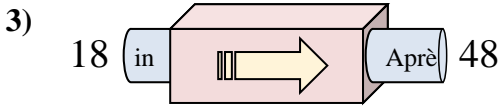
Déterminez la règle appliquée à chaque machine à fonctions.

Réponses

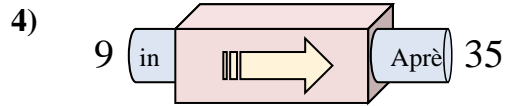
- A. Ajouter 27
- B. Ajouter 30
- C. Ajouter 25
- D. Soustraire 32



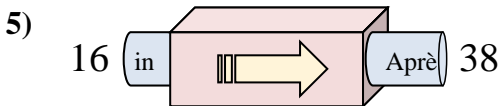
- A. Ajouter 8
- B. Ajouter 6
- C. Soustraire 3
- D. Ajouter 4



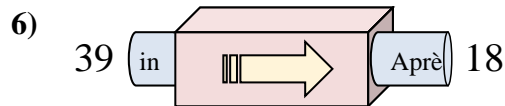
- A. Soustraire 25
- B. Ajouter 30
- C. Ajouter 29
- D. Ajouter 34



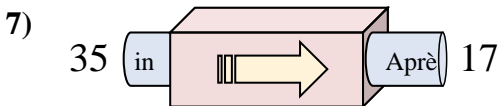
- A. Ajouter 28
- B. Ajouter 26
- C. Soustraire 30
- D. Soustraire 22



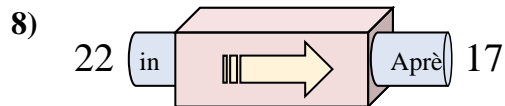
- A. Ajouter 22
- B. Ajouter 27
- C. Ajouter 24
- D. Soustraire 17



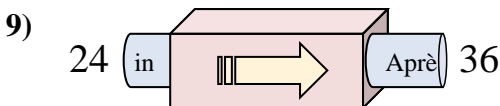
- A. Soustraire 20
- B. Soustraire 23
- C. Soustraire 16
- D. Soustraire 21



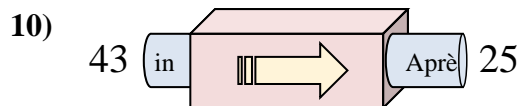
- A. Soustraire 17
- B. Ajouter 21
- C. Soustraire 14
- D. Soustraire 18



- A. Soustraire 10
- B. Ajouter 2
- C. Soustraire 6
- D. Soustraire 5



- A. Soustraire 17
- B. Soustraire 12
- C. Ajouter 12
- D. Ajouter 9

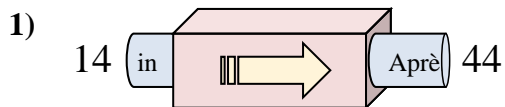


- A. Ajouter 15
- B. Soustraire 16
- C. Ajouter 13
- D. Soustraire 18

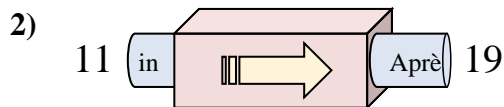
1. _____
2. _____
3. _____
4. _____
5. _____
6. _____
7. _____
8. _____
9. _____
10. _____



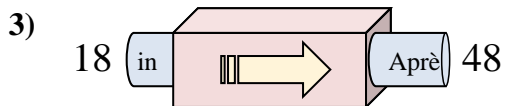
Déterminez la règle appliquée à chaque machine à fonctions.

Réponses

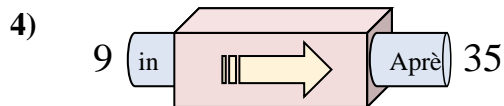
- A. Ajouter 27
- B. Ajouter 30
- C. Ajouter 25
- D. Soustraire 32



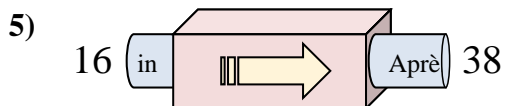
- A. Ajouter 8
- B. Ajouter 6
- C. Soustraire 3
- D. Ajouter 4



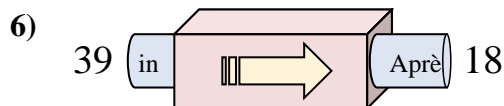
- A. Soustraire 25
- B. Ajouter 30
- C. Ajouter 29
- D. Ajouter 34



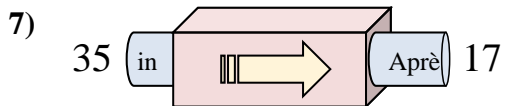
- A. Ajouter 28
- B. Ajouter 26
- C. Soustraire 30
- D. Soustraire 22



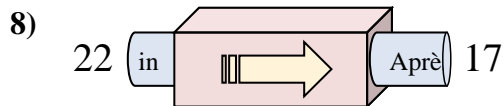
- A. Ajouter 22
- B. Ajouter 27
- C. Ajouter 24
- D. Soustraire 17



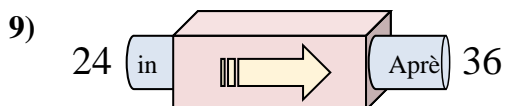
- A. Soustraire 20
- B. Soustraire 23
- C. Soustraire 16
- D. Soustraire 21



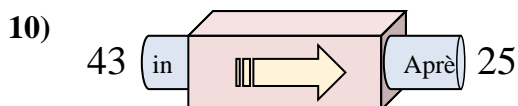
- A. Soustraire 17
- B. Ajouter 21
- C. Soustraire 14
- D. Soustraire 18



- A. Soustraire 10
- B. Ajouter 2
- C. Soustraire 6
- D. Soustraire 5



- A. Soustraire 17
- B. Soustraire 12
- C. Ajouter 12
- D. Ajouter 9

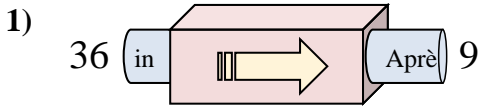


- A. Ajouter 15
- B. Soustraire 16
- C. Ajouter 13
- D. Soustraire 18

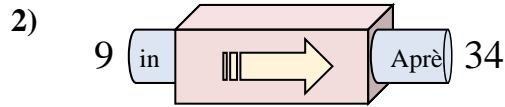
1. **B**2. **A**3. **B**4. **B**5. **A**6. **D**7. **D**8. **D**9. **C**10. **D**



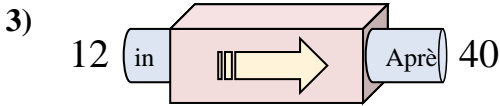
Déterminez la règle appliquée à chaque machine à fonctions.

Réponses

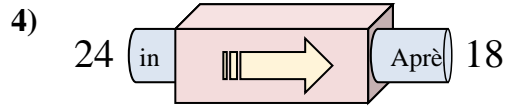
- A. Ajouter 30
- B. Soustraire 32
- C. Soustraire 31
- D. Soustraire 27



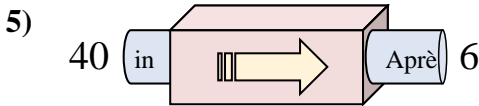
- A. Ajouter 23
- B. Soustraire 29
- C. Soustraire 21
- D. Ajouter 25



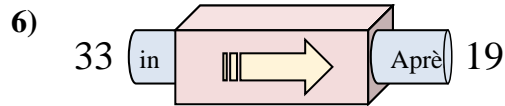
- A. Soustraire 30
- B. Ajouter 33
- C. Ajouter 29
- D. Ajouter 28



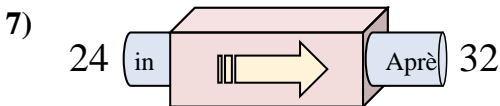
- A. Ajouter 4
- B. Soustraire 2
- C. Soustraire 6
- D. Soustraire 5



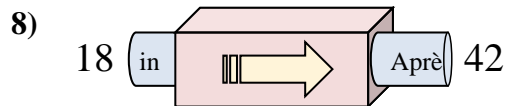
- A. Ajouter 29
- B. Soustraire 39
- C. Soustraire 34
- D. Ajouter 30



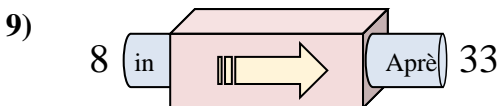
- A. Ajouter 16
- B. Soustraire 17
- C. Soustraire 14
- D. Soustraire 9



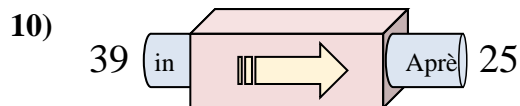
- A. Ajouter 11
- B. Ajouter 8
- C. Soustraire 12
- D. Ajouter 12



- A. Ajouter 24
- B. Ajouter 23
- C. Soustraire 23
- D. Ajouter 21



- A. Ajouter 25
- B. Soustraire 24
- C. Soustraire 26
- D. Ajouter 27

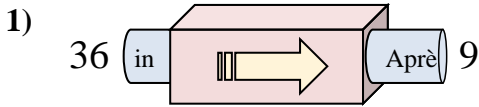


- A. Ajouter 9
- B. Ajouter 14
- C. Soustraire 10
- D. Soustraire 14

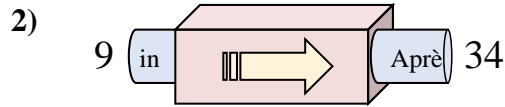
1. _____
2. _____
3. _____
4. _____
5. _____
6. _____
7. _____
8. _____
9. _____
10. _____



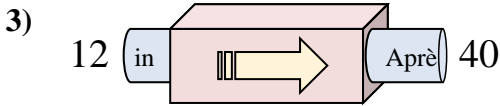
Déterminez la règle appliquée à chaque machine à fonctions.

Réponses

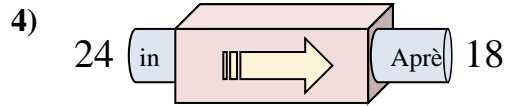
- A. Ajouter 30
- B. Soustraire 32
- C. Soustraire 31
- D. Soustraire 27



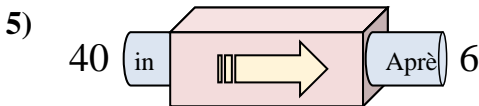
- A. Ajouter 23
- B. Soustraire 29
- C. Soustraire 21
- D. Ajouter 25



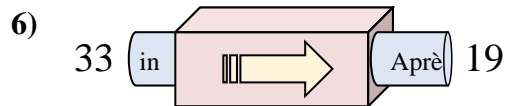
- A. Soustraire 30
- B. Ajouter 33
- C. Ajouter 29
- D. Ajouter 28



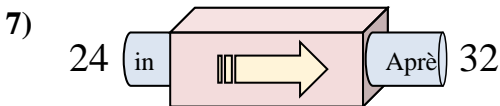
- A. Ajouter 4
- B. Soustraire 2
- C. Soustraire 6
- D. Soustraire 5



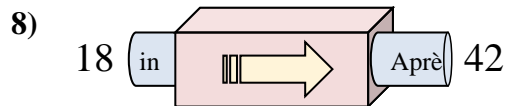
- A. Ajouter 29
- B. Soustraire 39
- C. Soustraire 34
- D. Ajouter 30



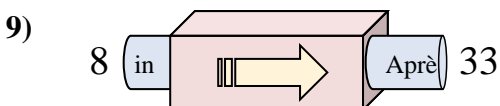
- A. Ajouter 16
- B. Soustraire 17
- C. Soustraire 14
- D. Soustraire 9



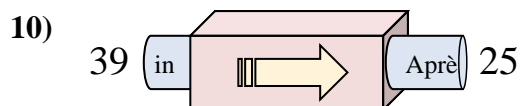
- A. Ajouter 11
- B. Ajouter 8
- C. Soustraire 12
- D. Ajouter 12



- A. Ajouter 24
- B. Ajouter 23
- C. Soustraire 23
- D. Ajouter 21



- A. Ajouter 25
- B. Soustraire 24
- C. Soustraire 26
- D. Ajouter 27



- A. Ajouter 9
- B. Ajouter 14
- C. Soustraire 10
- D. Soustraire 14

1. **D**
2. **D**
3. **D**
4. **C**
5. **C**
6. **C**
7. **B**
8. **A**
9. **A**
10. **D**