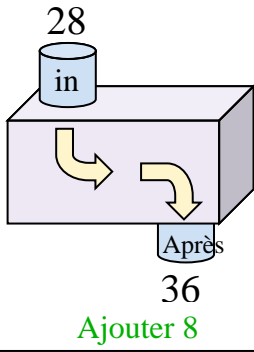




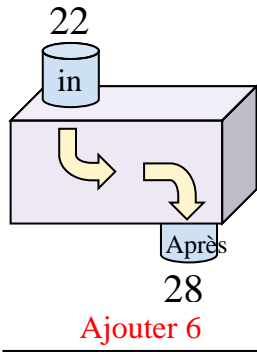


Déterminez la règle appliquée à chaque machine à fonctions.

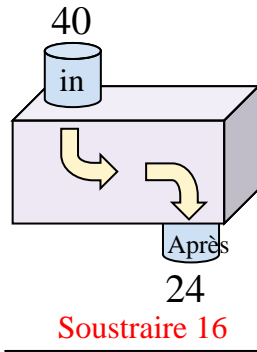
Ex)



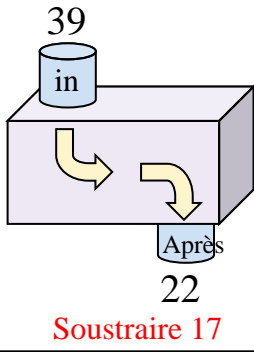
1)



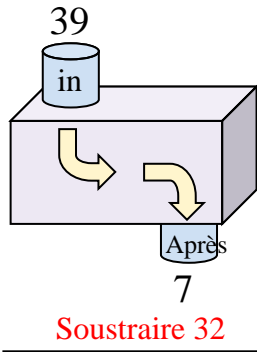
2)



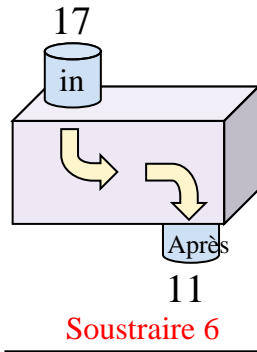
3)



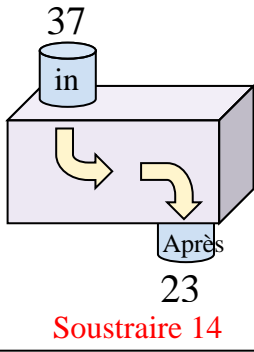
4)



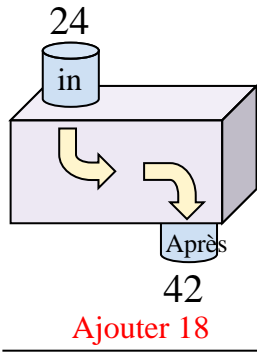
5)



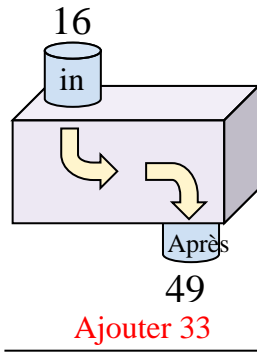
6)



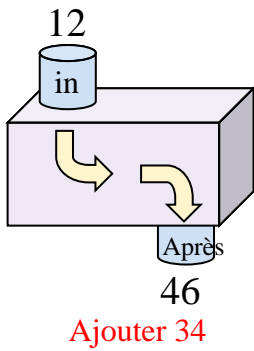
7)



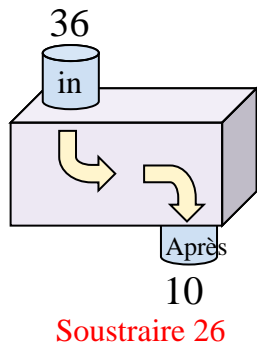
8)



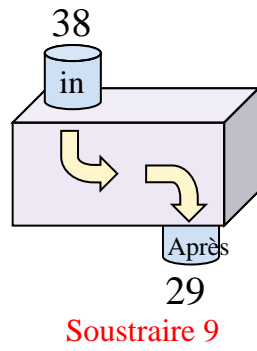
9)



10)



11)



**Réponses**

Ex. **Ajouter 8**

1. **Ajouter 6**

2. **Soustraire 16**

3. **Soustraire 17**

4. **Soustraire 32**

5. **Soustraire 6**

6. **Soustraire 14**

7. **Ajouter 18**

8. **Ajouter 33**

9. **Ajouter 34**

10. **Soustraire 26**

11. **Soustraire 9**