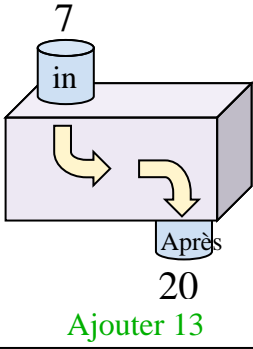


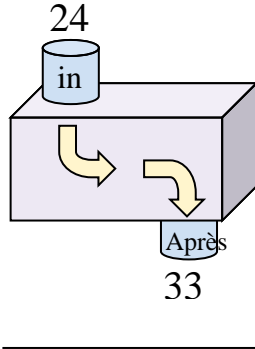


Déterminez la règle appliquée à chaque machine à fonctions.

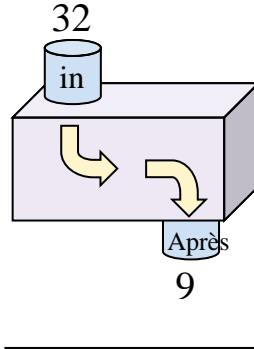
Ex)



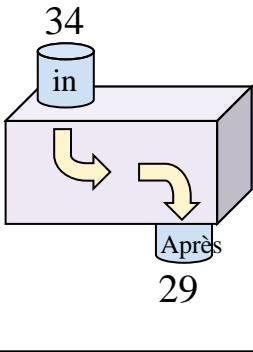
1)



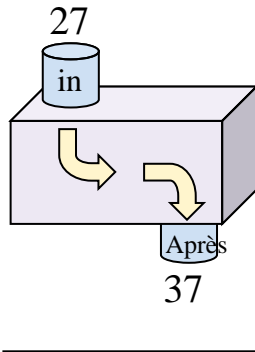
2)



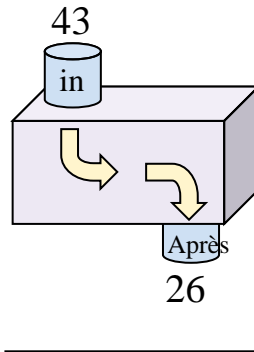
3)



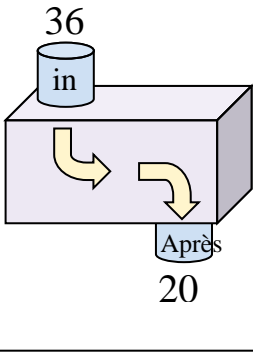
4)



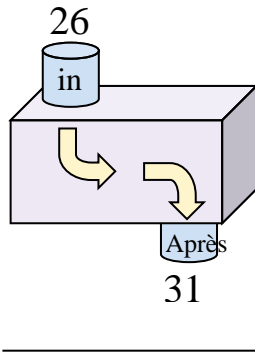
5)



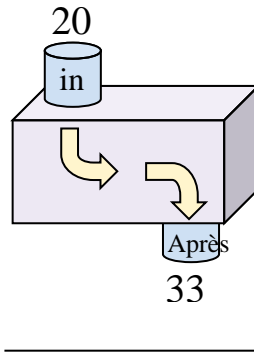
6)



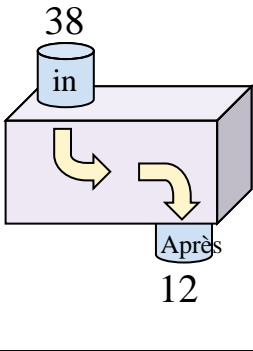
7)



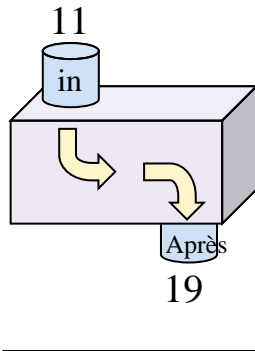
8)



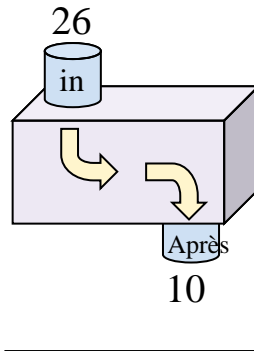
9)



10)



11)



Réponses

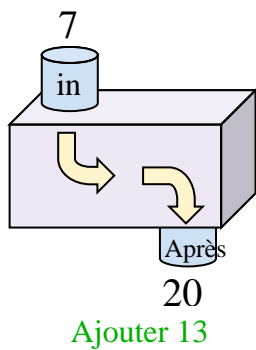
Ex. **Ajouter 13**

1. _____
2. _____
3. _____
4. _____
5. _____
6. _____
7. _____
8. _____
9. _____
10. _____
11. _____

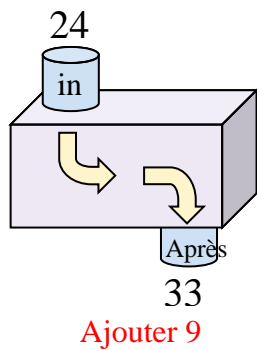


Déterminez la règle appliquée à chaque machine à fonctions.

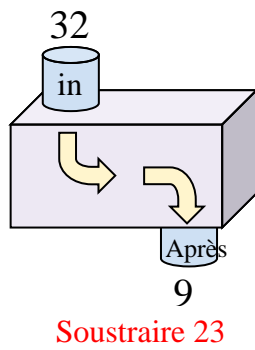
Ex)



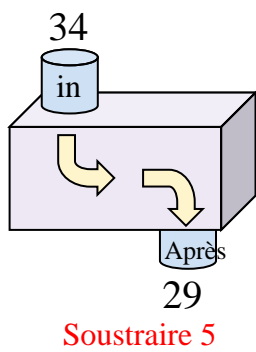
1)



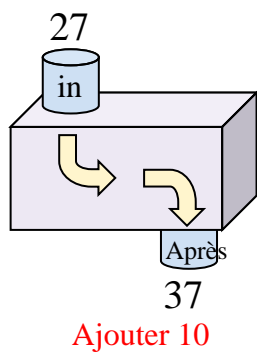
2)



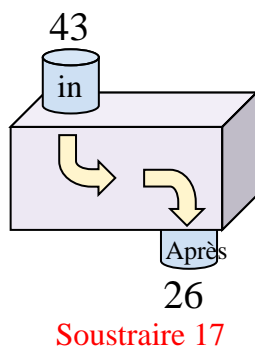
3)



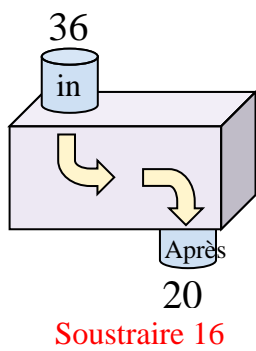
4)



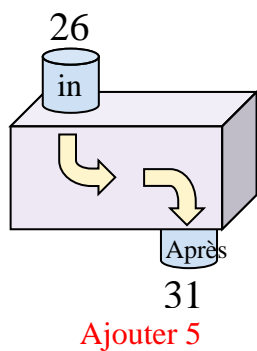
5)



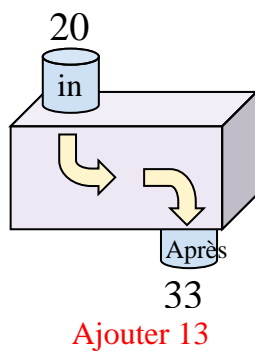
6)



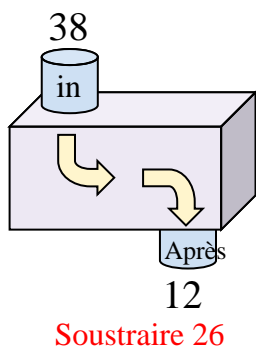
7)



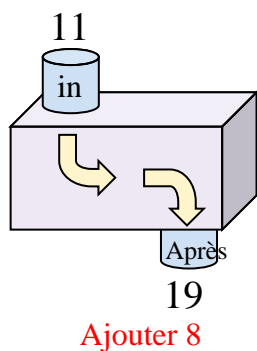
8)



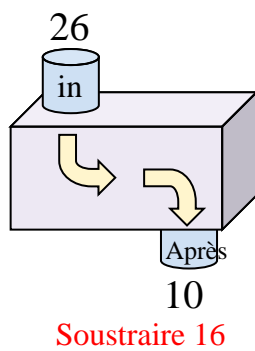
9)



10)



11)



Réponses

Ex. **Ajouter 13**

1. **Ajouter 9**

2. **Soustraire 23**

3. **Soustraire 5**

4. **Ajouter 10**

5. **Soustraire 17**

6. **Soustraire 16**

7. **Ajouter 5**

8. **Ajouter 13**

9. **Soustraire 26**

10. **Ajouter 8**

11. **Soustraire 16**