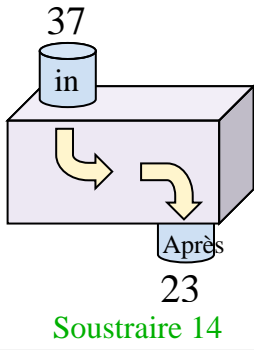


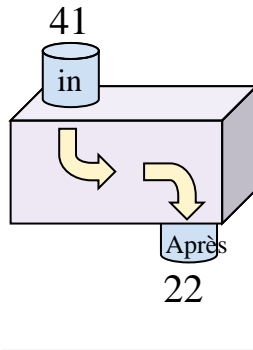


Déterminez la règle appliquée à chaque machine à fonctions.

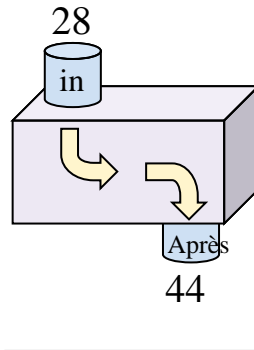
Ex)



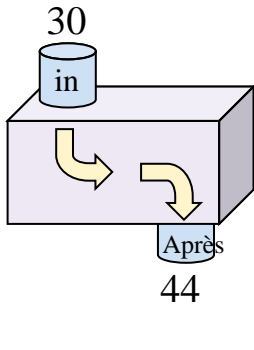
1)



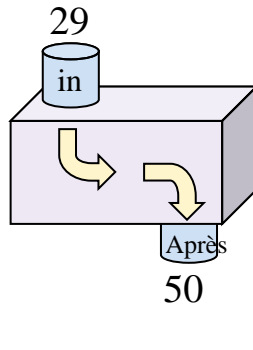
2)



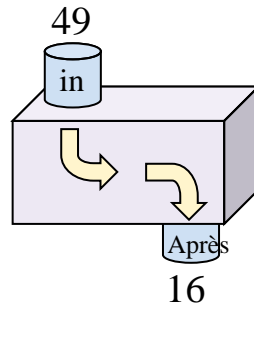
3)



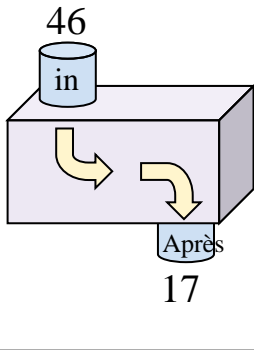
4)



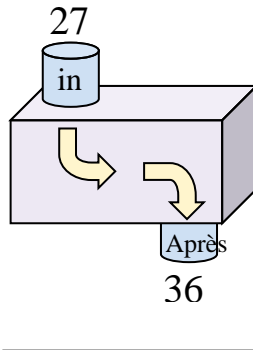
5)



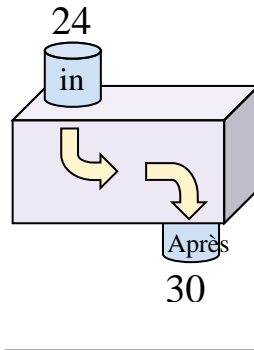
6)



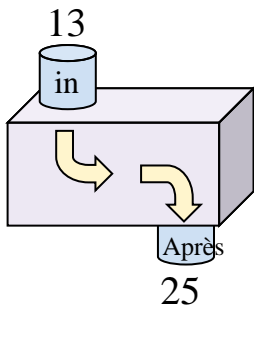
7)



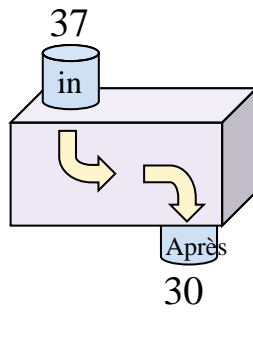
8)



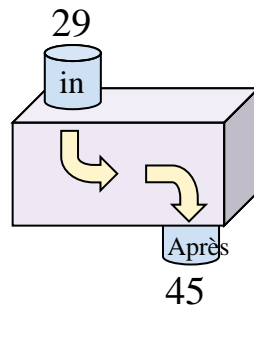
9)



10)



11)



Réponses

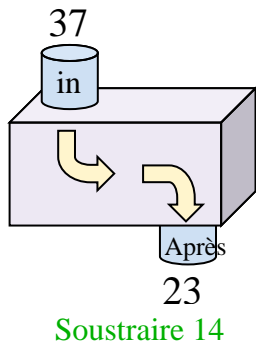
Ex. **Soustraire 14**

1. _____
2. _____
3. _____
4. _____
5. _____
6. _____
7. _____
8. _____
9. _____
10. _____
11. _____

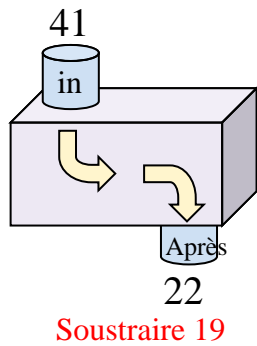


Déterminez la règle appliquée à chaque machine à fonctions.

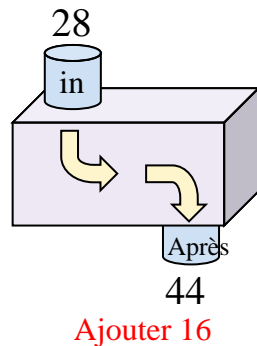
Ex)



1)



2)



Ex. **Soustraire 14**

1. **Soustraire 19**

2. **Ajouter 16**

3. **Ajouter 14**

4. **Ajouter 21**

5. **Soustraire 33**

6. **Soustraire 29**

7. **Ajouter 9**

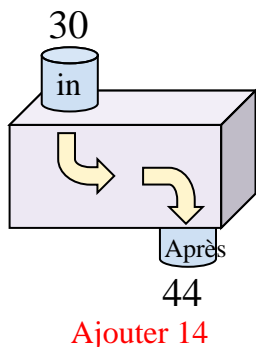
8. **Ajouter 6**

9. **Ajouter 12**

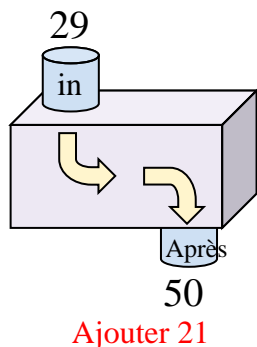
10. **Soustraire 7**

11. **Ajouter 16**

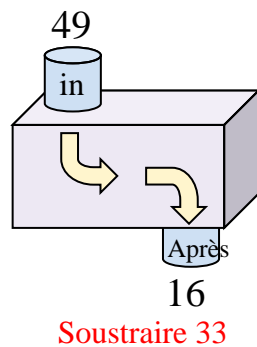
3)



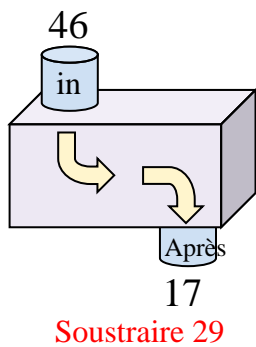
4)



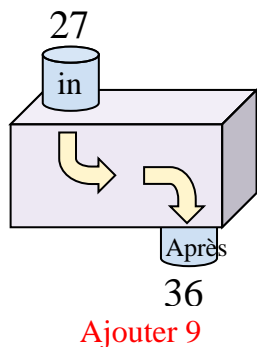
5)



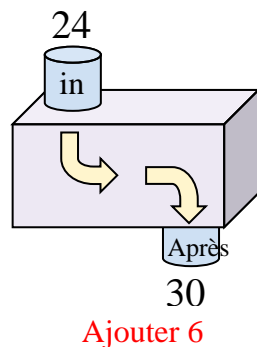
6)



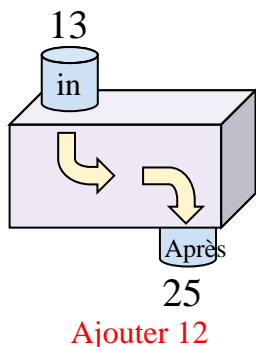
7)



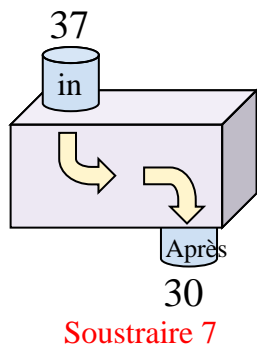
8)



9)



10)



11)

