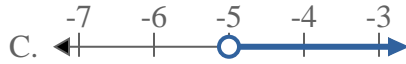
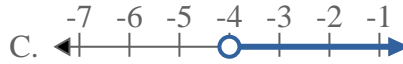
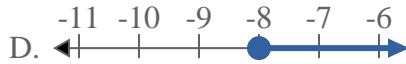
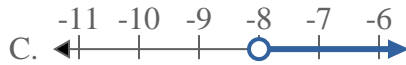
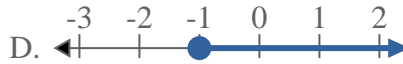
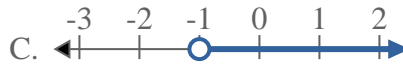
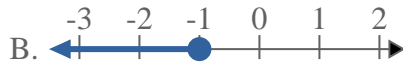
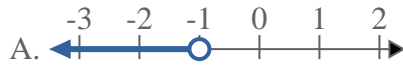
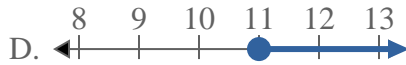
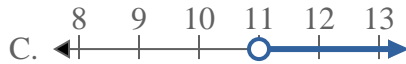
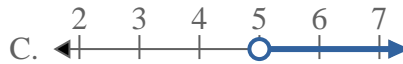
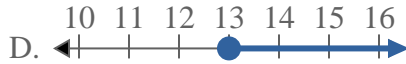
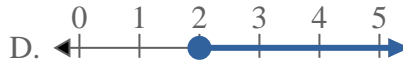
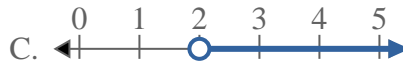
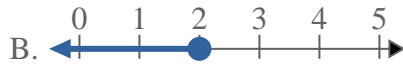
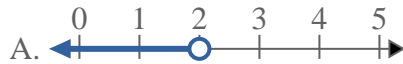




Résoudre chaque problème.

**Réponses**1) Quelle réponse représente le mieux  $X < -5$ 2) Quelle réponse représente le mieux  $X < -4$ 3) Quelle réponse représente le mieux  $X < -8$ 4) Quelle réponse représente le mieux  $X < -1$ 5) Quelle réponse représente le mieux  $X \geq 11$ 6) Quelle réponse représente le mieux  $X \geq 5$ 7) Quelle réponse représente le mieux  $X \geq 13$ 8) Quelle réponse représente le mieux  $X < 2$ 

1. \_\_\_\_\_

2. \_\_\_\_\_

3. \_\_\_\_\_

4. \_\_\_\_\_

5. \_\_\_\_\_

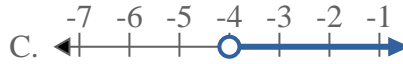
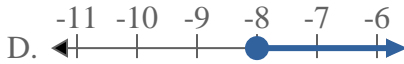
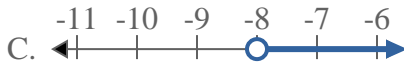
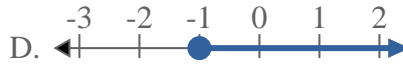
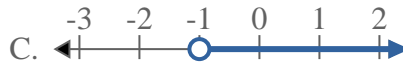
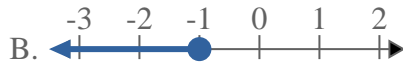
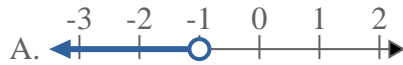
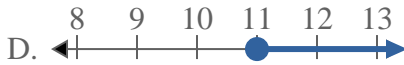
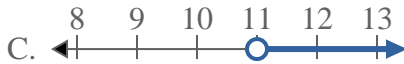
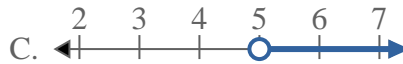
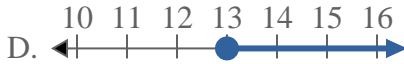
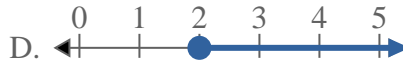
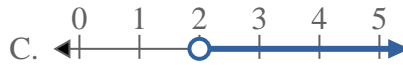
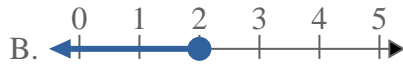
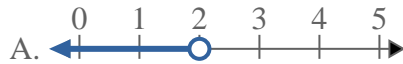
6. \_\_\_\_\_

7. \_\_\_\_\_

8. \_\_\_\_\_



Résoudre chaque problème.

**Réponses**1) Quelle réponse représente le mieux  $X < -5$ 2) Quelle réponse représente le mieux  $X < -4$ 3) Quelle réponse représente le mieux  $X < -8$ 4) Quelle réponse représente le mieux  $X < -1$ 5) Quelle réponse représente le mieux  $X \geq 11$ 6) Quelle réponse représente le mieux  $X \geq 5$ 7) Quelle réponse représente le mieux  $X \geq 13$ 8) Quelle réponse représente le mieux  $X < 2$ 1.   **A**  2.   **A**  3.   **A**  4.   **A**  5.   **D**  6.   **D**  7.   **D**  8.   **A**