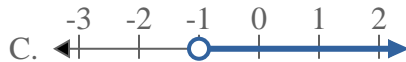
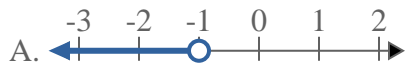
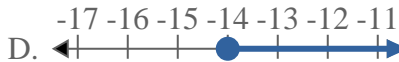
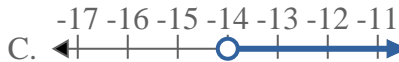
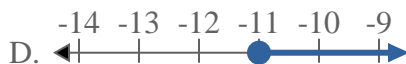
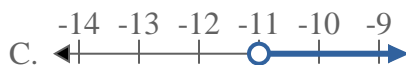
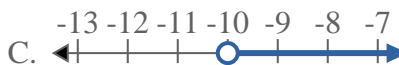
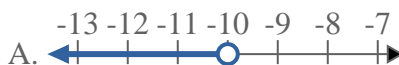
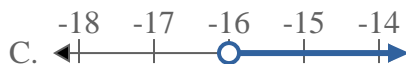
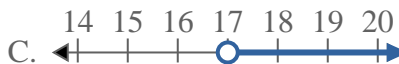
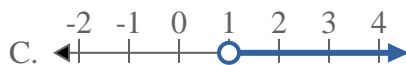
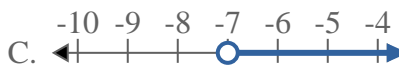
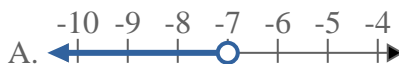




Résoudre chaque problème.

**Réponses**1) Quelle réponse représente le mieux  $X > -1$ 2) Quelle réponse représente le mieux  $X < -14$ 3) Quelle réponse représente le mieux  $X \leq -11$ 4) Quelle réponse représente le mieux  $X < -10$ 5) Quelle réponse représente le mieux  $X \leq -16$ 6) Quelle réponse représente le mieux  $X > 17$ 7) Quelle réponse représente le mieux  $X > 1$ 8) Quelle réponse représente le mieux  $X > -7$ 

1. \_\_\_\_\_

2. \_\_\_\_\_

3. \_\_\_\_\_

4. \_\_\_\_\_

5. \_\_\_\_\_

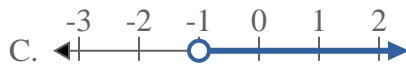
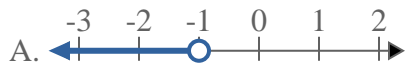
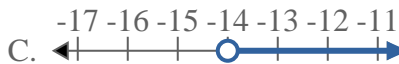
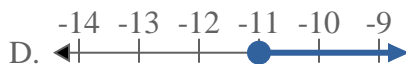
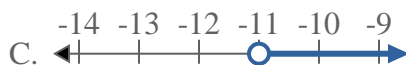
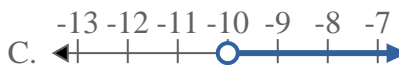
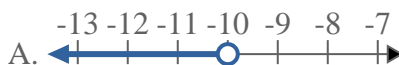
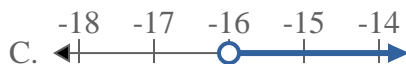
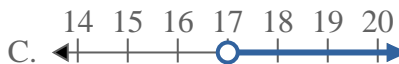
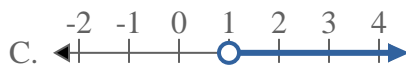
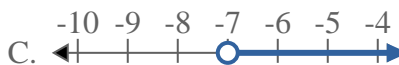
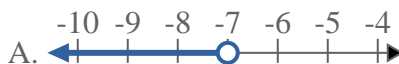
6. \_\_\_\_\_

7. \_\_\_\_\_

8. \_\_\_\_\_



Résoudre chaque problème.

**Réponses**1) Quelle réponse représente le mieux  $X > -1$ 2) Quelle réponse représente le mieux  $X < -14$ 3) Quelle réponse représente le mieux  $X \leq -11$ 4) Quelle réponse représente le mieux  $X < -10$ 5) Quelle réponse représente le mieux  $X \leq -16$ 6) Quelle réponse représente le mieux  $X > 17$ 7) Quelle réponse représente le mieux  $X > 1$ 8) Quelle réponse représente le mieux  $X > -7$ 1.     **C**    2.     **A**    3.     **B**    4.     **A**    5.     **B**    6.     **C**    7.     **C**    8.     **C**