



Avec les droites numériques arrondir chaque nombre à la centaine la plus proche.

Ex)

4 410



Ex. **4 400**

1)

853



1. \_\_\_\_\_

2)

783



2. \_\_\_\_\_

3)

9 697



3. \_\_\_\_\_

4)

8 980



4. \_\_\_\_\_

5)

569



5. \_\_\_\_\_

6)

9 924



6. \_\_\_\_\_

7)

99 310



7. \_\_\_\_\_

8)

90 005



8. \_\_\_\_\_

9)

17 192



9. \_\_\_\_\_

10)

60 453

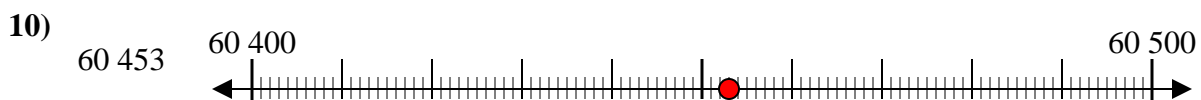
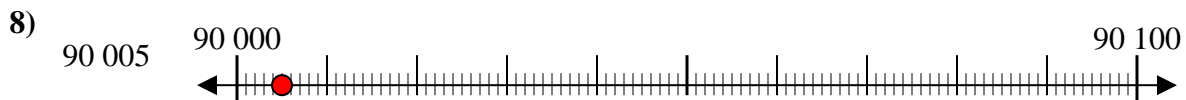
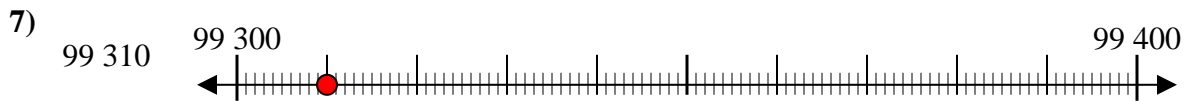
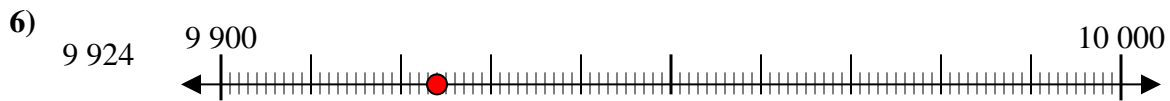
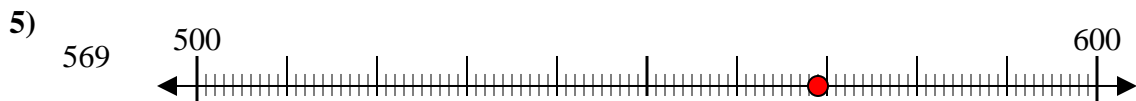
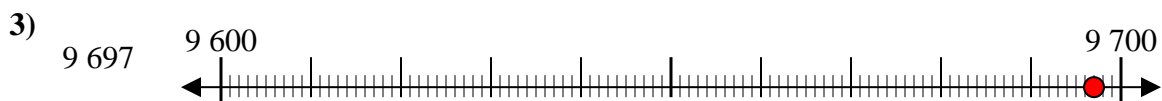
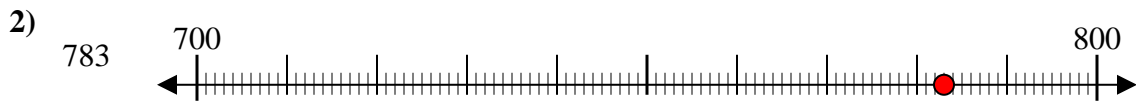
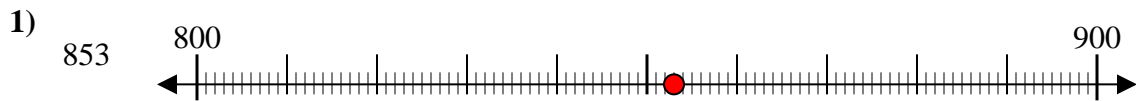
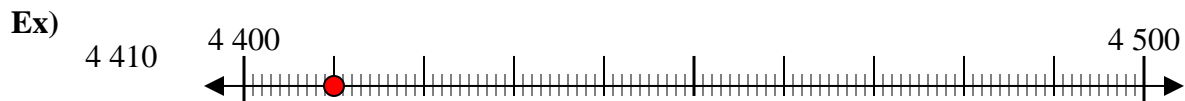


10. \_\_\_\_\_

**Réponses**



Avec les droites numériques arrondir chaque nombre à la centaine la plus proche.



**Réponses**

Ex. 4 400

1. 900

2. 800

3. 9 700

4. 9 000

5. 600

6. 9 900

7. 99 300

8. 90 000

9. 17 200

10. 60 500