



Avec les droites numériques arrondir chaque nombre à la centaine la plus proche.

Ex)

612



Ex. 600

1)

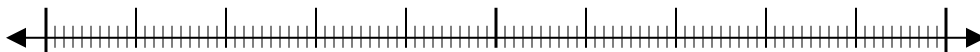
9 223



1. _____

2)

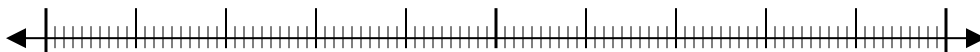
17 922



2. _____

3)

87 465



3. _____

4)

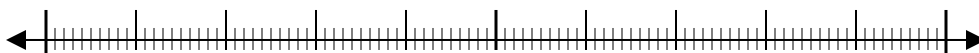
653



4. _____

5)

3 616



5. _____

6)

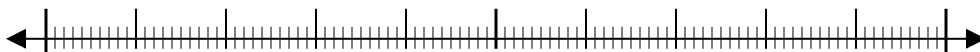
6 677



6. _____

7)

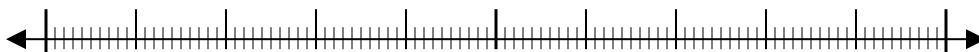
22 598



7. _____

8)

1 241



8. _____

9)

960



9. _____

10)

873

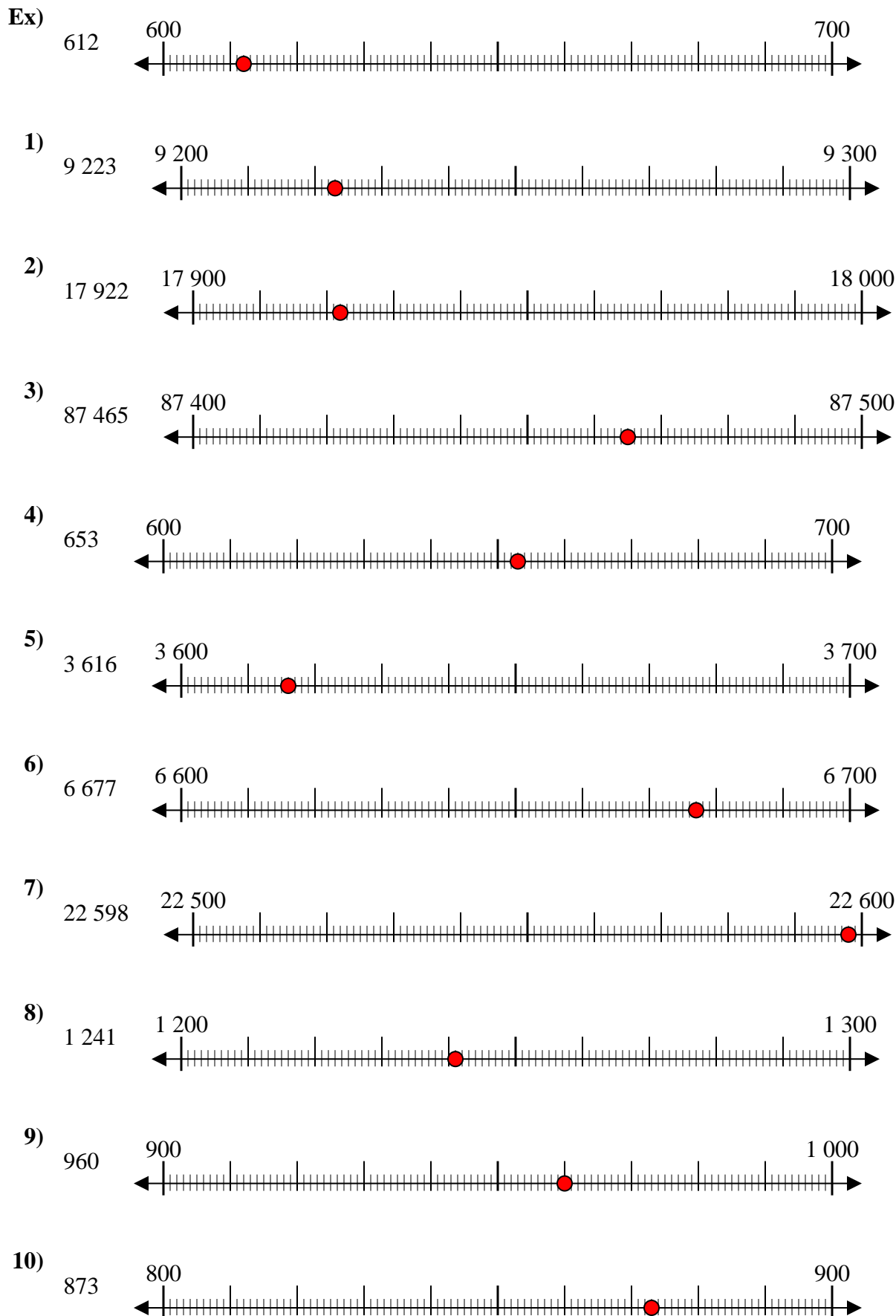


10. _____

Réponses



Avec les droites numériques arrondir chaque nombre à la centaine la plus proche.



Réponses

- Ex. 600
1. 9 200
2. 17 900
3. 87 500
4. 700
5. 3 600
6. 6 700
7. 22 600
8. 1 200
9. 1 000
10. 900



Avec les droites numériques arrondir chaque nombre à la centaine la plus proche.

Ex)

356



Ex. 400

1)

1 360



1. _____

2)

7 216



2. _____

3)

51 669



3. _____

4)

670



4. _____

5)

171



5. _____

6)

80 458



6. _____

7)

9 425



7. _____

8)

616



8. _____

9)

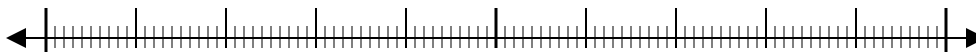
88 299



9. _____

10)

5 076

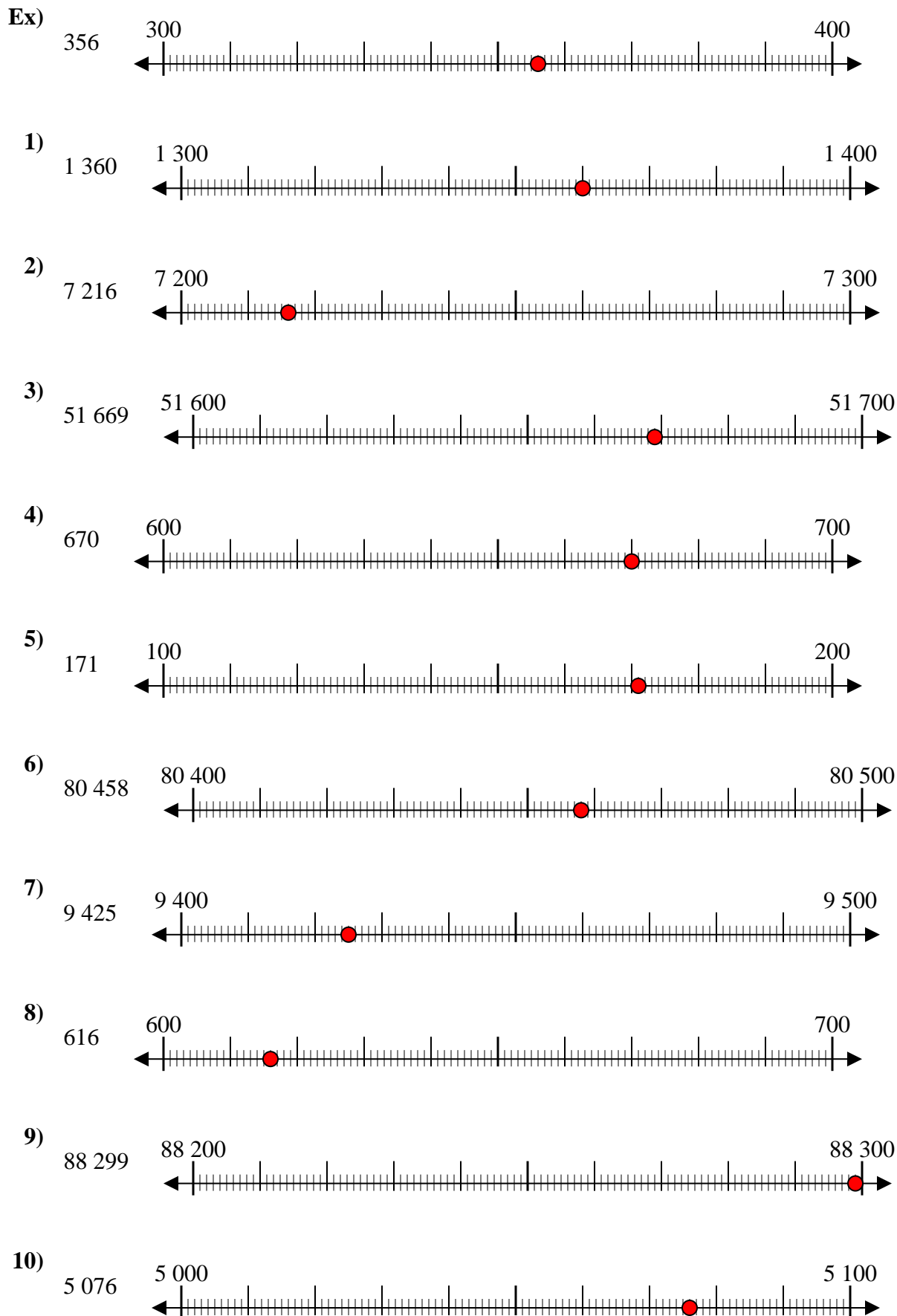


10. _____

Réponses



Avec les droites numériques arrondir chaque nombre à la centaine la plus proche.



Réponses

- Ex. 400
1. 1 400
2. 7 200
3. 51 700
4. 700
5. 200
6. 80 500
7. 9 400
8. 600
9. 88 300
10. 5 100



Avec les droites numériques arrondir chaque nombre à la centaine la plus proche.

Ex)

908



Ex. 900

1)

257



1. _____

2)

8 566



2. _____

3)

18 478



3. _____

4)

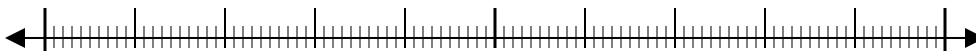
84 766



4. _____

5)

991



5. _____

6)

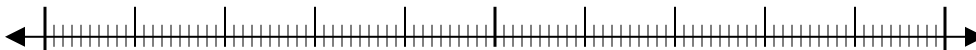
76 319



6. _____

7)

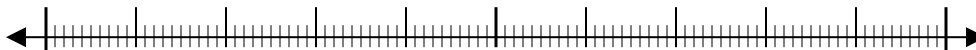
759



7. _____

8)

4 490



8. _____

9)

70 699



9. _____

10)

1 399

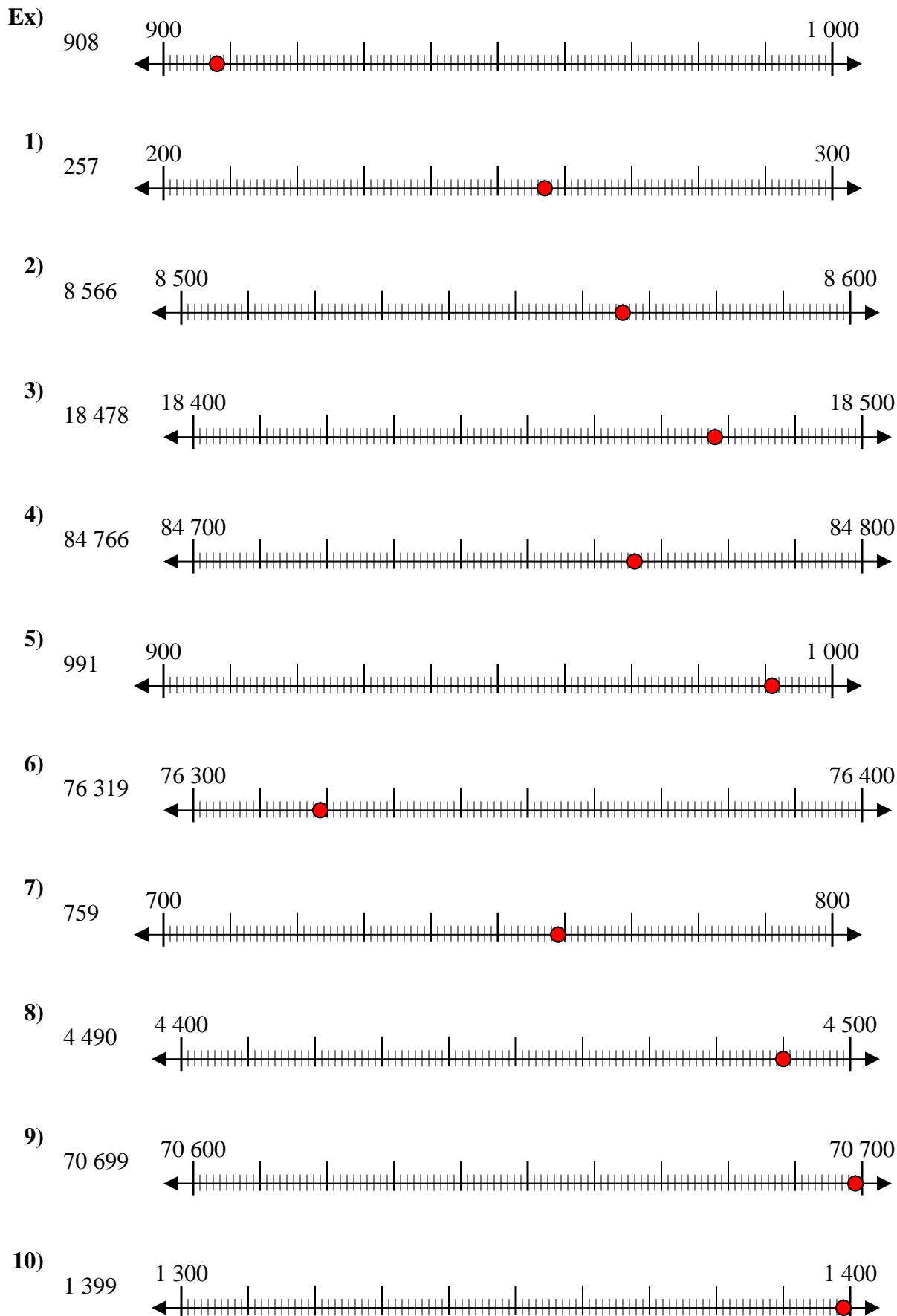


10. _____

Réponses



Avec les droites numériques arrondir chaque nombre à la centaine la plus proche.



Réponses

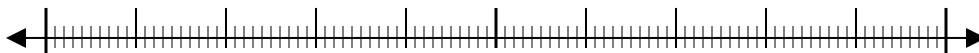
- Ex. 900
1. 300
2. 8 600
3. 18 500
4. 84 800
5. 1 000
6. 76 300
7. 800
8. 4 500
9. 70 700
10. 1 400



Avec les droites numériques arrondir chaque nombre à la centaine la plus proche.

Ex)

4 410



Ex. **4 400**

1)

853



1. _____

2)

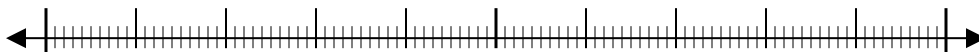
783



2. _____

3)

9 697



3. _____

4)

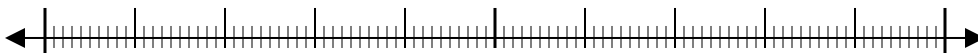
8 980



4. _____

5)

569



5. _____

6)

9 924



6. _____

7)

99 310



7. _____

8)

90 005



8. _____

9)

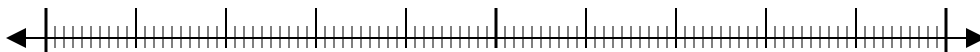
17 192



9. _____

10)

60 453

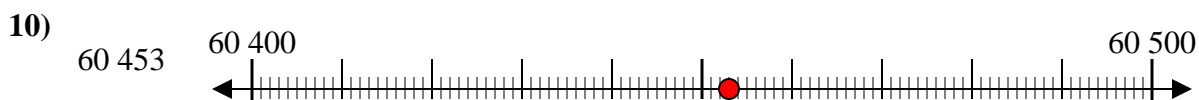
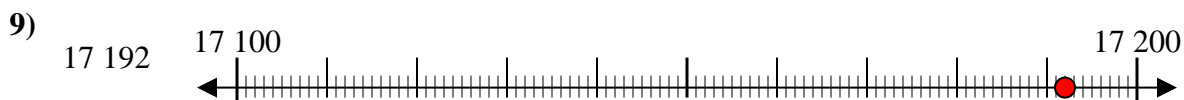
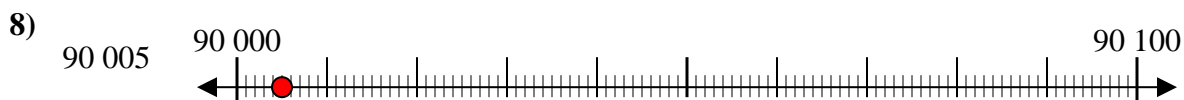
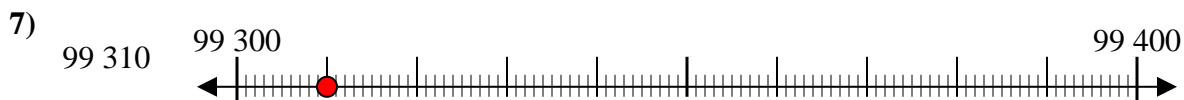
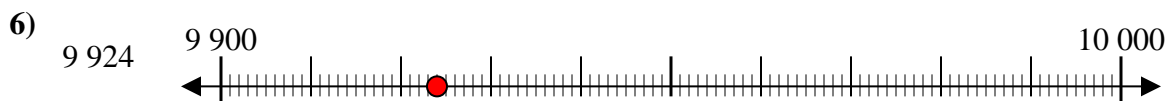
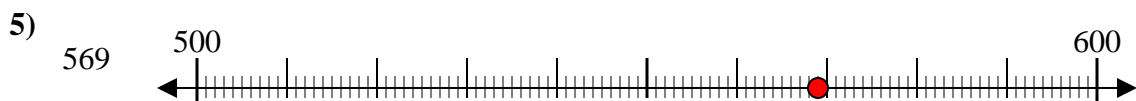
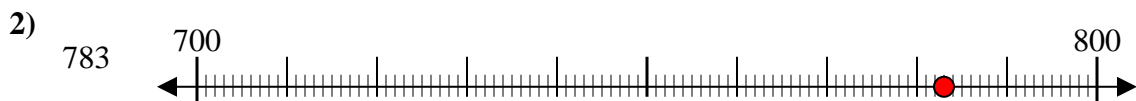
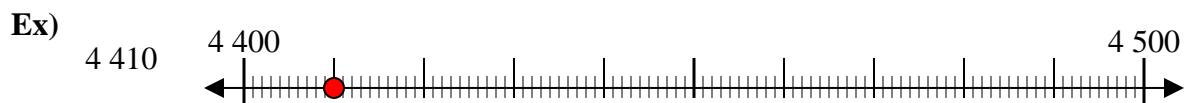


10. _____

Réponses



Avec les droites numériques arrondir chaque nombre à la centaine la plus proche.



Réponses

Ex. 4 400

1. 900

2. 800

3. 9 700

4. 9 000

5. 600

6. 9 900

7. 99 300

8. 90 000

9. 17 200

10. 60 500



Avec les droites numériques arrondir chaque nombre à la centaine la plus proche.

Réponses

Ex)

1 224



Ex. **1 200**

1)

9 937



1. _____

2)

81 895



2. _____

3)

791



3. _____

4)

3 821



4. _____

5)

216



5. _____

6)

45 078



6. _____

7)

21 436



7. _____

8)

85 063



8. _____

9)

232



9. _____

10)

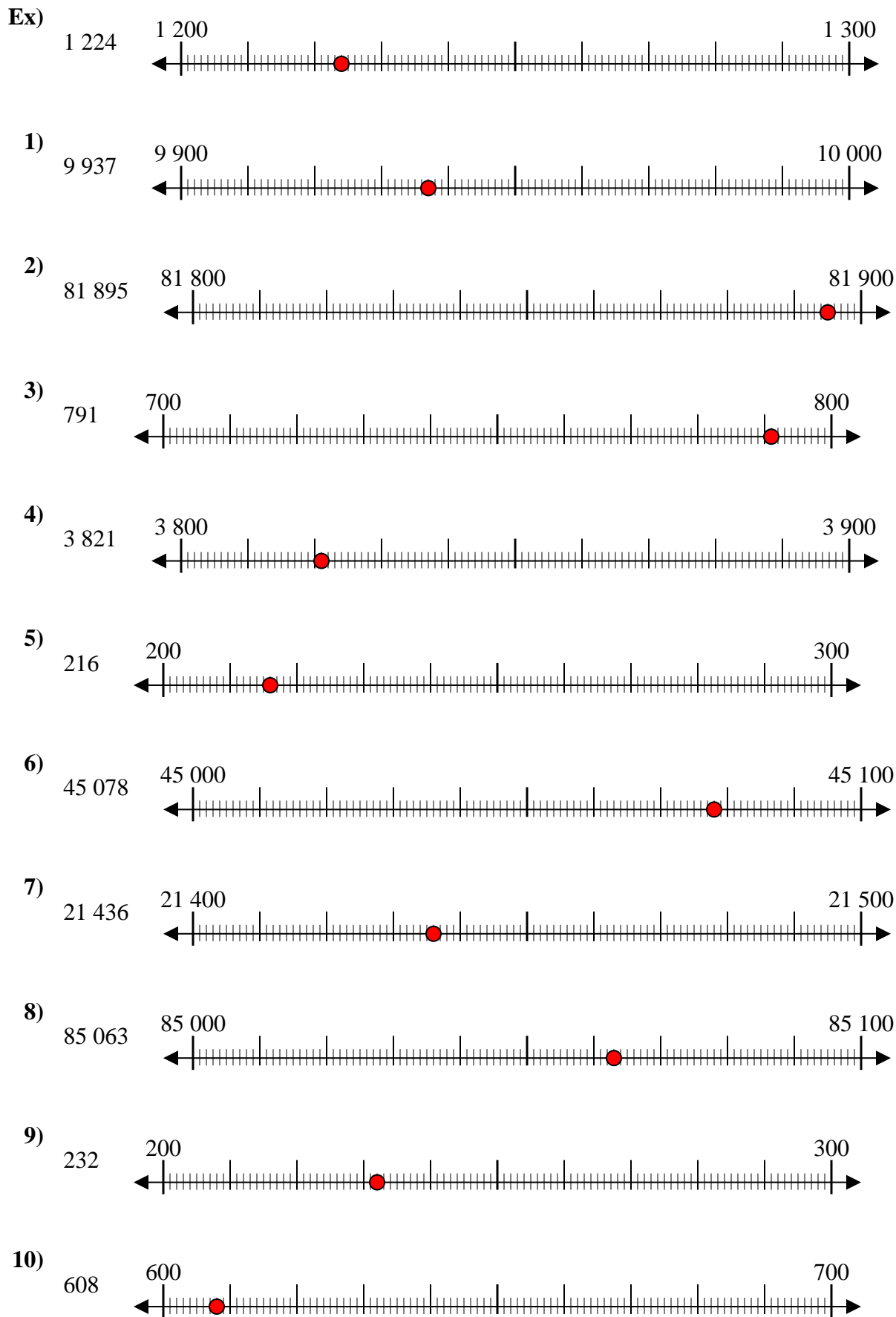
608



10. _____



Avec les droites numériques arrondir chaque nombre à la centaine la plus proche.



Réponses

- Ex. 1 200
1. 9 900
2. 81 900
3. 800
4. 3 800
5. 200
6. 45 100
7. 21 400
8. 85 100
9. 200
10. 600



Avec les droites numériques arrondir chaque nombre à la centaine la plus proche.

Ex)

25 932



Ex. 25 900

1)

28 551



1. _____

2)

854



2. _____

3)

831



3. _____

4)

274



4. _____

5)

12 793



5. _____

6)

5 558



6. _____

7)

5 688



7. _____

8)

134



8. _____

9)

9 335



9. _____

10)

36 045

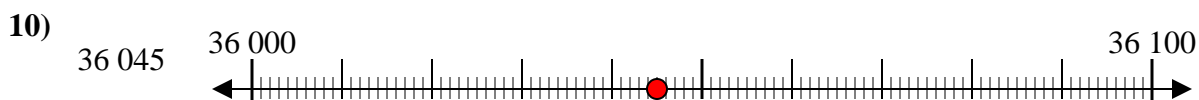
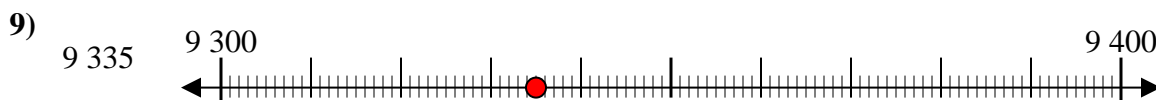
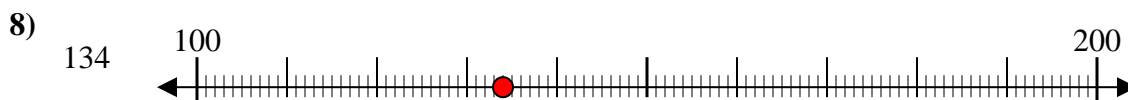
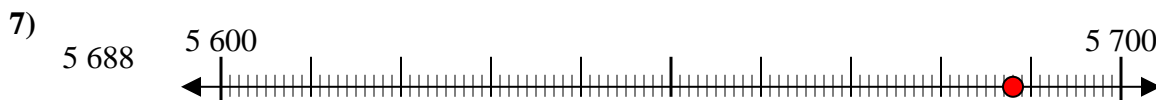
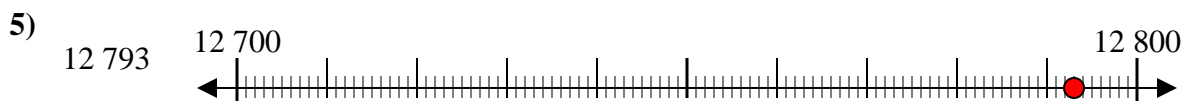
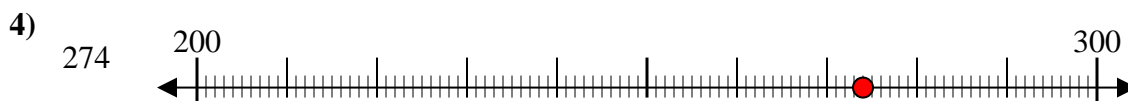
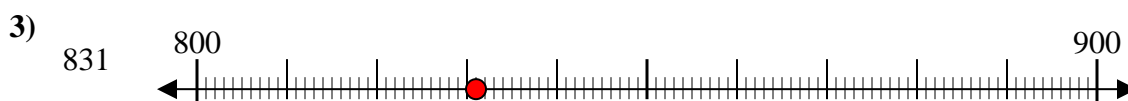
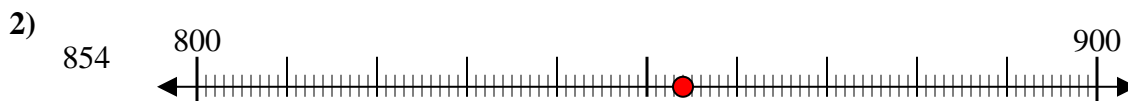
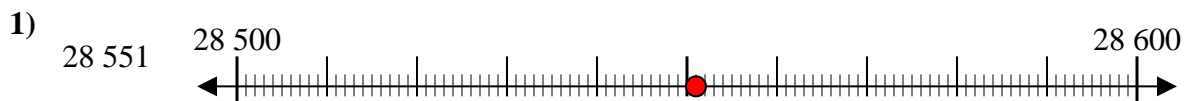
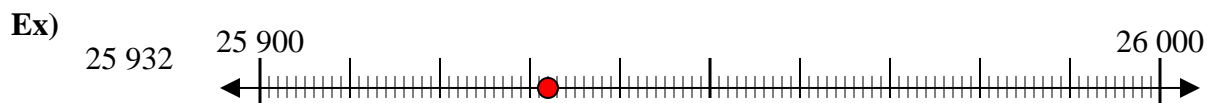


10. _____

Réponses



Avec les droites numériques arrondir chaque nombre à la centaine la plus proche.



Réponses

Ex. 25 900

1. 28 600

2. 900

3. 800

4. 300

5. 12 800

6. 5 600

7. 5 700

8. 100

9. 9 300

10. 36 000



Avec les droites numériques arrondir chaque nombre à la centaine la plus proche.

Ex)

803



Ex. 800

1)

589



1. _____

2)

35 102



2. _____

3)

6 126



3. _____

4)

5 531



4. _____

5)

5 313



5. _____

6)

951



6. _____

7)

8 816



7. _____

8)

152



8. _____

9)

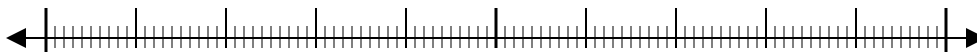
62 481



9. _____

10)

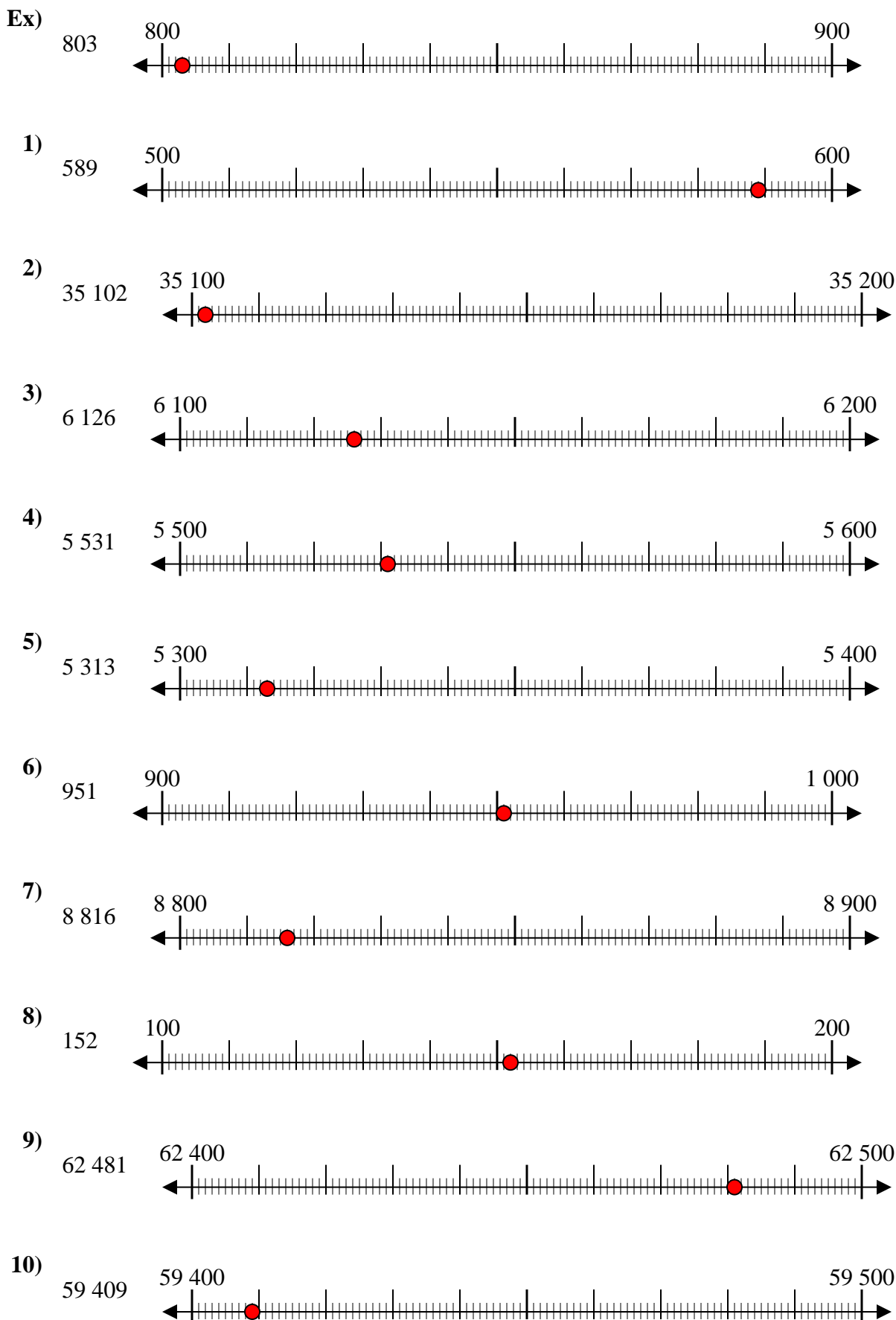
59 409



10. _____



Avec les droites numériques arrondir chaque nombre à la centaine la plus proche.



Réponses

- Ex. 800
1. 600
2. 35 100
3. 6 100
4. 5 500
5. 5 300
6. 1 000
7. 8 800
8. 200
9. 62 500
10. 59 400



Avec les droites numériques arrondir chaque nombre à la centaine la plus proche.

Ex)

842



Ex. 800

1)

777



1. _____

2)

395



2. _____

3)

856



3. _____

4)

7 693



4. _____

5)

22 440



5. _____

6)

52 709



6. _____

7)

5 550



7. _____

8)

6 348



8. _____

9)

76 807



9. _____

10)

1 323

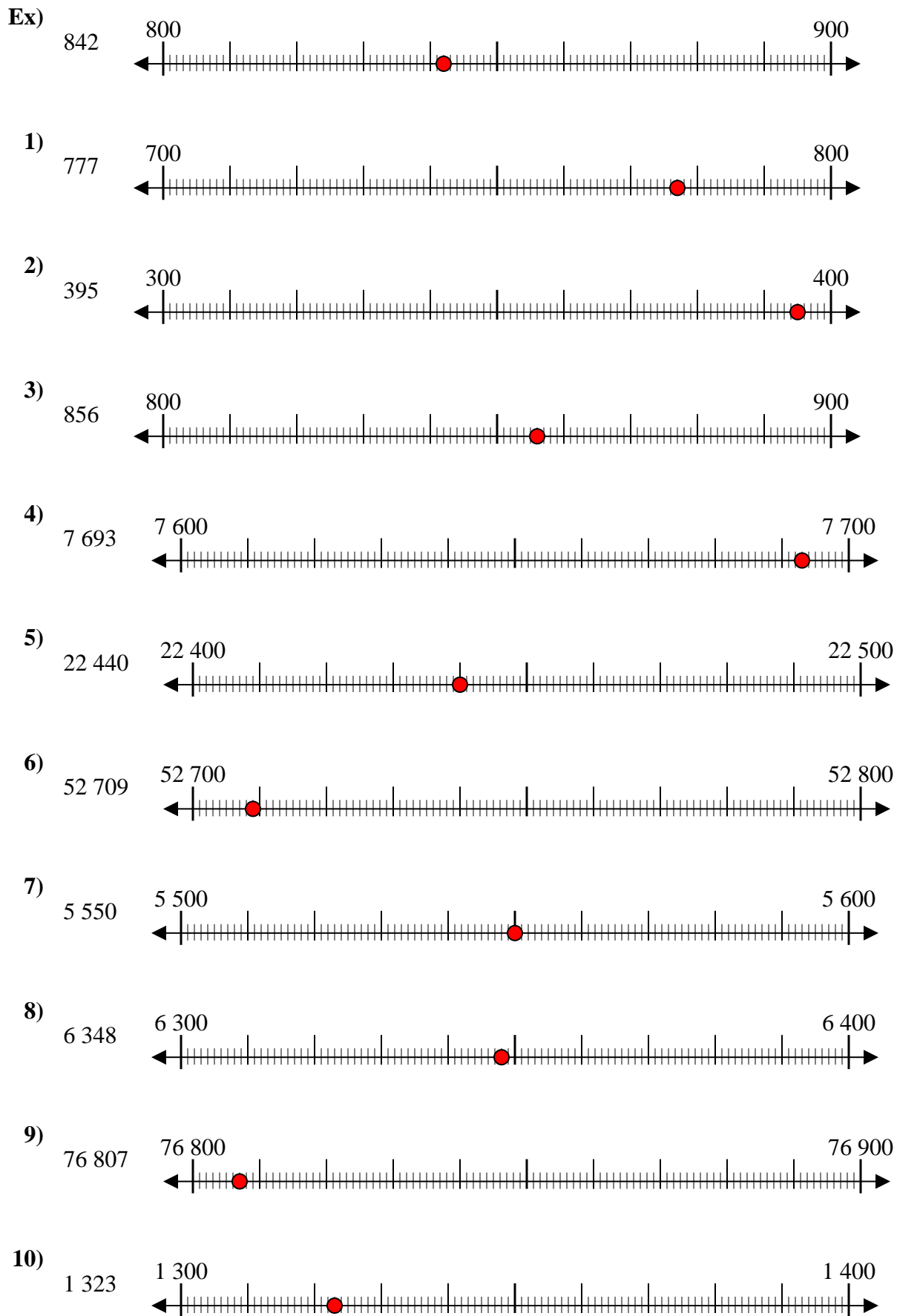


10. _____

Réponses



Avec les droites numériques arrondir chaque nombre à la centaine la plus proche.



Réponses

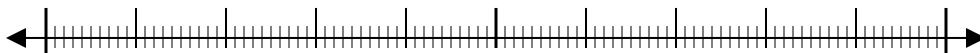
- Ex. 800
1. 800
2. 400
3. 900
4. 7 700
5. 22 400
6. 52 700
7. 5 600
8. 6 300
9. 76 800
10. 1 300



Avec les droites numériques arrondir chaque nombre à la centaine la plus proche.

Ex)

22 128



Ex. 22 100

1)

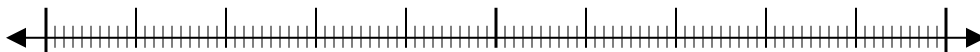
7 798



1. _____

2)

73 791



2. _____

3)

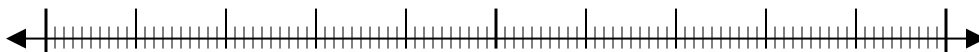
48 807



3. _____

4)

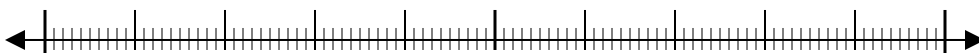
1 381



4. _____

5)

746



5. _____

6)

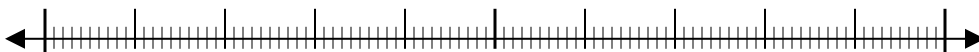
140



6. _____

7)

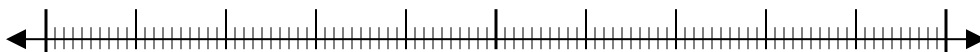
904



7. _____

8)

93 445



8. _____

9)

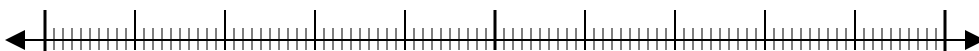
4 176



9. _____

10)

369

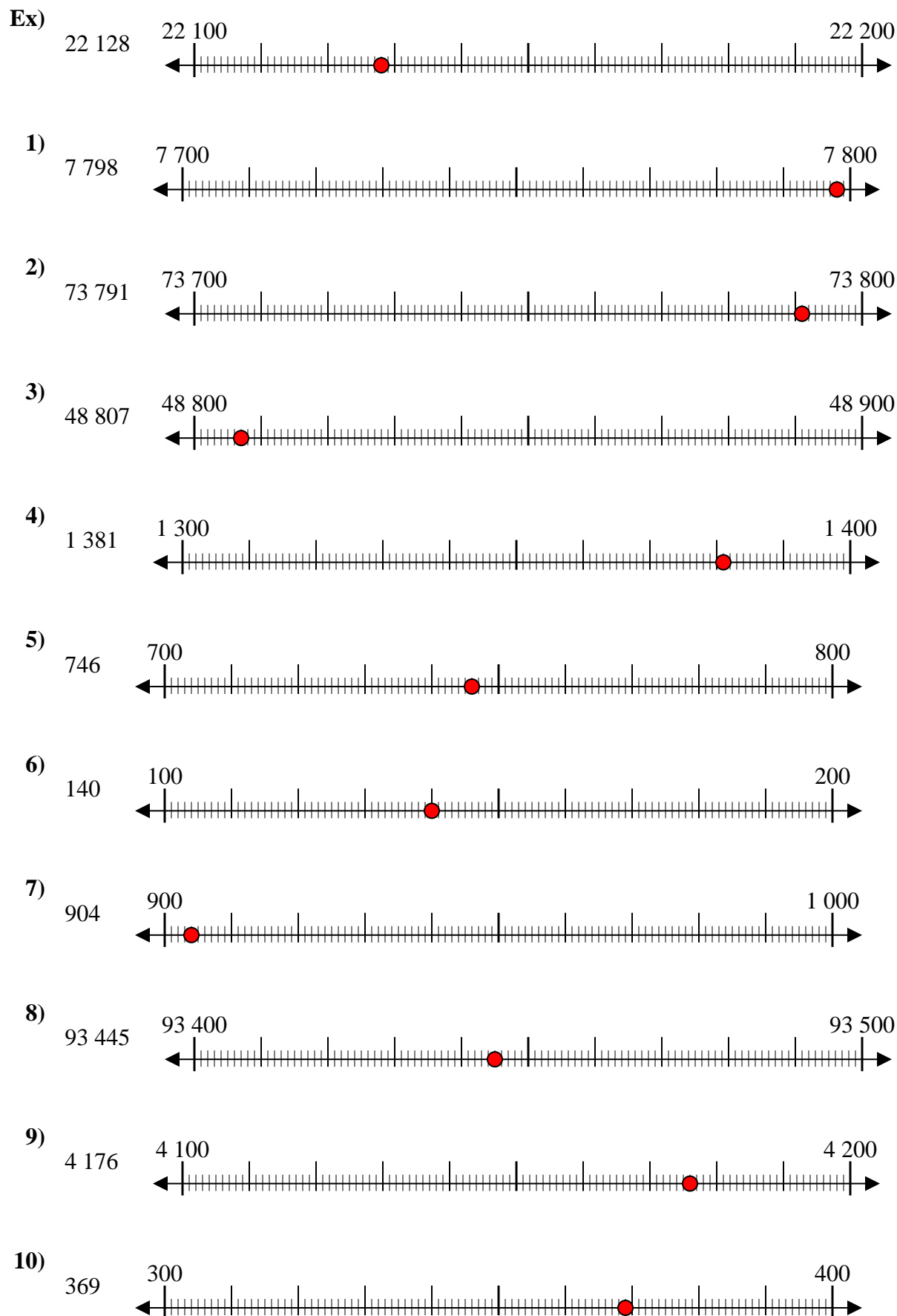


10. _____

Réponses



Avec les droites numériques arrondir chaque nombre à la centaine la plus proche.



Réponses

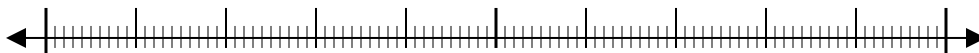
- Ex. 22 100
1. 7 800
2. 73 800
3. 48 800
4. 1 400
5. 700
6. 100
7. 900
8. 93 400
9. 4 200
10. 400



Avec les droites numériques arrondir chaque nombre à la centaine la plus proche.

Ex)

4 028

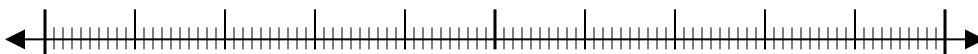


Ex.

4 000

1)

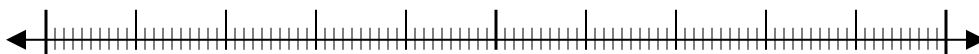
905



1. _____

2)

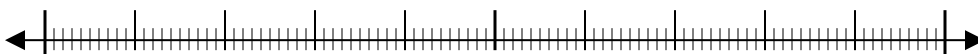
4 915



2. _____

3)

984



3. _____

4)

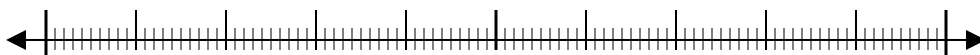
6 410



4. _____

5)

43 902



5. _____

6)

20 088



6. _____

7)

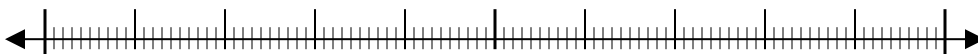
59 370



7. _____

8)

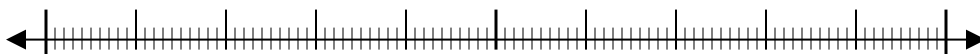
815



8. _____

9)

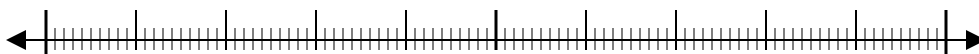
38 901



9. _____

10)

4 908

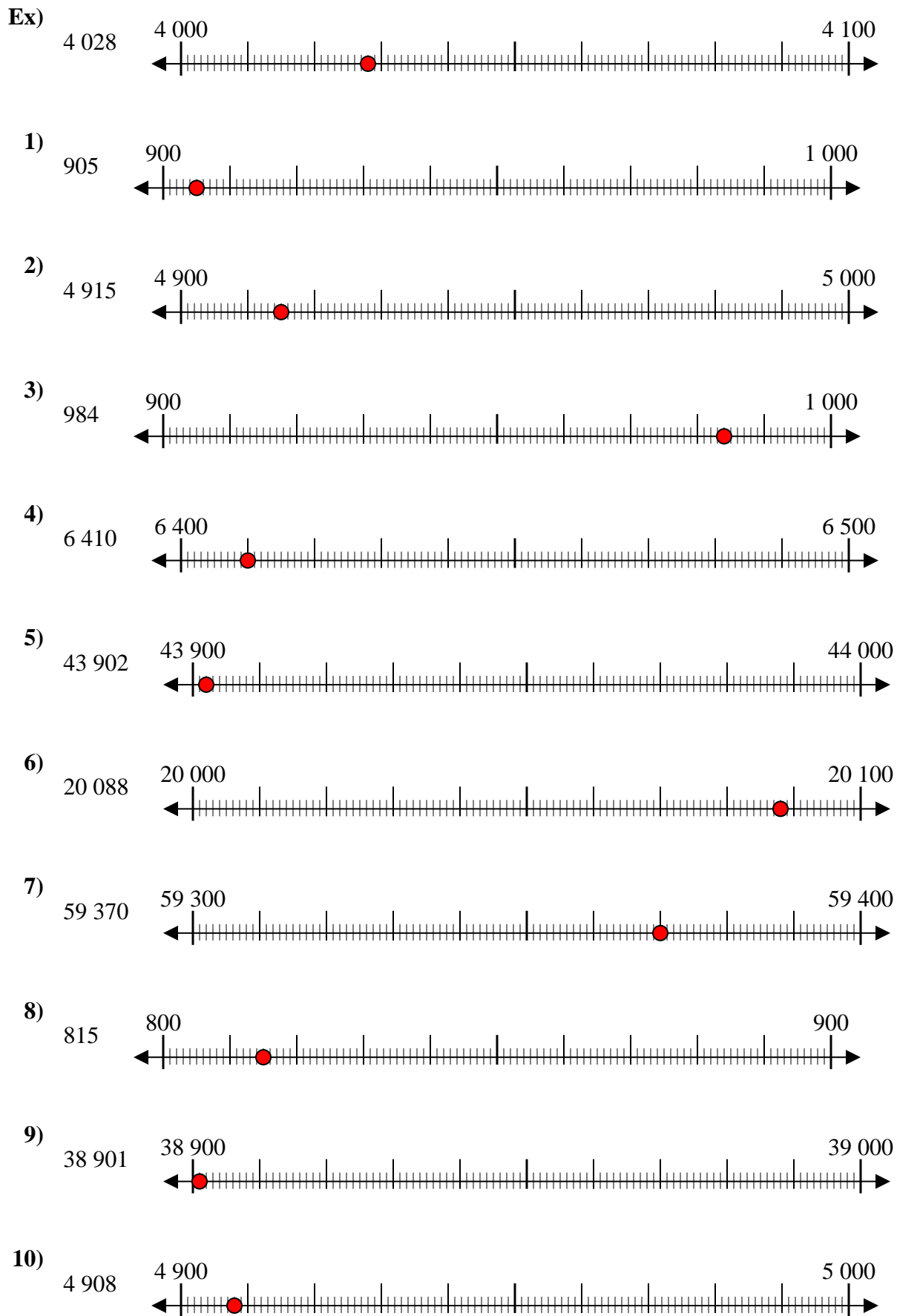


10. _____

Réponses



Avec les droites numériques arrondir chaque nombre à la centaine la plus proche.



Réponses

- Ex. 4 000
1. 900
2. 4 900
3. 1 000
4. 6 400
5. 43 900
6. 20 100
7. 59 400
8. 800
9. 38 900
10. 4 900