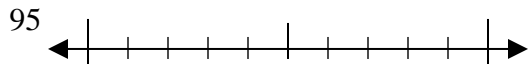


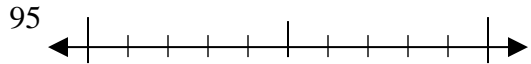


Utilisez la droite numérique associée pour arrondir à la dizaine.

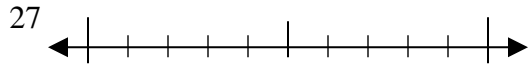
Ex)



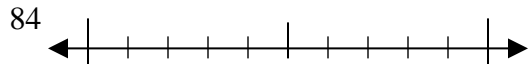
1)



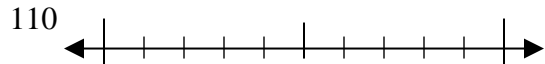
2)



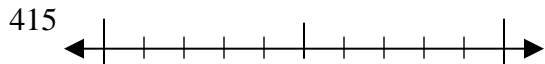
3)



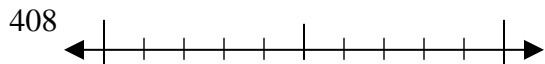
4)



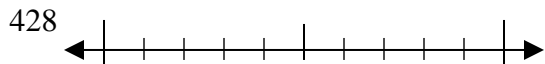
5)



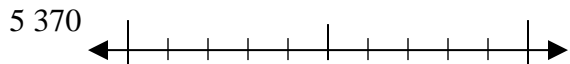
6)



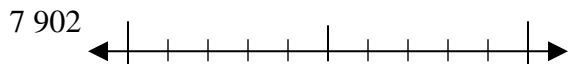
7)



8)



9)



**Réponses**

Ex. **100**

1. \_\_\_\_\_

2. \_\_\_\_\_

3. \_\_\_\_\_

4. \_\_\_\_\_

5. \_\_\_\_\_

6. \_\_\_\_\_

7. \_\_\_\_\_

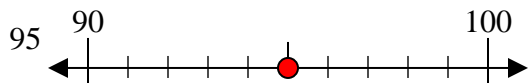
8. \_\_\_\_\_

9. \_\_\_\_\_

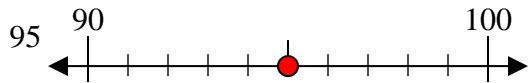


Utilisez la droite numérique associée pour arrondir à la dizaine.

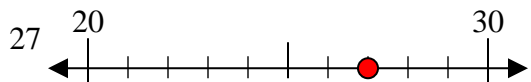
Ex)



1)



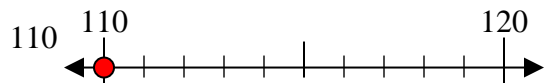
2)



3)



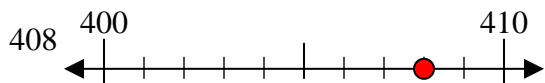
4)



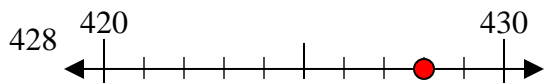
5)



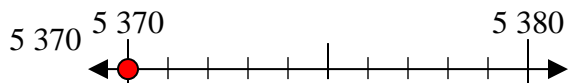
6)



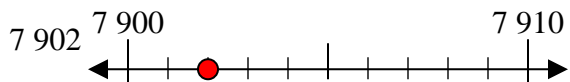
7)



8)



9)



**Réponses**

Ex. 100

1. 100

2. 30

3. 80

4. 110

5. 420

6. 410

7. 430

8. 5370

9. 7900