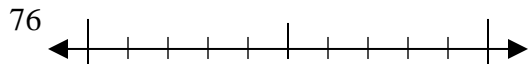


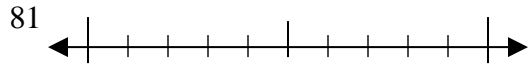


Utilisez la droite numérique associée pour arrondir à la dizaine.

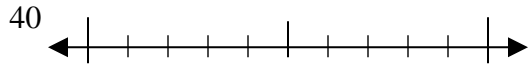
Ex)



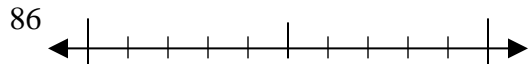
1)



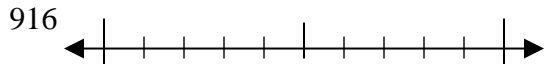
2)



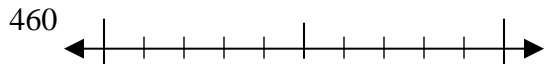
3)



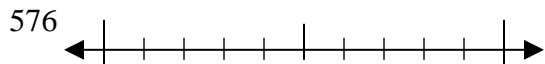
4)



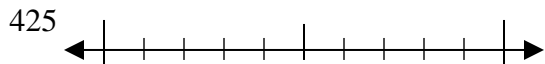
5)



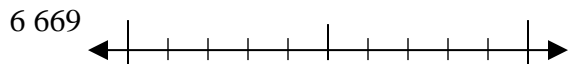
6)



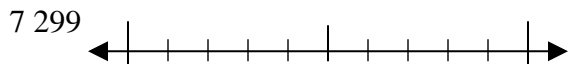
7)



8)



9)



Réponses

Ex. 80

1. _____

2. _____

3. _____

4. _____

5. _____

6. _____

7. _____

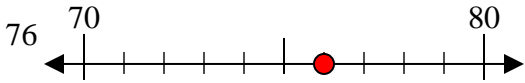
8. _____

9. _____

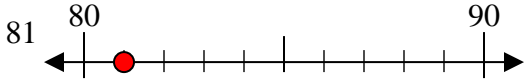


Utilisez la droite numérique associée pour arrondir à la dizaine.

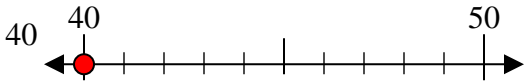
Ex)



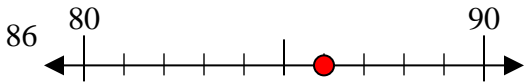
1)



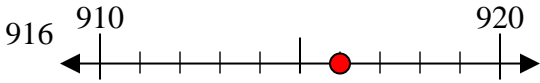
2)



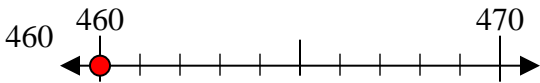
3)



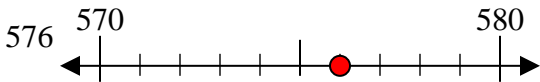
4)



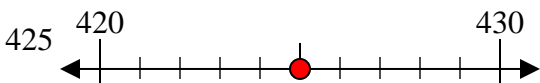
5)



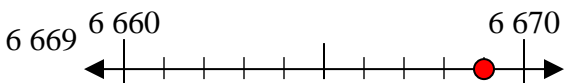
6)



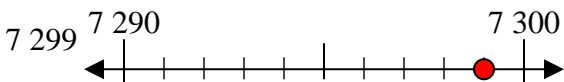
7)



8)



9)



Réponses

Ex. 80

1. 80

2. 40

3. 90

4. 920

5. 460

6. 580

7. 430

8. 6670

9. 7300