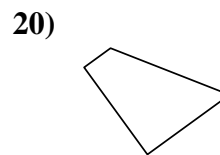
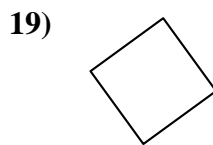
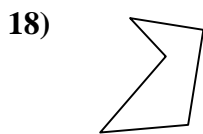
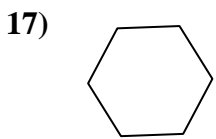
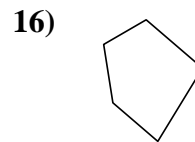
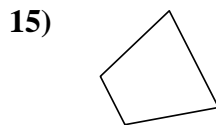

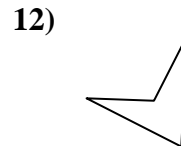
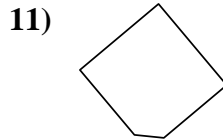
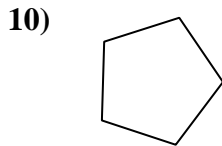
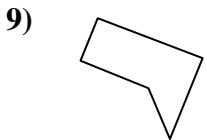
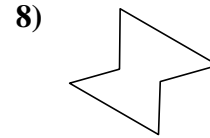
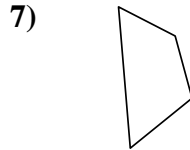
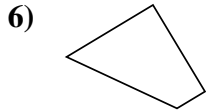
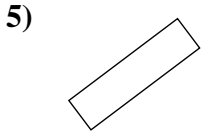
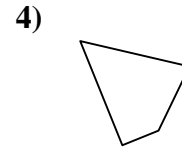
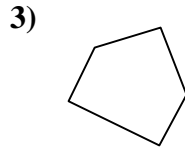
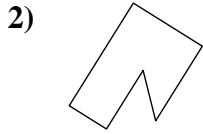
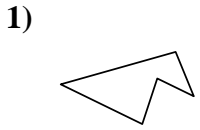




Déterminez si la figure est un quadrilatère (oui ou non).

**Réponses**



1. \_\_\_\_\_

2. \_\_\_\_\_

3. \_\_\_\_\_

4. \_\_\_\_\_

5. \_\_\_\_\_

6. \_\_\_\_\_

7. \_\_\_\_\_

8. \_\_\_\_\_

9. \_\_\_\_\_

10. \_\_\_\_\_

11. \_\_\_\_\_

12. \_\_\_\_\_

13. \_\_\_\_\_

14. \_\_\_\_\_

15. \_\_\_\_\_

16. \_\_\_\_\_

17. \_\_\_\_\_

18. \_\_\_\_\_

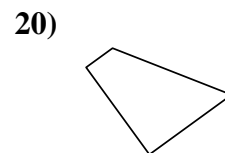
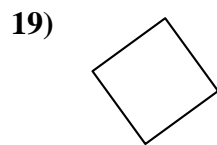
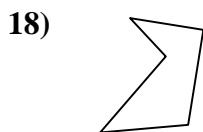
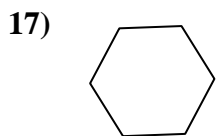
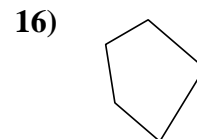
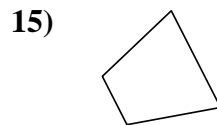

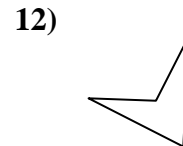
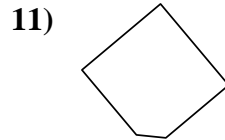
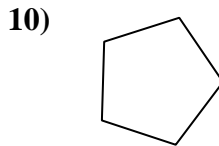
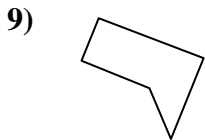
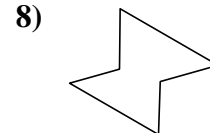
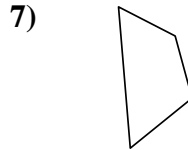
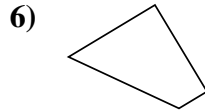
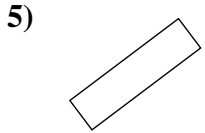
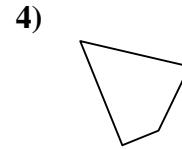
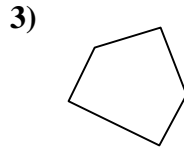
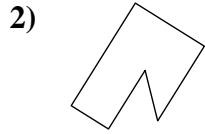
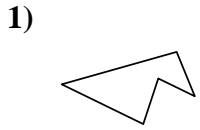
19. \_\_\_\_\_

20. \_\_\_\_\_



Déterminez si la figure est un quadrilatère (oui ou non).

**Réponses**



- 1. non
- 2. non
- 3. non
- 4. oui
- 5. oui
- 6. oui
- 7. oui
- 8. non
- 9. non
- 10. non
- 11. non
- 12. oui
- 13. oui
- 14. oui
- 15. oui
- 16. non
- 17. non
- 18. non
- 19. oui
- 20. oui