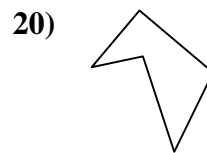
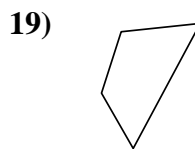
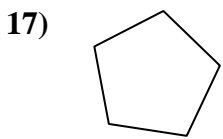
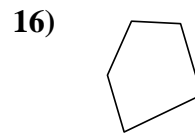
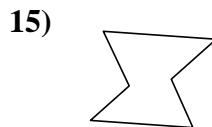
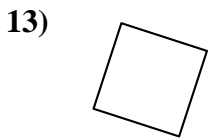
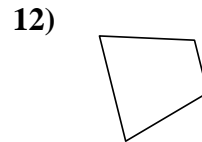
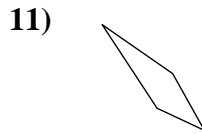
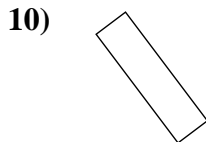
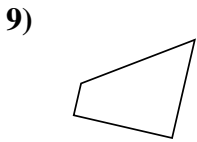
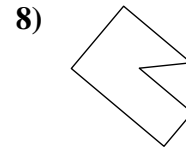
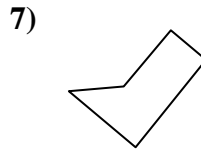
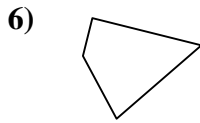
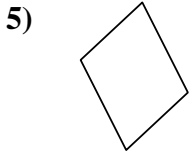
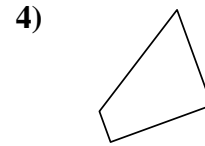
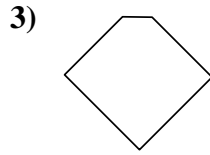
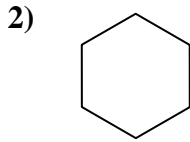
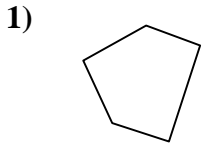




Déterminez si la figure est un quadrilatère (oui ou non).

**Réponses**



1. \_\_\_\_\_

2. \_\_\_\_\_

3. \_\_\_\_\_

4. \_\_\_\_\_

5. \_\_\_\_\_

6. \_\_\_\_\_

7. \_\_\_\_\_

8. \_\_\_\_\_

9. \_\_\_\_\_

10. \_\_\_\_\_

11. \_\_\_\_\_

12. \_\_\_\_\_

13. \_\_\_\_\_

14. \_\_\_\_\_

15. \_\_\_\_\_

16. \_\_\_\_\_

17. \_\_\_\_\_

18. \_\_\_\_\_

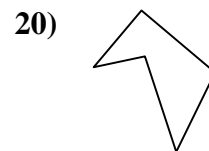
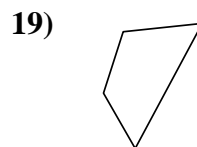
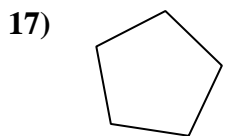
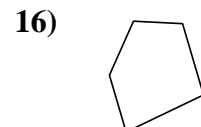
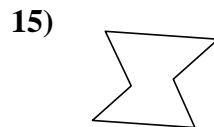
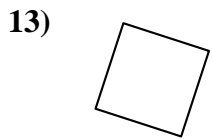
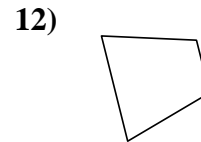
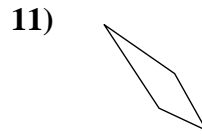
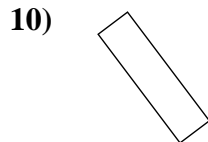
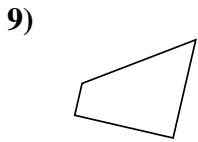
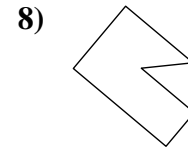
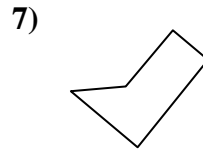
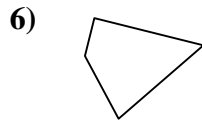
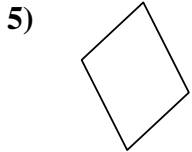
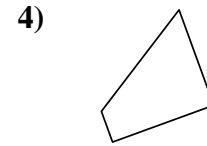
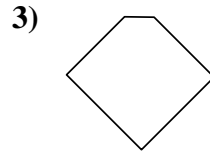
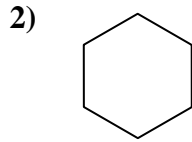
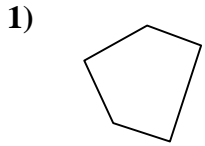
19. \_\_\_\_\_

20. \_\_\_\_\_



Déterminez si la figure est un quadrilatère (oui ou non).

**Réponses**



1. non

2. non

3. non

4. oui

5. oui

6. oui

7. non

8. non

9. oui

10. oui

11. oui

12. oui

13. oui

14. non

15. non

16. non

17. non

18. oui

19. oui

20. non