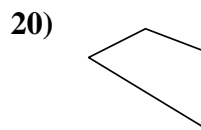
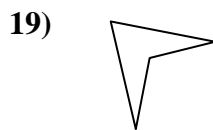
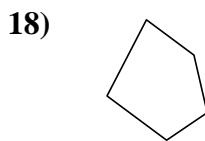
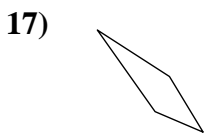
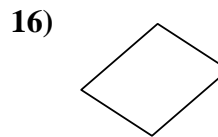
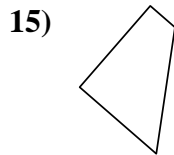
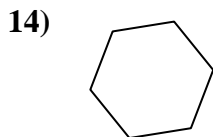
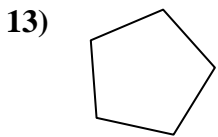
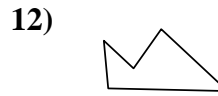
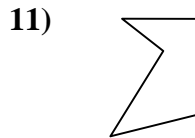
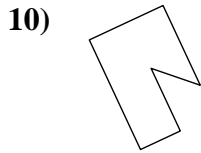
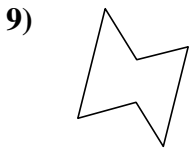
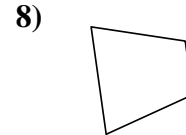
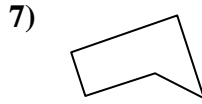
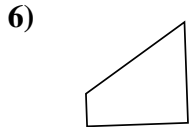
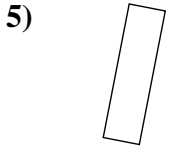
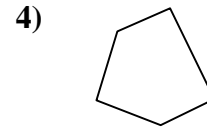
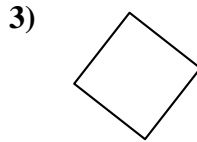
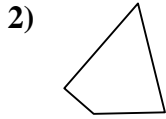
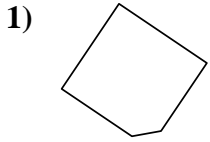




Déterminez si la figure est un quadrilatère (oui ou non).

**Réponses**

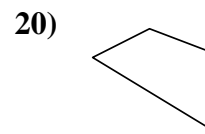
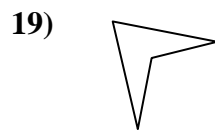
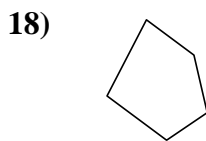
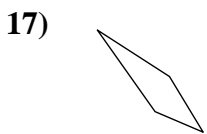
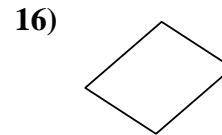
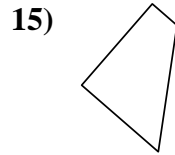
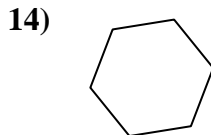
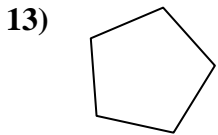
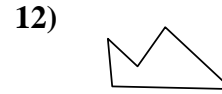
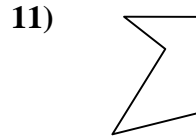
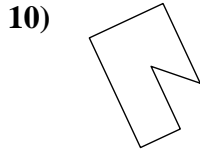
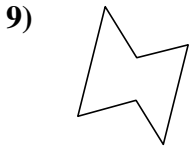
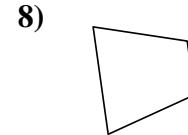
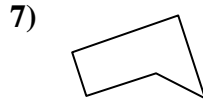
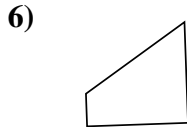
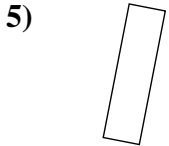
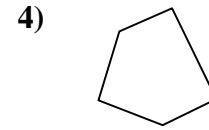
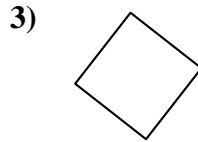
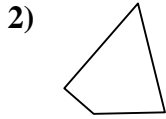
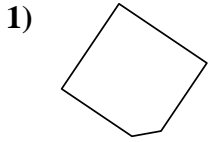


- 1. \_\_\_\_\_
- 2. \_\_\_\_\_
- 3. \_\_\_\_\_
- 4. \_\_\_\_\_
- 5. \_\_\_\_\_
- 6. \_\_\_\_\_
- 7. \_\_\_\_\_
- 8. \_\_\_\_\_
- 9. \_\_\_\_\_
- 10. \_\_\_\_\_
- 11. \_\_\_\_\_
- 12. \_\_\_\_\_
- 13. \_\_\_\_\_
- 14. \_\_\_\_\_
- 15. \_\_\_\_\_
- 16. \_\_\_\_\_
- 17. \_\_\_\_\_
- 18. \_\_\_\_\_
- 19. \_\_\_\_\_
- 20. \_\_\_\_\_



Déterminez si la figure est un quadrilatère (oui ou non).

**Réponses**



1. non

2. oui

3. oui

4. non

5. oui

6. oui

7. non

8. oui

9. non

10. non

11. non

12. non

13. non

14. non

15. oui

16. oui

17. oui

18. non

19. oui

20. oui