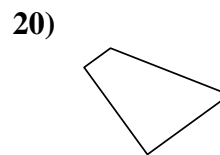
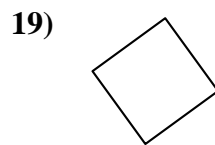
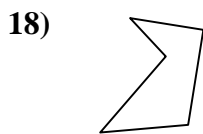
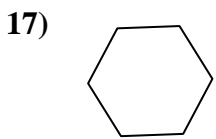
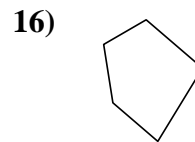
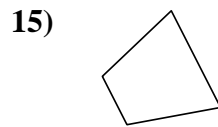

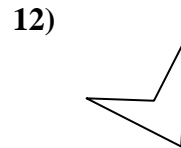
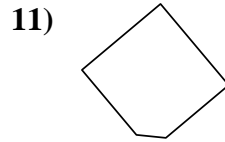
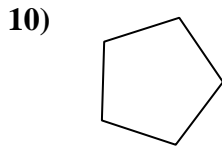
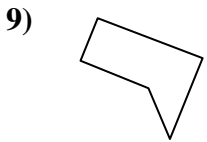
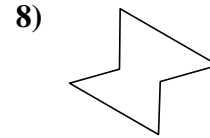
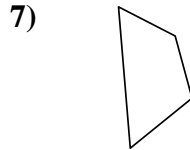
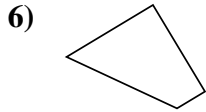
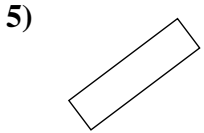
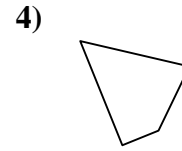
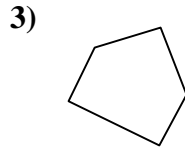
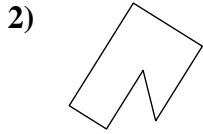
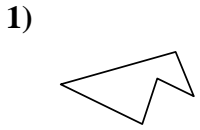




Déterminez si la figure est un quadrilatère (oui ou non).

Réponses



1. _____

2. _____

3. _____

4. _____

5. _____

6. _____

7. _____

8. _____

9. _____

10. _____

11. _____

12. _____

13. _____

14. _____

15. _____

16. _____

17. _____

18. _____

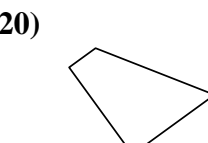
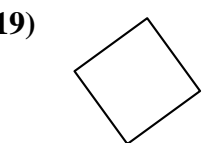
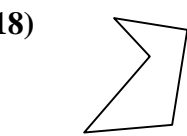
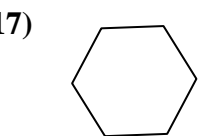
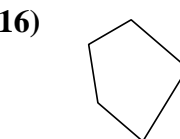
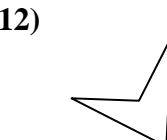
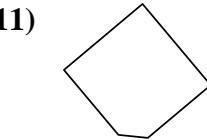
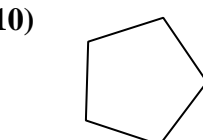
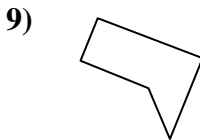
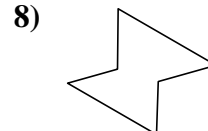
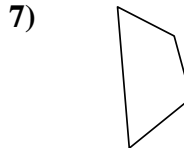
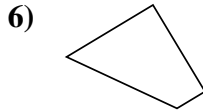
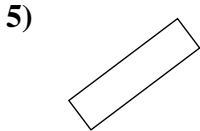
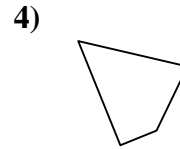
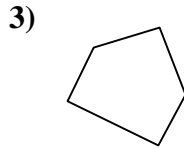
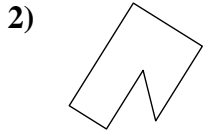
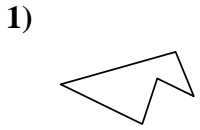
19. _____

20. _____



Déterminez si la figure est un quadrilatère (oui ou non).

Réponses



1. non

2. non

3. non

4. oui

5. oui

6. oui

7. oui

8. non

9. non

10. non

11. non

12. oui

13. oui

14. oui

15. oui

16. non

17. non

18. non

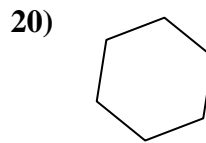
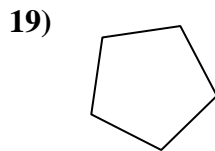
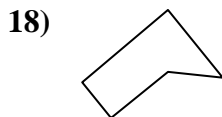
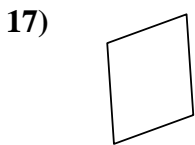
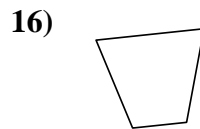
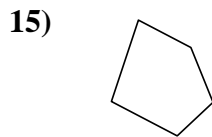
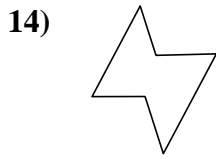
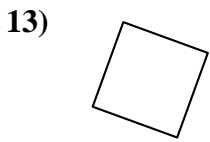
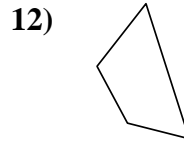
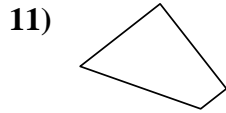
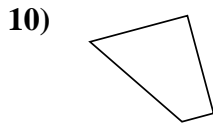

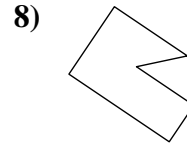
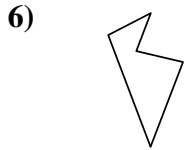
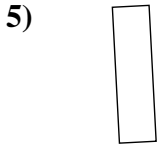
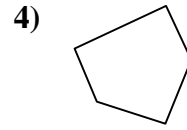
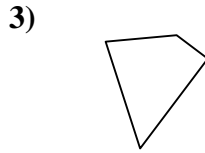
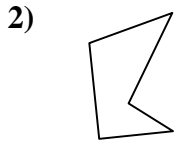
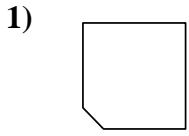
19. oui

20. oui



Déterminez si la figure est un quadrilatère (oui ou non).

Réponses

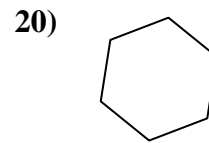
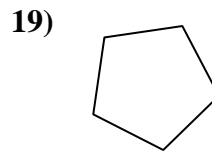
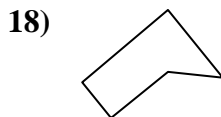
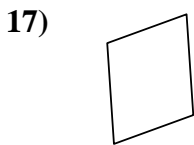
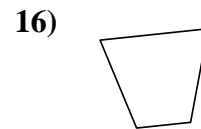
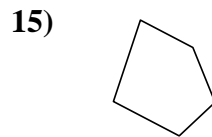
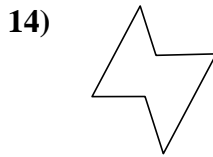
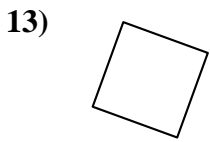
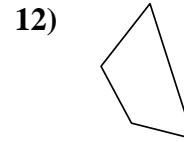
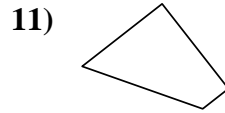
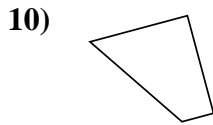

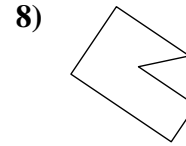
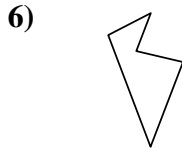
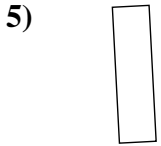
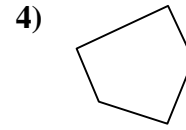
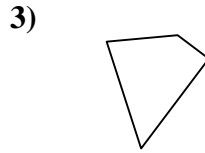
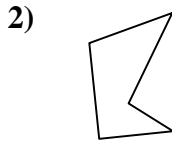
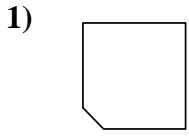


- 1. _____
- 2. _____
- 3. _____
- 4. _____
- 5. _____
- 6. _____
- 7. _____
- 8. _____
- 9. _____
- 10. _____
- 11. _____
- 12. _____
- 13. _____
- 14. _____
- 15. _____
- 16. _____
- 17. _____
- 18. _____
- 19. _____
- 20. _____



Déterminez si la figure est un quadrilatère (oui ou non).

Réponses



1. non

2. non

3. oui

4. non

5. oui

6. non

7. oui

8. non

9. oui

10. oui

11. oui

12. oui

13. oui

14. non

15. non

16. oui

17. oui

18. non

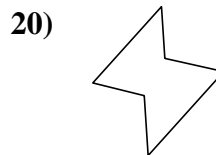
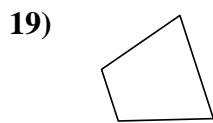
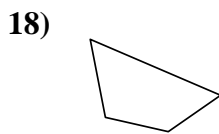
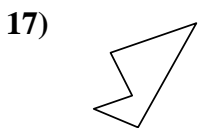
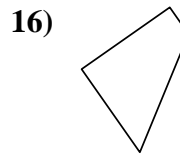
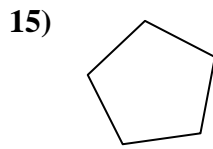
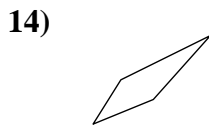
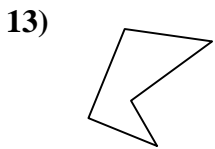
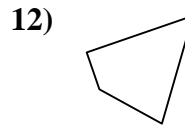
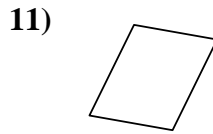
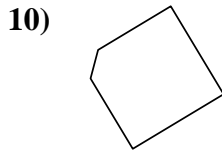
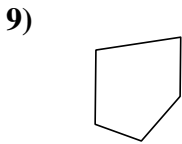
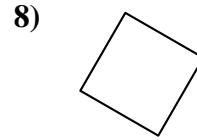
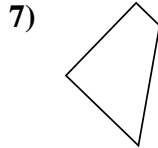
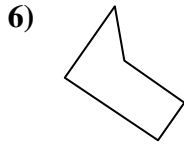
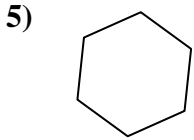

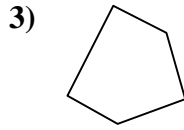
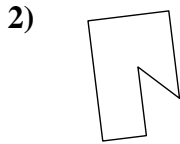
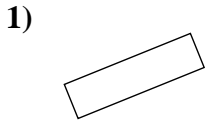
19. non

20. non



Déterminez si la figure est un quadrilatère (oui ou non).

Réponses

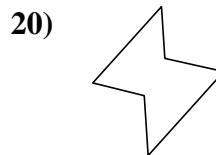
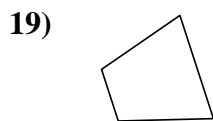
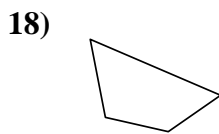
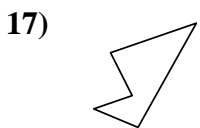
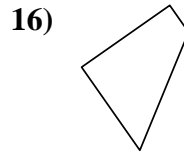
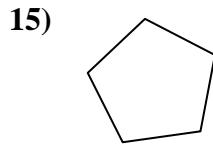
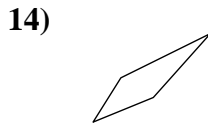
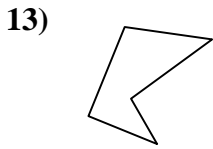
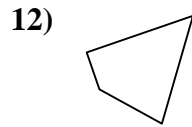
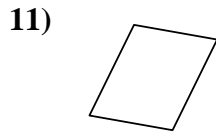
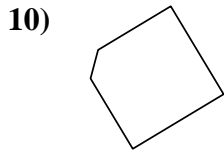
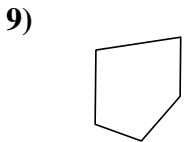
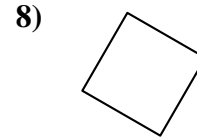
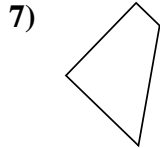
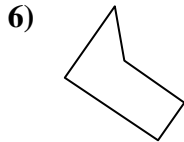
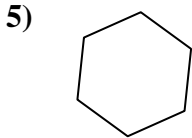

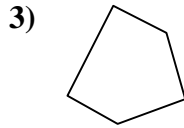
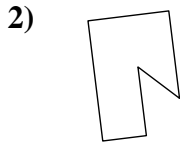
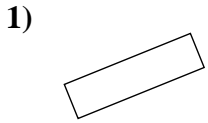


- 1. _____
- 2. _____
- 3. _____
- 4. _____
- 5. _____
- 6. _____
- 7. _____
- 8. _____
- 9. _____
- 10. _____
- 11. _____
- 12. _____
- 13. _____
- 14. _____
- 15. _____
- 16. _____
- 17. _____
- 18. _____
- 19. _____
- 20. _____



Déterminez si la figure est un quadrilatère (oui ou non).

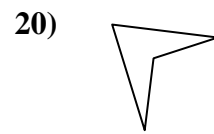
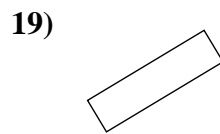
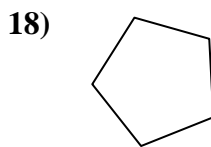

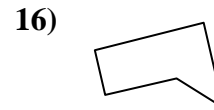
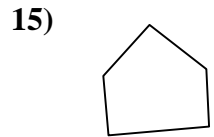
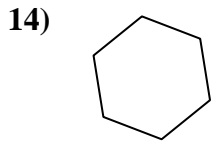
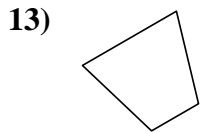
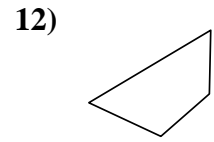
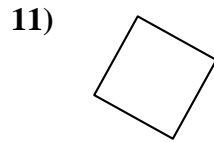
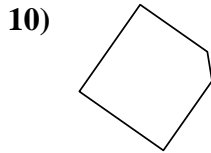
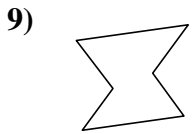
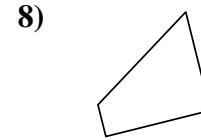
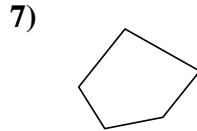
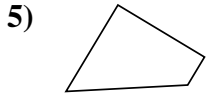
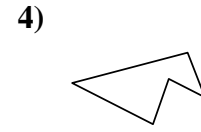
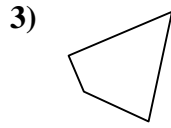
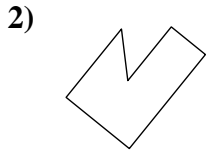
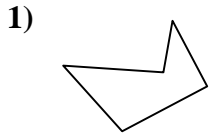
Réponses



- 1. oui
- 2. non
- 3. non
- 4. oui
- 5. non
- 6. non
- 7. oui
- 8. oui
- 9. non
- 10. non
- 11. oui
- 12. oui
- 13. non
- 14. oui
- 15. non
- 16. oui
- 17. non
- 18. oui
- 19. oui
- 20. non



Déterminez si la figure est un quadrilatère (oui ou non).



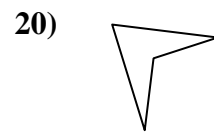
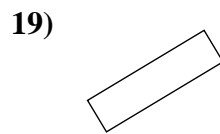
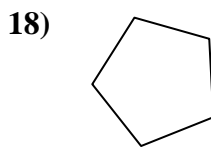

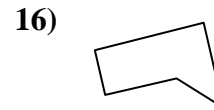
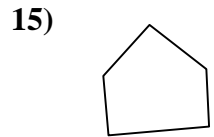
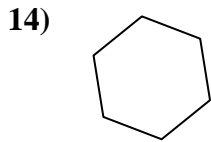
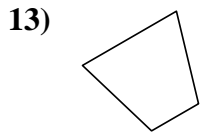
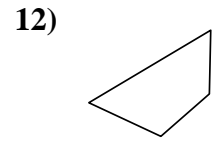
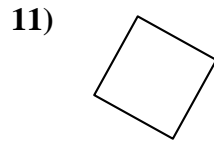
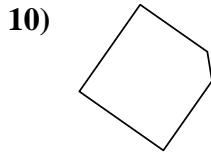
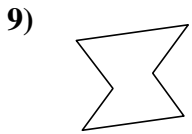
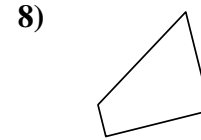
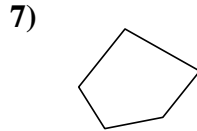
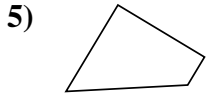
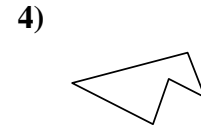
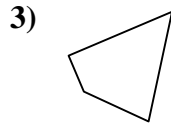
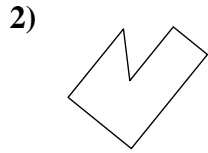
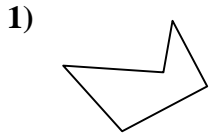
Réponses

1. _____
2. _____
3. _____
4. _____
5. _____
6. _____
7. _____
8. _____
9. _____
10. _____
11. _____
12. _____
13. _____
14. _____
15. _____
16. _____
17. _____
18. _____
19. _____
20. _____



Déterminez si la figure est un quadrilatère (oui ou non).

Réponses



1. non

2. non

3. oui

4. non

5. oui

6. oui

7. non

8. oui

9. non

10. non

11. oui

12. oui

13. oui

14. non

15. non

16. non

17. oui

18. non

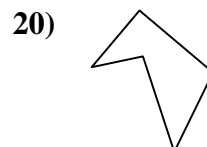
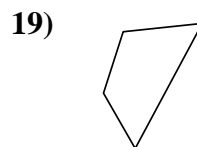
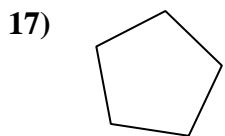
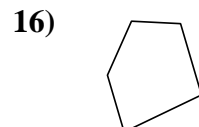
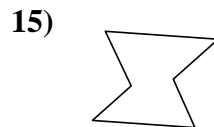
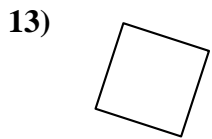
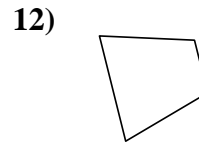
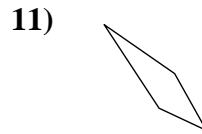
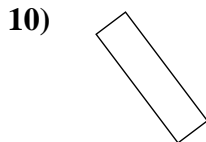
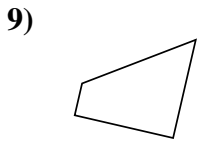
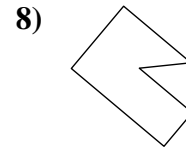
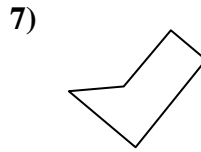
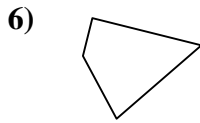
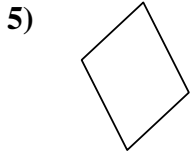
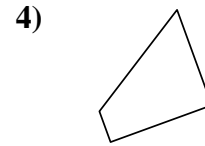
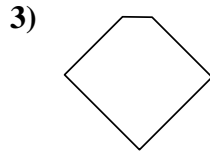
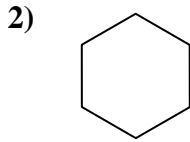
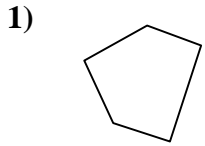
19. oui

20. oui



Déterminez si la figure est un quadrilatère (oui ou non).

Réponses



1. _____

2. _____

3. _____

4. _____

5. _____

6. _____

7. _____

8. _____

9. _____

10. _____

11. _____

12. _____

13. _____

14. _____

15. _____

16. _____

17. _____

18. _____

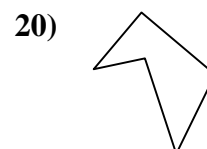
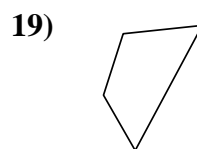
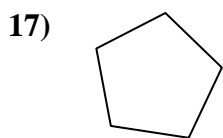
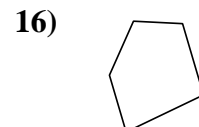
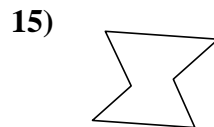
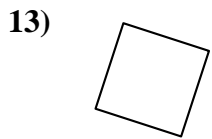
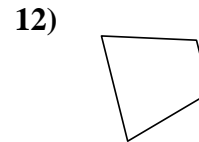
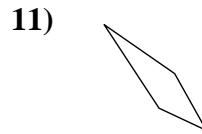
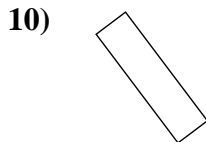
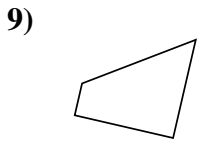
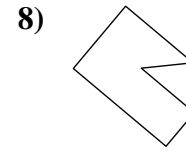
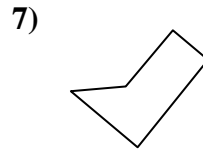
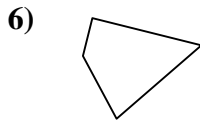
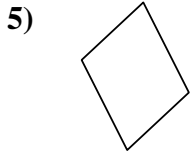
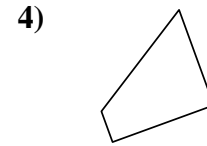
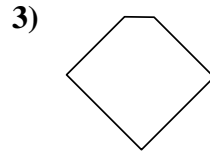
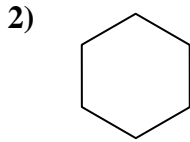
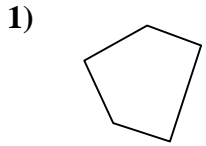
19. _____

20. _____



Déterminez si la figure est un quadrilatère (oui ou non).

Réponses



1. non

2. non

3. non

4. oui

5. oui

6. oui

7. non

8. non

9. oui

10. oui

11. oui

12. oui

13. oui

14. non

15. non

16. non

17. non

18. oui

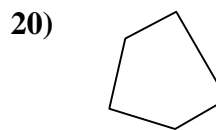
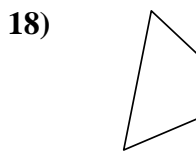
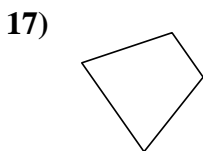
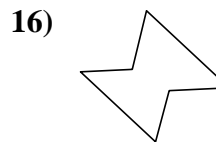
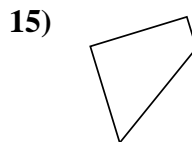
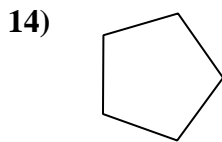
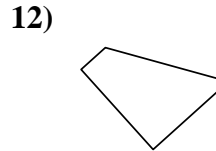
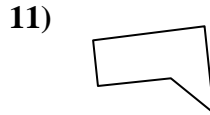
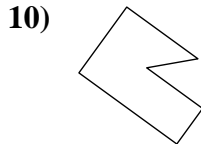
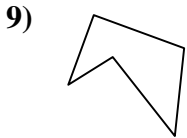
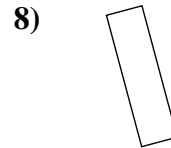
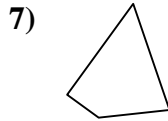
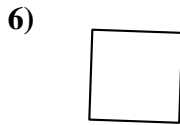
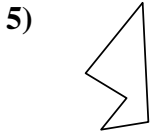
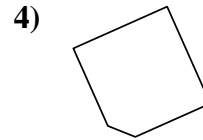
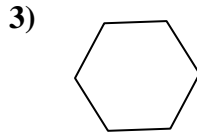
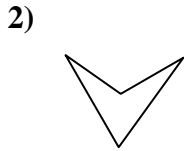
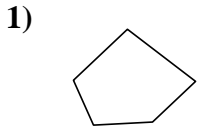
19. oui

20. non



Déterminez si la figure est un quadrilatère (oui ou non).

Réponses



1. _____

2. _____

3. _____

4. _____

5. _____

6. _____

7. _____

8. _____

9. _____

10. _____

11. _____

12. _____

13. _____

14. _____

15. _____

16. _____

17. _____

18. _____

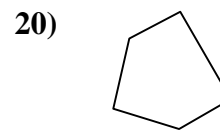
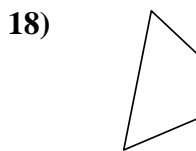
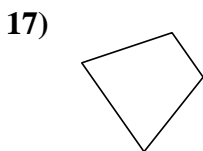
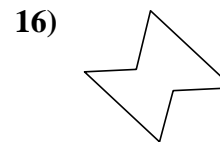
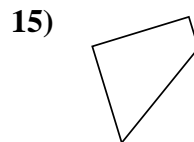
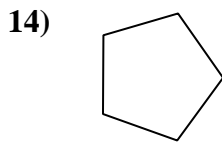
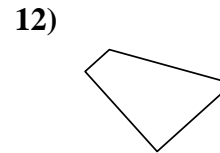
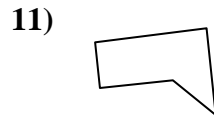
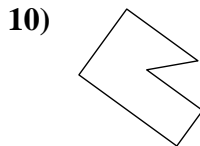
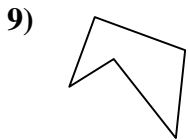
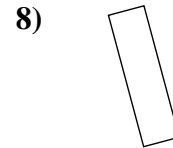
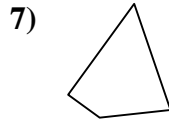
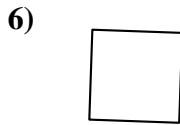
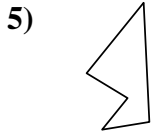
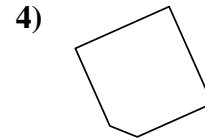
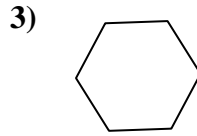
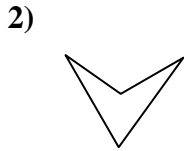
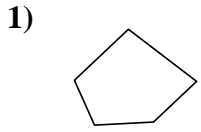
19. _____

20. _____



Déterminez si la figure est un quadrilatère (oui ou non).

Réponses

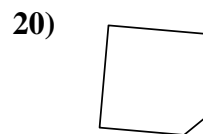
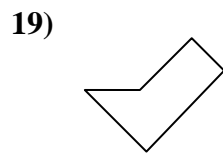
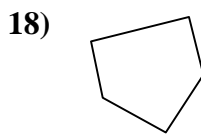
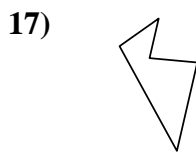
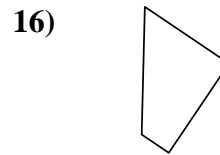
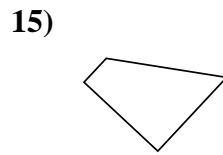
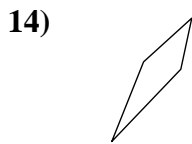
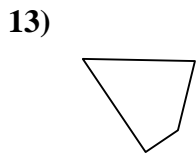
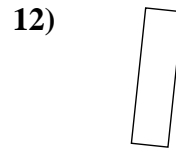
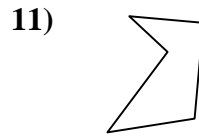
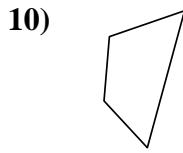
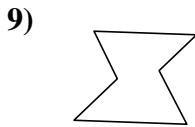
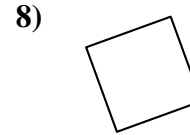
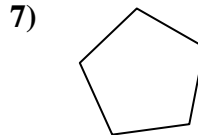
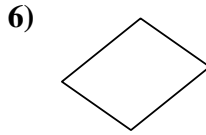
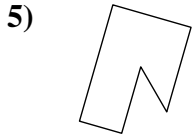
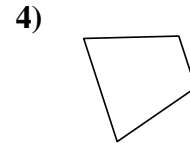
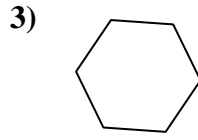
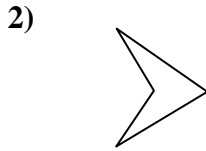
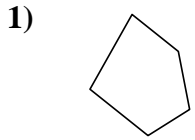


- 1. non
- 2. oui
- 3. non
- 4. non
- 5. non
- 6. oui
- 7. oui
- 8. oui
- 9. non
- 10. non
- 11. non
- 12. oui
- 13. oui
- 14. non
- 15. oui
- 16. non
- 17. oui
- 18. oui
- 19. oui
- 20. non



Déterminez si la figure est un quadrilatère (oui ou non).

Réponses



1. _____

2. _____

3. _____

4. _____

5. _____

6. _____

7. _____

8. _____

9. _____

10. _____

11. _____

12. _____

13. _____

14. _____

15. _____

16. _____

17. _____

18. _____

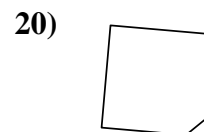
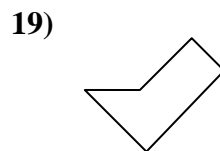
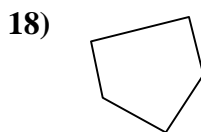
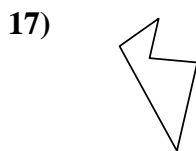
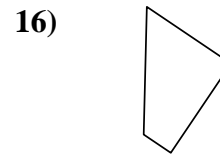
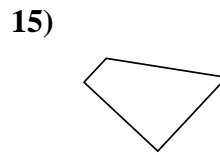
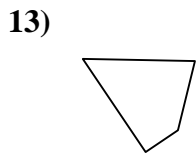
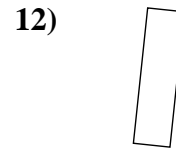
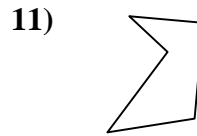
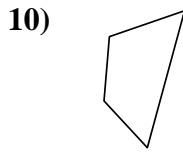
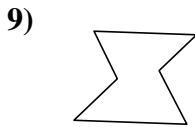
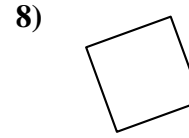
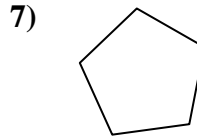
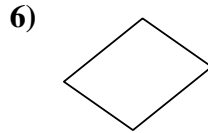
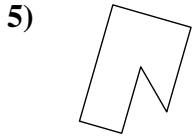
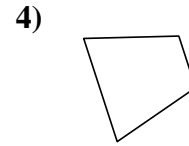
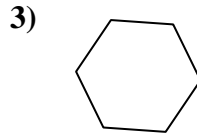
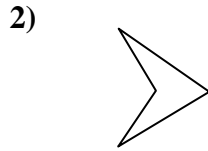
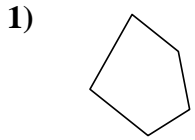
19. _____

20. _____



Déterminez si la figure est un quadrilatère (oui ou non).

Réponses



1. non

2. oui

3. non

4. oui

5. non

6. oui

7. non

8. oui

9. non

10. oui

11. non

12. oui

13. oui

14. oui

15. oui

16. oui

17. non

18. non

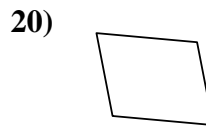
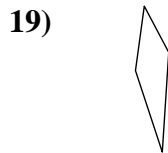
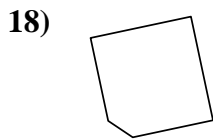
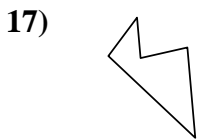
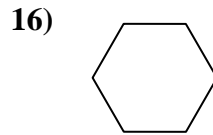
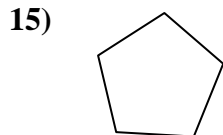
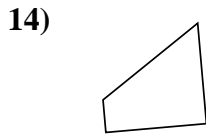
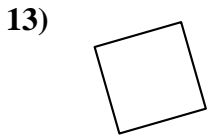
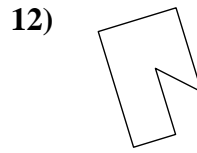
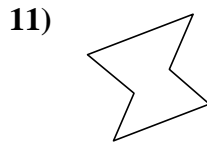
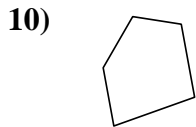
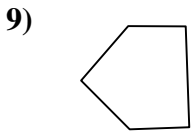
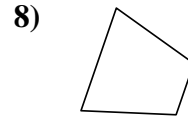
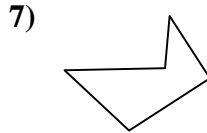
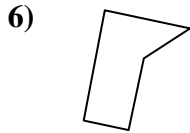

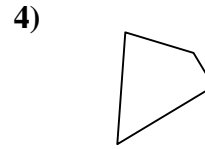
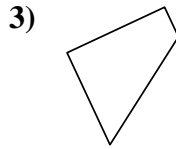
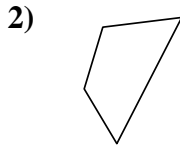

19. non

20. non



Déterminez si la figure est un quadrilatère (oui ou non).

Réponses

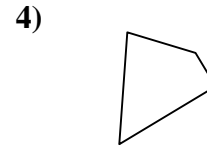
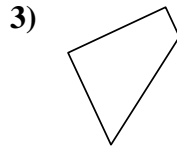
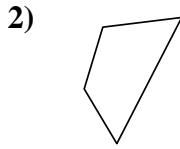



- 1. _____
- 2. _____
- 3. _____
- 4. _____
- 5. _____
- 6. _____
- 7. _____
- 8. _____
- 9. _____
- 10. _____
- 11. _____
- 12. _____
- 13. _____
- 14. _____
- 15. _____
- 16. _____
- 17. _____
- 18. _____
- 19. _____
- 20. _____



Déterminez si la figure est un quadrilatère (oui ou non).

Réponses

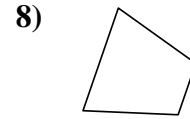
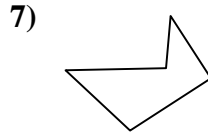
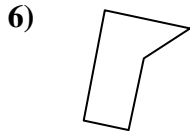



1. oui

2. oui

3. oui

4. oui

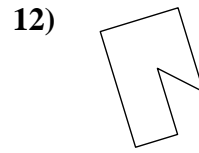
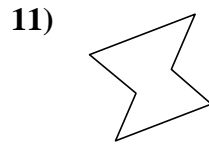
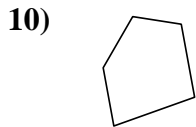
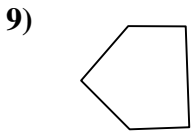


5. oui

6. non

7. non

8. oui

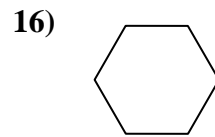
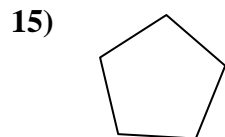
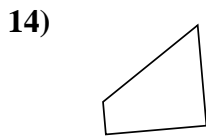
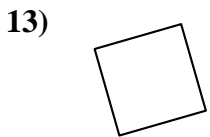


9. non

10. non

11. non

12. non

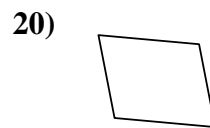
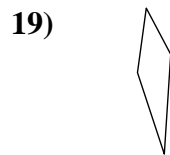
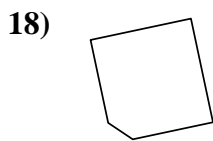
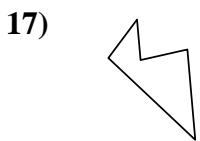


13. oui

14. oui

15. non

16. non



17. non

18. non

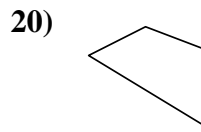
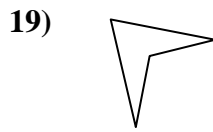
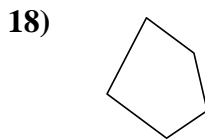
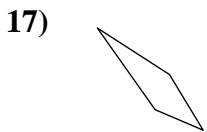
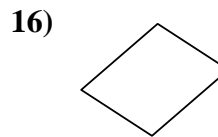
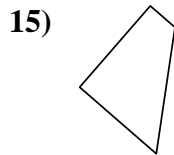
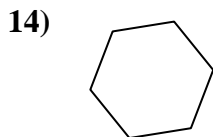
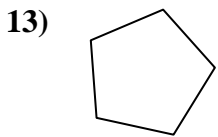
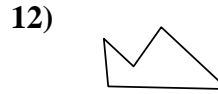
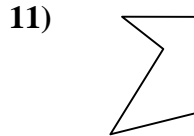
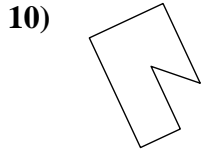
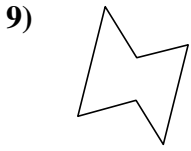
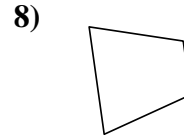
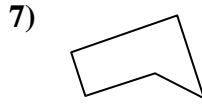
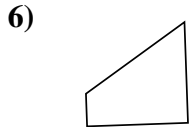
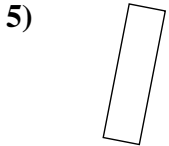
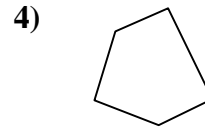
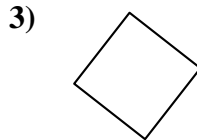
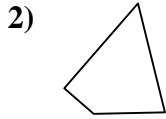
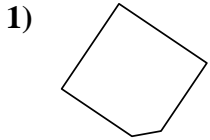
19. oui

20. oui



Déterminez si la figure est un quadrilatère (oui ou non).

Réponses

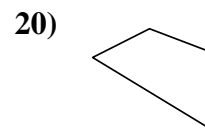
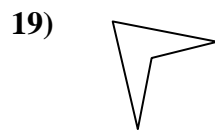
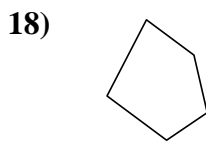
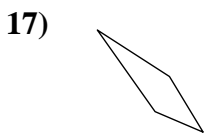
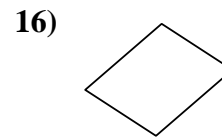
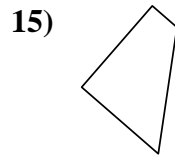
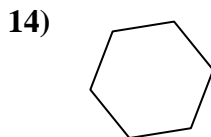
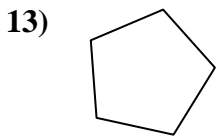
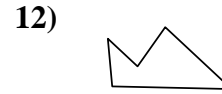
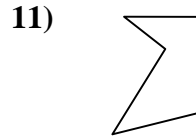
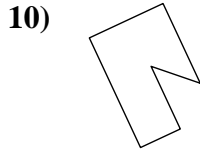
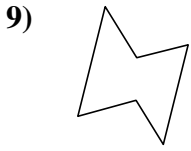
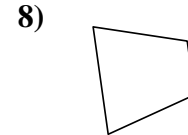
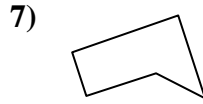
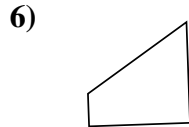
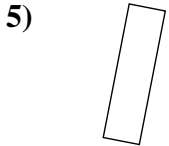
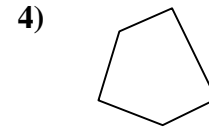
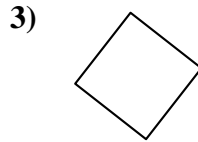
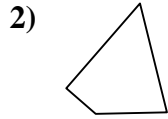
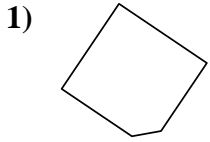


- 1. _____
- 2. _____
- 3. _____
- 4. _____
- 5. _____
- 6. _____
- 7. _____
- 8. _____
- 9. _____
- 10. _____
- 11. _____
- 12. _____
- 13. _____
- 14. _____
- 15. _____
- 16. _____
- 17. _____
- 18. _____
- 19. _____
- 20. _____



Déterminez si la figure est un quadrilatère (oui ou non).

Réponses



1. non

2. oui

3. oui

4. non

5. oui

6. oui

7. non

8. oui

9. non

10. non

11. non

12. non

13. non

14. non

15. oui

16. oui

17. oui

18. non

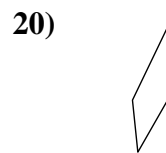
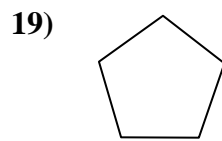
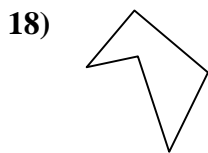
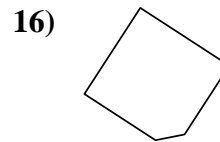
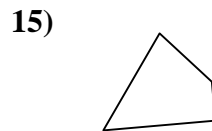
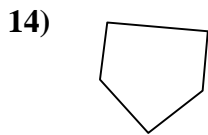
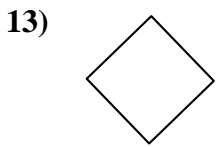
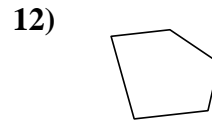
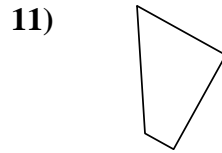
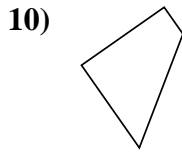
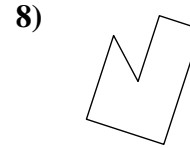
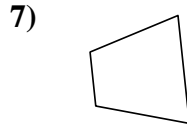
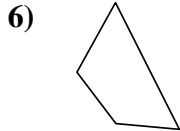
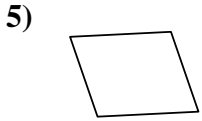
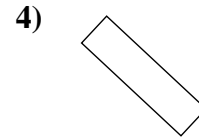
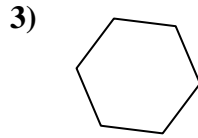
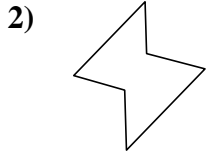
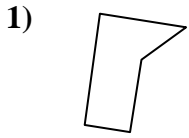
19. oui

20. oui



Déterminez si la figure est un quadrilatère (oui ou non).

Réponses



1. _____

2. _____

3. _____

4. _____

5. _____

6. _____

7. _____

8. _____

9. _____

10. _____

11. _____

12. _____

13. _____

14. _____

15. _____

16. _____

17. _____

18. _____

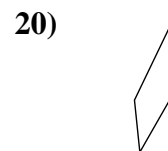
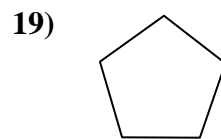
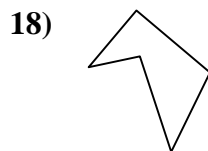
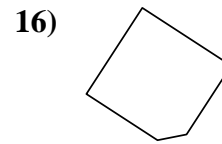
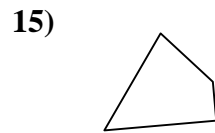
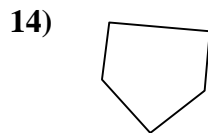
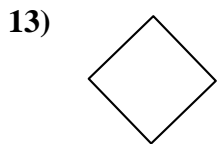
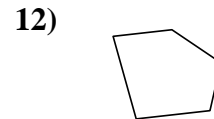
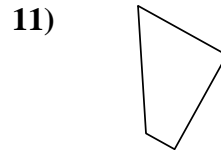
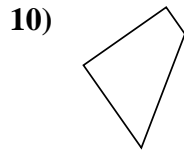
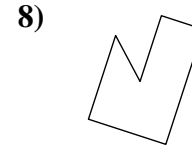
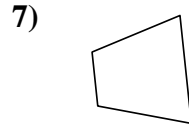
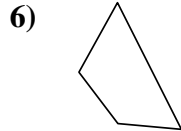
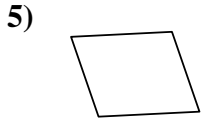
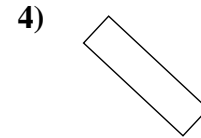
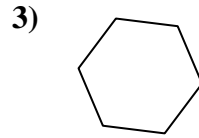
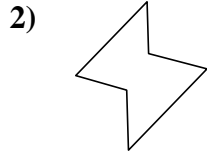
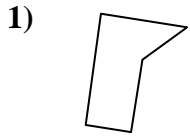
19. _____

20. _____



Déterminez si la figure est un quadrilatère (oui ou non).

Réponses



1. non

2. non

3. non

4. oui

5. oui

6. oui

7. oui

8. non

9. oui

10. oui

11. oui

12. non

13. oui

14. non

15. oui

16. non

17. non

18. non

19. non

20. oui