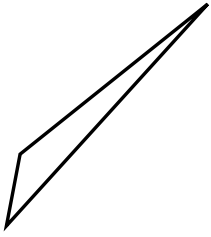




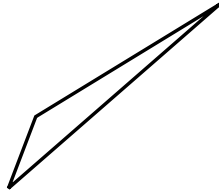
Déterminez si la figure est un triangle rectangle (oui ou non).

Réponses

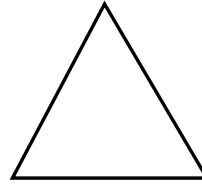
1)



2)



3)



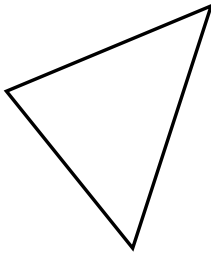
1. _____

2. _____

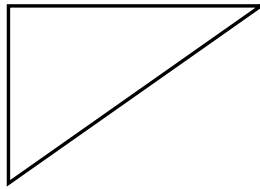
3. _____

4. _____


4)



5)



6)




5. _____

6. _____

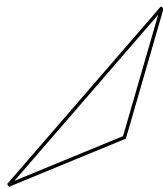
7. _____

8. _____


7)



8)



9)



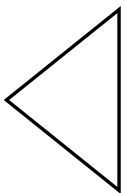
9. _____

10. _____

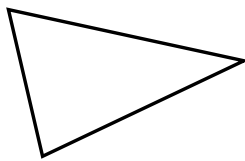
11. _____

12. _____

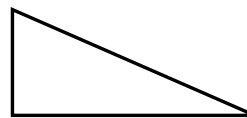
10)



11)



12)

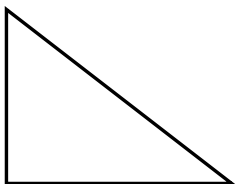


13. _____

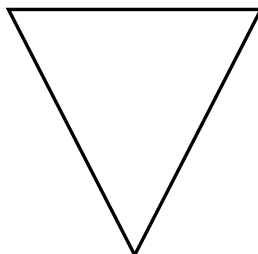
14. _____

15. _____

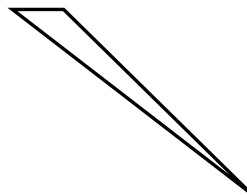
13)



14)



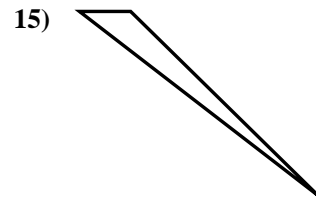
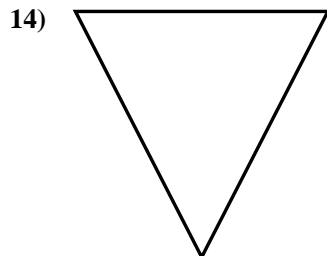
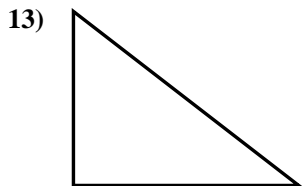
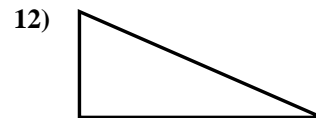
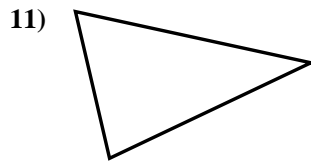
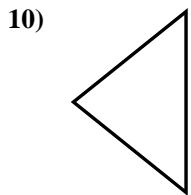
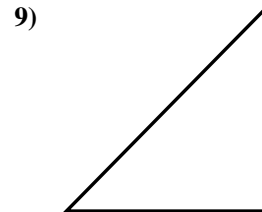
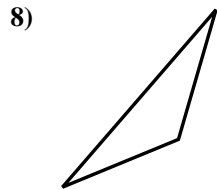
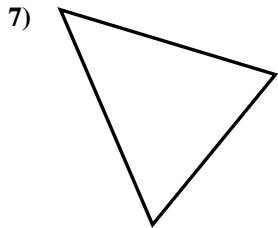
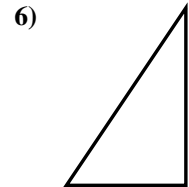
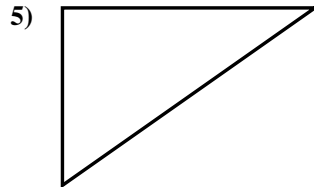
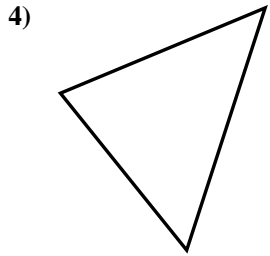
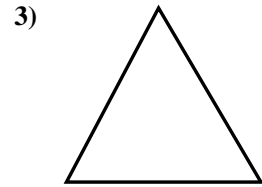
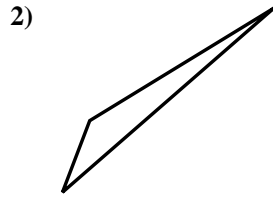
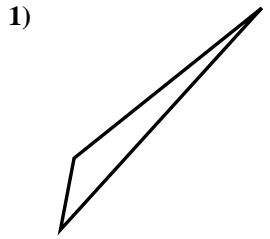
15)





Déterminez si la figure est un triangle rectangle (oui ou non).

Réponses



1. non

2. non

3. non

4. non

5. oui

6. oui

7. non

8. non

9. oui

10. non

11. non

12. oui

13. oui

14. non

15. non