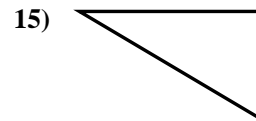
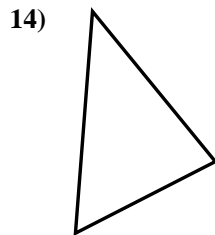
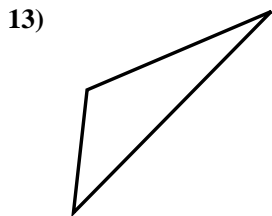
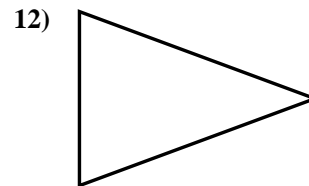
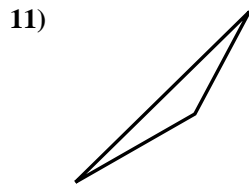
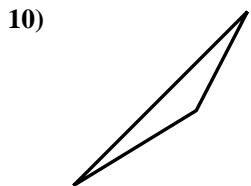
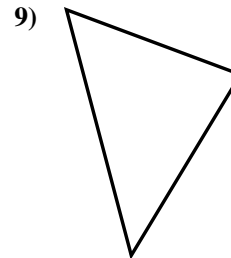
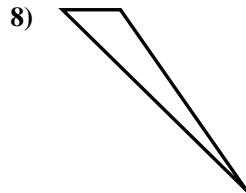
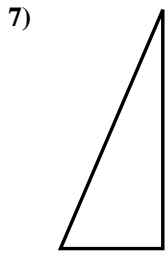
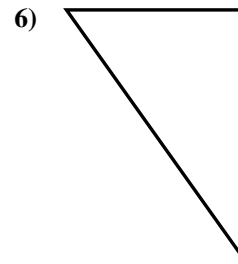
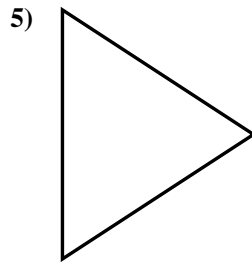
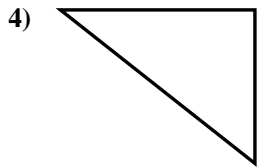
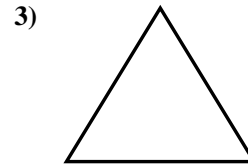
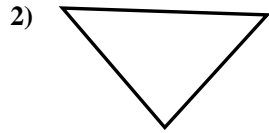
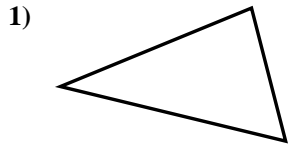




Déterminez si la figure est un triangle rectangle (oui ou non).

**Réponses**

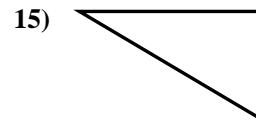
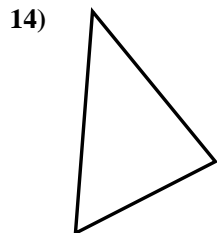
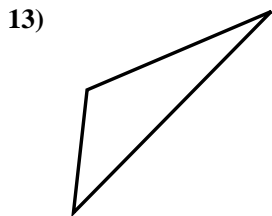
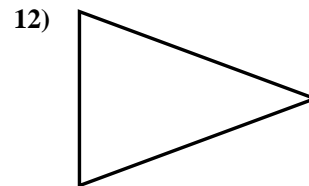
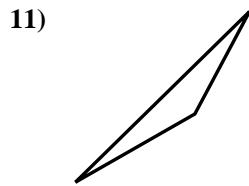
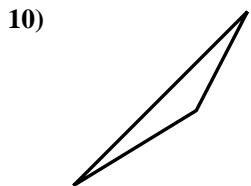
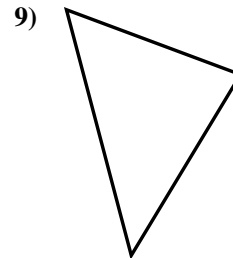
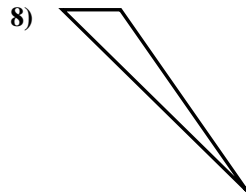
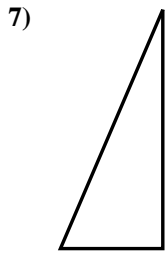
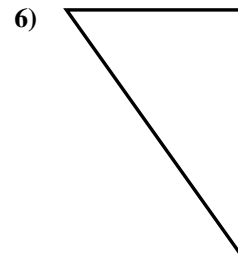
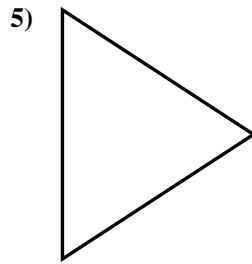
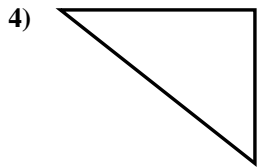
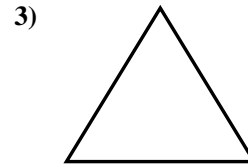
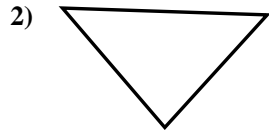
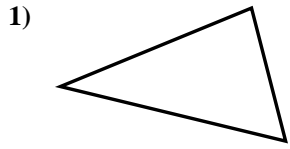


- 1. \_\_\_\_\_
- 2. \_\_\_\_\_
- 3. \_\_\_\_\_
- 4. \_\_\_\_\_
- 5. \_\_\_\_\_
- 6. \_\_\_\_\_
- 7. \_\_\_\_\_
- 8. \_\_\_\_\_
- 9. \_\_\_\_\_
- 10. \_\_\_\_\_
- 11. \_\_\_\_\_
- 12. \_\_\_\_\_
- 13. \_\_\_\_\_
- 14. \_\_\_\_\_
- 15. \_\_\_\_\_



Déterminez si la figure est un triangle rectangle (oui ou non).

**Réponses**



- 1. non
- 2. non
- 3. non
- 4. oui
- 5. non
- 6. oui
- 7. oui
- 8. non
- 9. non
- 10. non
- 11. non
- 12. non
- 13. non
- 14. non
- 15. oui