



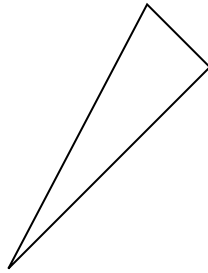
Determinez si la figure montrée est un 'Triangle', 'Carrée', 'Rectangle', 'Hexagone' or 'Autre'.

Réponses

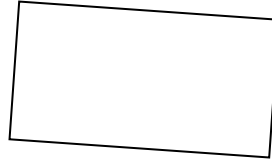
1)



2)



3)



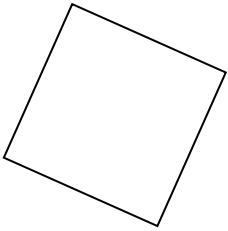
1. _____

2. _____

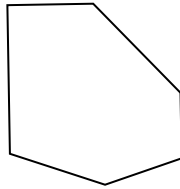
3. _____

4. _____

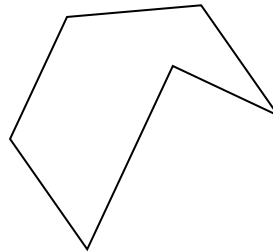
4)



5)



6)



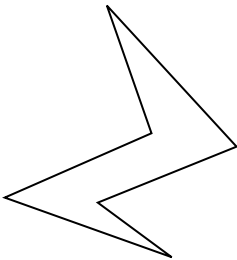
5. _____

6. _____

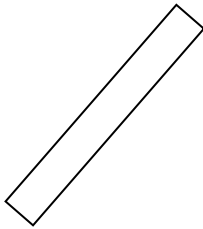
7. _____

8. _____

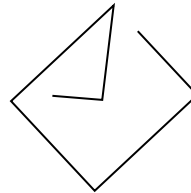
7)



8)



9)



9. _____

10. _____

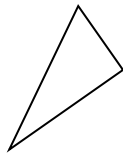
11. _____

12. _____

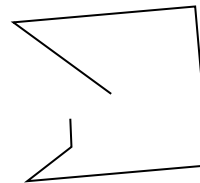
10)



11)



12)




13. _____


14. _____

15. _____

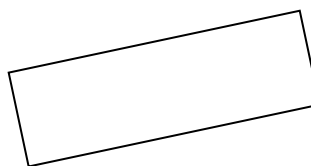
13)



14)



15)



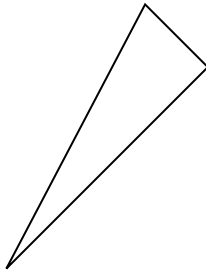


Determinez si la figure montrée est un 'Triangle', 'Carrée', 'Rectangle', 'Hexagone' or 'Autre'.

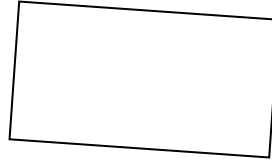
1)



2)



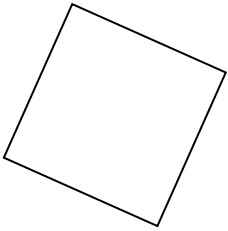
3)



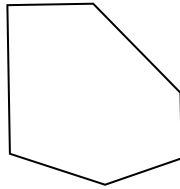
1.

Autre

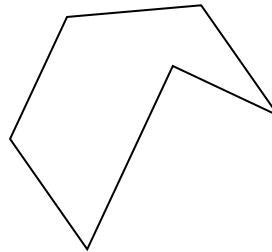
4)



5)



6)



2.

triangle

3.

rectangle

4.

square

5.

Hexagone

6.

Hexagone

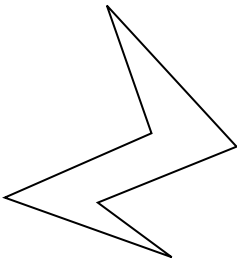
7.

Hexagone

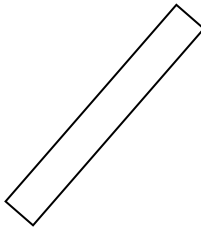
8.

rectangle

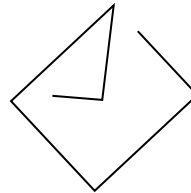
7)



8)



9)



9.

Autre

10.

triangle

11.

triangle

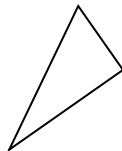
12.

Autre

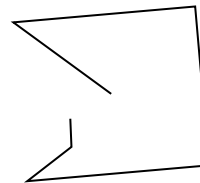
10)



11)



12)



13.

Autre


14.

triangle


15.

rectangle

13)



14)



15)

