



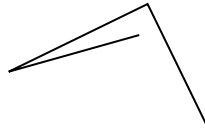
Determinez si la figure montrée est un 'Triangle', 'Carrée', 'Rectangle', 'Hexagone' or 'Autre'.

Réponses

1)



2)



3)



1. _____

2. _____

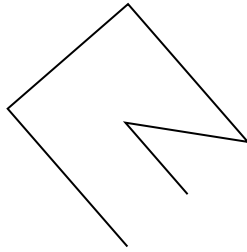
3. _____

4. _____

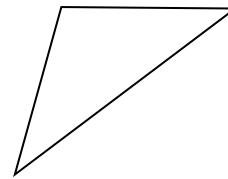
4)



5)



6)



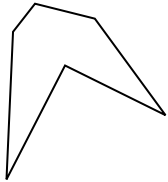
5. _____

6. _____

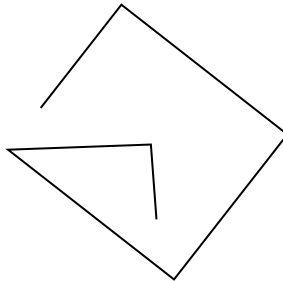
7. _____

8. _____


7)



8)



9)




9. _____

10. _____

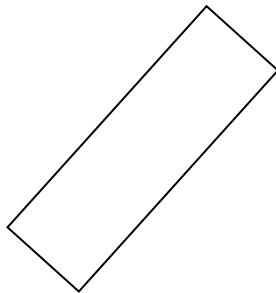
11. _____

12. _____

10)



11)



12)

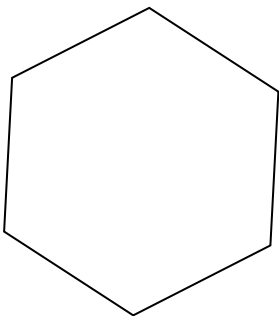


13. _____

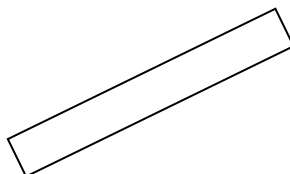
14. _____

15. _____

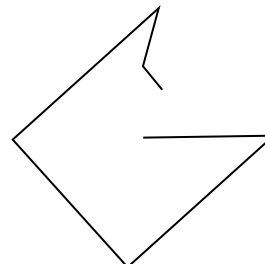
13)



14)



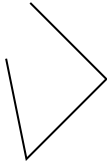
15)



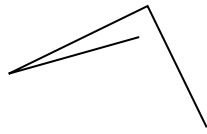


Déterminez si la figure montrée est un 'Triangle', 'Carrée', 'Rectangle', 'Hexagone' or 'Autre'.

1)



2)



3)



1.

Autre

2.

Autre

3.

triangle

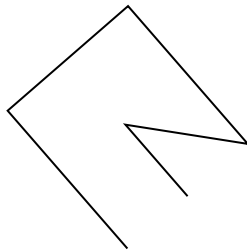
4.

Autre

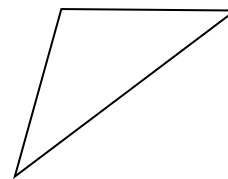
4)



5)



6)



5.

Autre

6.

triangle

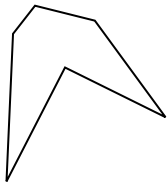
7.

Hexagone

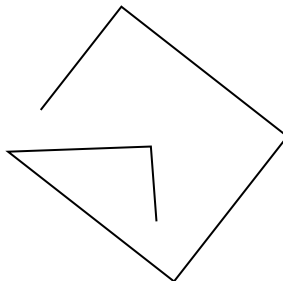
8.

Autre


7)



8)



9)



9.

triangle

10.

square


11.

rectangle

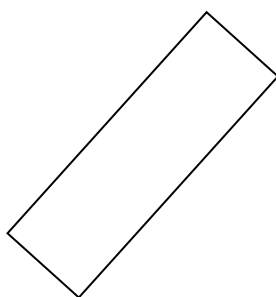
12.

rectangle

10)



11)



12)



13.

Hexagone

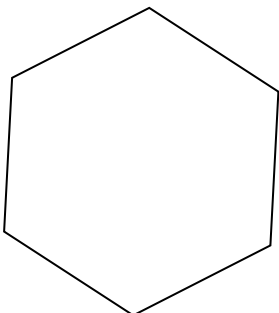
14.

rectangle

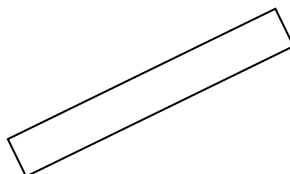
15.

Autre

13)



14)



15)

