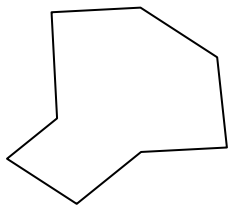




Identifiez les types de figures montrées.

Réponses

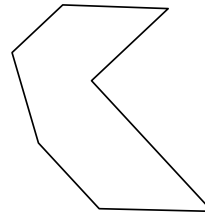
1)



2)



3)




1. _____

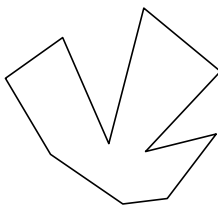
2. _____

3. _____

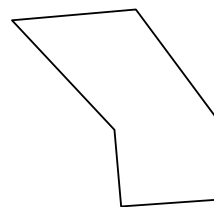
4)



5)



6)

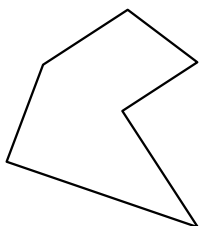


4. _____

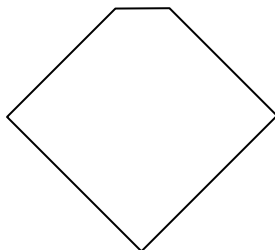
5. _____

6. _____

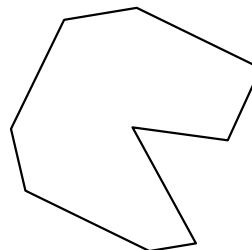
7)



8)



9)

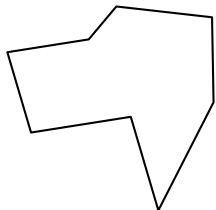


7. _____

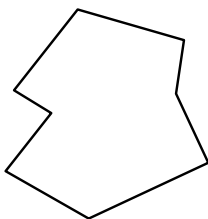
8. _____

9. _____

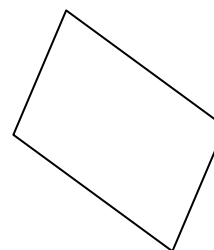
10)



11)



12)

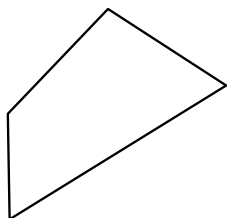


10. _____


11. _____

12. _____

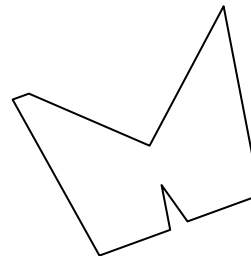
13)



14)



15)



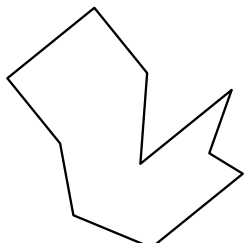
13. _____

14. _____


15. _____

16. _____

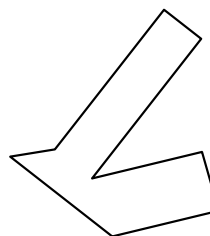
16)



17)



18)



17. _____

18. _____

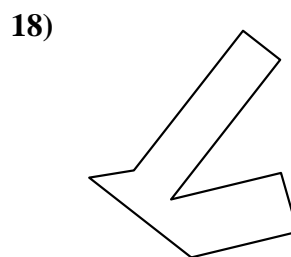
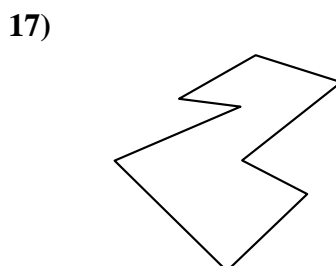
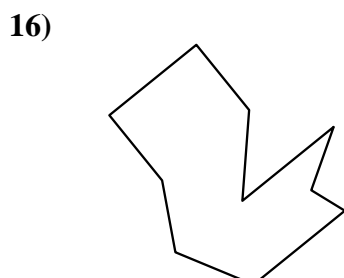
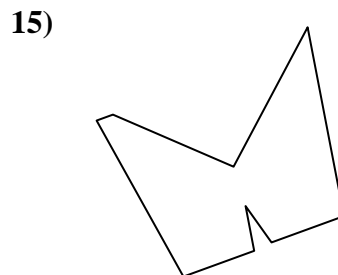

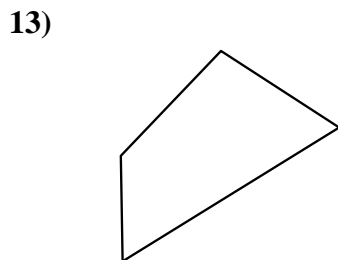
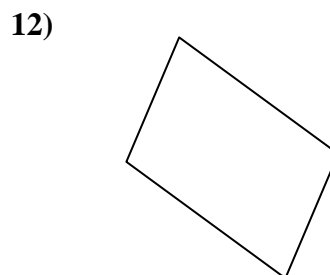
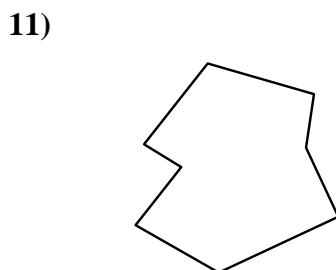
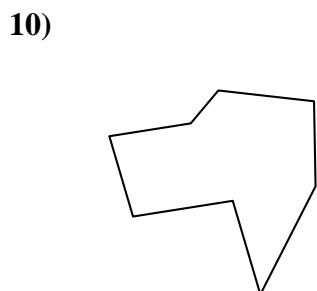
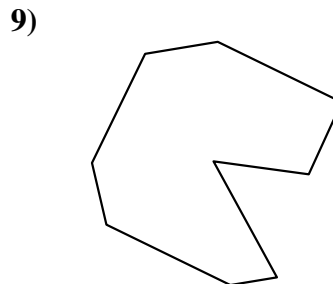
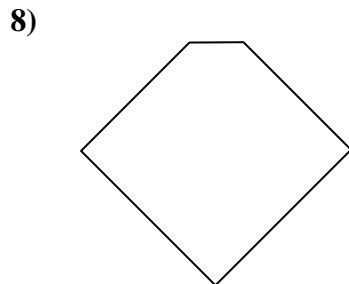
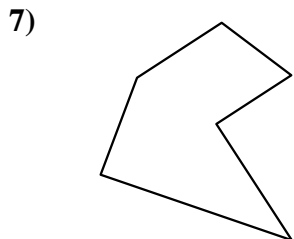
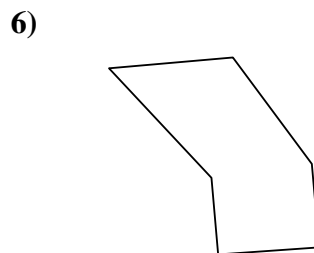
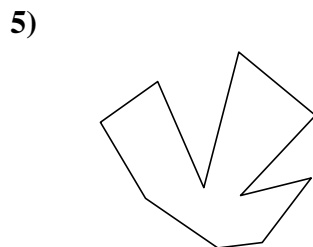
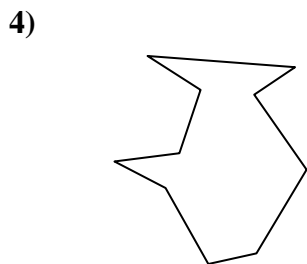
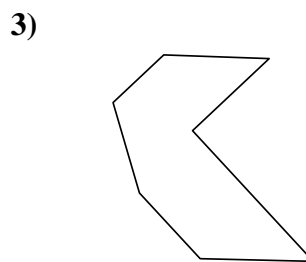
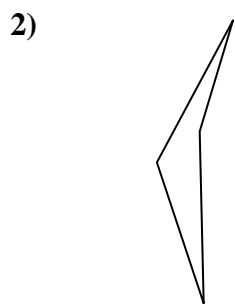
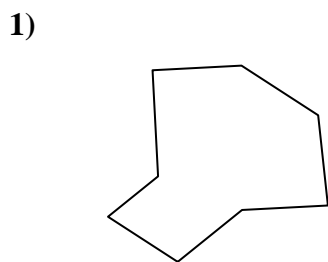
19. _____

20. _____

21. _____



Identifiez les types de figures montrées.



Réponses

1. Octogone

2. Quadrilatère

3. Heptagone

4. Décagone

5. Décagone

6. Hexagone

7. Hexagone

8. Pentagone

9. Nonagone

10. Octogone

11. Octogone

12. Quadrilatère

13. Quadrilatère

14. Octogone

15. Nonagone

16. Décagone

17. Octogone

18. Octogone

19. Quadrilatère

20. Heptagone

21. Nonagone