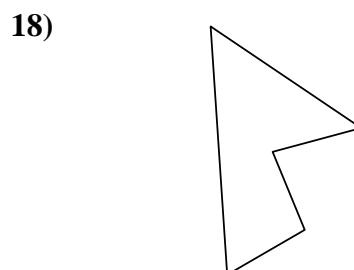
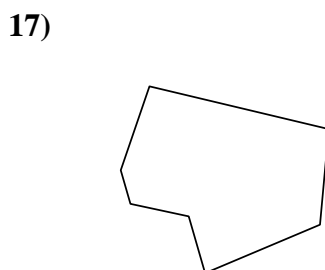
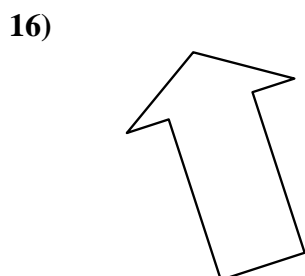
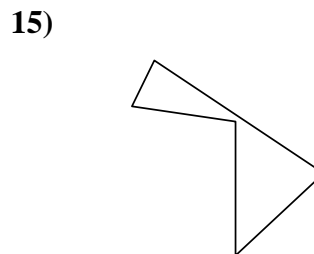
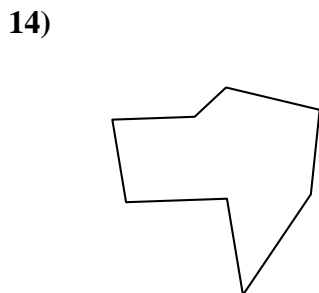
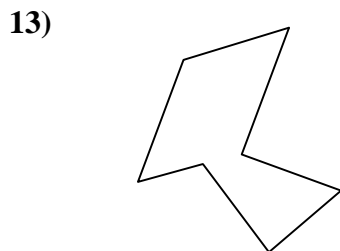
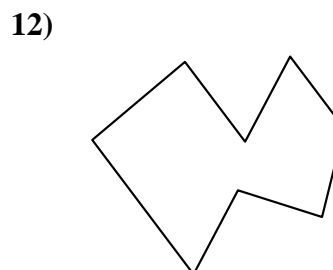
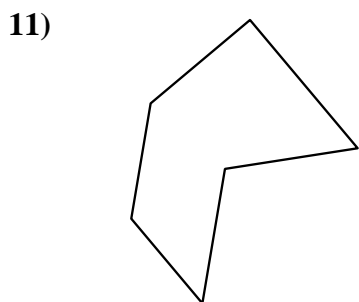
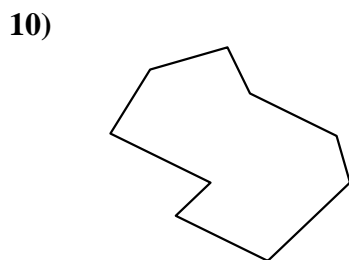
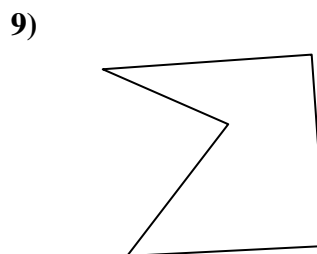
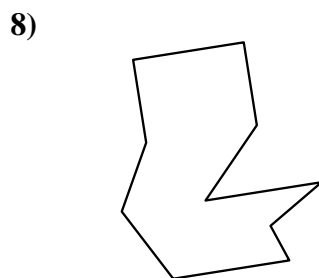
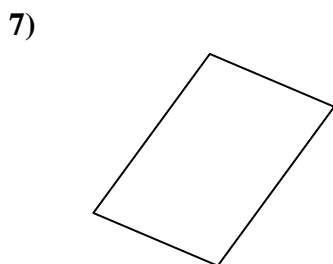
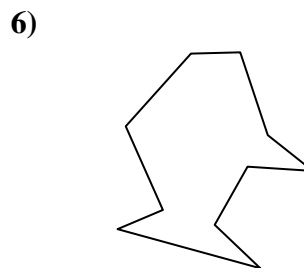
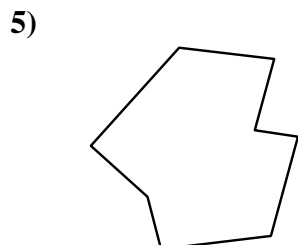
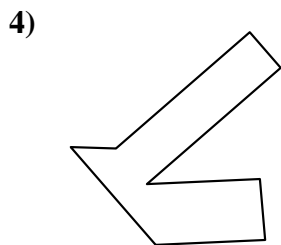
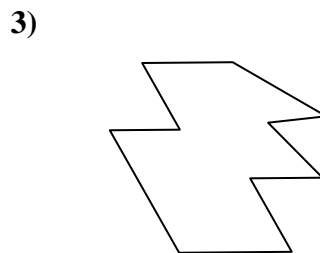
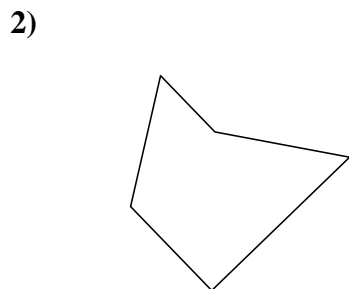
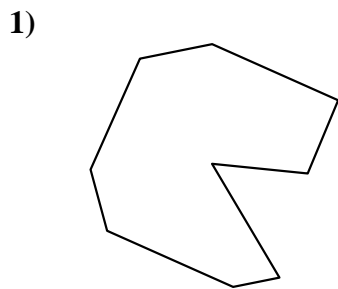




Identifiez les types de figures montrées.

**Réponses**



1. \_\_\_\_\_

2. \_\_\_\_\_

3. \_\_\_\_\_

4. \_\_\_\_\_

5. \_\_\_\_\_

6. \_\_\_\_\_

7. \_\_\_\_\_

8. \_\_\_\_\_

9. \_\_\_\_\_

10. \_\_\_\_\_

11. \_\_\_\_\_

12. \_\_\_\_\_

13. \_\_\_\_\_

14. \_\_\_\_\_

15. \_\_\_\_\_

16. \_\_\_\_\_

17. \_\_\_\_\_

18. \_\_\_\_\_

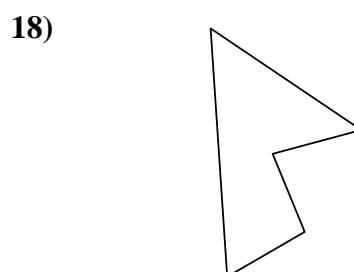
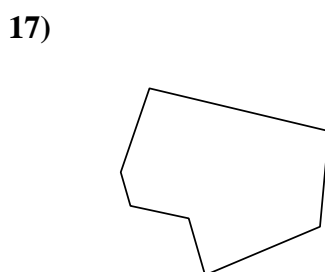
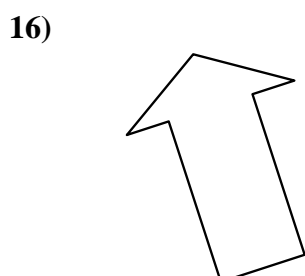
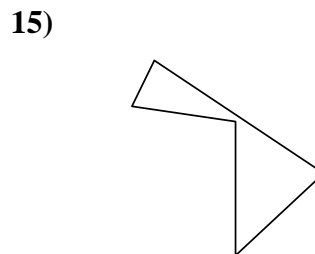
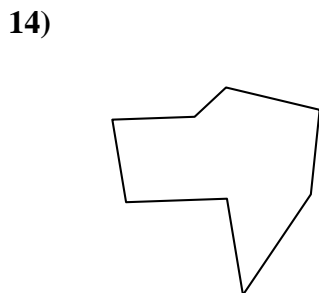
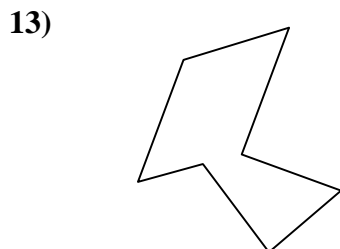
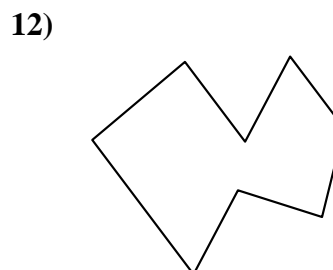
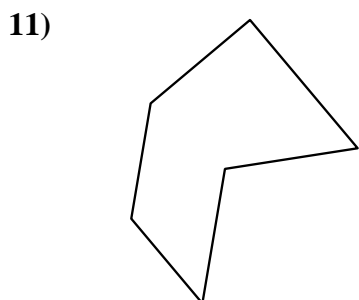
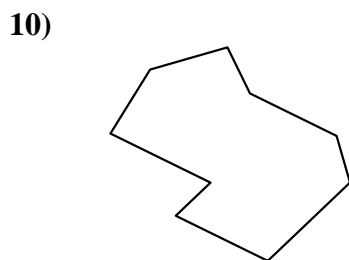
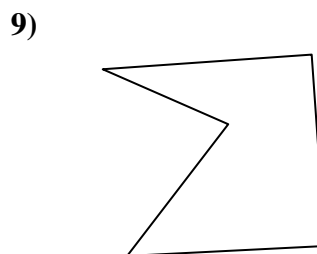
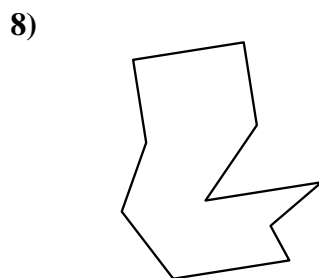
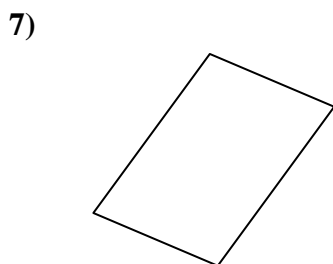
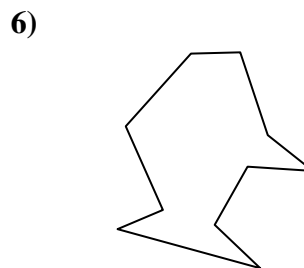
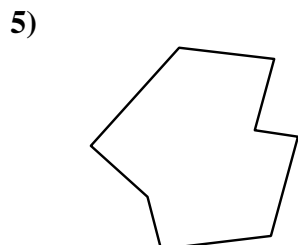
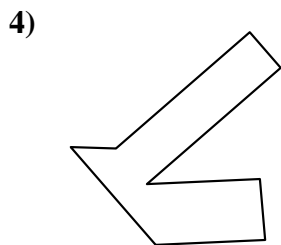
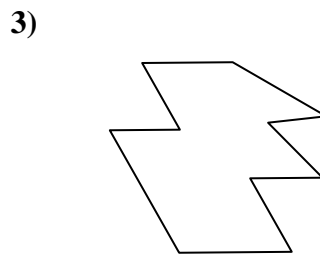
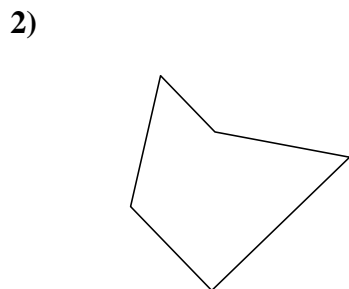
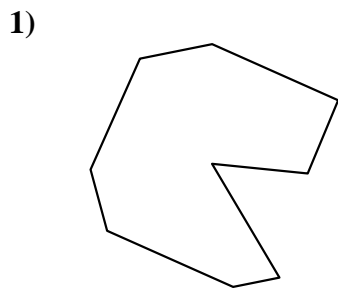
19. \_\_\_\_\_

20. \_\_\_\_\_

21. \_\_\_\_\_



Identifiez les types de figures montrées.



**Réponses**

1. Nonagone

2. Pentagone

3. Décagone

4. Octogone

5. Octogone

6. Décagone

7. Quadrilatère

8. Décagone

9. Pentagone

10. Nonagone

11. Hexagone

12. Octogone

13. Heptagone

14. Octogone

15. Pentagone

16. Heptagone

17. Heptagone

18. Pentagone

19. Nonagone

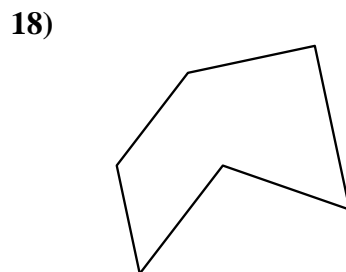
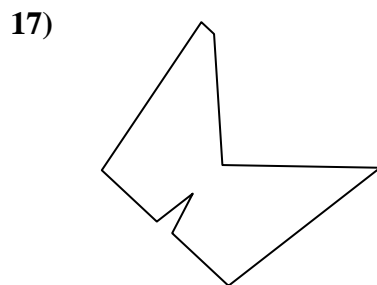

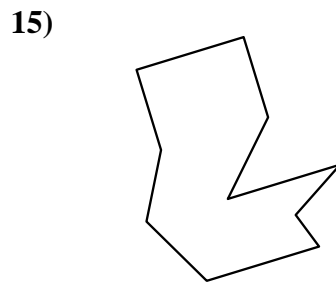
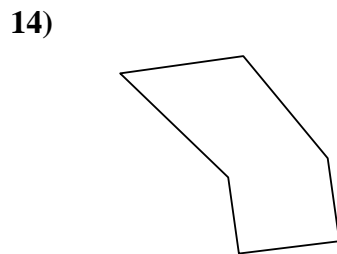
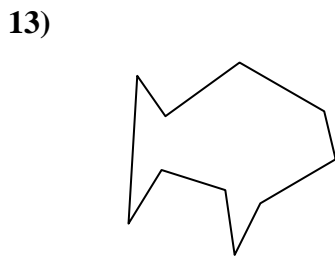
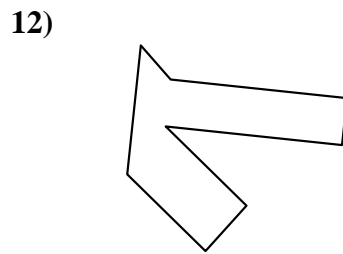
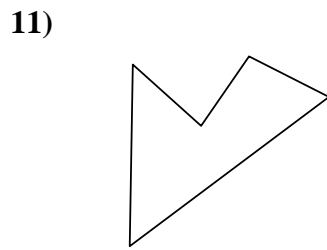
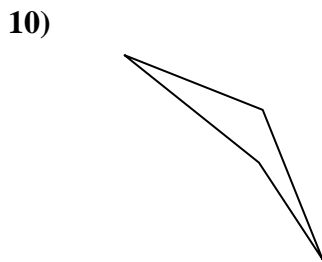
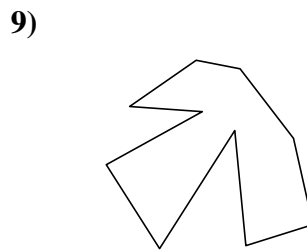
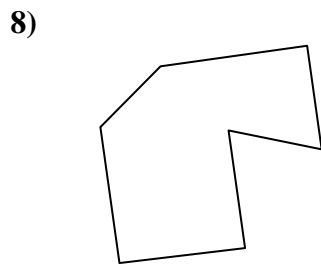
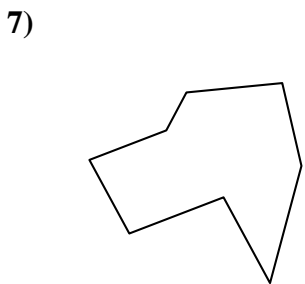
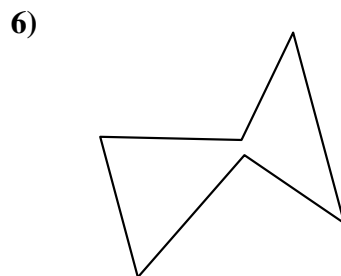
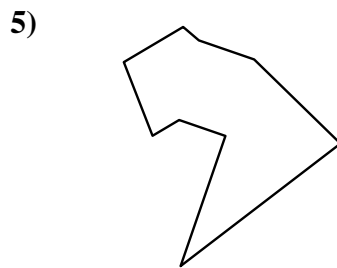
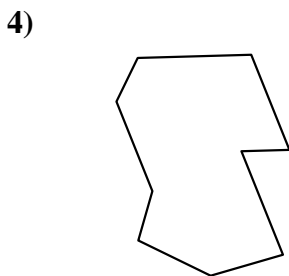
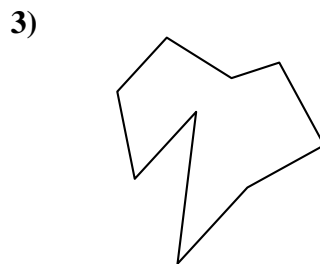
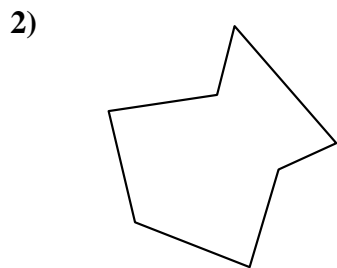
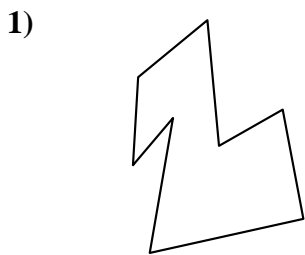
20. Nonagone

21. Pentagone



Identifiez les types de figures montrées.

**Réponses**



1. \_\_\_\_\_

2. \_\_\_\_\_

3. \_\_\_\_\_

4. \_\_\_\_\_

5. \_\_\_\_\_

6. \_\_\_\_\_

7. \_\_\_\_\_

8. \_\_\_\_\_

9. \_\_\_\_\_

10. \_\_\_\_\_

11. \_\_\_\_\_

12. \_\_\_\_\_

13. \_\_\_\_\_

14. \_\_\_\_\_

15. \_\_\_\_\_

16. \_\_\_\_\_

17. \_\_\_\_\_

18. \_\_\_\_\_

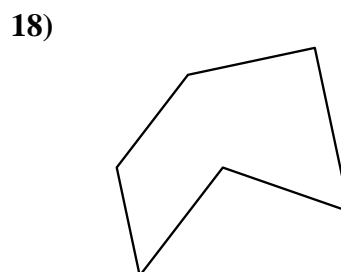
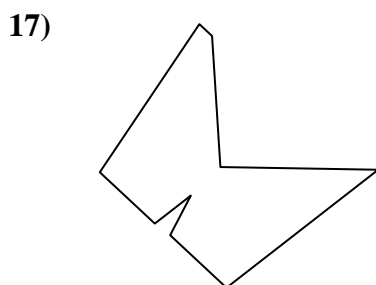

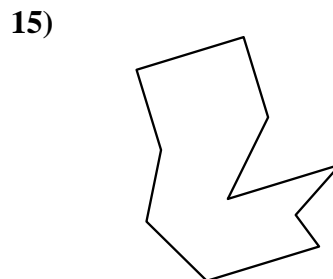
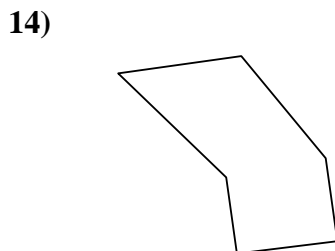
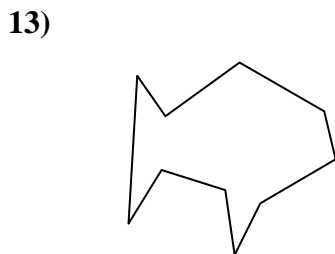
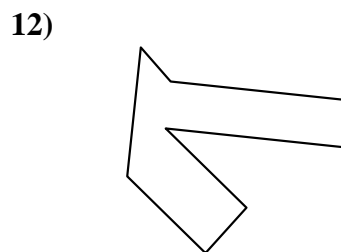
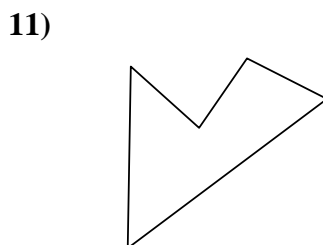
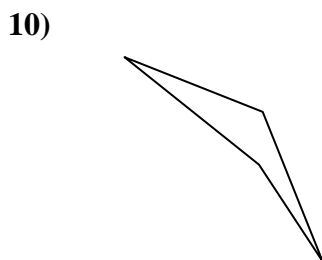
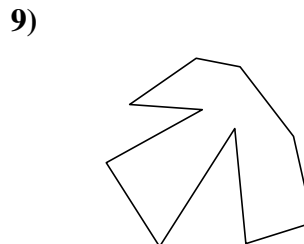
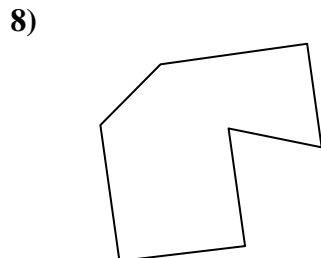
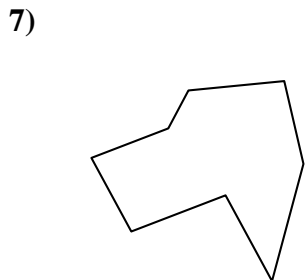
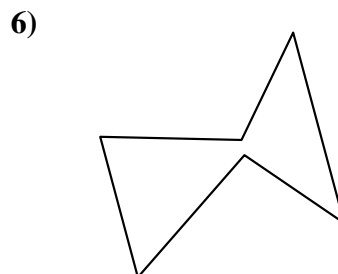
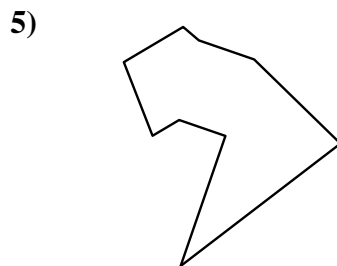
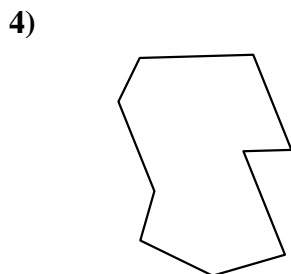
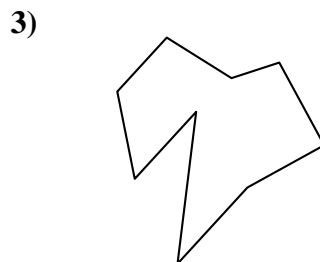
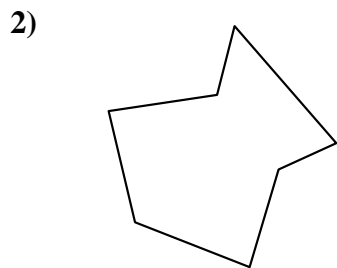
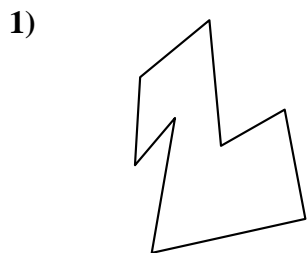
19. \_\_\_\_\_

20. \_\_\_\_\_

21. \_\_\_\_\_



Identifiez les types de figures montrées.



**Réponses**

1. Octogone

2. Heptagone

3. Nonagone

4. Nonagone

5. Nonagone

6. Hexagone

7. Octogone

8. Heptagone

9. Décagone

10. Quadrilatère

11. Pentagone

12. Octogone

13. Décagone

14. Hexagone

15. Décagone

16. Heptagone

17. Nonagone

18. Hexagone

19. Heptagone

20. Hexagone

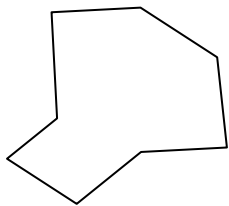
21. Quadrilatère



Identifiez les types de figures montrées.

**Réponses**

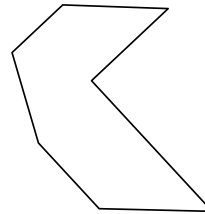
1)



2)



3)




1. \_\_\_\_\_

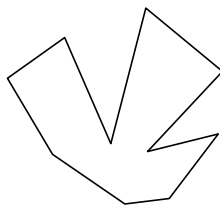
2. \_\_\_\_\_

3. \_\_\_\_\_

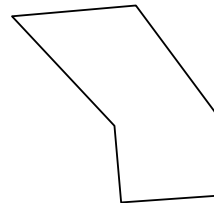
4)



5)



6)

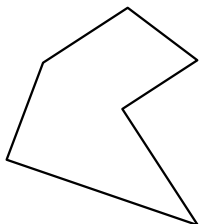


4. \_\_\_\_\_

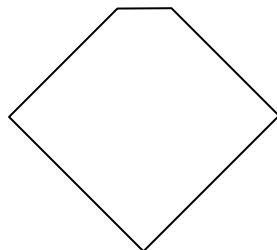
5. \_\_\_\_\_

6. \_\_\_\_\_

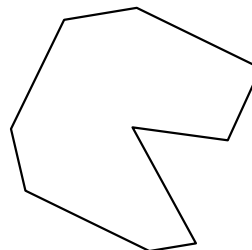
7)



8)



9)

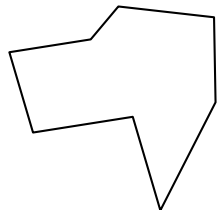


8. \_\_\_\_\_

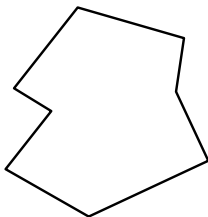
9. \_\_\_\_\_

10. \_\_\_\_\_

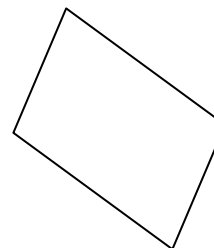
10)



11)



12)

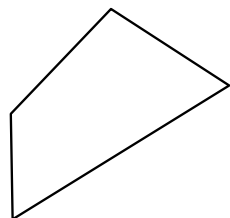


11. \_\_\_\_\_

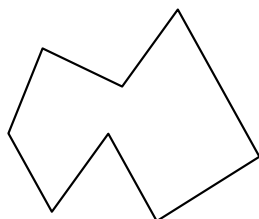
12. \_\_\_\_\_

13. \_\_\_\_\_

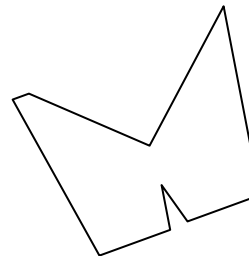
13)



14)



15)



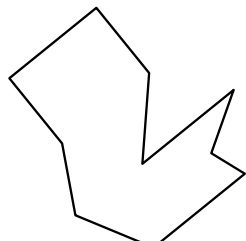
14. \_\_\_\_\_

15. \_\_\_\_\_


16. \_\_\_\_\_

17. \_\_\_\_\_

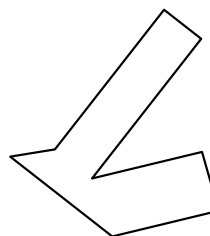
16)



17)



18)



18. \_\_\_\_\_

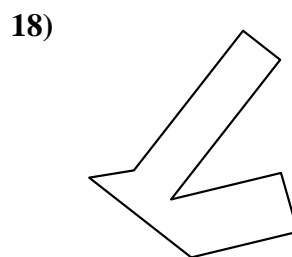
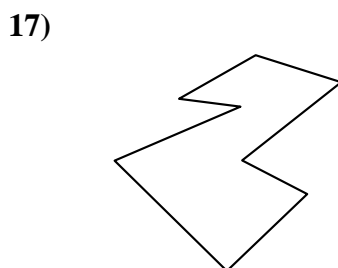
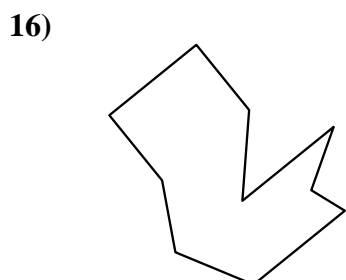
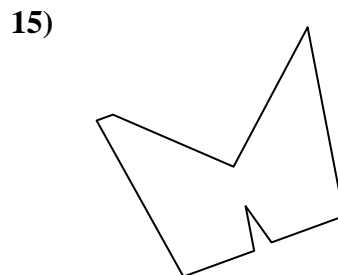

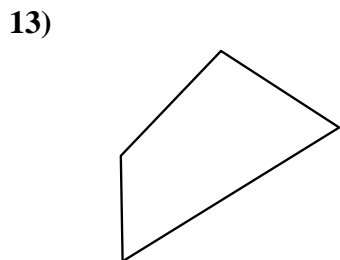
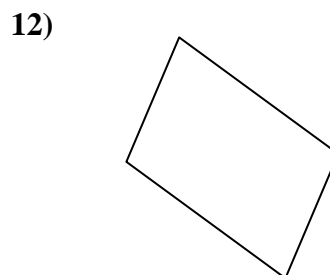
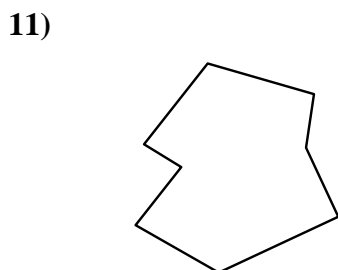
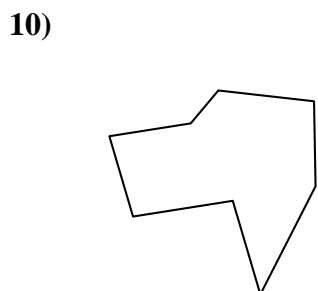
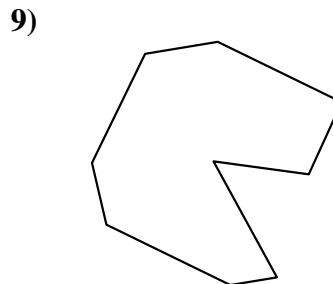
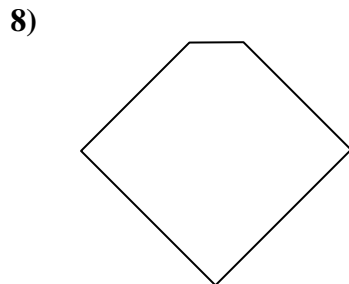
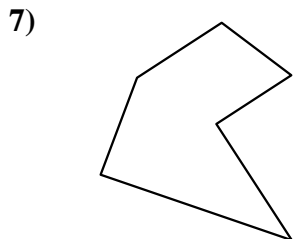
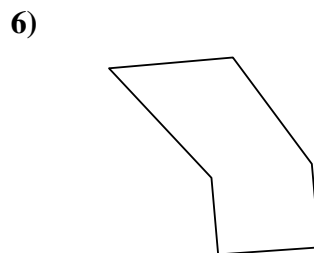
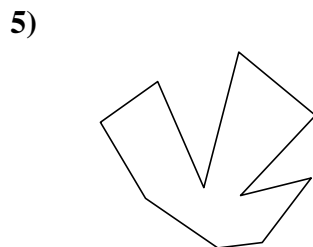
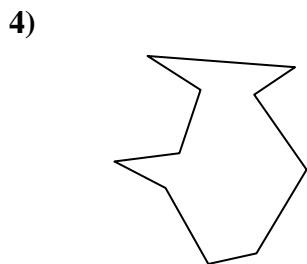
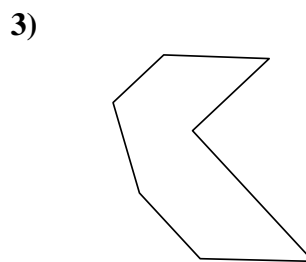
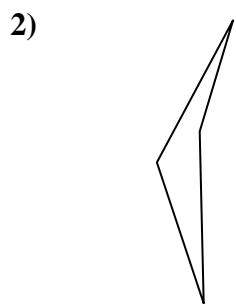
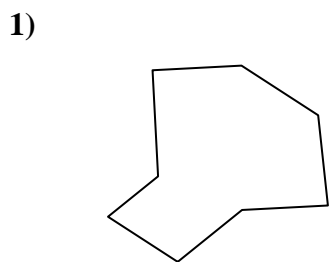
19. \_\_\_\_\_

20. \_\_\_\_\_

21. \_\_\_\_\_



Identifiez les types de figures montrées.



**Réponses**

1. Octogone

2. Quadrilatère

3. Heptagone

4. Décagone

5. Décagone

6. Hexagone

7. Hexagone

8. Pentagone

9. Nonagone

10. Octogone

11. Octogone

12. Quadrilatère

13. Quadrilatère

14. Octogone

15. Nonagone

16. Décagone

17. Octogone

18. Octogone

19. Quadrilatère

20. Heptagone

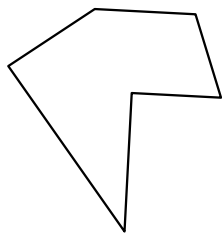
21. Nonagone




Identifiez les types de figures montrées.

**Réponses**

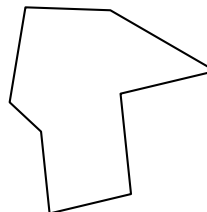
1)



2)

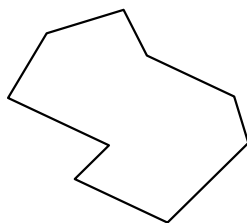


3)

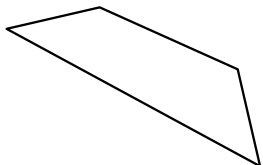


1. \_\_\_\_\_

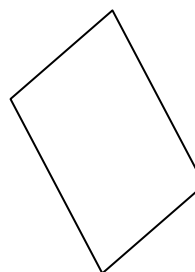
4)



5)




6)

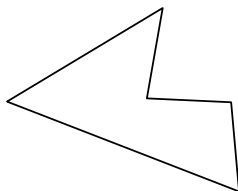


2. \_\_\_\_\_


7)



8)

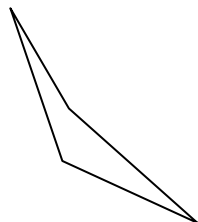


9)

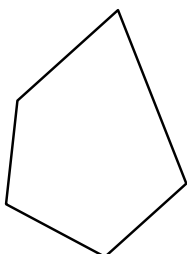


3. \_\_\_\_\_

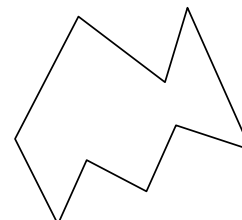
10)



11)

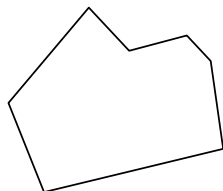


12)

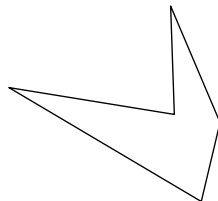


4. \_\_\_\_\_

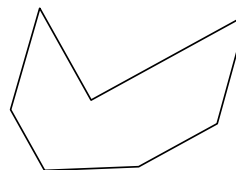
13)



14)

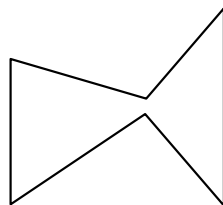


15)

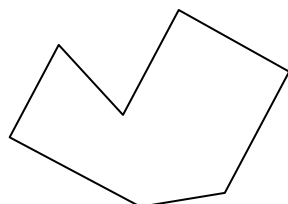


5. \_\_\_\_\_

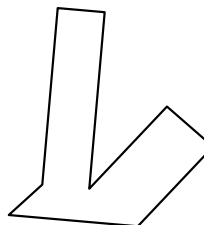
16)



17)



18)



6. \_\_\_\_\_

7. \_\_\_\_\_

8. \_\_\_\_\_

9. \_\_\_\_\_

10. \_\_\_\_\_

11. \_\_\_\_\_

12. \_\_\_\_\_

13. \_\_\_\_\_

14. \_\_\_\_\_

15. \_\_\_\_\_

16. \_\_\_\_\_

17. \_\_\_\_\_

18. \_\_\_\_\_

19. \_\_\_\_\_

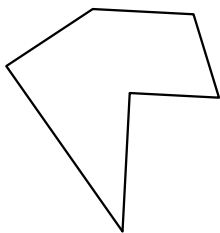
20. \_\_\_\_\_

21. \_\_\_\_\_




Identifiez les types de figures montrées.

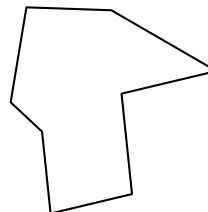
1)



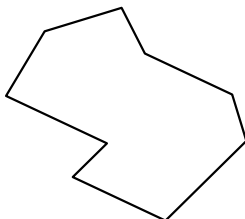
2)



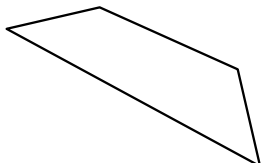
3)



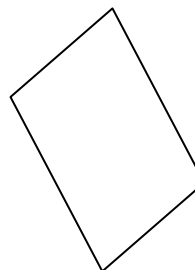
4)



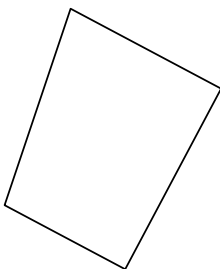
5)



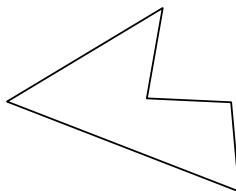
6)




7)



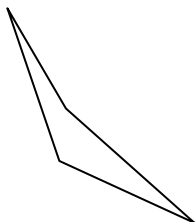
8)



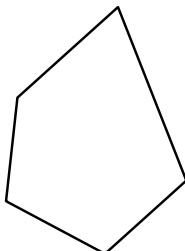
9)



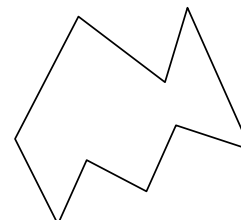
10)



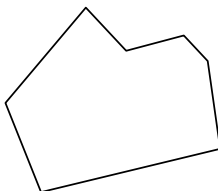
11)



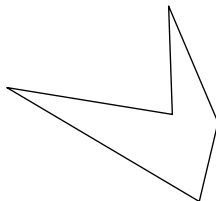
12)



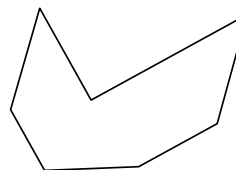
13)




14)



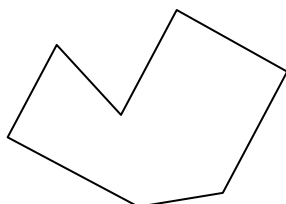
15)



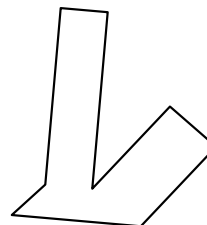
16)



17)



18)



**Réponses**

1. Hexagone

2. Nonagone

3. Octogone

4. Nonagone

5. Quadrilatère

6. Quadrilatère

7. Quadrilatère

8. Pentagone

9. Heptagone

10. Quadrilatère

11. Pentagone

12. Nonagone

13. Heptagone

14. Pentagone

15. Heptagone

16. Hexagone

17. Heptagone

18. Octogone

19. Octogone

20. Heptagone

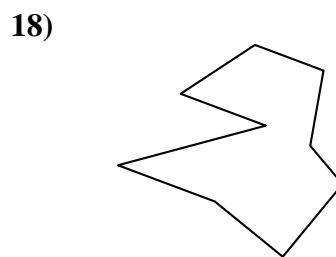

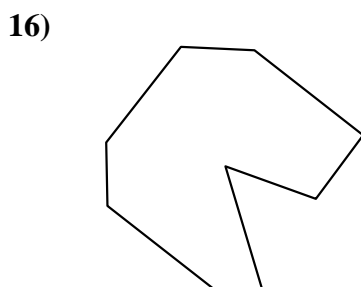
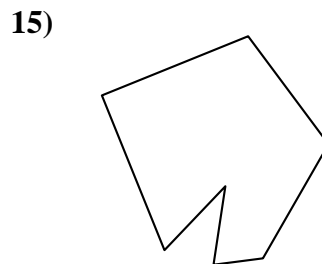
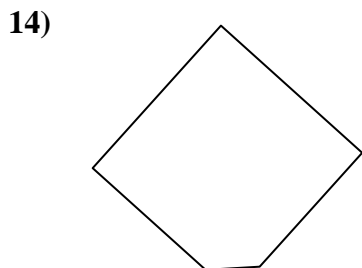
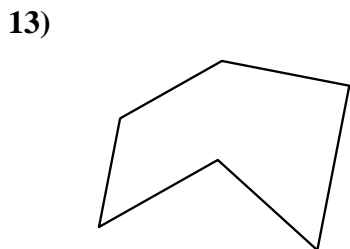
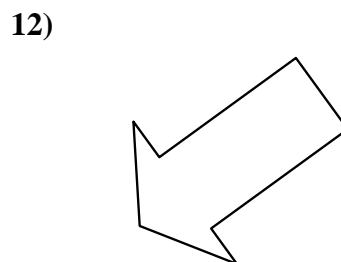
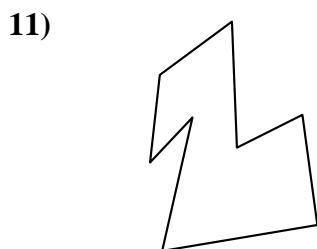
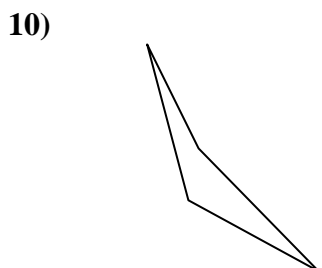
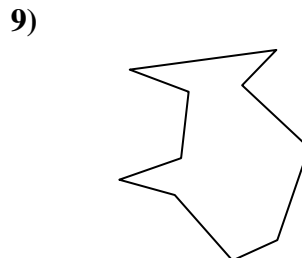
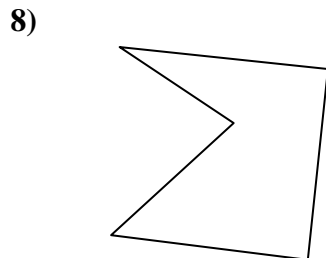
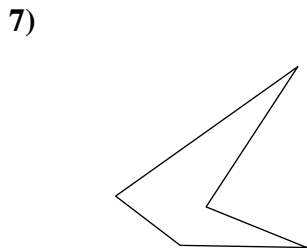
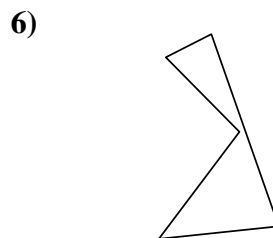
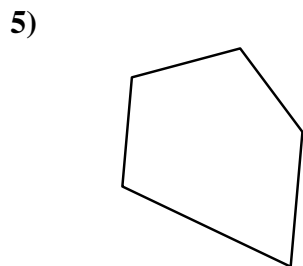
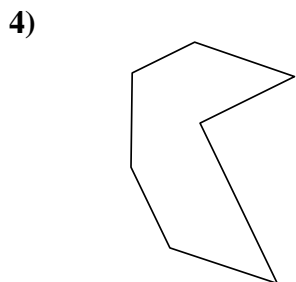
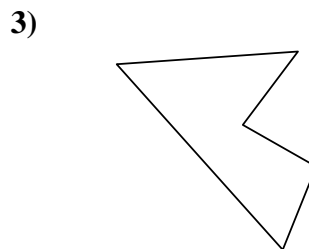
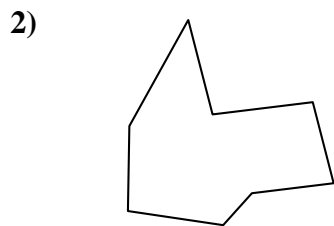
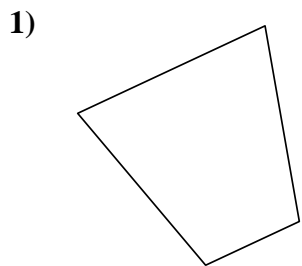
21. Octogone





Identifiez les types de figures montrées.

**Réponses**



1. \_\_\_\_\_

2. \_\_\_\_\_

3. \_\_\_\_\_

4. \_\_\_\_\_

5. \_\_\_\_\_

6. \_\_\_\_\_

7. \_\_\_\_\_

8. \_\_\_\_\_

9. \_\_\_\_\_

10. \_\_\_\_\_

11. \_\_\_\_\_

12. \_\_\_\_\_

13. \_\_\_\_\_

14. \_\_\_\_\_

15. \_\_\_\_\_

16. \_\_\_\_\_

17. \_\_\_\_\_

18. \_\_\_\_\_

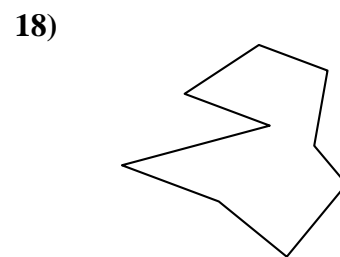

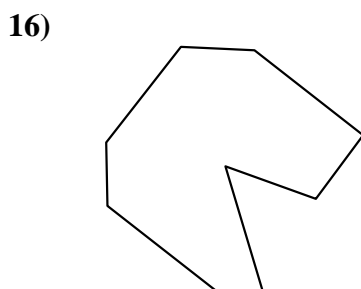
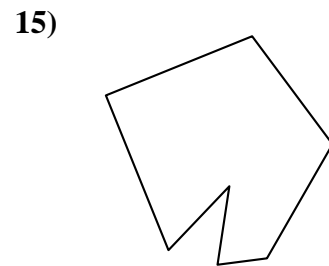
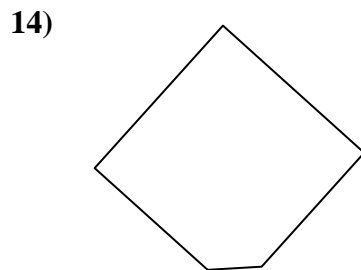
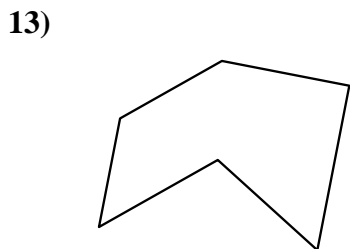
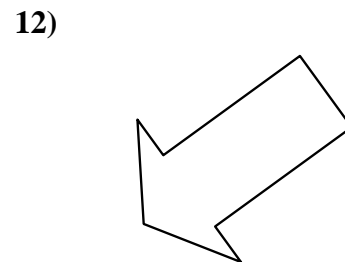
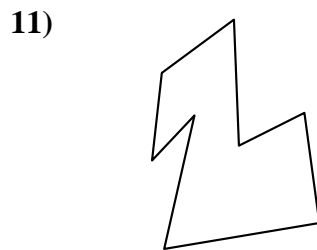
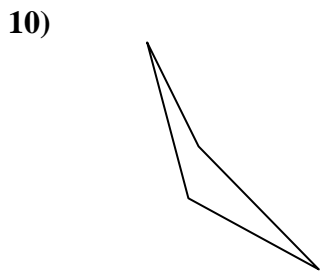
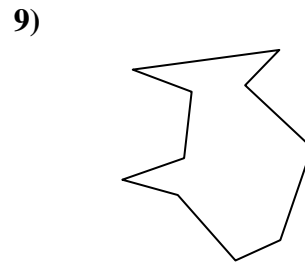
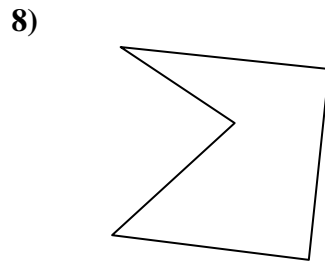
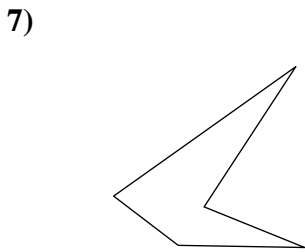
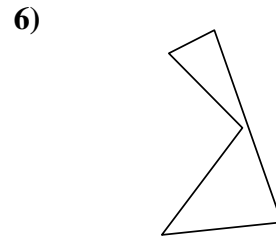
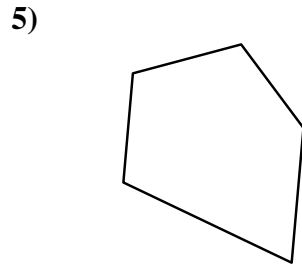
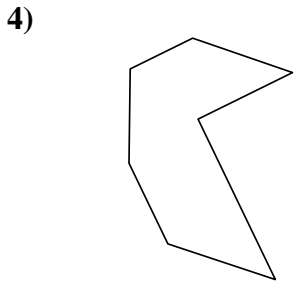
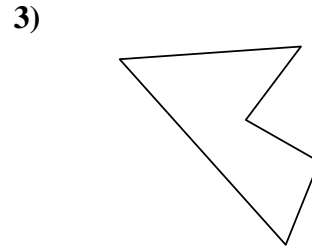
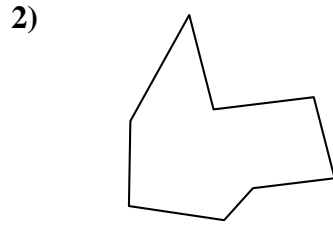
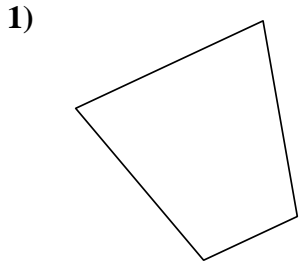
19. \_\_\_\_\_

20. \_\_\_\_\_

21. \_\_\_\_\_



Identifiez les types de figures montrées.



**Réponses**

1. Quadrilatère

2. Octogone

3. Pentagone

4. Heptagone

5. Pentagone

6. Pentagone

7. Pentagone

8. Pentagone

9. Décagone

10. Quadrilatère

11. Octogone

12. Heptagone

13. Hexagone

14. Pentagone

15. Heptagone

16. Nonagone

17. Hexagone

18. Nonagone

19. Décagone

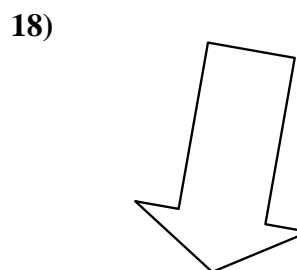
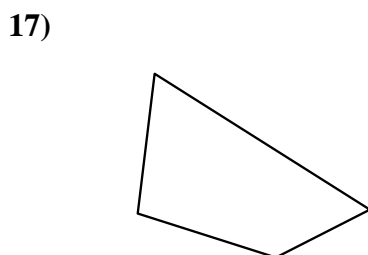
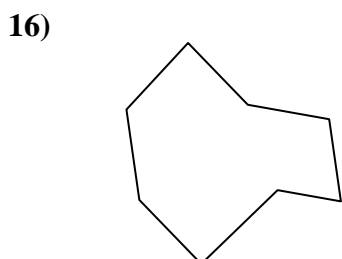
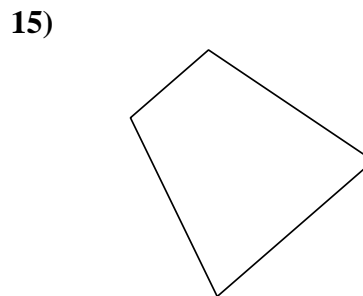
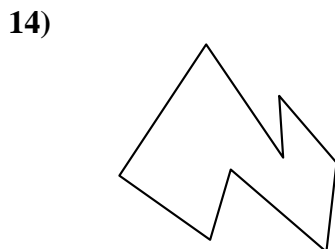
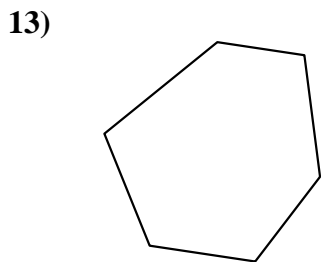
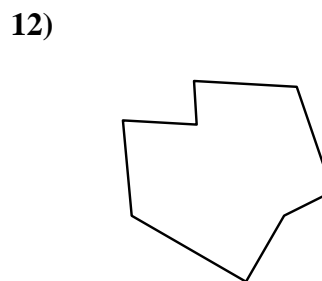
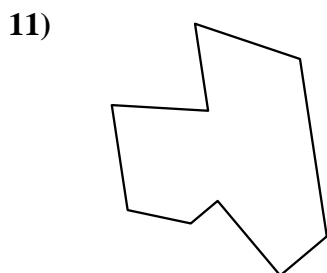
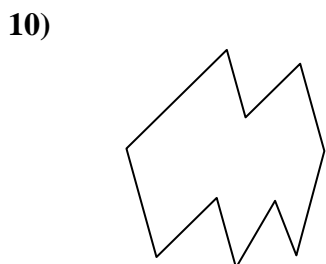
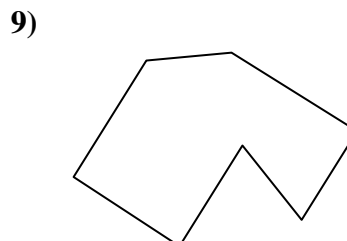

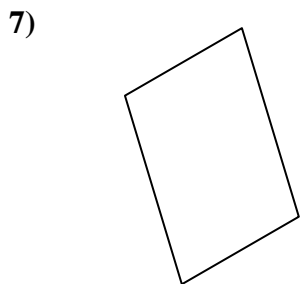
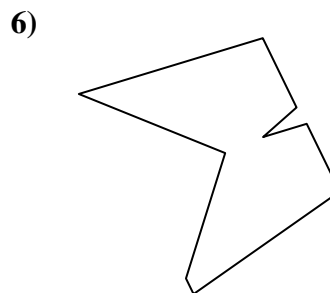
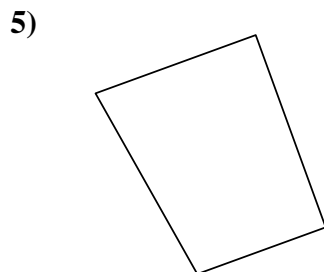
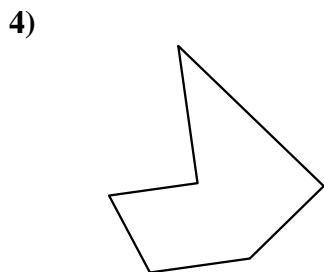
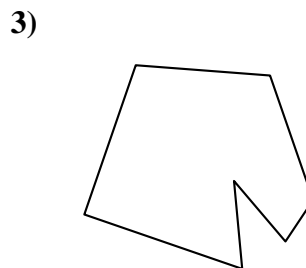
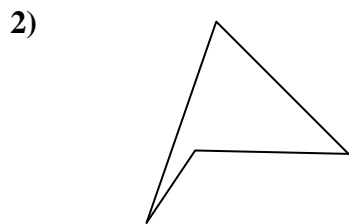
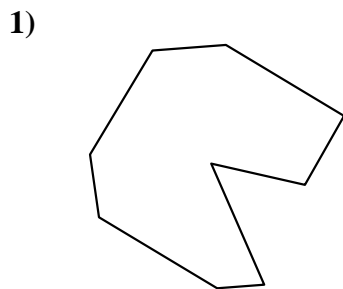
20. Quadrilatère

21. Nonagone



Identifiez les types de figures montrées.

**Réponses**



1. \_\_\_\_\_

2. \_\_\_\_\_

3. \_\_\_\_\_

4. \_\_\_\_\_

5. \_\_\_\_\_

6. \_\_\_\_\_

7. \_\_\_\_\_

8. \_\_\_\_\_

9. \_\_\_\_\_

10. \_\_\_\_\_

11. \_\_\_\_\_

12. \_\_\_\_\_

13. \_\_\_\_\_

14. \_\_\_\_\_

15. \_\_\_\_\_

16. \_\_\_\_\_

17. \_\_\_\_\_

18. \_\_\_\_\_

19. \_\_\_\_\_

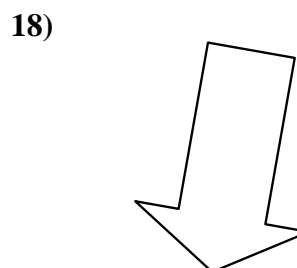
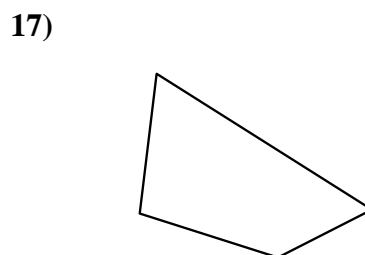
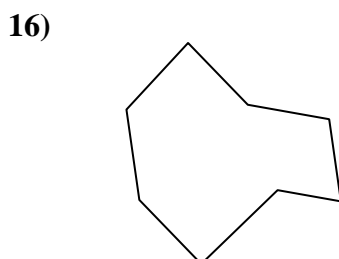
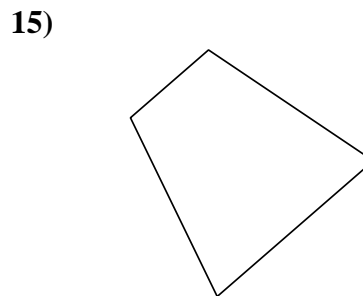
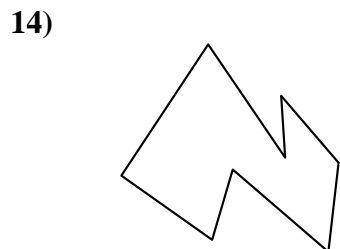
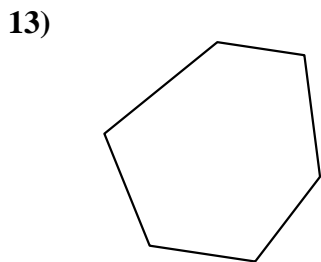
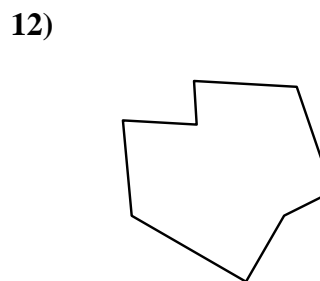
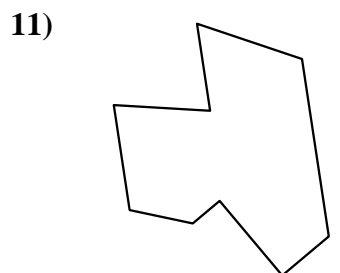
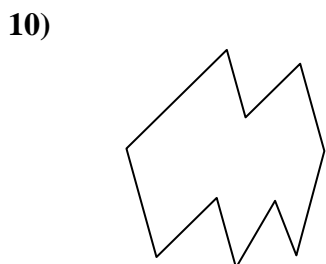
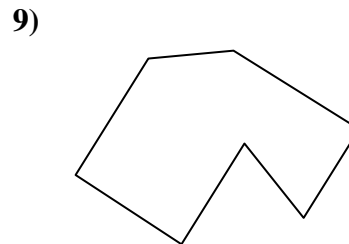

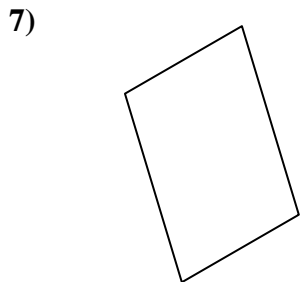
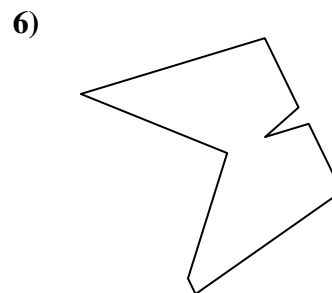
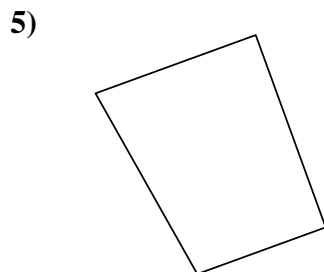
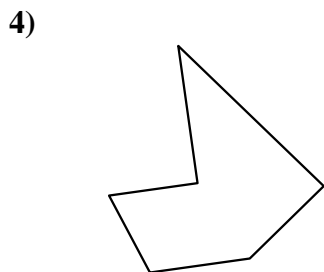
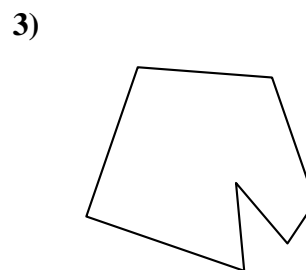
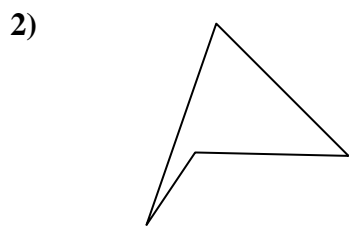
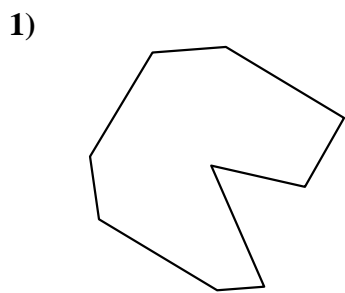
20. \_\_\_\_\_

21. \_\_\_\_\_



Identifiez les types de figures montrées.

**Réponses**



1. Nonagone

2. Quadrilatère

3. Heptagone

4. Hexagone

5. Quadrilatère

6. Nonagone

7. Quadrilatère

8. Nonagone

9. Heptagone

10. Décagone

11. Nonagone

12. Octogone

13. Hexagone

14. Octogone

15. Quadrilatère

16. Octogone

17. Quadrilatère

18. Heptagone

19. Hexagone

20. Pentagone


21. Décagone



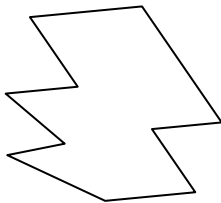
Identifiez les types de figures montrées.

**Réponses**

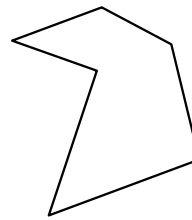
1)



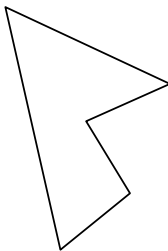
2)



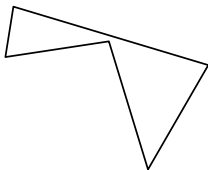
3)



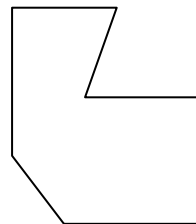
4)




5)



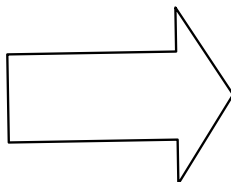
6)



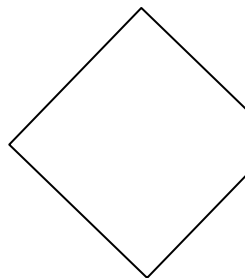
7)



8)



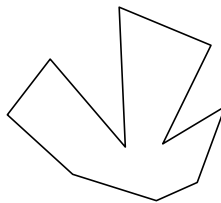
9)



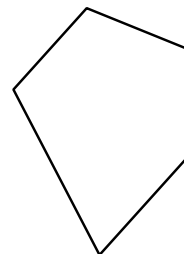
10)



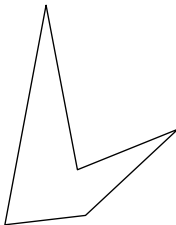
11)



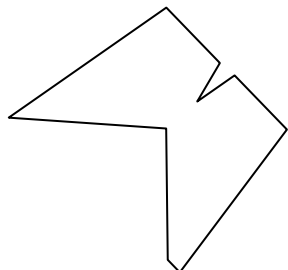
12)




13)



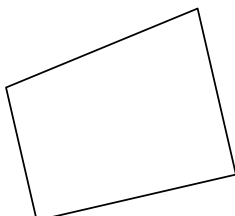
14)



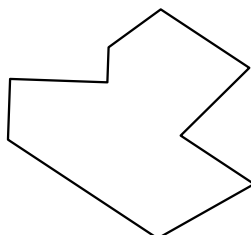
15)




16)



17)



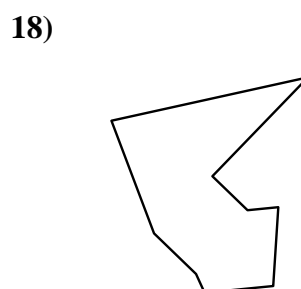
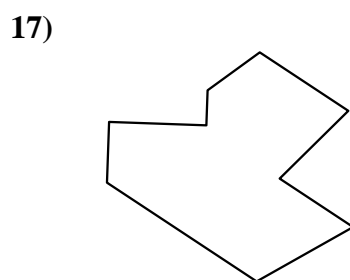
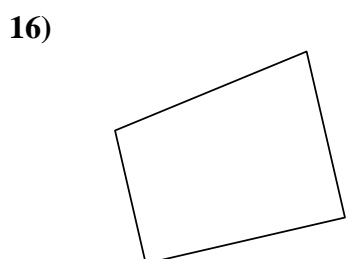

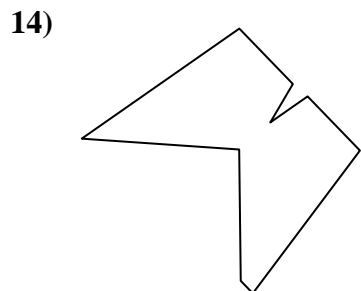
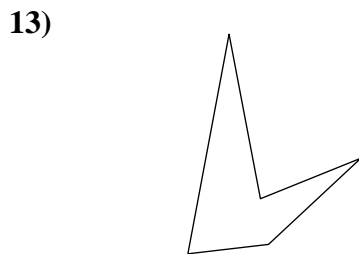
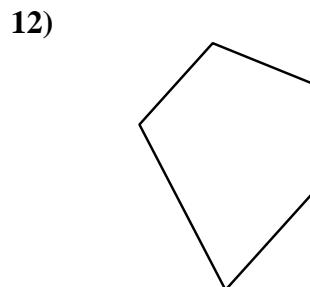
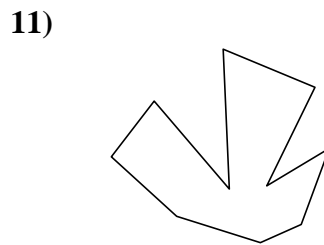
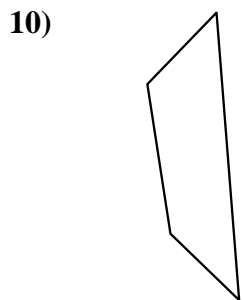
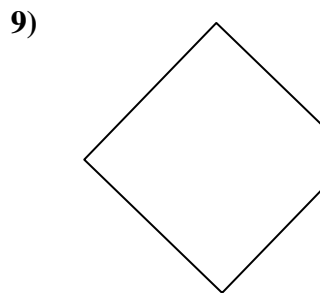
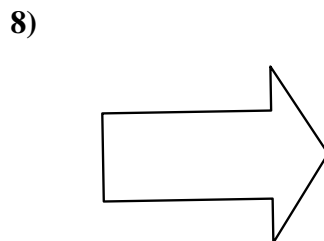
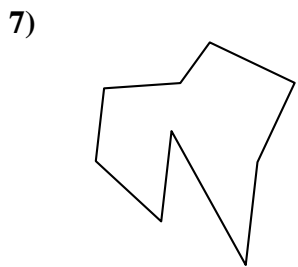
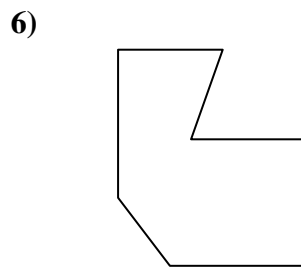
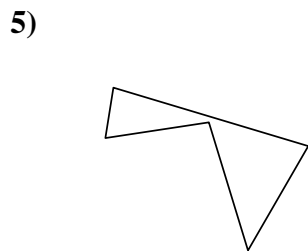
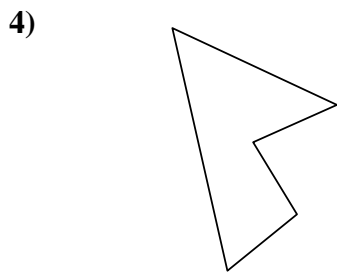
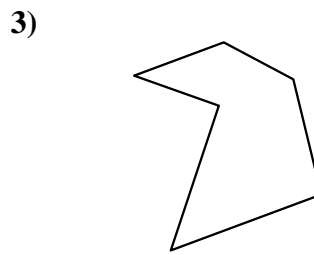
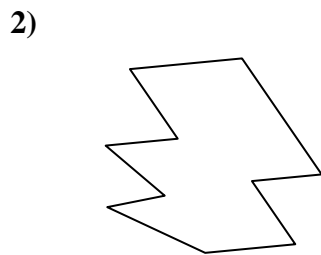
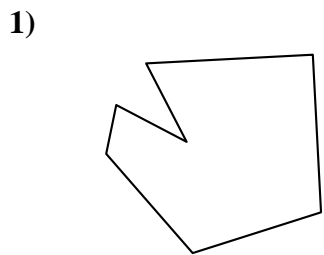
18)



- 1. \_\_\_\_\_
- 2. \_\_\_\_\_
- 3. \_\_\_\_\_
- 4. \_\_\_\_\_
- 5. \_\_\_\_\_
- 6. \_\_\_\_\_
- 7. \_\_\_\_\_
- 8. \_\_\_\_\_
- 9. \_\_\_\_\_
- 10. \_\_\_\_\_
- 11. \_\_\_\_\_
- 12. \_\_\_\_\_
- 13. \_\_\_\_\_
- 14. \_\_\_\_\_
- 15. \_\_\_\_\_
- 16. \_\_\_\_\_
- 17. \_\_\_\_\_
- 18. \_\_\_\_\_
- 19. \_\_\_\_\_
- 20. \_\_\_\_\_
- 21. \_\_\_\_\_



Identifiez les types de figures montrées.



**Réponses**

1. Heptagone

2. Décagone

3. Hexagone

4. Pentagone

5. Pentagone

6. Heptagone

7. Nonagone

8. Heptagone

9. Pentagone

10. Quadrilatère

11. Décagone

12. Pentagone

13. Pentagone

14. Nonagone

15. Octogone

16. Quadrilatère

17. Nonagone

18. Nonagone

19. Octogone

20. Quadrilatère

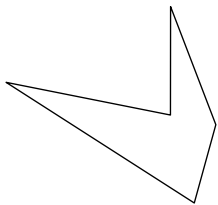
21. Octogone



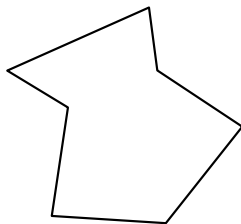
Identifiez les types de figures montrées.

**Réponses**


1)



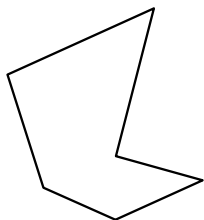
2)




3)



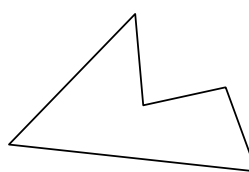
4)



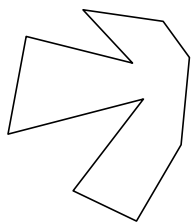
5)



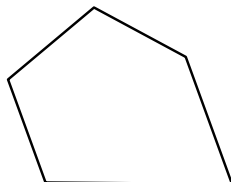
6)



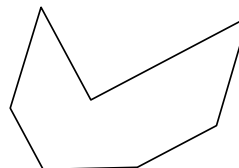
7)



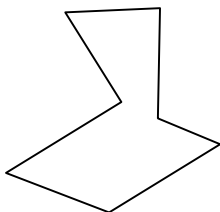
8)




9)



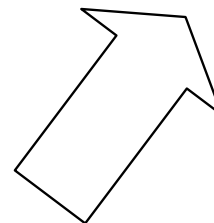
10)



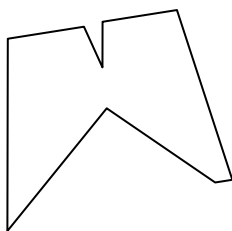
11)



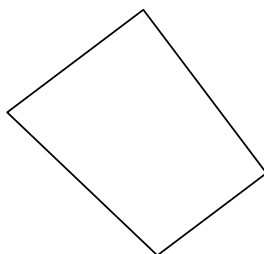
12)



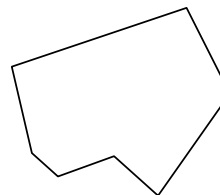
13)



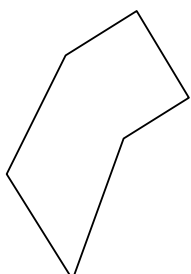
14)



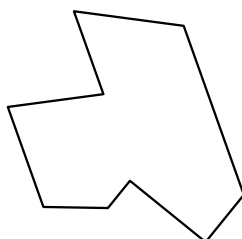
15)



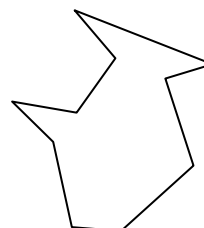
16)



17)



18)



1. \_\_\_\_\_

2. \_\_\_\_\_

3. \_\_\_\_\_

4. \_\_\_\_\_

5. \_\_\_\_\_

6. \_\_\_\_\_

7. \_\_\_\_\_

8. \_\_\_\_\_

9. \_\_\_\_\_

10. \_\_\_\_\_

11. \_\_\_\_\_

12. \_\_\_\_\_

13. \_\_\_\_\_

14. \_\_\_\_\_

15. \_\_\_\_\_

16. \_\_\_\_\_

17. \_\_\_\_\_

18. \_\_\_\_\_

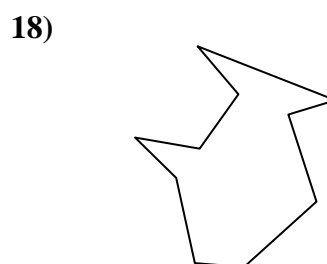
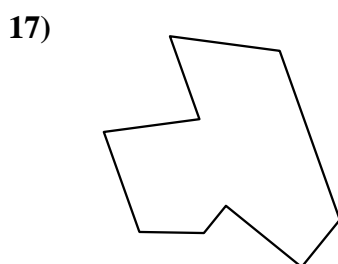
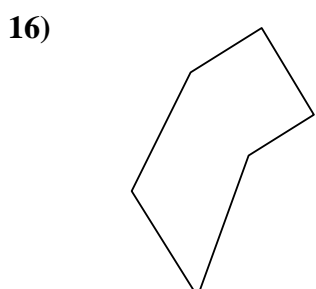
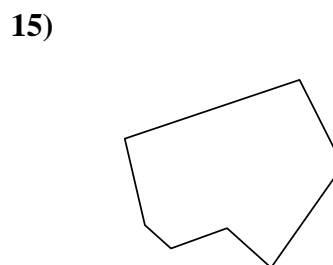
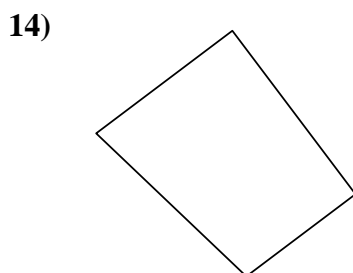
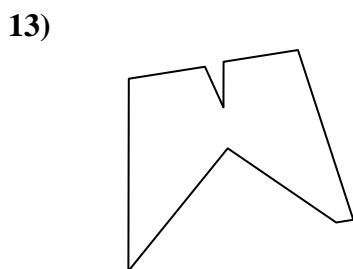
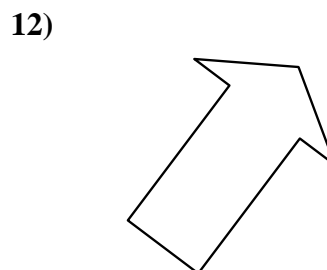
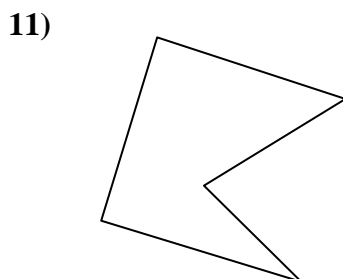
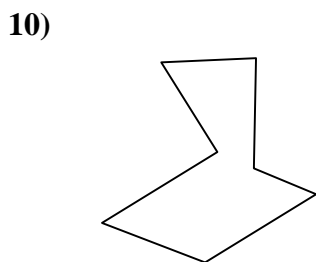

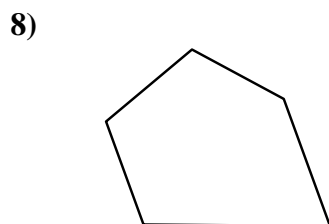
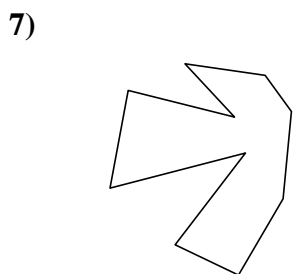
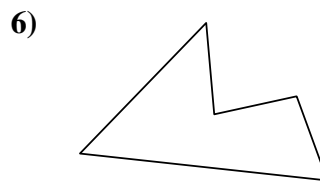

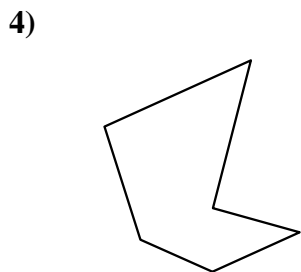


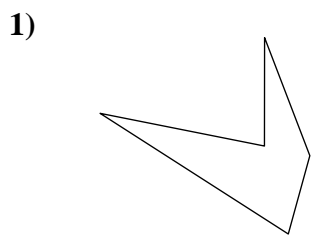
19. \_\_\_\_\_

20. \_\_\_\_\_

21. \_\_\_\_\_



Identifiez les types de figures montrées.



**Réponses**

1. Pentagone

2. Heptagone

3. Nonagone

4. Hexagone

5. Octogone

6. Pentagone

7. Décagone

8. Pentagone

9. Heptagone

10. Heptagone

11. Pentagone

12. Heptagone

13. Nonagone

14. Quadrilatère

15. Heptagone

16. Hexagone

17. Nonagone

18. Décagone

19. Nonagone

20. Hexagone

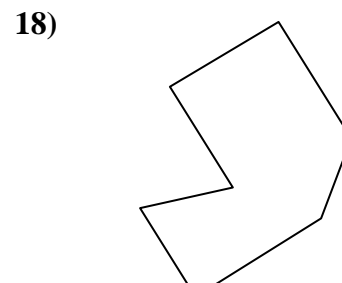
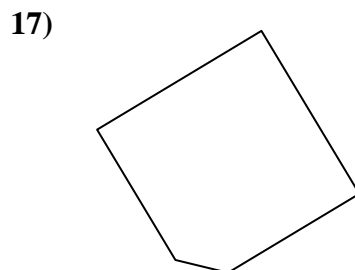
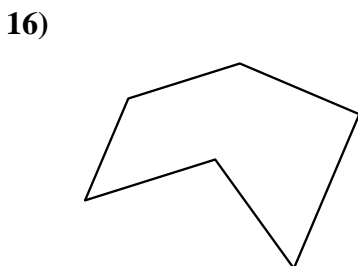
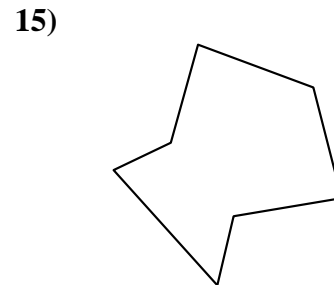

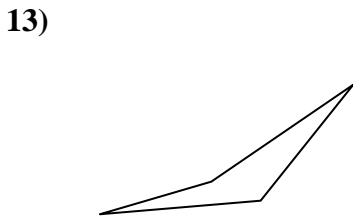
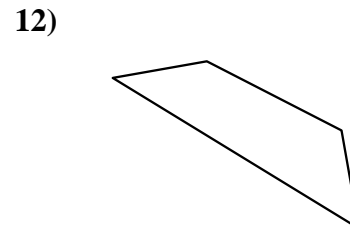
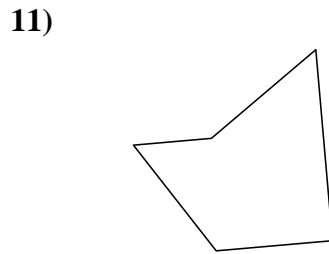
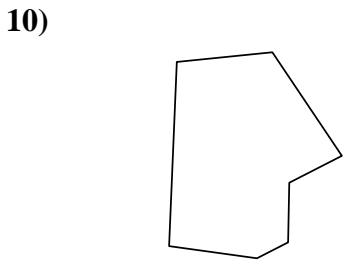
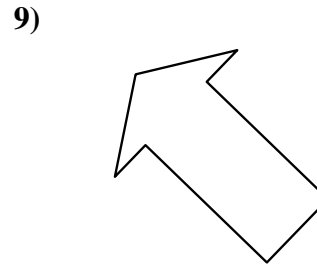
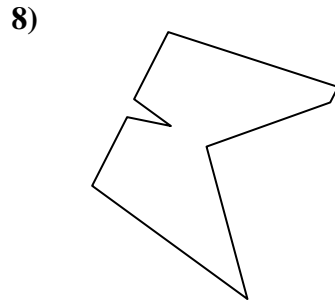
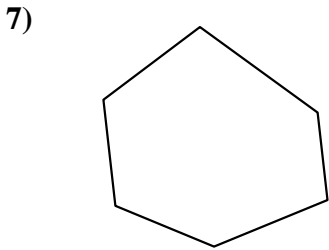
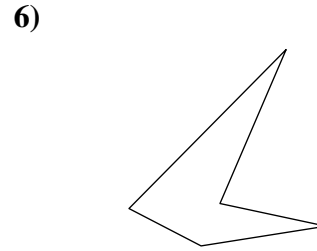
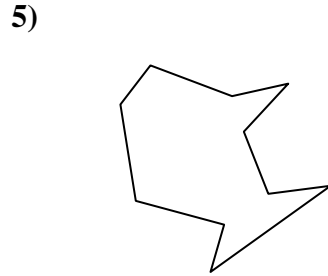
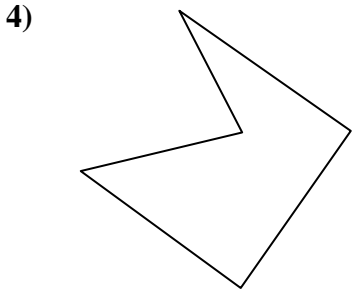
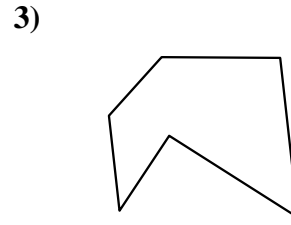
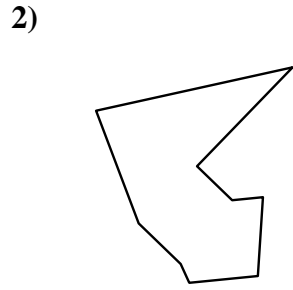
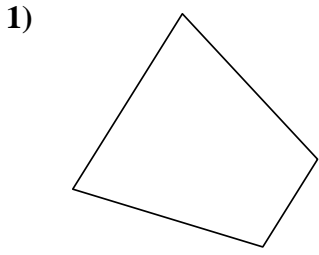
21. Octogone





Identifiez les types de figures montrées.

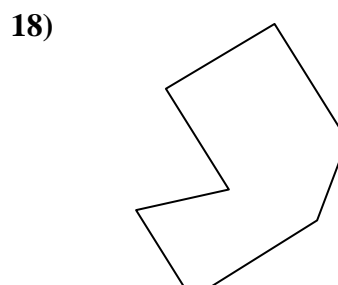
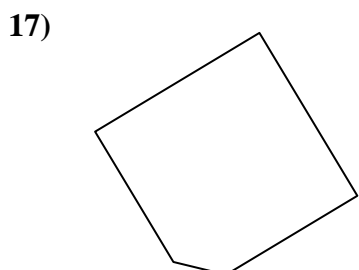
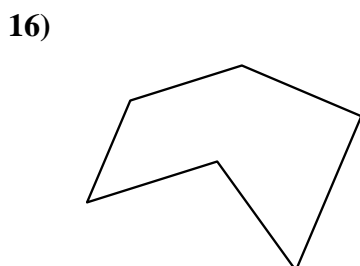
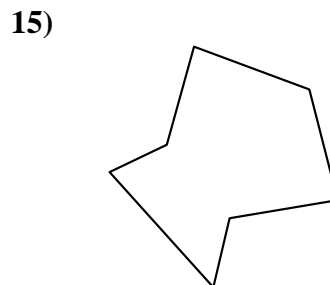

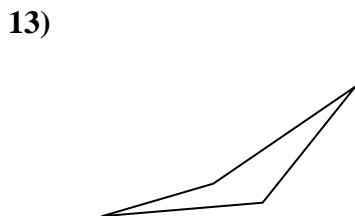
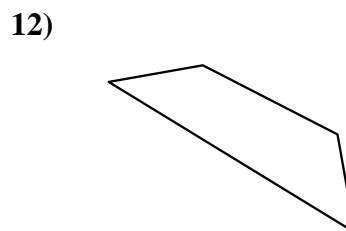
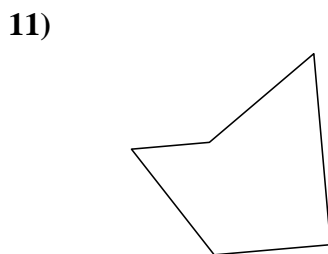
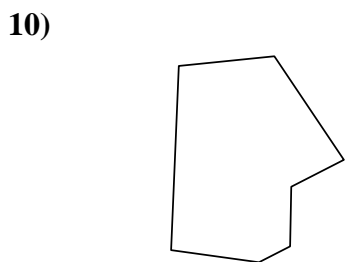
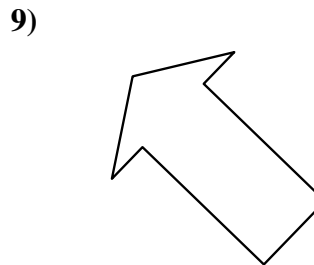
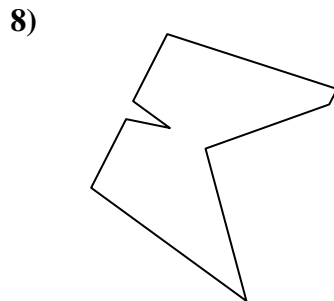
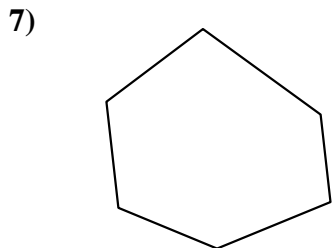
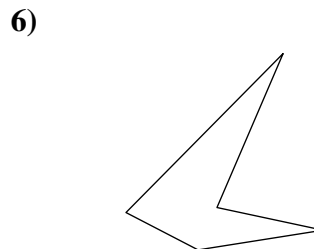
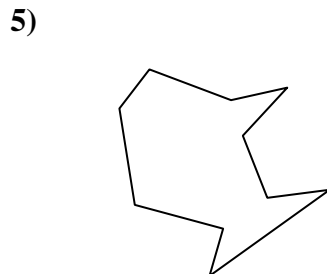
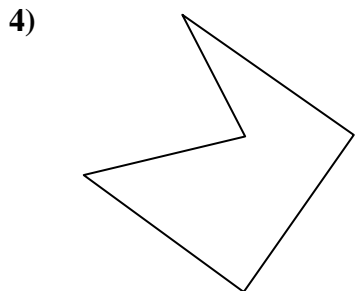
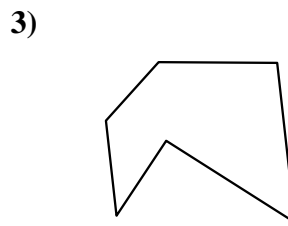
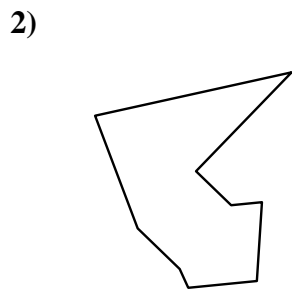
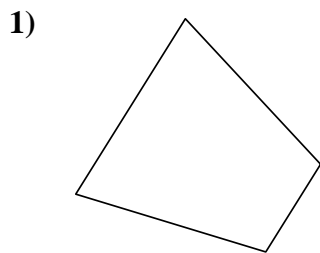
**Réponses**



1. \_\_\_\_\_
2. \_\_\_\_\_
3. \_\_\_\_\_
4. \_\_\_\_\_
5. \_\_\_\_\_
6. \_\_\_\_\_
7. \_\_\_\_\_
8. \_\_\_\_\_
9. \_\_\_\_\_
10. \_\_\_\_\_
11. \_\_\_\_\_
12. \_\_\_\_\_
13. \_\_\_\_\_
14. \_\_\_\_\_
15. \_\_\_\_\_
16. \_\_\_\_\_
17. \_\_\_\_\_
18. \_\_\_\_\_
19. \_\_\_\_\_
20. \_\_\_\_\_
21. \_\_\_\_\_



Identifiez les types de figures montrées.



**Réponses**

1. Quadrilatère

2. Nonagone

3. Hexagone

4. Pentagone

5. Décagone

6. Pentagone

7. Hexagone

8. Nonagone

9. Heptagone

10. Heptagone

11. Pentagone

12. Quadrilatère

13. Quadrilatère

14. Quadrilatère

15. Heptagone

16. Hexagone

17. Pentagone

18. Heptagone

19. Heptagone

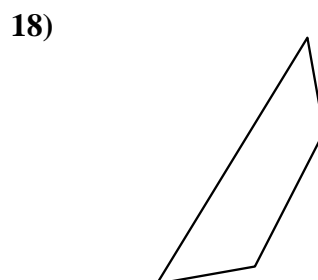
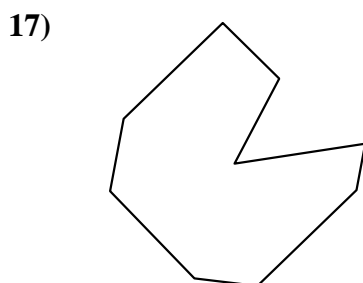
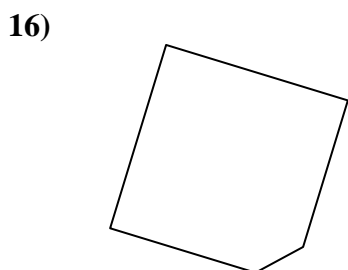
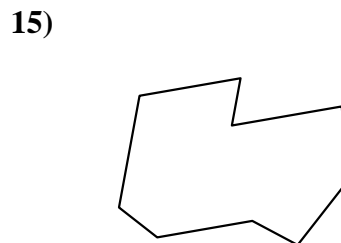
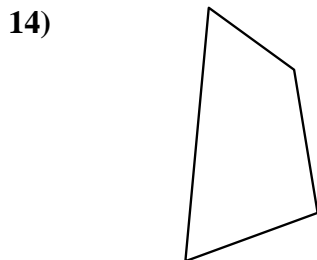
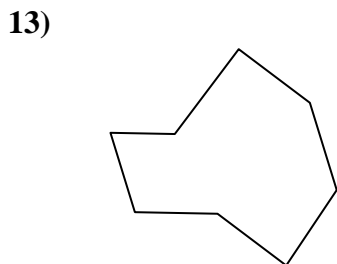
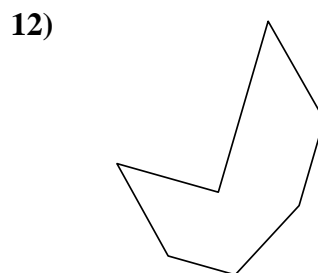
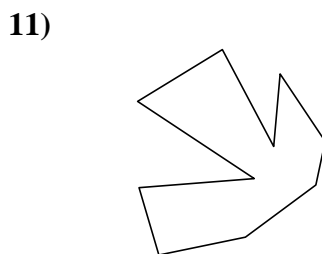
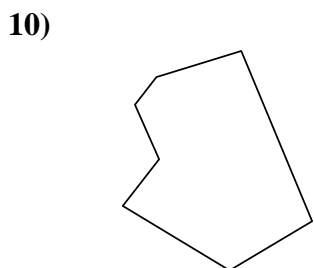
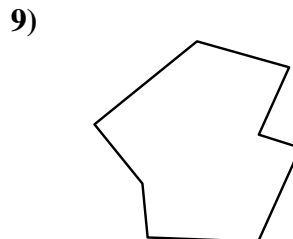
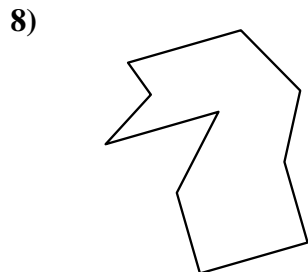
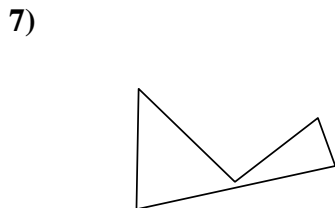
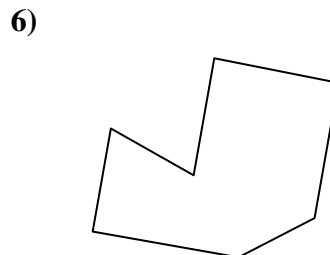
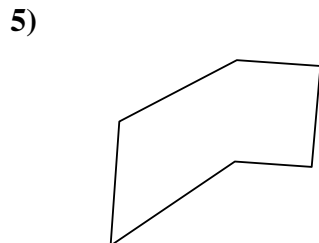
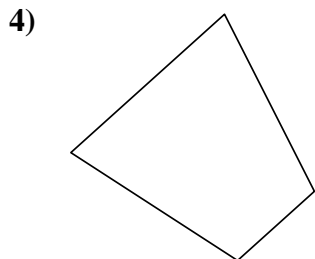
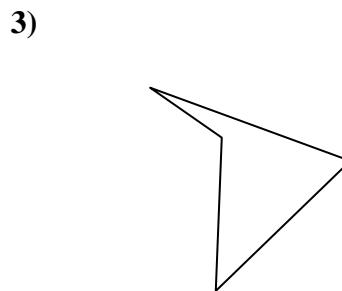
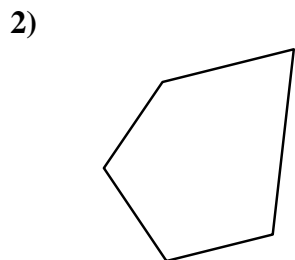
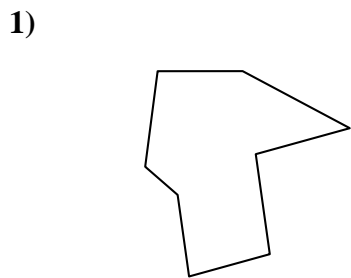
20. Octogone

21. Hexagone



Identifiez les types de figures montrées.

**Réponses**



1. \_\_\_\_\_

2. \_\_\_\_\_

3. \_\_\_\_\_

4. \_\_\_\_\_

5. \_\_\_\_\_

6. \_\_\_\_\_

7. \_\_\_\_\_

8. \_\_\_\_\_

9. \_\_\_\_\_

10. \_\_\_\_\_

11. \_\_\_\_\_

12. \_\_\_\_\_

13. \_\_\_\_\_

14. \_\_\_\_\_

15. \_\_\_\_\_

16. \_\_\_\_\_

17. \_\_\_\_\_

18. \_\_\_\_\_

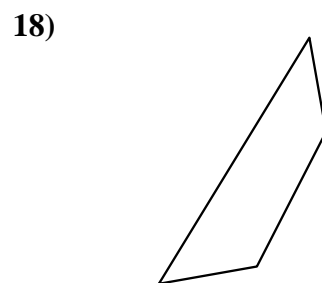
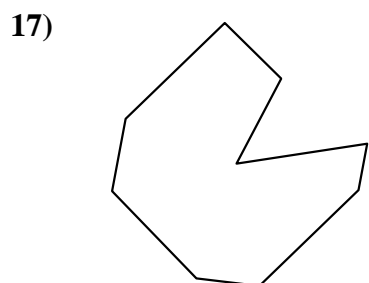
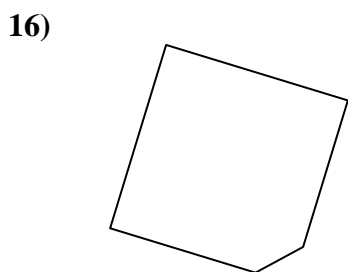
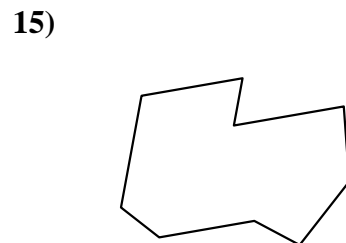
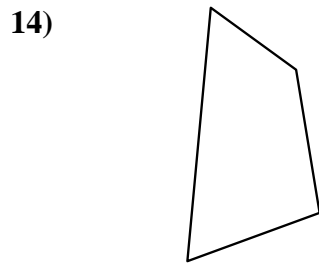
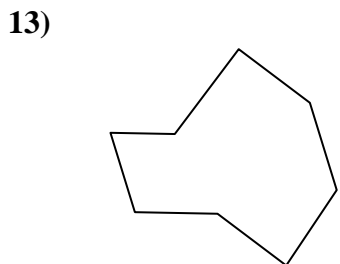
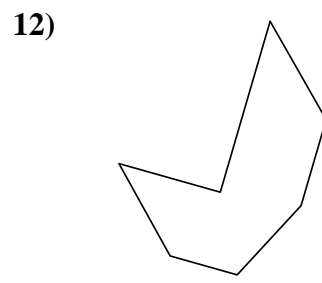
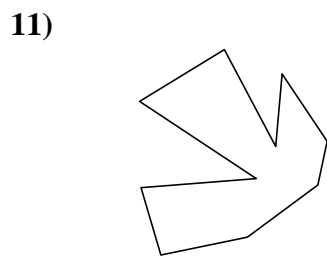
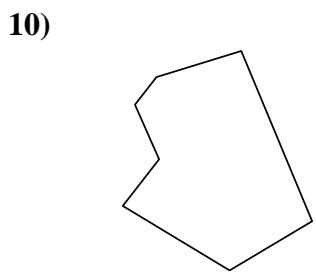
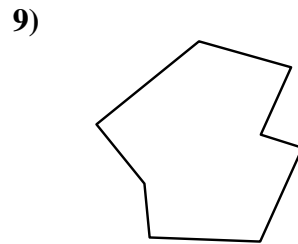
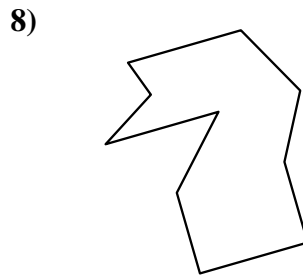
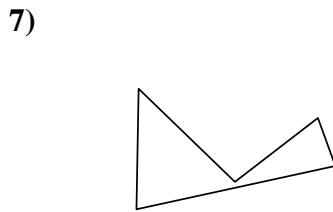
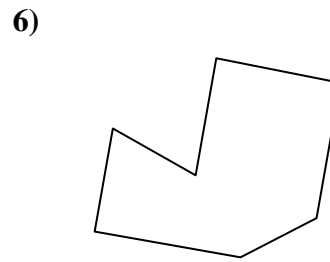
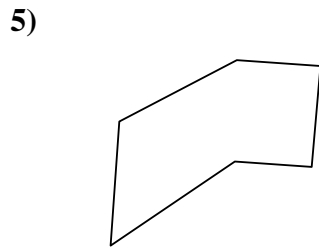
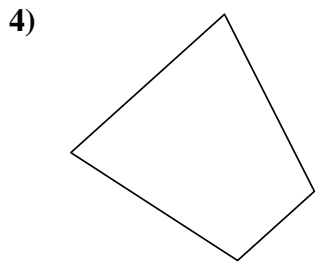
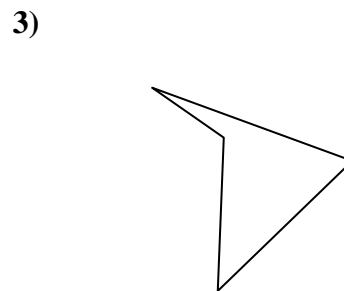
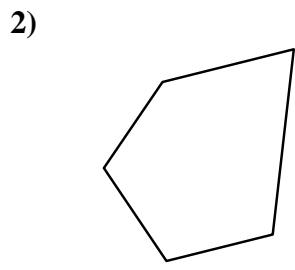
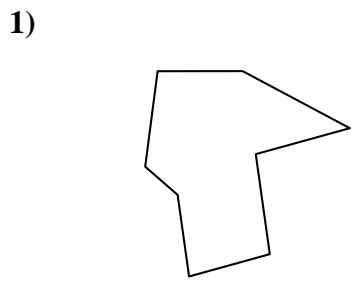
19. \_\_\_\_\_

20. \_\_\_\_\_

21. \_\_\_\_\_



Identifiez les types de figures montrées.



**Réponses**

1. Octogone

2. Pentagone

3. Quadrilatère

4. Quadrilatère

5. Hexagone

6. Heptagone

7. Pentagone

8. Décagone

9. Octogone

10. Heptagone

11. Décagone

12. Heptagone

13. Octogone

14. Quadrilatère

15. Nonagone

16. Pentagone

17. Nonagone

18. Quadrilatère

19. Heptagone

20. Hexagone

21. Nonagone