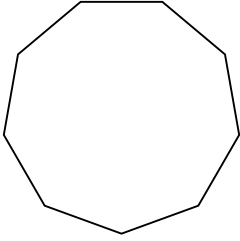


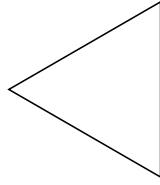


Identifiez le type de figure montrée.

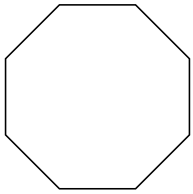
1)



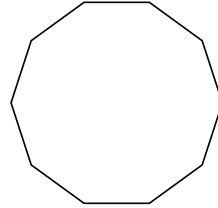
2)




3)



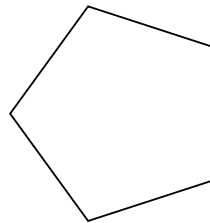
4)



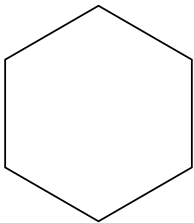
5)



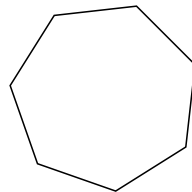
6)



7)



8)



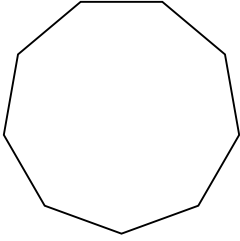
Réponses

- 1. _____
- 2. _____
- 3. _____
- 4. _____
- 5. _____
- 6. _____
- 7. _____
- 8. _____

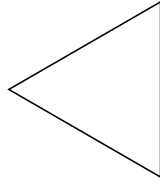


Identifiez le type de figure montrée.

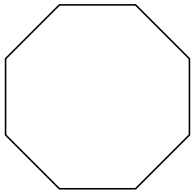
1)



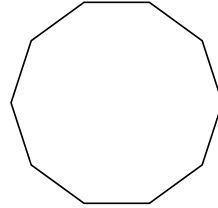
2)




3)



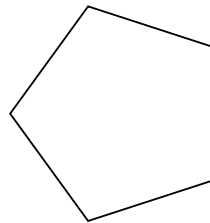
4)



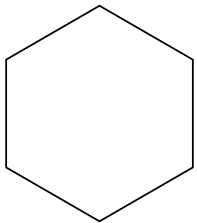
5)



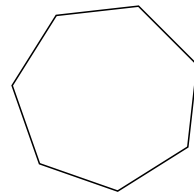
6)



7)



8)



Réponses

1. **Nonagone**

2. **triangle**

3. **Octogone**

4. **Décagone**

5. **Quadrilatère**

6. **Pentagone**

7. **Hexagone**

8. **Heptagone**