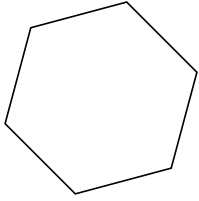


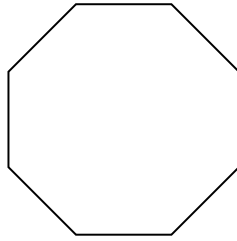


Identifiez le type de figure montrée.

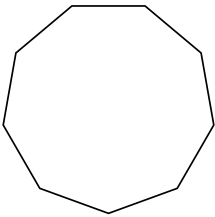
1)



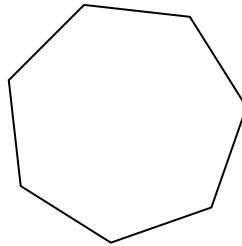
2)




3)



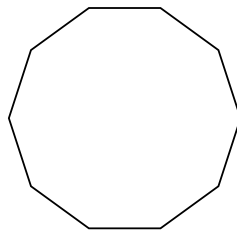
4)



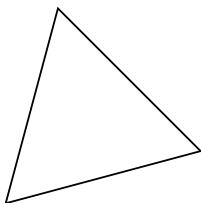
5)



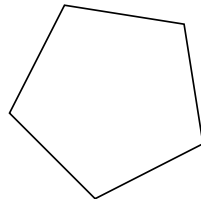
6)



7)



8)



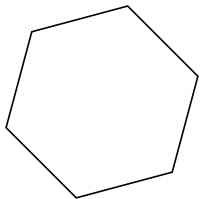
Réponses

- 1. _____
- 2. _____
- 3. _____
- 4. _____
- 5. _____
- 6. _____
- 7. _____
- 8. _____

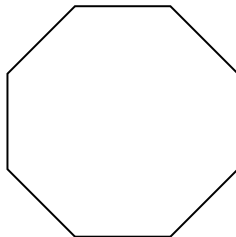


Identifiez le type de figure montrée.

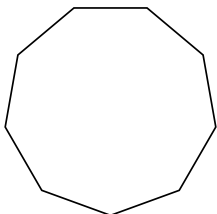
1)



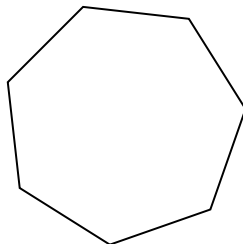
2)




3)



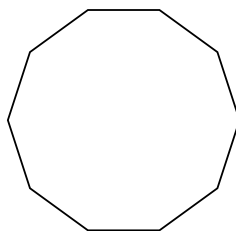
4)



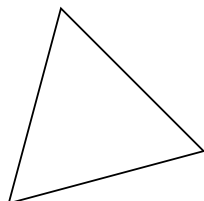
5)



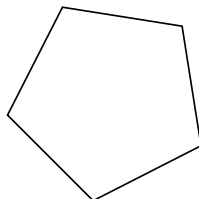
6)



7)



8)



Réponses

- 1. Hexagone
- 2. Octogone
- 3. Nonagone
- 4. Heptagone
- 5. Quadrilatère
- 6. Décagone
- 7. triangle
- 8. Pentagone