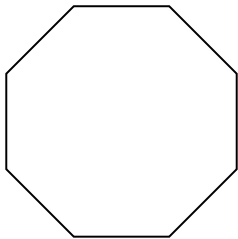


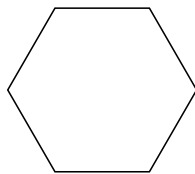


Identifiez le type de figure montrée.


1)



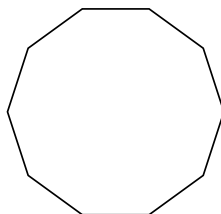
2)



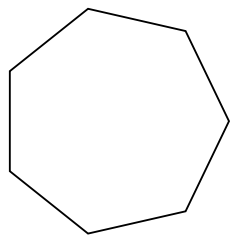
3)



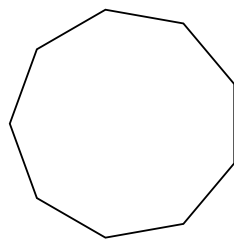
4)



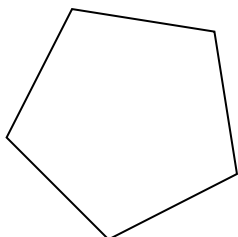
5)



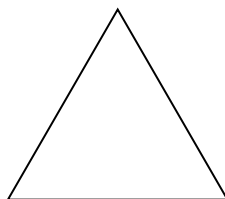
6)



7)



8)



Réponses

1. _____

2. _____

3. _____

4. _____

5. _____

6. _____

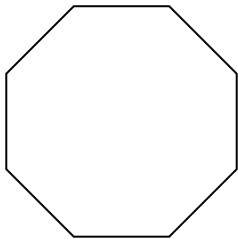
7. _____

8. _____

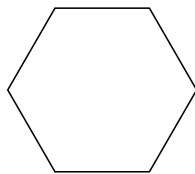


Identifiez le type de figure montrée.


1)



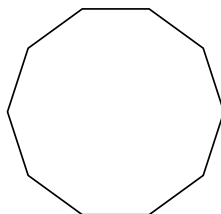
2)



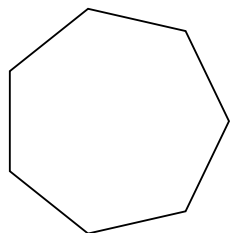
3)



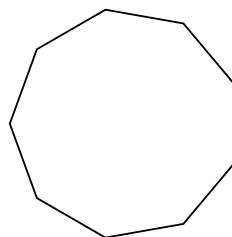
4)



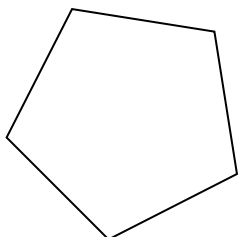
5)



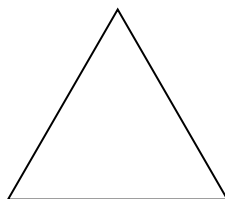
6)



7)



8)



Réponses

1. **Octogone**

2. **Hexagone**

3. **Quadrilatère**

4. **Décagone**

5. **Heptagone**

6. **Nonagone**

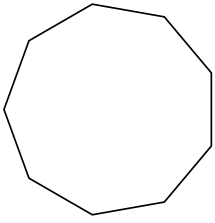
7. **Pentagone**

8. **triangle**

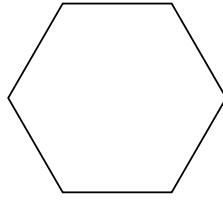


Identifiez le type de figure montrée.

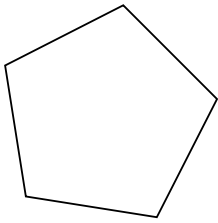
1)



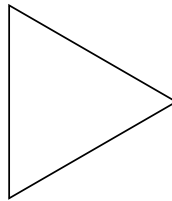
2)




3)



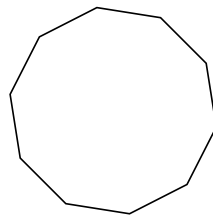
4)



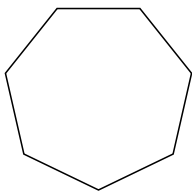
5)



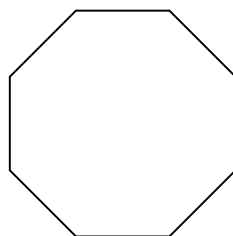
6)



7)



8)



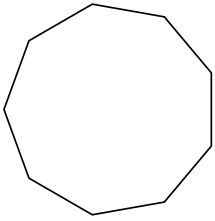
Réponses

- 1. _____
- 2. _____
- 3. _____
- 4. _____
- 5. _____
- 6. _____
- 7. _____
- 8. _____

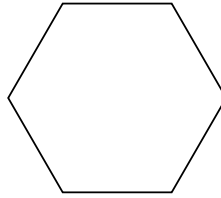


Identifiez le type de figure montrée.

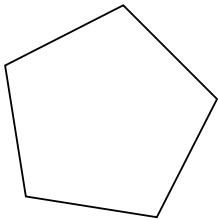
1)



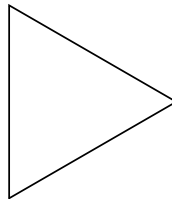
2)




3)



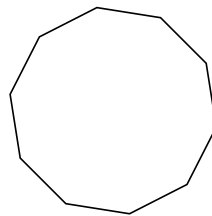
4)



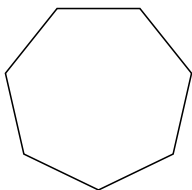
5)



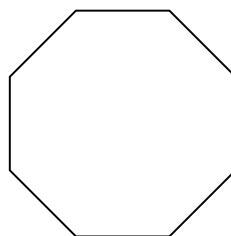
6)



7)



8)



Réponses

1. **Nonagone**

2. **Hexagone**

3. **Pentagone**

4. **triangle**

5. **Quadrilatère**

6. **Décagone**

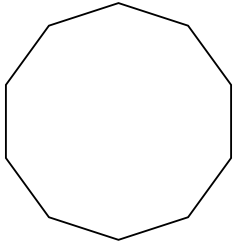
7. **Heptagone**

8. **Octogone**

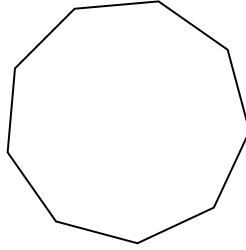


Identifiez le type de figure montrée.

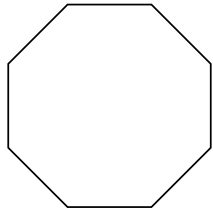
1)



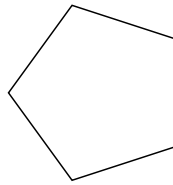
2)



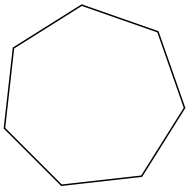
3)



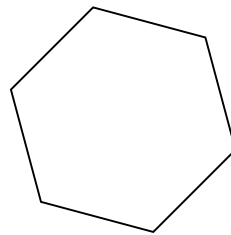
4)




5)




6)



7)



8)



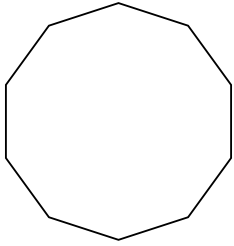
Réponses

- 1. _____
- 2. _____
- 3. _____
- 4. _____
- 5. _____
- 6. _____
- 7. _____
- 8. _____

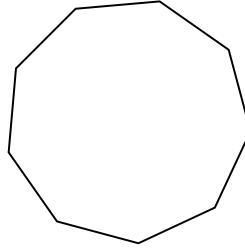


Identifiez le type de figure montrée.

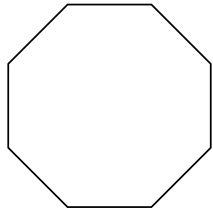
1)



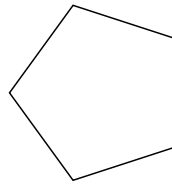
2)



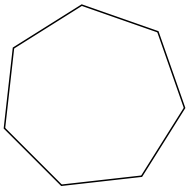
3)



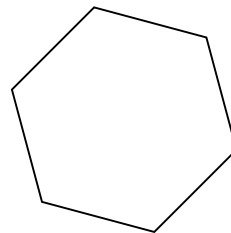
4)




5)




6)



7)



8)



Réponses

1. Décagone

2. Nonagone

3. Octogone

4. Pentagone

5. Heptagone

6. Hexagone

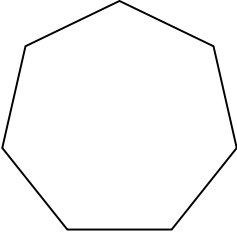
7. triangle

8. Quadrilatère

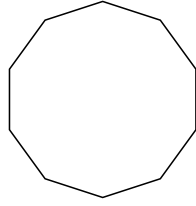


Identifiez le type de figure montrée.

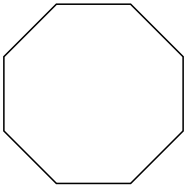
1)



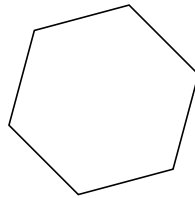
2)



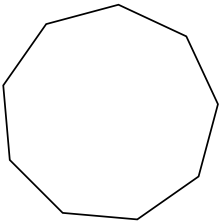
3)



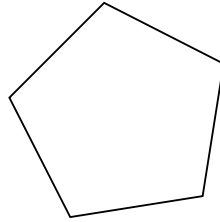
4)



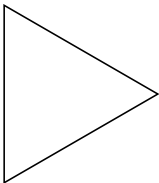
5)




6)



7)



8)



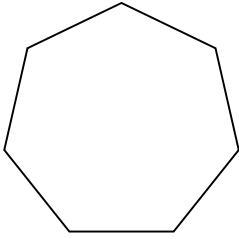
Réponses

- 1. _____
- 2. _____
- 3. _____
- 4. _____
- 5. _____
- 6. _____
- 7. _____
- 8. _____

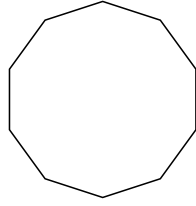


Identifiez le type de figure montrée.

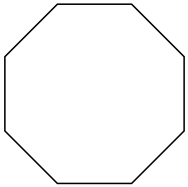
1)



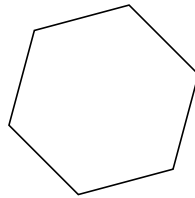
2)



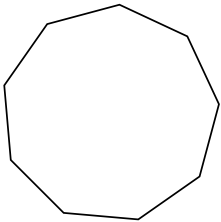
3)



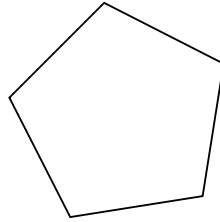
4)



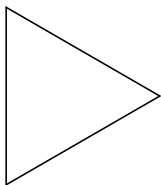
5)




6)



7)



8)



Réponses

1. **Heptagone**

2. **Décagone**

3. **Octogone**

4. **Hexagone**

5. **Nonagone**

6. **Pentagone**

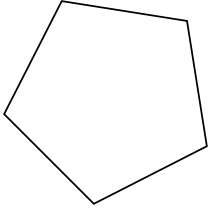
7. **triangle**

8. **Quadrilatère**




Identifiez le type de figure montrée.

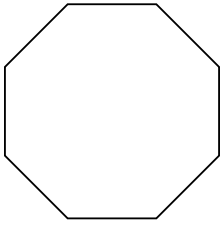
1)



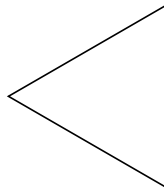
2)



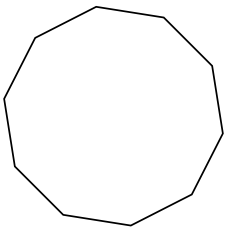
3)



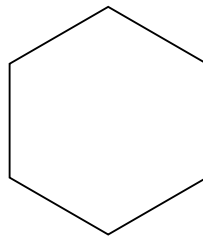
4)



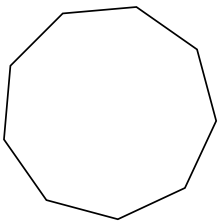
5)



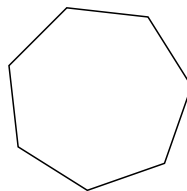
6)



7)



8)



Réponses

1. _____

2. _____

3. _____

4. _____

5. _____

6. _____

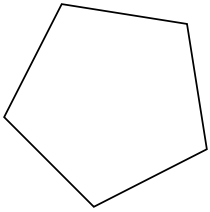
7. _____

8. _____




Identifiez le type de figure montrée.

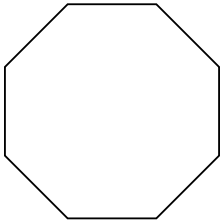
1)



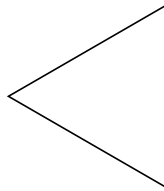
2)



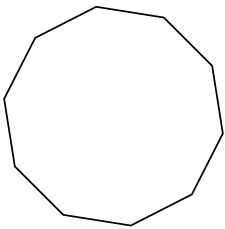
3)



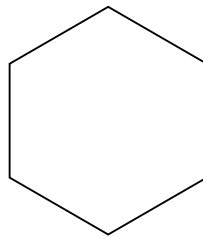
4)



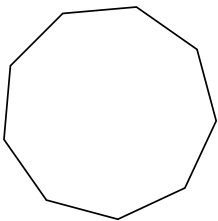
5)



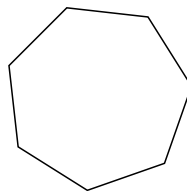
6)



7)



8)



Réponses

1. **Pentagone**

2. **Quadrilatère**

3. **Octogone**

4. **triangle**

5. **Décagone**

6. **Hexagone**

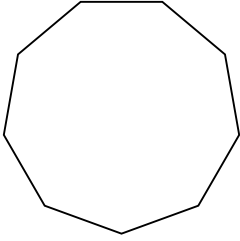
7. **Nonagone**

8. **Heptagone**

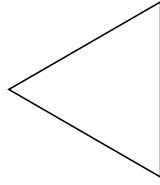


Identifiez le type de figure montrée.

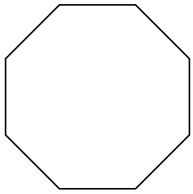
1)



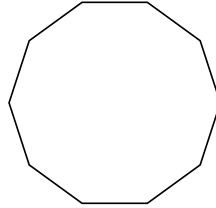
2)




3)



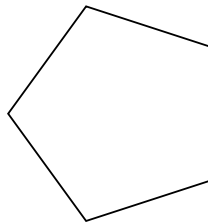
4)



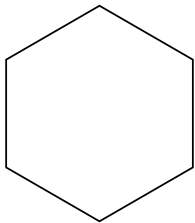
5)



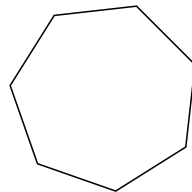
6)



7)



8)



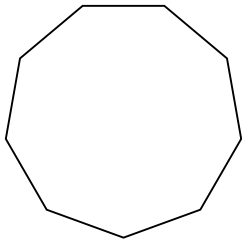
Réponses

- 1. _____
- 2. _____
- 3. _____
- 4. _____
- 5. _____
- 6. _____
- 7. _____
- 8. _____

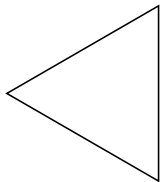


Identifiez le type de figure montrée.

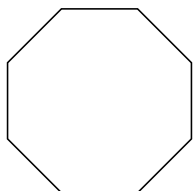
1)



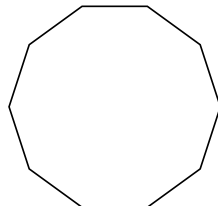
2)




3)



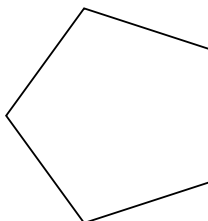
4)



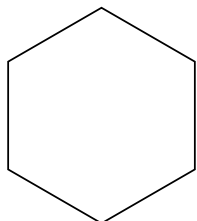
5)



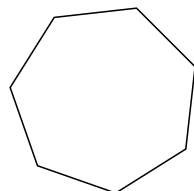
6)



7)



8)



Réponses

1. **Nonagone**

2. **triangle**

3. **Octogone**

4. **Décagone**

5. **Quadrilatère**

6. **Pentagone**

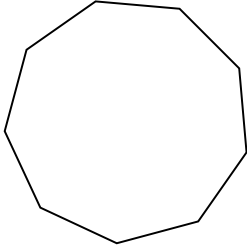
7. **Hexagone**

8. **Heptagone**

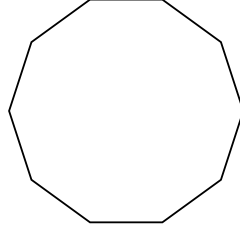


Identifiez le type de figure montrée.


1)



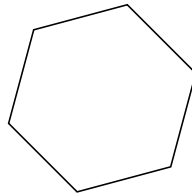
2)



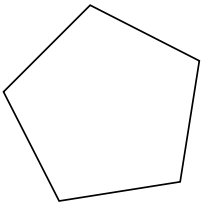
3)



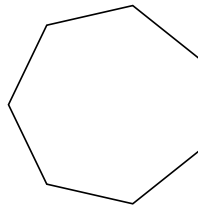
4)



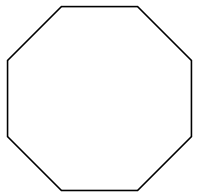
5)




6)



7)



8)



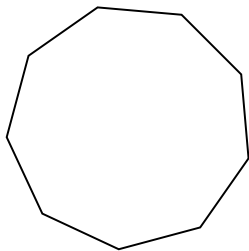
Réponses

- 1. _____
- 2. _____
- 3. _____
- 4. _____
- 5. _____
- 6. _____
- 7. _____
- 8. _____

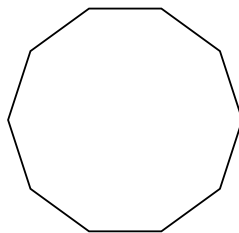


Identifiez le type de figure montrée.

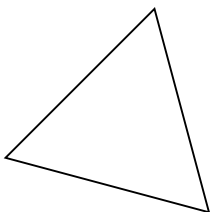
1)



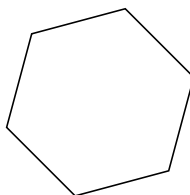
2)



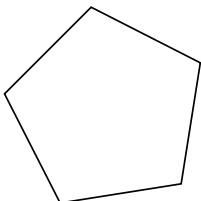
3)



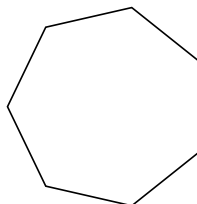
4)



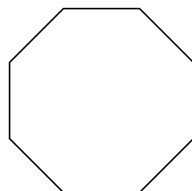
5)



6)



7)



8)



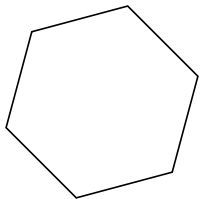
Réponses

- 1. Nonagone
- 2. Décagone
- 3. triangle
- 4. Hexagone
- 5. Pentagone
- 6. Heptagone
- 7. Octogone
- 8. Quadrilatère

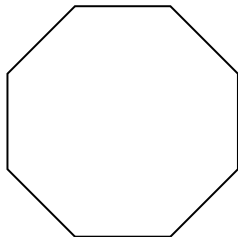


Identifiez le type de figure montrée.

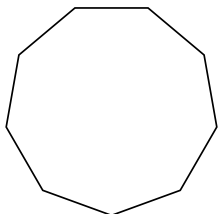
1)



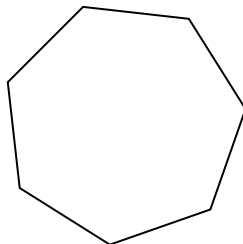
2)




3)



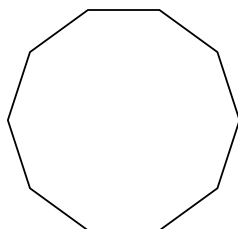
4)



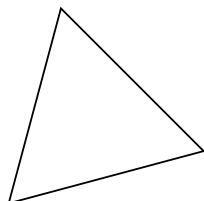
5)



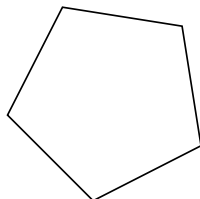
6)



7)



8)



Réponses

1. _____

2. _____

3. _____

4. _____

5. _____

6. _____

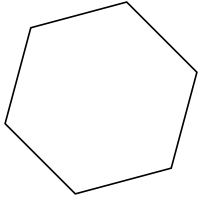
7. _____

8. _____

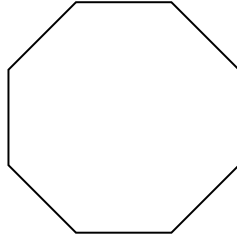


Identifiez le type de figure montrée.

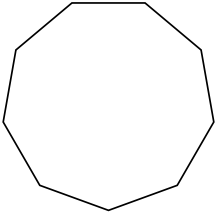
1)



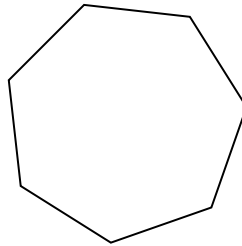
2)




3)



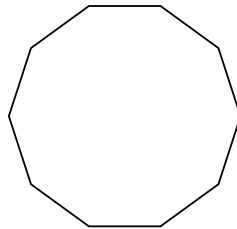
4)



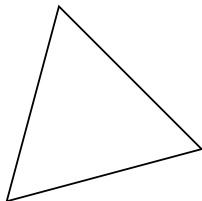
5)



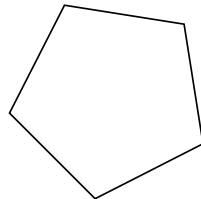
6)



7)



8)



Réponses

1. **Hexagone**

2. **Octogone**

3. **Nonagone**

4. **Heptagone**

5. **Quadrilatère**

6. **Décagone**

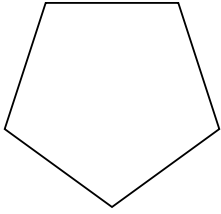
7. **triangle**

8. **Pentagone**

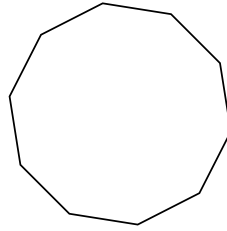


Identifiez le type de figure montrée.

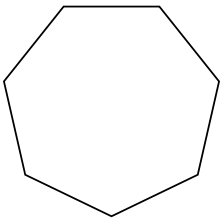
1)



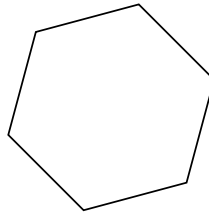
2)




3)



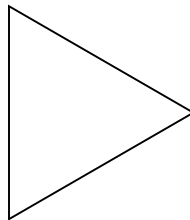
4)



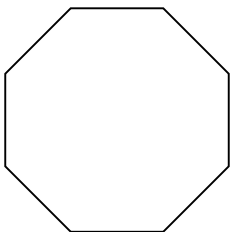
5)



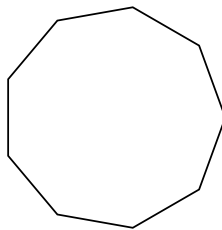
6)



7)



8)



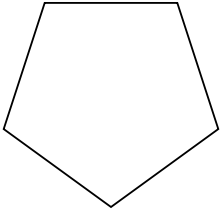
Réponses

- 1. _____
- 2. _____
- 3. _____
- 4. _____
- 5. _____
- 6. _____
- 7. _____
- 8. _____

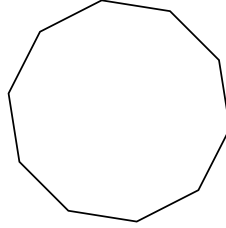


Identifiez le type de figure montrée.

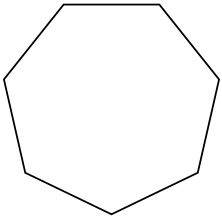
1)



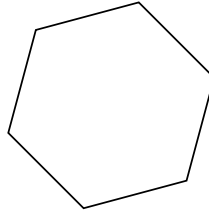
2)




3)



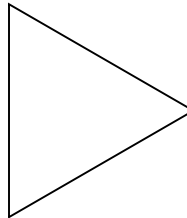
4)



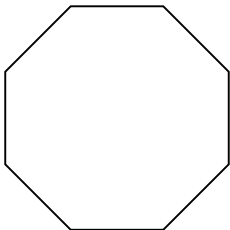
5)



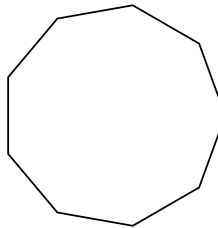
6)



7)



8)



Réponses

1. **Pentagone**

2. **Décagone**

3. **Heptagone**

4. **Hexagone**

5. **Quadrilatère**

6. **triangle**

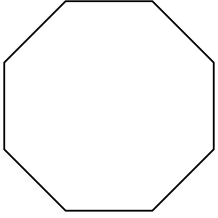
7. **Octogone**

8. **Nonagone**

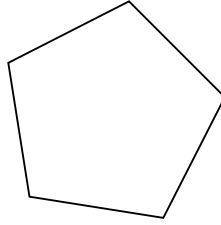


Identifiez le type de figure montrée.

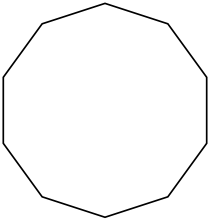
1)




2)



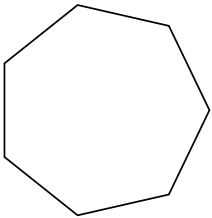
3)



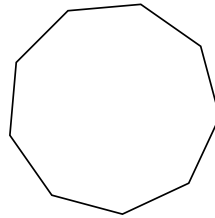
4)



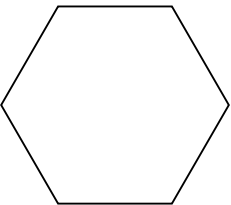
5)



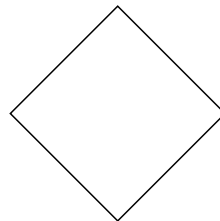
6)



7)



8)

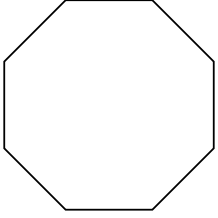
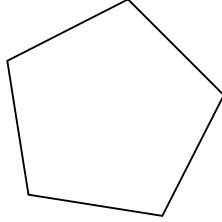
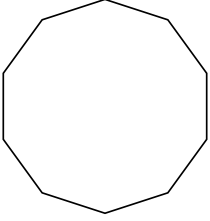

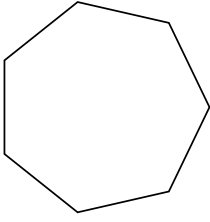
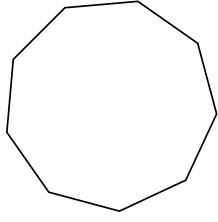
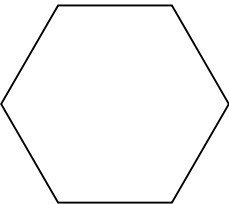



Réponses

- 1. _____
- 2. _____
- 3. _____
- 4. _____
- 5. _____
- 6. _____
- 7. _____
- 8. _____



Identifiez le type de figure montrée.

- 1) 
- 2) 
- 3) 
- 4) 
- 5) 
- 6) 
- 7) 
- 8) 

Réponses

- 1. Octogone
- 2. Pentagone
- 3. Décagone
- 4. triangle
- 5. Heptagone
- 6. Nonagone
- 7. Hexagone
- 8. Quadrilatère