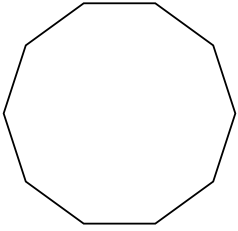


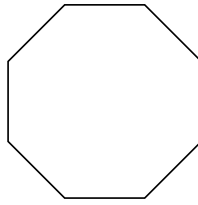


Identifiez le type de figure montrée.

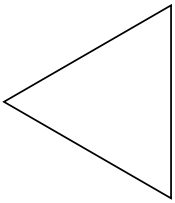
1)



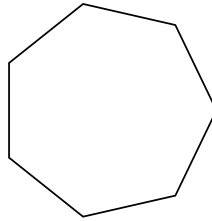
2)



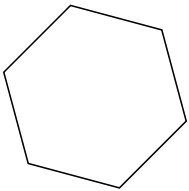
3)




4)



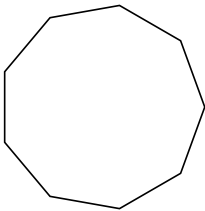
5)



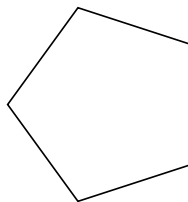
6)



7)



8)



**Réponses**

1. \_\_\_\_\_

2. \_\_\_\_\_

3. \_\_\_\_\_

4. \_\_\_\_\_

5. \_\_\_\_\_

6. \_\_\_\_\_

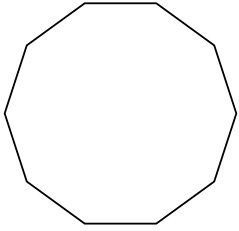
7. \_\_\_\_\_

8. \_\_\_\_\_

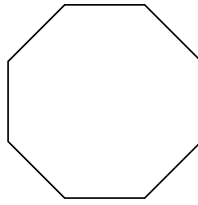


Identifiez le type de figure montrée.

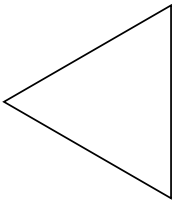
1)



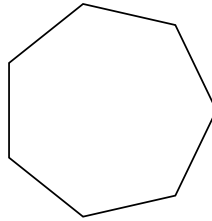
2)



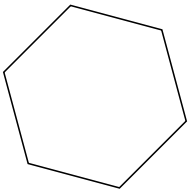
3)




4)



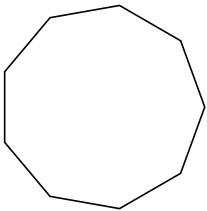
5)



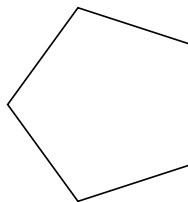
6)



7)



8)



**Réponses**

1. **Décagone**

2. **Octogone**

3. **triangle**

4. **Heptagone**

5. **Hexagone**

6. **Quadrilatère**

7. **Nonagone**

8. **Pentagone**