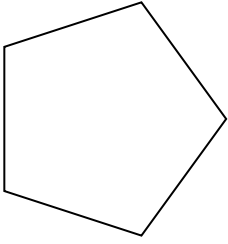


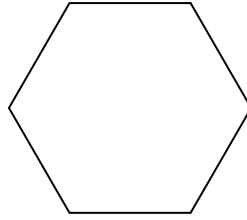


Déterminer si la figure est régulière ou irrégulière.

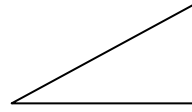
1)



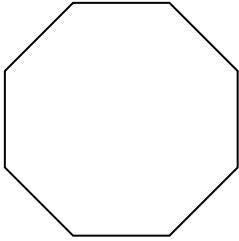
2)



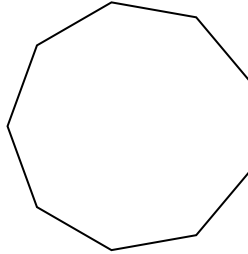
3)



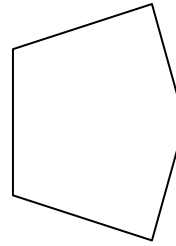
4)



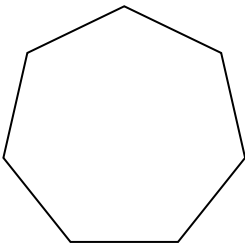
5)



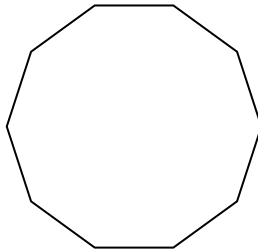
6)



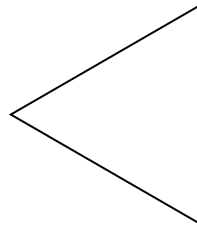
7)




8)




9)



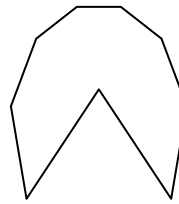
10)




11)




12)



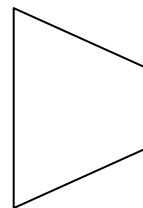
13)



14)



15)



**Réponses**

1. \_\_\_\_\_

2. \_\_\_\_\_

3. \_\_\_\_\_

4. \_\_\_\_\_

5. \_\_\_\_\_

6. \_\_\_\_\_

7. \_\_\_\_\_

8. \_\_\_\_\_

9. \_\_\_\_\_

10. \_\_\_\_\_

11. \_\_\_\_\_

12. \_\_\_\_\_

13. \_\_\_\_\_

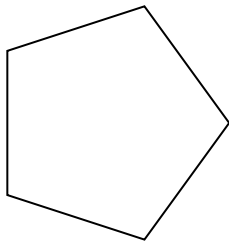
14. \_\_\_\_\_

15. \_\_\_\_\_

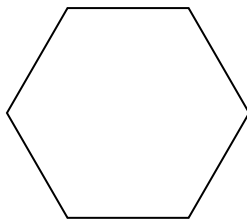


Déterminer si la figure est régulière ou irrégulière.

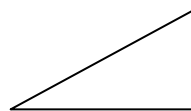
1)



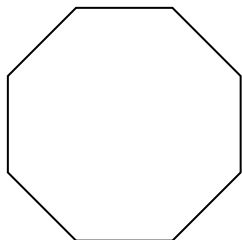
2)



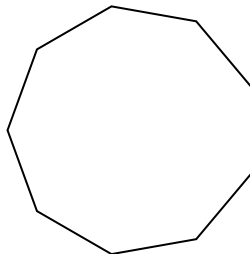
3)



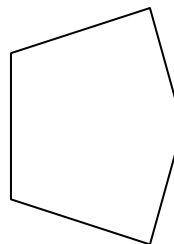
4)



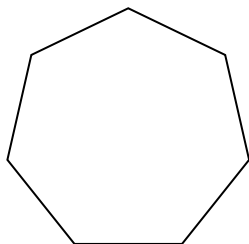
5)



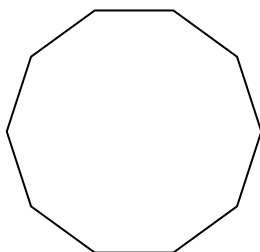
6)



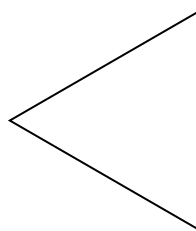
7)




8)




9)



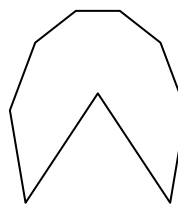
10)




11)




12)



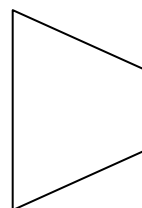
13)



14)



15)



**Réponses**

- 1. régulière
- 2. régulière
- 3. irrégulière
- 4. régulière
- 5. régulière
- 6. irrégulière
- 7. régulière
- 8. régulière
- 9. régulière
- 10. irrégulière
- 11. régulière
- 12. irrégulière
- 13. irrégulière
- 14. irrégulière
- 15. irrégulière