


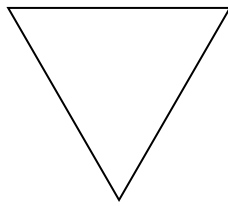


Déterminer si la figure est régulière ou irrégulière.

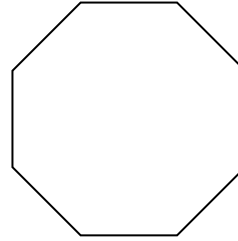
1)



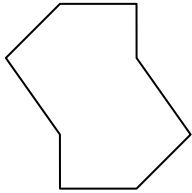
2)



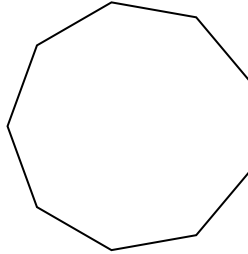
3)




4)




5)




6)



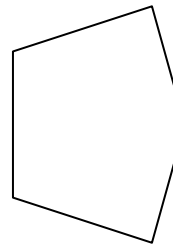
7)




8)



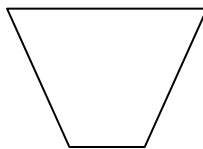
9)



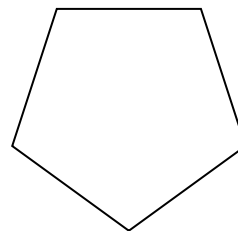
10)



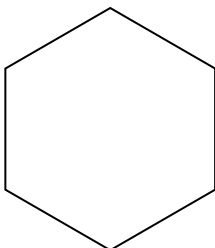
11)



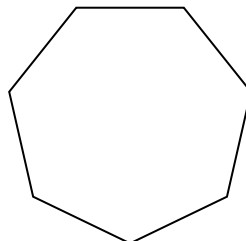
12)



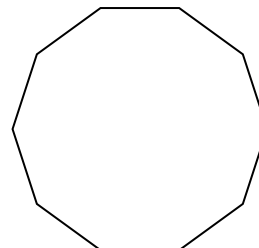
13)



14)



15)




Réponses

- 1. _____
- 2. _____
- 3. _____
- 4. _____
- 5. _____
- 6. _____
- 7. _____
- 8. _____
- 9. _____
- 10. _____
- 11. _____
- 12. _____
- 13. _____
- 14. _____
- 15. _____

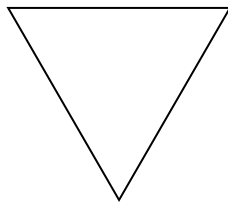


Déterminer si la figure est régulière ou irrégulière.

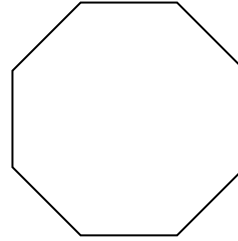
1)



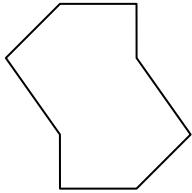
2)



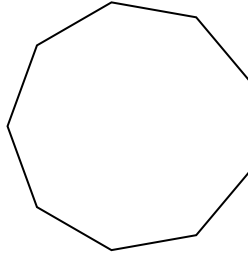
3)



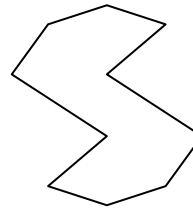
4)




5)




6)



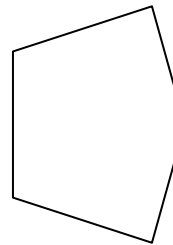
7)




8)



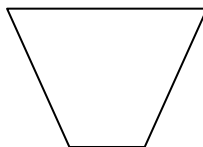
9)



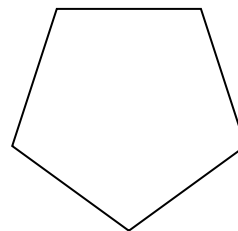
10)



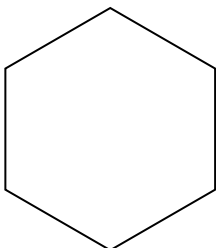
11)



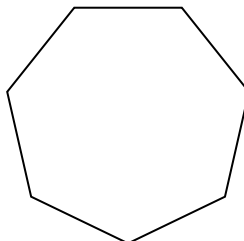
12)



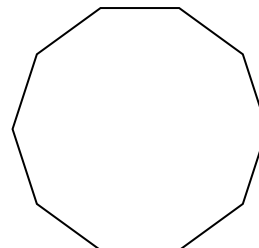
13)



14)



15)



Réponses

1. régulière

2. régulière

3. régulière

4. irrégulière

5. régulière

6. irrégulière

7. irrégulière

8. irrégulière

9. irrégulière

10. irrégulière

11. irrégulière

12. régulière

13. régulière

14. régulière

15. régulière