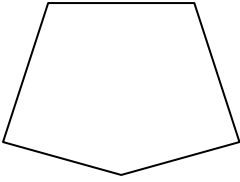





Déterminer si la figure est régulière ou irrégulière.


1)




2)



3)



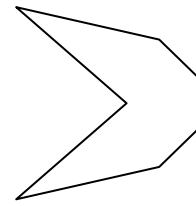
4)



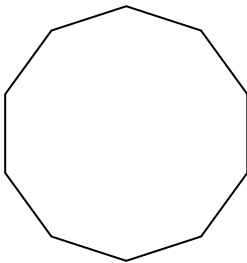
5)



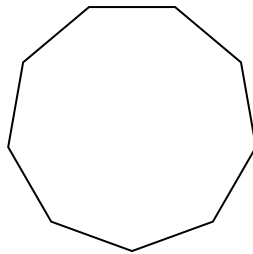
6)



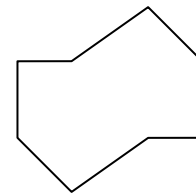
7)



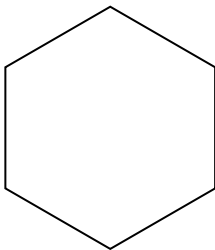
8)



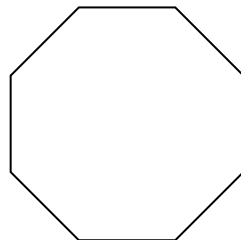
9)



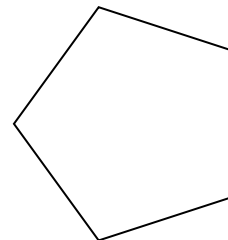
10)




11)



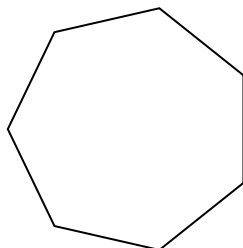
12)




13)



14)



15)



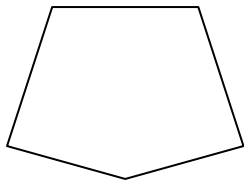
Réponses

1. _____
2. _____
3. _____
4. _____
5. _____
6. _____
7. _____
8. _____
9. _____
10. _____
11. _____
12. _____
13. _____
14. _____
15. _____




Déterminer si la figure est régulière ou irrégulière.


1)




2)



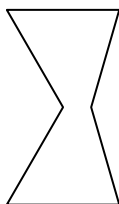
3)



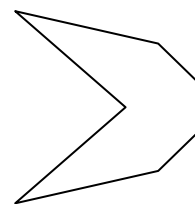
4)



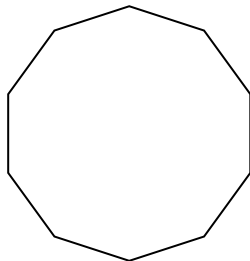
5)



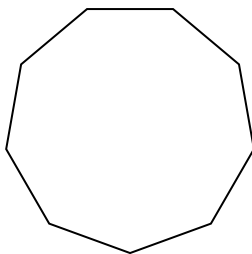
6)



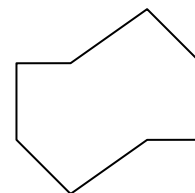
7)



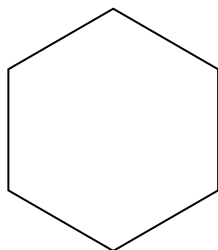
8)



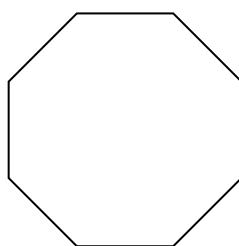
9)



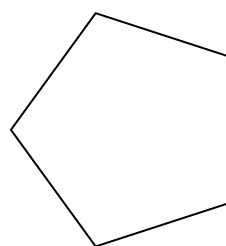
10)




11)



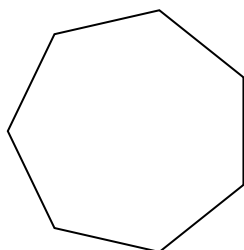
12)




13)



14)



15)



Réponses

1. irrégulière

2. irrégulière

3. régulière

4. irrégulière

5. irrégulière

6. irrégulière

7. régulière

8. régulière

9. irrégulière

10. régulière

11. régulière

12. régulière

13. irrégulière


14. régulière

15. irrégulière

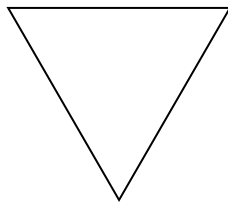


Déterminer si la figure est régulière ou irrégulière.

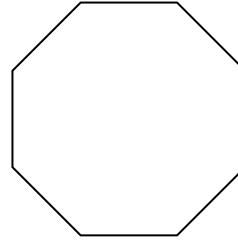
1)



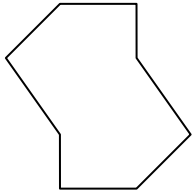
2)



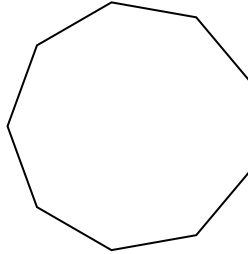
3)



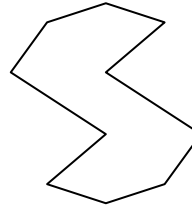
4)




5)




6)



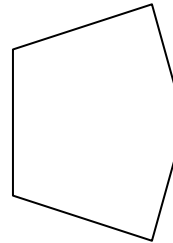
7)




8)



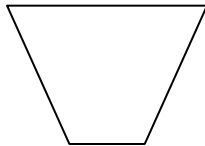
9)



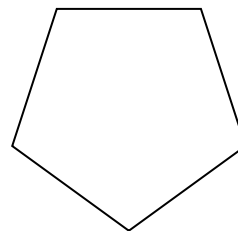
10)



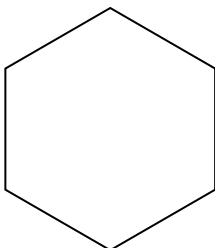
11)



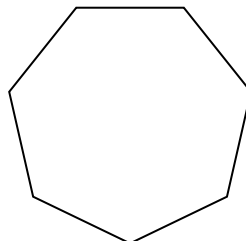
12)



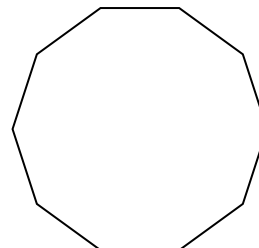
13)



14)



15)




Réponses

- 1. _____
- 2. _____
- 3. _____
- 4. _____
- 5. _____
- 6. _____
- 7. _____
- 8. _____
- 9. _____
- 10. _____
- 11. _____
- 12. _____
- 13. _____
- 14. _____
- 15. _____

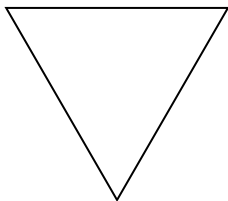


Déterminer si la figure est régulière ou irrégulière.

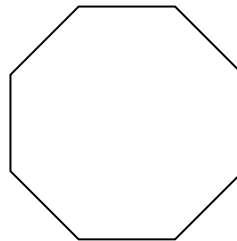
1)



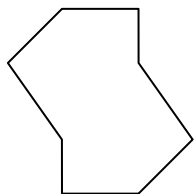
2)



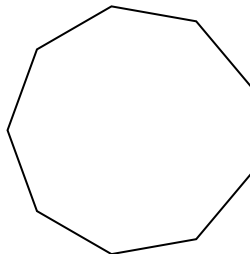
3)



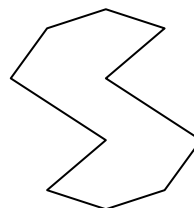
4)




5)




6)



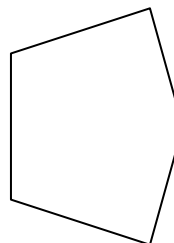
7)




8)



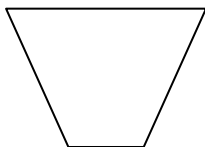
9)



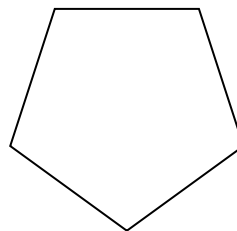
10)



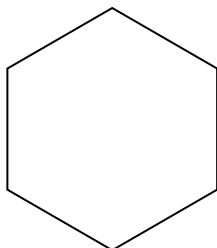
11)



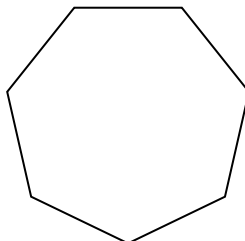
12)



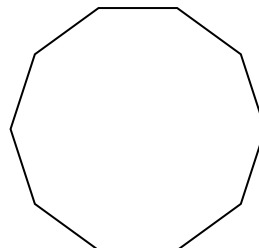
13)



14)



15)



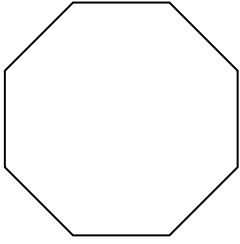
Réponses

1. régulière
2. régulière
3. régulière
4. irrégulière
5. régulière
6. irrégulière
7. irrégulière
8. irrégulière
9. irrégulière
10. irrégulière
11. irrégulière
12. régulière
13. régulière
14. régulière
15. régulière

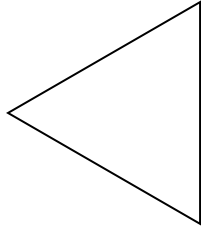


Déterminer si la figure est régulière ou irrégulière.

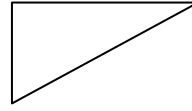
1)



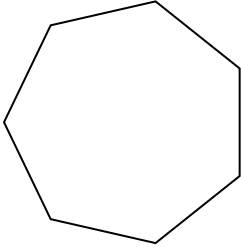
2)



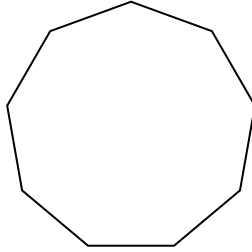
3)




4)



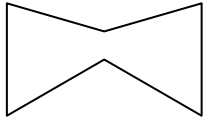
5)



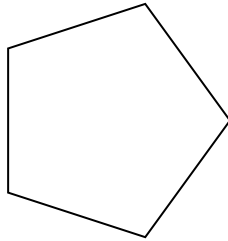
6)




7)




8)



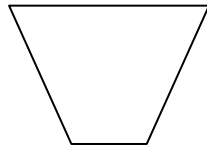
9)




10)




11)




12)



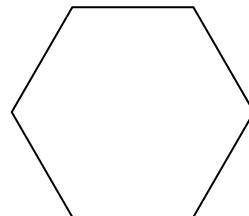
13)



14)



15)



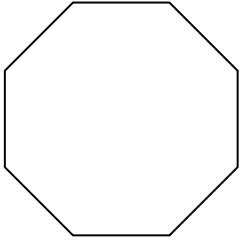
Réponses

1. _____
2. _____
3. _____
4. _____
5. _____
6. _____
7. _____
8. _____
9. _____
10. _____
11. _____
12. _____
13. _____
14. _____
15. _____

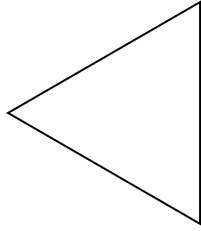


Déterminer si la figure est régulière ou irrégulière.

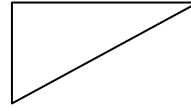
1)



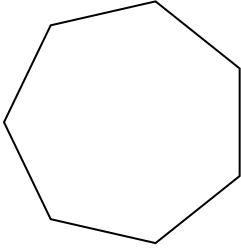
2)



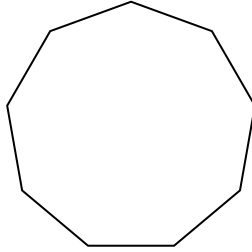
3)



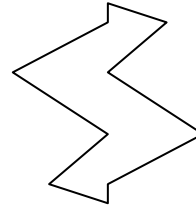
4)



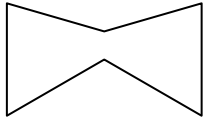
5)



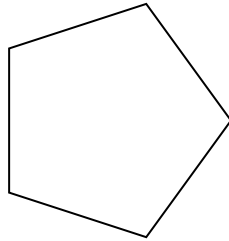
6)




7)




8)



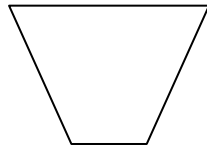
9)




10)




11)




12)



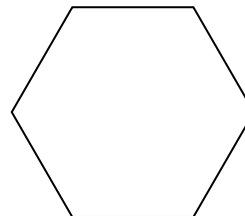
13)



14)



15)



Réponses

1. régulière

2. régulière

3. irrégulière

4. régulière

5. régulière

6. irrégulière

7. irrégulière

8. régulière

9. irrégulière

10. régulière

11. irrégulière

12. irrégulière

13. irrégulière

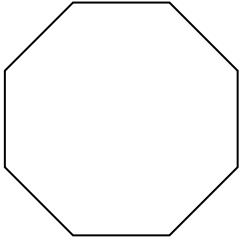
14. irrégulière

15. régulière




Déterminer si la figure est régulière ou irrégulière.

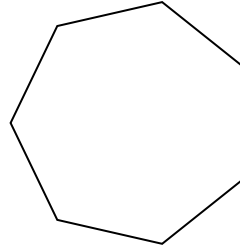
1)




2)




3)



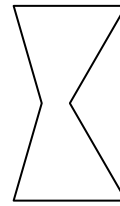
4)



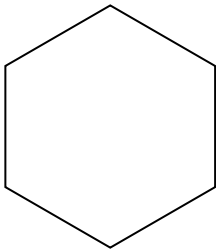
5)



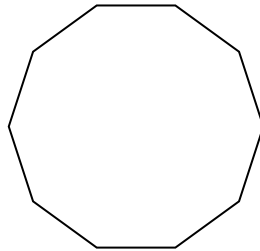
6)




7)



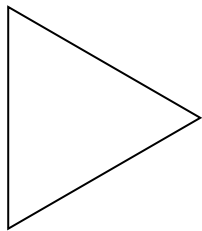
8)




9)



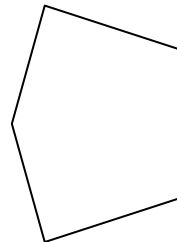
10)




11)



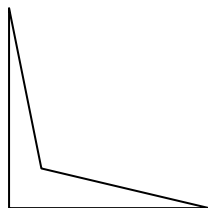
12)



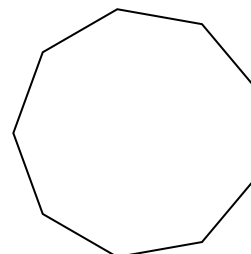
13)



14)



15)



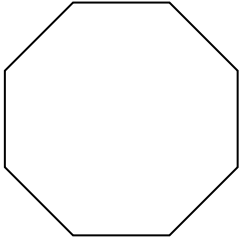
Réponses

- 1. _____
- 2. _____
- 3. _____
- 4. _____
- 5. _____
- 6. _____
- 7. _____
- 8. _____
- 9. _____
- 10. _____
- 11. _____
- 12. _____
- 13. _____
- 14. _____
- 15. _____




Déterminer si la figure est régulière ou irrégulière.

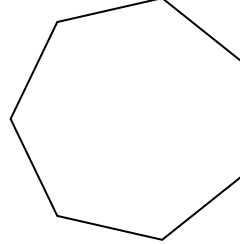
1)




2)




3)



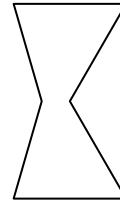
4)



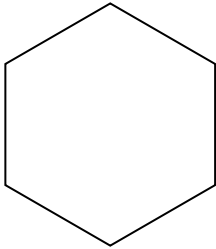
5)



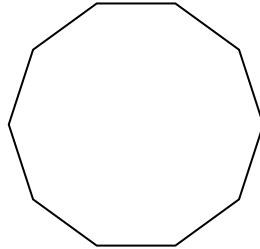
6)




7)



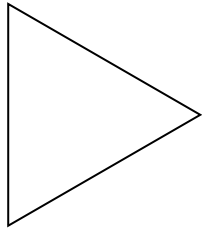
8)




9)



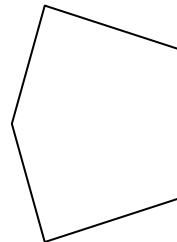
10)




11)



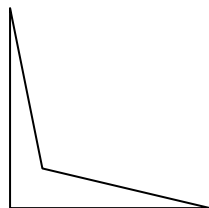
12)



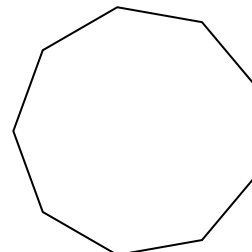
13)



14)



15)



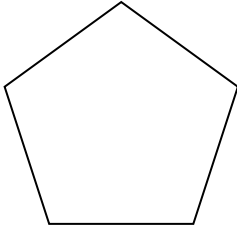
Réponses

1. régulière
2. irrégulière
3. régulière
4. irrégulière
5. irrégulière
6. irrégulière
7. régulière
8. régulière
9. irrégulière
10. régulière
11. régulière
12. irrégulière
13. irrégulière
14. irrégulière
15. régulière

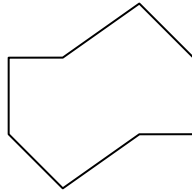


Déterminer si la figure est régulière ou irrégulière.


1)



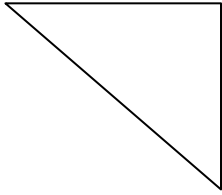
2)



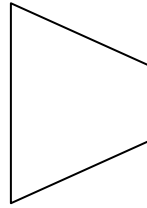
3)



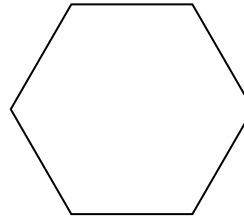
4)




5)




6)



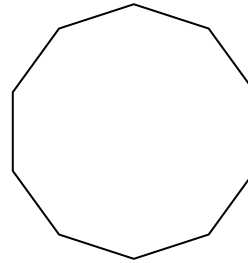
7)



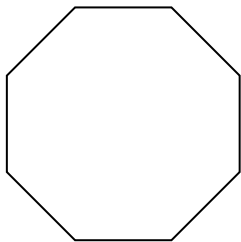
8)




9)



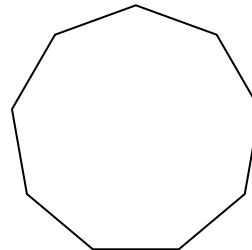
10)



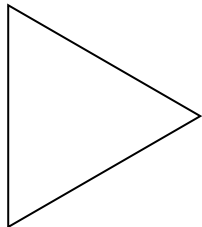
11)




12)



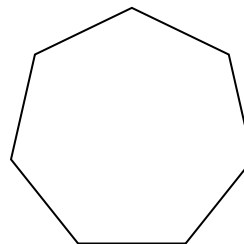
13)



14)



15)



Réponses

1. _____

2. _____

3. _____

4. _____

5. _____

6. _____

7. _____

8. _____

9. _____

10. _____

11. _____

12. _____

13. _____

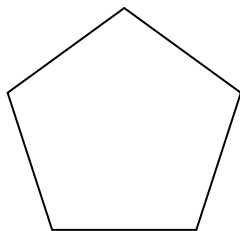
14. _____

15. _____

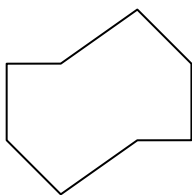


Déterminer si la figure est régulière ou irrégulière.


1)



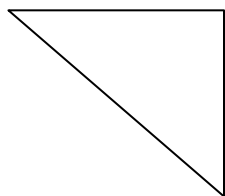
2)



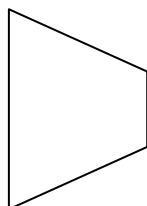
3)



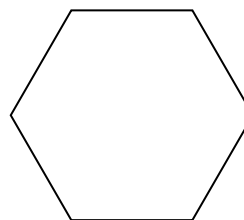
4)




5)




6)



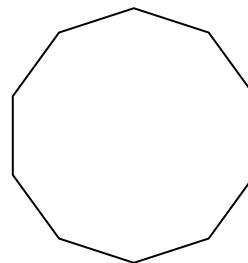
7)



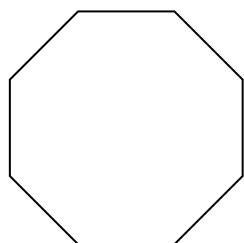
8)




9)



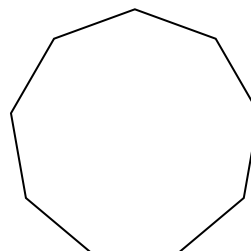
10)



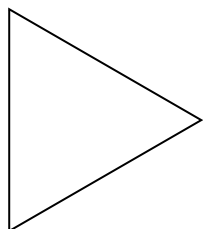
11)




12)



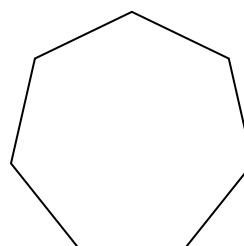
13)



14)



15)



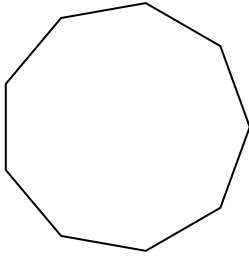
Réponses

1. régulière
2. irrégulière
3. régulière
4. irrégulière
5. irrégulière
6. régulière
7. irrégulière
8. irrégulière
9. régulière
10. régulière
11. irrégulière
12. régulière
13. régulière
14. irrégulière
15. régulière

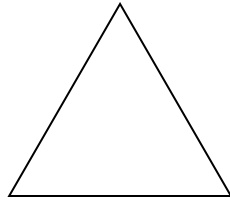


Déterminer si la figure est régulière ou irrégulière.


1)



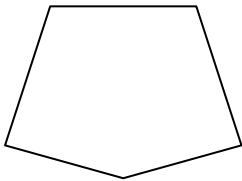
2)




3)



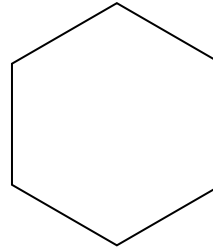
4)



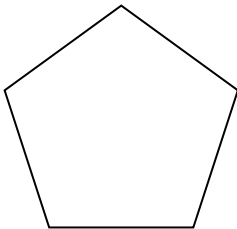
5)




6)



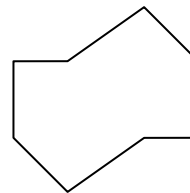
7)



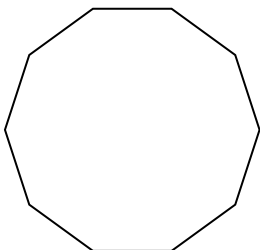
8)




9)




10)



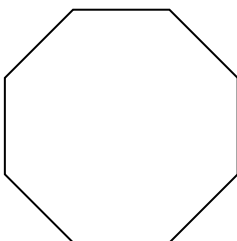
11)



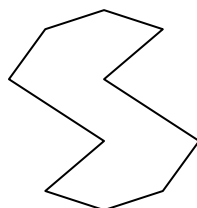
12)



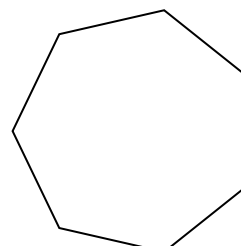
13)



14)



15)



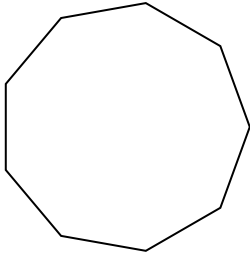
Réponses

- 1. _____
- 2. _____
- 3. _____
- 4. _____
- 5. _____
- 6. _____
- 7. _____
- 8. _____
- 9. _____
- 10. _____
- 11. _____
- 12. _____
- 13. _____
- 14. _____
- 15. _____

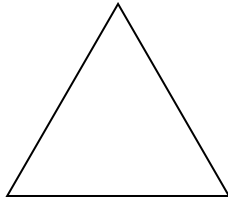


Déterminer si la figure est régulière ou irrégulière.


1)



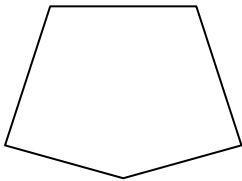
2)




3)



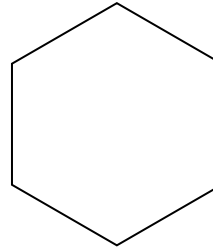
4)



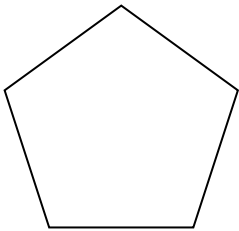
5)



6)



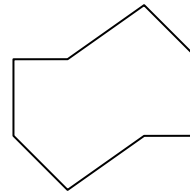
7)



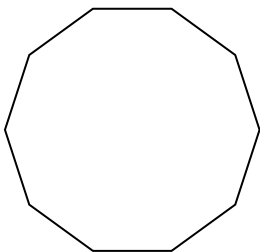
8)




9)




10)



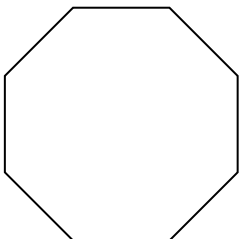
11)



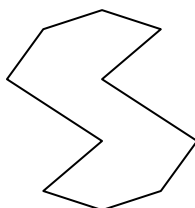
12)



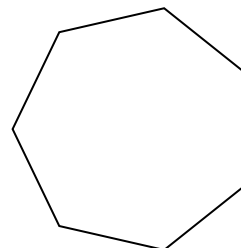
13)



14)



15)



Réponses

1. régulière

2. régulière

3. régulière

4. irrégulière

5. irrégulière

6. régulière

7. régulière

8. irrégulière

9. irrégulière

10. régulière

11. irrégulière

12. irrégulière

13. régulière

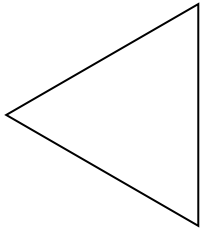
14. irrégulière

15. régulière

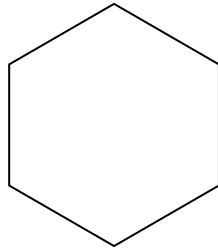


Déterminer si la figure est régulière ou irrégulière.


1)



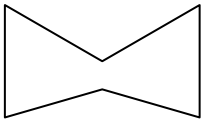
2)




3)



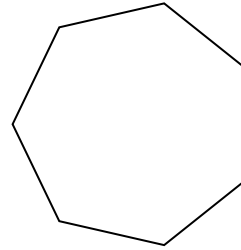
4)



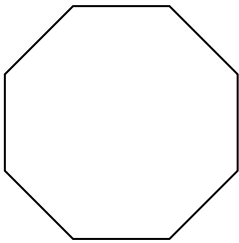
5)




6)



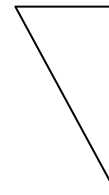
7)



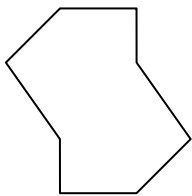
8)



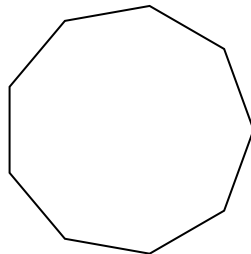
9)



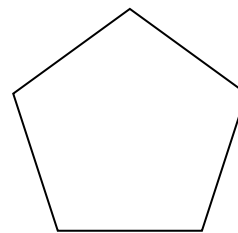
10)




11)




12)



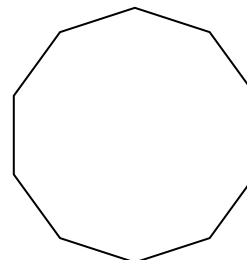
13)



14)



15)



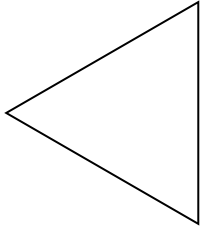
Réponses

- 1. _____
- 2. _____
- 3. _____
- 4. _____
- 5. _____
- 6. _____
- 7. _____
- 8. _____
- 9. _____
- 10. _____
- 11. _____
- 12. _____
- 13. _____
- 14. _____
- 15. _____

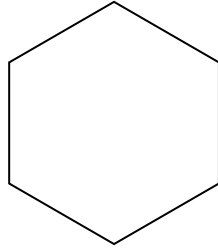


Déterminer si la figure est régulière ou irrégulière.


1)



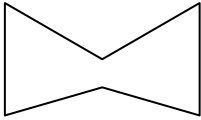
2)




3)



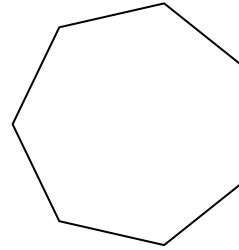
4)



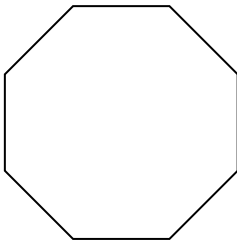
5)




6)



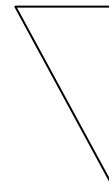
7)



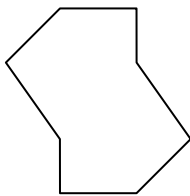
8)



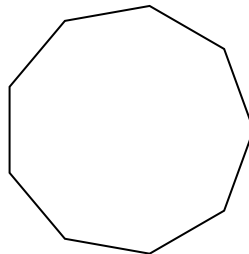
9)



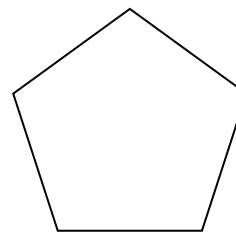
10)




11)




12)



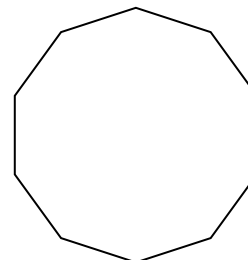
13)



14)



15)



Réponses

1. régulière

2. régulière

3. irrégulière

4. irrégulière

5. irrégulière

6. régulière

7. régulière

8. régulière

9. irrégulière

10. irrégulière

11. régulière

12. régulière

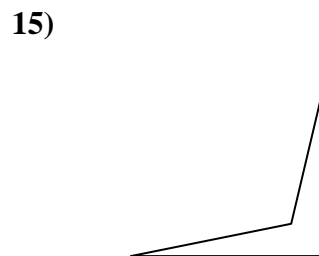
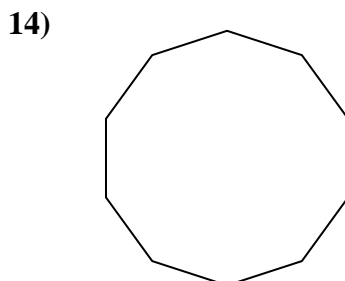
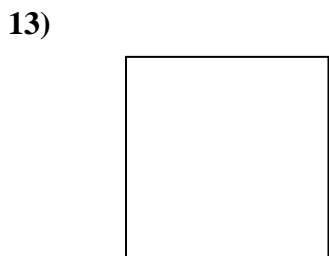
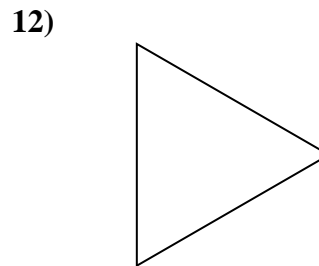
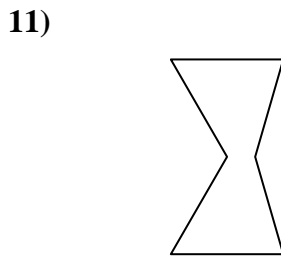
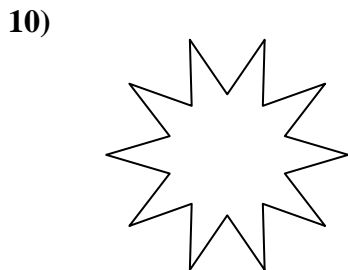
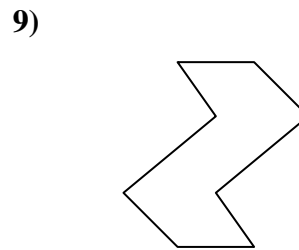
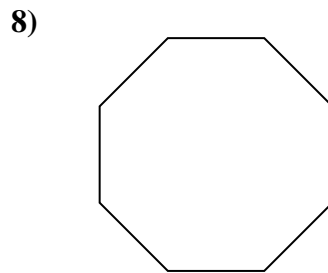
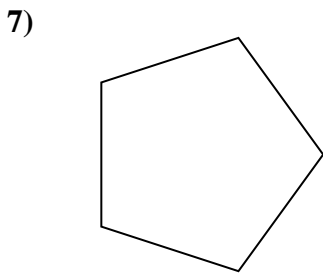
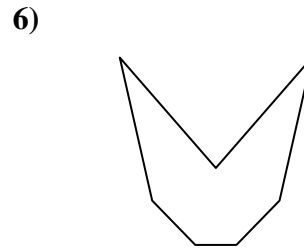
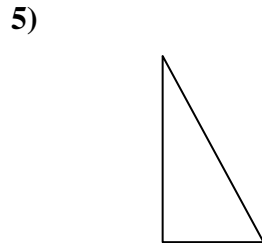
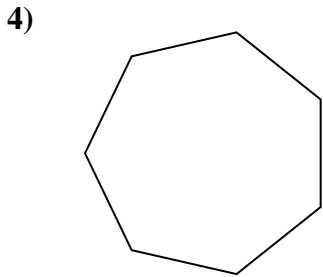
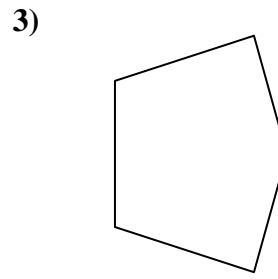
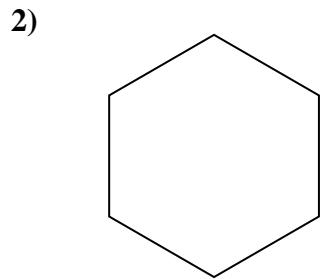
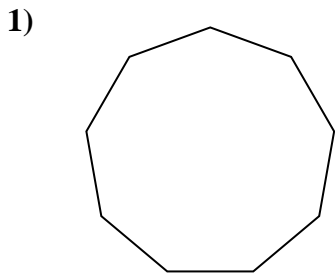
13. irrégulière

14. irrégulière

15. régulière



Déterminer si la figure est régulière ou irrégulière.

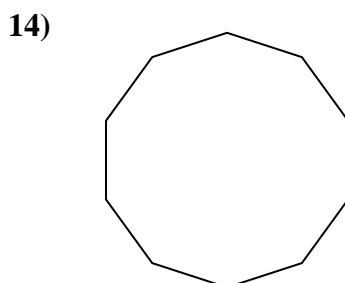
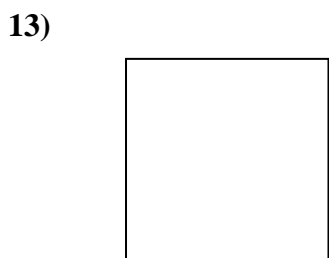
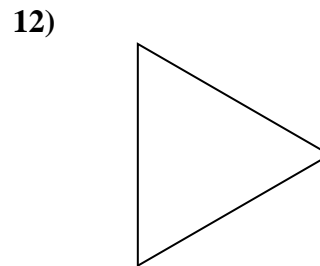
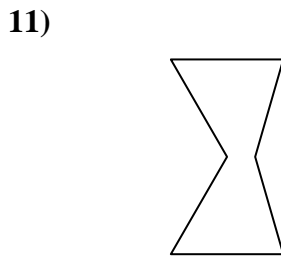
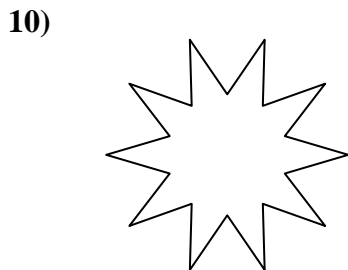
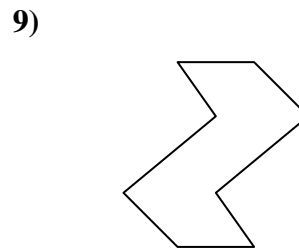
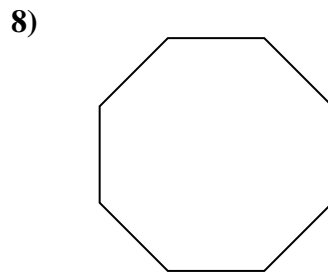
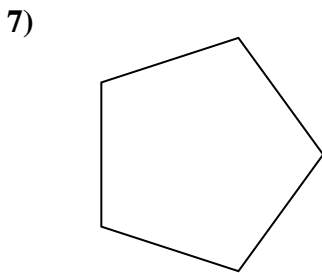
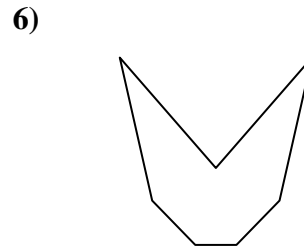
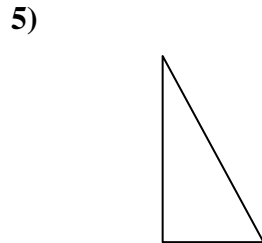
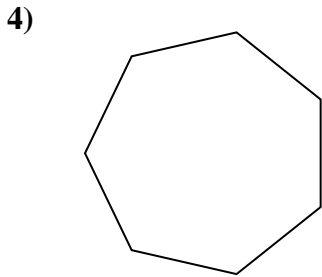
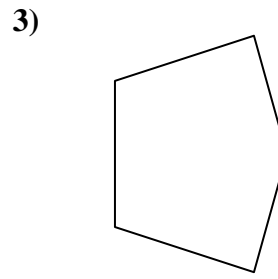
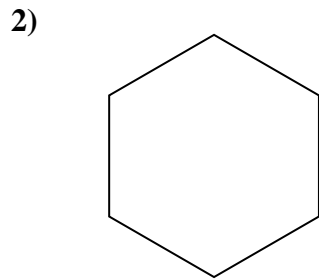
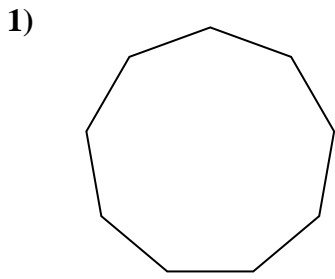


Réponses

1. _____
2. _____
3. _____
4. _____
5. _____
6. _____
7. _____
8. _____
9. _____
10. _____
11. _____
12. _____
13. _____
14. _____
15. _____



Déterminer si la figure est régulière ou irrégulière.



Réponses

1. régulière

2. régulière

3. irrégulière

4. régulière

5. irrégulière

6. irrégulière

7. régulière

8. régulière

9. irrégulière

10. irrégulière

11. irrégulière

12. régulière

13. régulière

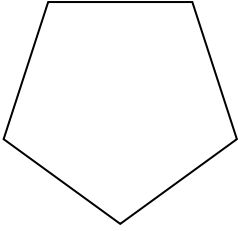
14. régulière

15. irrégulière

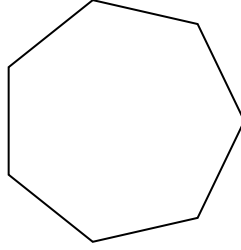


Déterminer si la figure est régulière ou irrégulière.

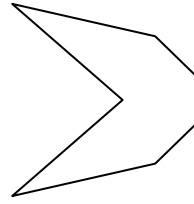
1)




2)



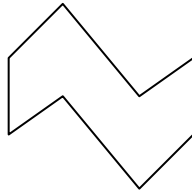
3)



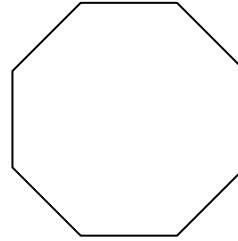
4)



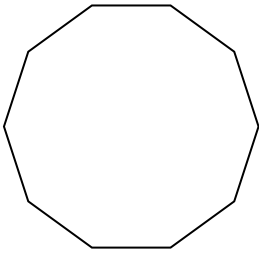
5)



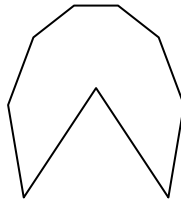
6)



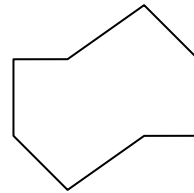
7)



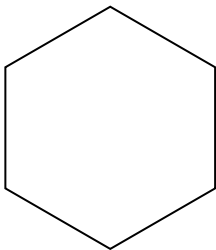
8)



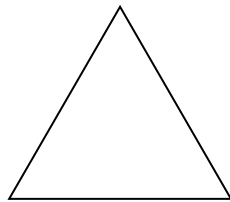
9)



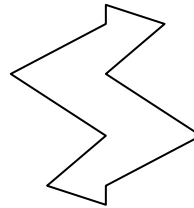
10)




11)



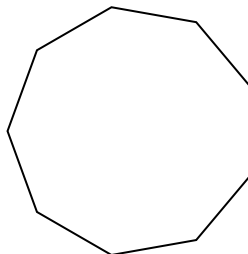
12)




13)



14)



15)



Réponses

1. _____

2. _____

3. _____

4. _____

5. _____

6. _____

7. _____

8. _____

9. _____

10. _____

11. _____

12. _____


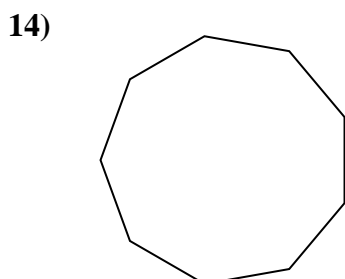
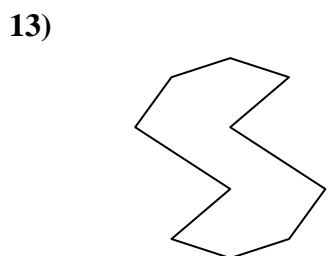
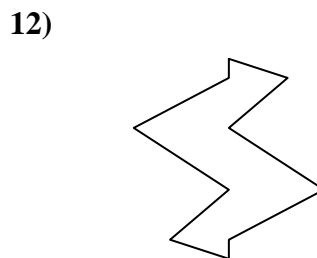
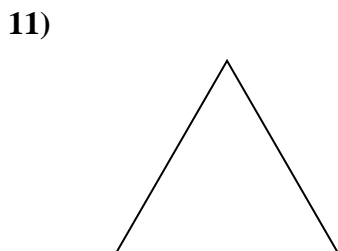
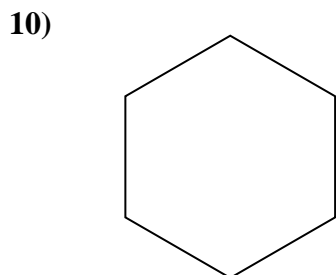
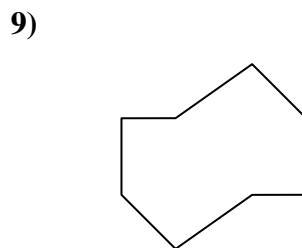
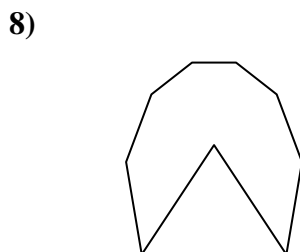
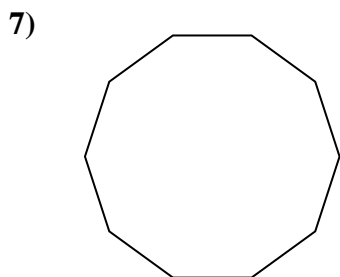
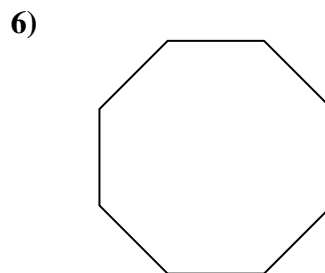
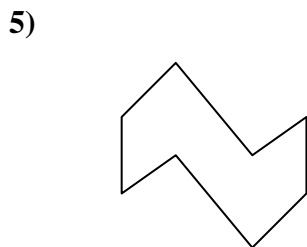
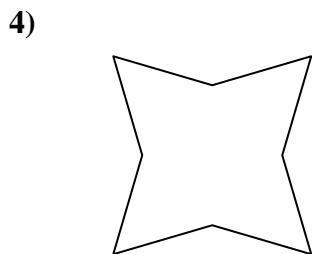
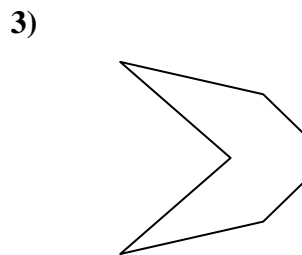
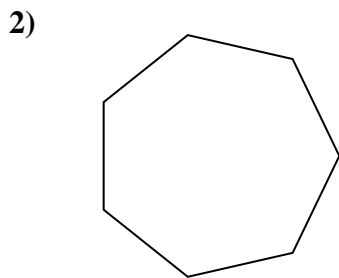
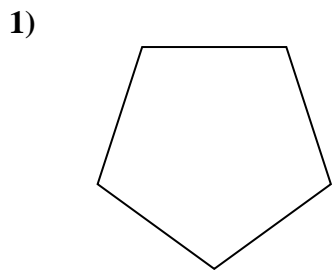
13. _____

14. _____

15. _____



Déterminer si la figure est régulière ou irrégulière.



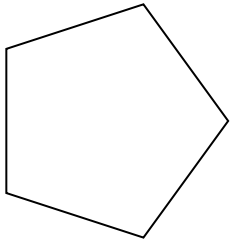
Réponses

1. régulière
2. régulière
3. irrégulière
4. irrégulière
5. irrégulière
6. régulière
7. régulière
8. irrégulière
9. irrégulière
10. régulière
11. régulière
12. irrégulière
13. irrégulière
14. régulière
15. irrégulière

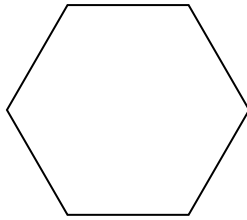


Déterminer si la figure est régulière ou irrégulière.

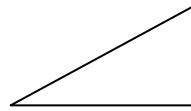
1)



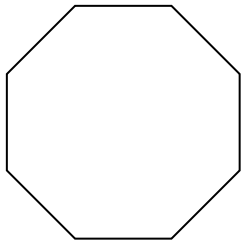
2)



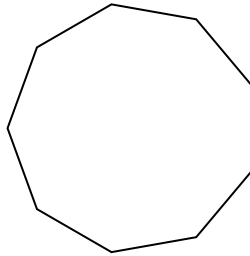
3)



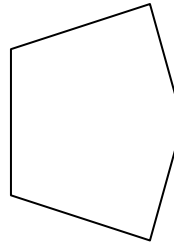
4)



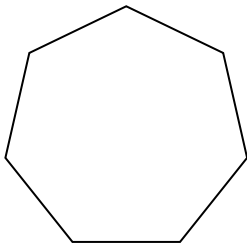
5)



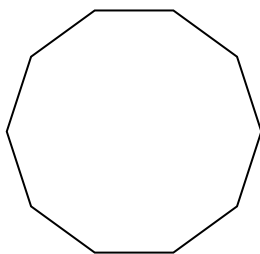
6)



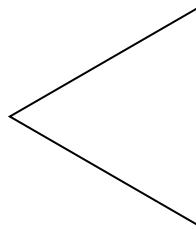
7)




8)




9)



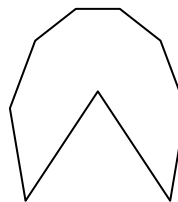
10)




11)




12)



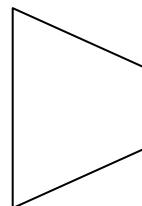
13)



14)



15)



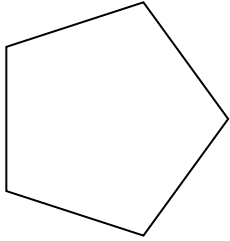
Réponses

- 1. _____
- 2. _____
- 3. _____
- 4. _____
- 5. _____
- 6. _____
- 7. _____
- 8. _____
- 9. _____
- 10. _____
- 11. _____
- 12. _____
- 13. _____
- 14. _____
- 15. _____

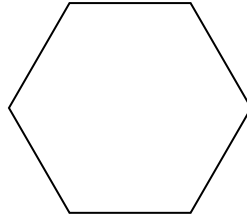


Déterminer si la figure est régulière ou irrégulière.

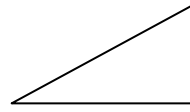
1)



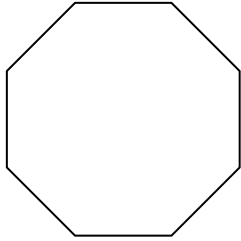
2)



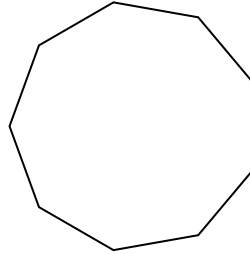
3)



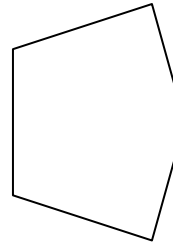
4)



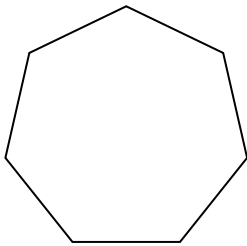
5)



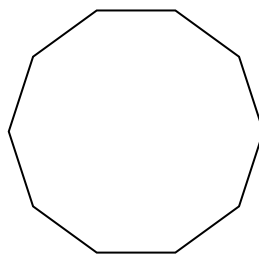
6)



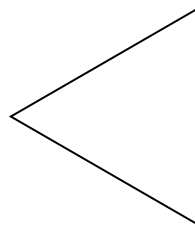
7)




8)




9)



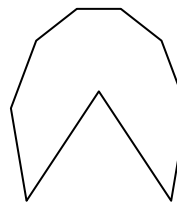
10)




11)




12)



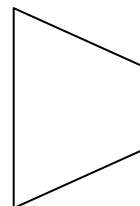
13)



14)



15)



Réponses

1. régulière

2. régulière

3. irrégulière

4. régulière

5. régulière

6. irrégulière

7. régulière

8. régulière

9. régulière

10. irrégulière

11. régulière

12. irrégulière

13. irrégulière

14. irrégulière

15. irrégulière