


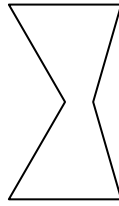


Déterminer si la figure est régulière ou irrégulière.


1)



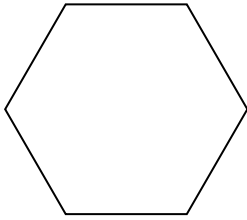
2)



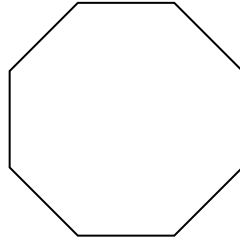
3)




4)



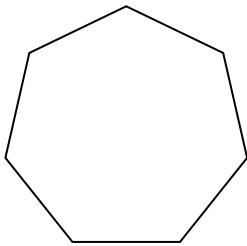
5)



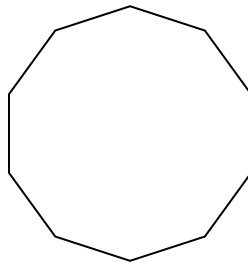
6)




7)




8)



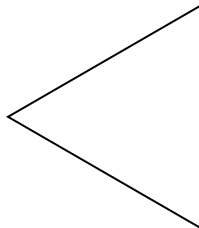
9)



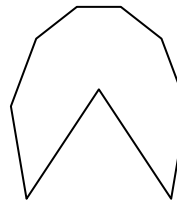
10)



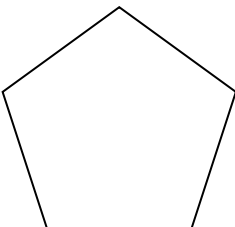
11)



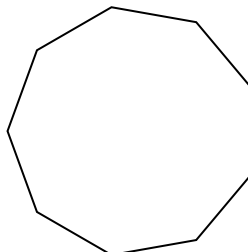
12)




13)



14)



15)



**Réponses**

1. \_\_\_\_\_

2. \_\_\_\_\_

3. \_\_\_\_\_

4. \_\_\_\_\_

5. \_\_\_\_\_

6. \_\_\_\_\_

7. \_\_\_\_\_

8. \_\_\_\_\_

9. \_\_\_\_\_

10. \_\_\_\_\_

11. \_\_\_\_\_

12. \_\_\_\_\_


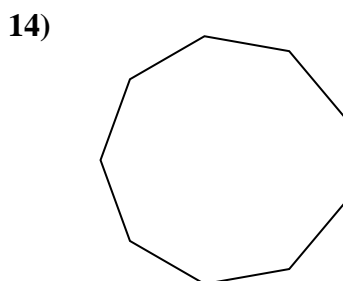
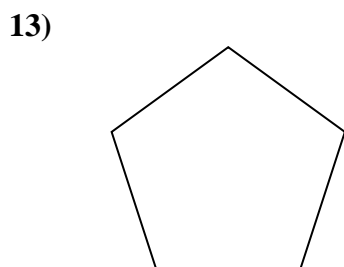
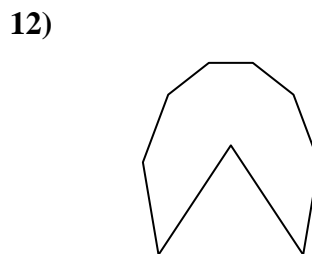
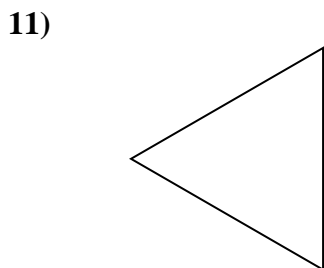
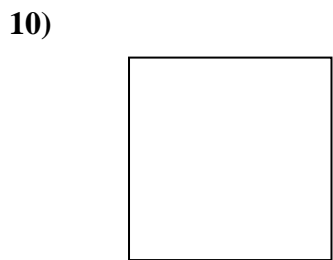
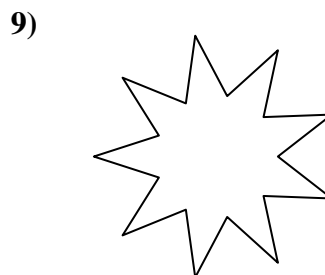
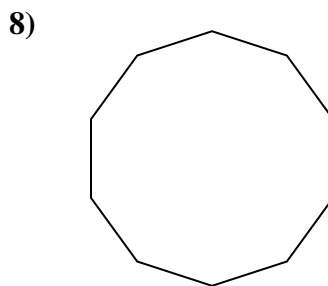
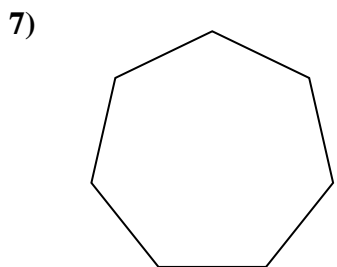
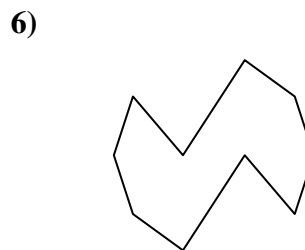
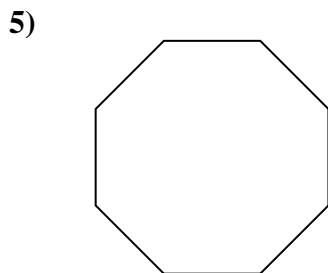
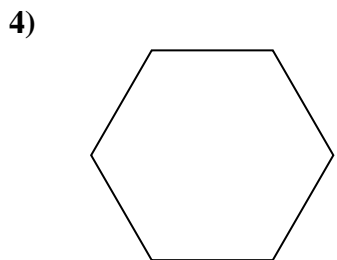
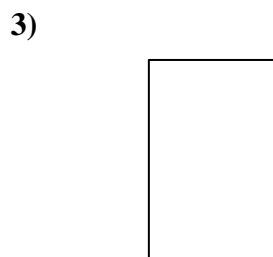
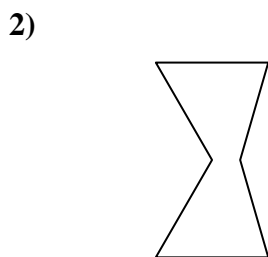

13. \_\_\_\_\_

14. \_\_\_\_\_

15. \_\_\_\_\_



Déterminer si la figure est régulière ou irrégulière.



**Réponses**

1. irrégulière
2. irrégulière
3. irrégulière
4. régulière
5. régulière
6. irrégulière
7. régulière
8. régulière
9. irrégulière
10. régulière
11. régulière
12. irrégulière
13. régulière
14. régulière
15. irrégulière