




Déterminez si la figure a effectué une translation, une rotation ou une réflexion.

**Réponses**


1)



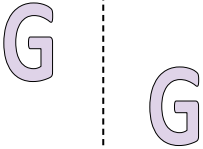
2)



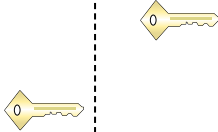
3)



4)



5)




6)



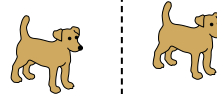
7)



8)



9)



10)



11)



12)



13)



14)



15)



1. \_\_\_\_\_
2. \_\_\_\_\_
3. \_\_\_\_\_
4. \_\_\_\_\_
5. \_\_\_\_\_
6. \_\_\_\_\_
7. \_\_\_\_\_
8. \_\_\_\_\_
9. \_\_\_\_\_
10. \_\_\_\_\_
11. \_\_\_\_\_
12. \_\_\_\_\_
13. \_\_\_\_\_
14. \_\_\_\_\_
15. \_\_\_\_\_



Déterminez si la figure a effectué une translation, une rotation ou une réflexion.


1)



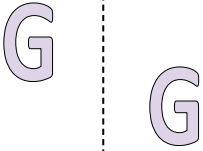
2)



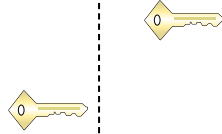
3)



4)



5)



6)



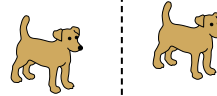
7)



8)



9)



10)



11)



12)



13)



14)



15)



**Réponses**

1. **réflexion**

2. **translation**

3. **rotation**

4. **translation**

5. **translation**

6. **rotation**

7. **réflexion**

8. **réflexion**

9. **translation**

10. **translation**

11. **translation**

12. **réflexion**

13. **rotation**

14. **rotation**

15. **rotation**