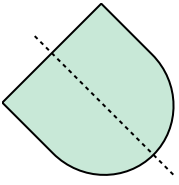


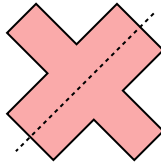


Déterminez si la droite qui parcourt la figure est un axe de symétrie.

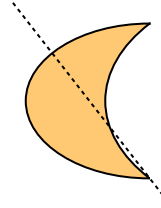
Ex)



1)



2)



Réponses

Ex. oui

1. _____

2. _____

3. _____

4. _____

5. _____

6. _____

7. _____

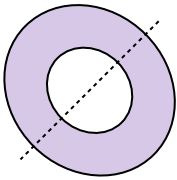
8. _____

9. _____

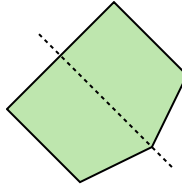
10. _____

11. _____

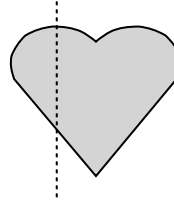
3)



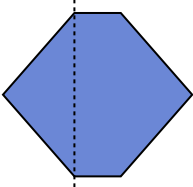
4)



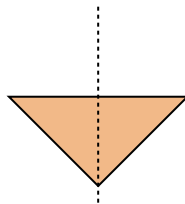
5)



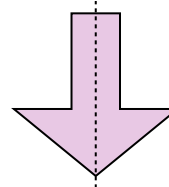
6)



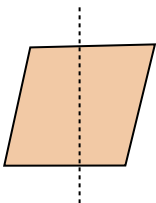
7)



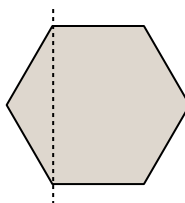
8)



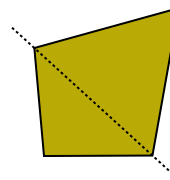
9)



10)



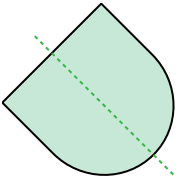
11)



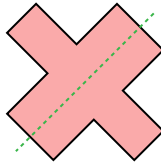


Déterminez si la droite qui parcourt la figure est un axe de symétrie.

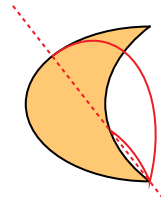
Ex)



1)



2)



Réponses

Ex. oui

1. oui

2. no

3. oui

4. oui

5. no

6. no

7. oui

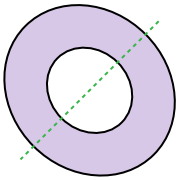
8. oui

9. no

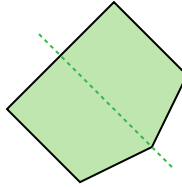
10. no

11. no

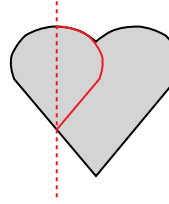
3)



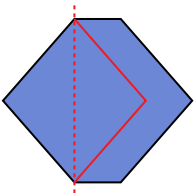
4)



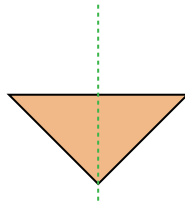
5)



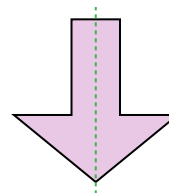
6)



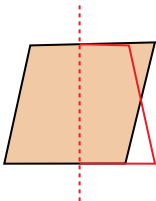
7)



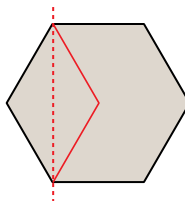
8)



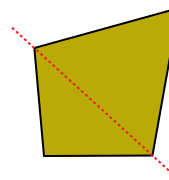
9)



10)



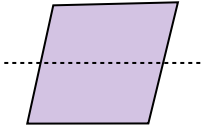
11)



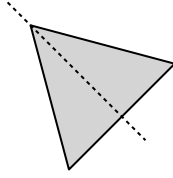


Déterminez si la droite qui parcourt la figure est un axe de symétrie.

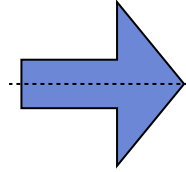
Ex)



1)



2)



Réponses

Ex. **no**

1. _____

2. _____

3. _____

4. _____

5. _____

6. _____

7. _____

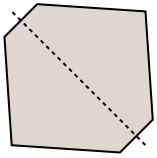
8. _____

9. _____

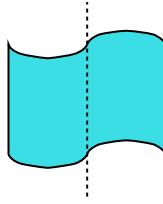
10. _____

11. _____


3)



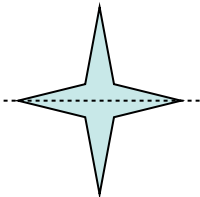
4)



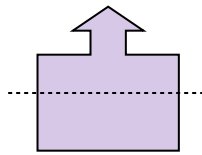
5)



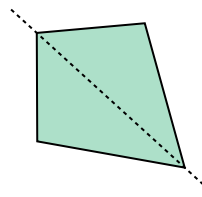
6)



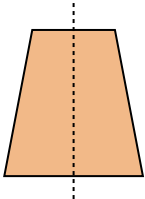
7)



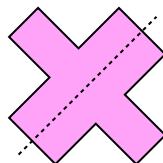
8)



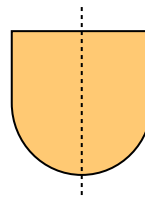
9)



10)



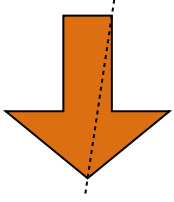
11)



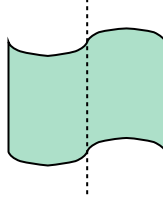


Déterminez si la droite qui parcourt la figure est un axe de symétrie.

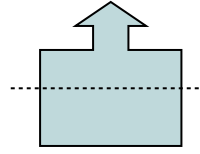
Ex)



1)



2)



Réponses

Ex. no

1. _____

2. _____

3. _____

4. _____

5. _____

6. _____

7. _____

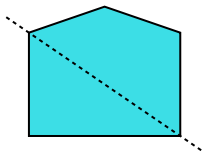
8. _____

9. _____

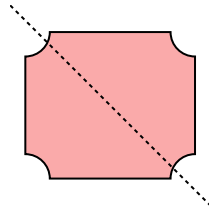
10. _____

11. _____

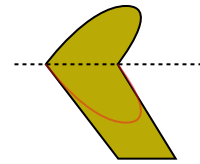
3)



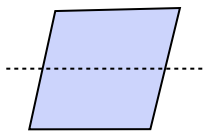
4)



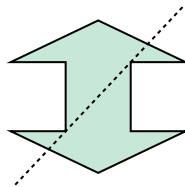
5)



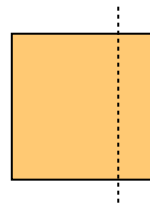
6)



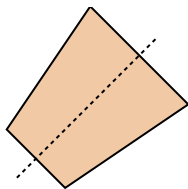
7)



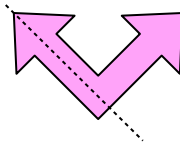
8)



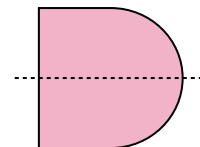
9)



10)



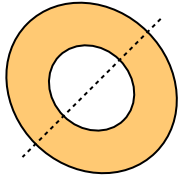
11)



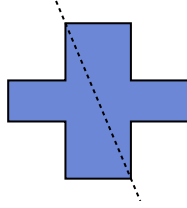


Déterminez si la droite qui parcourt la figure est un axe de symétrie.

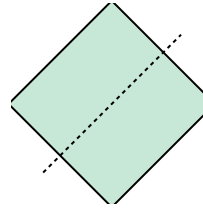
Ex)



1)



2)



Réponses

Ex. oui

1. _____

2. _____

3. _____

4. _____

5. _____

6. _____

7. _____

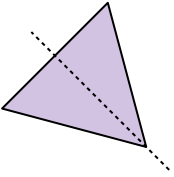
8. _____

9. _____

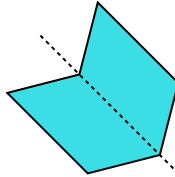
10. _____

11. _____

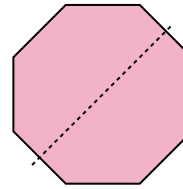
3)



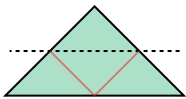
4)




5)



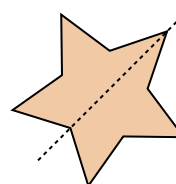
6)



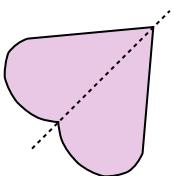
7)



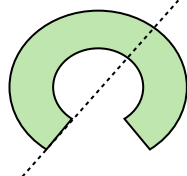
8)



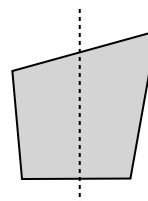
9)



10)



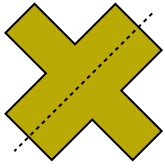
11)



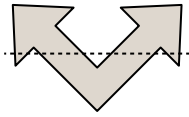


Déterminez si la droite qui parcourt la figure est un axe de symétrie.

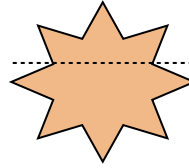
Ex)



1)



2)



Réponses

Ex. oui

1. _____

2. _____

3. _____

4. _____

5. _____

6. _____

7. _____

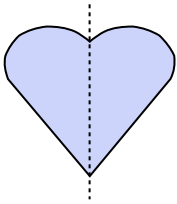
8. _____

9. _____

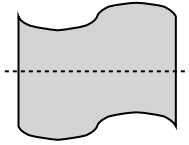
10. _____

11. _____

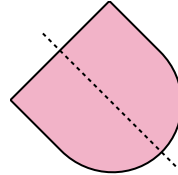
3)



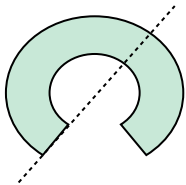
4)



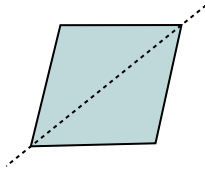
5)



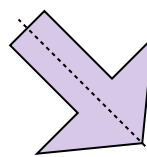
6)



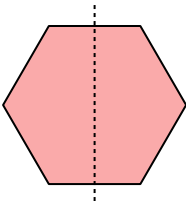
7)



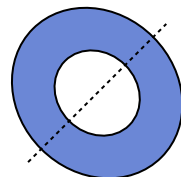
8)



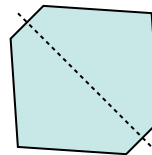
9)



10)




11)



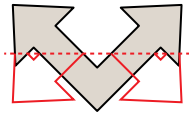


Déterminez si la droite qui parcourt la figure est un axe de symétrie.

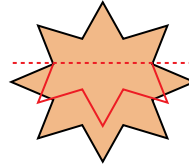
Ex)



1)



2)



Réponses

Ex. oui

1. no

2. no

3. oui

4. no

5. oui

6. no

7. oui

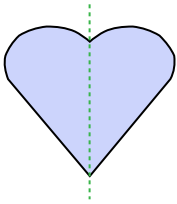
8. oui

9. oui

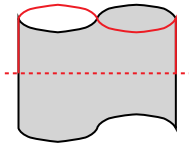
10. oui

11. oui

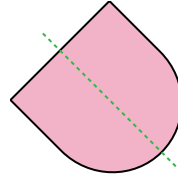
3)



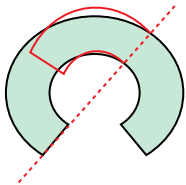
4)



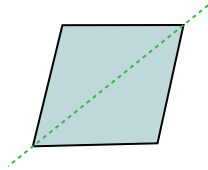
5)



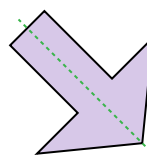
6)



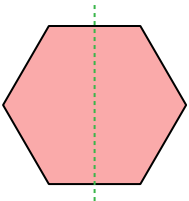
7)



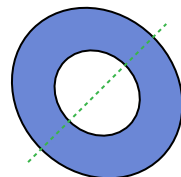
8)



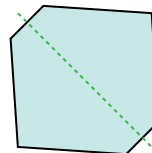
9)



10)



11)

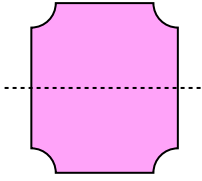




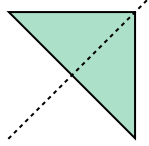
Déterminez si la droite qui parcourt la figure est un axe de symétrie.

Réponses

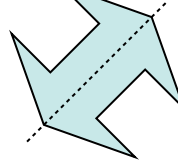
Ex)



1)



2)



Ex. **oui**

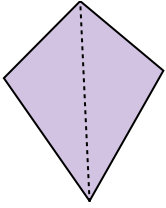
1. _____

2. _____

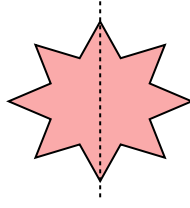
3. _____

4. _____

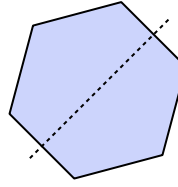
3)



4)



5)



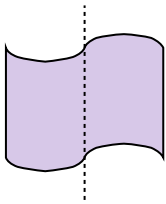
5. _____

6. _____

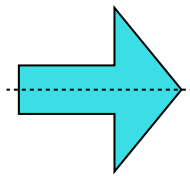
7. _____

8. _____

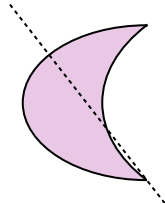
6)



7)



8)




9. _____

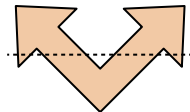
10. _____

11. _____

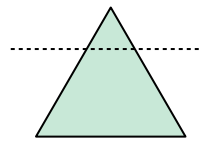
9)



10)



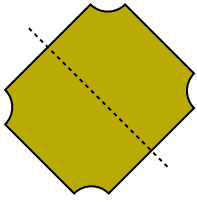
11)



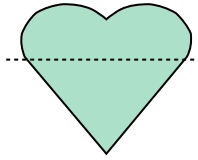


Déterminez si la droite qui parcourt la figure est un axe de symétrie.

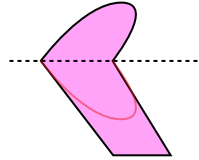
Ex)



1)



2)



Réponses

Ex. **oui**

1. _____

2. _____

3. _____

4. _____

5. _____

6. _____

7. _____

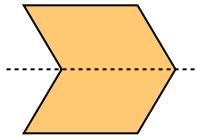
8. _____

9. _____


10. _____

11. _____

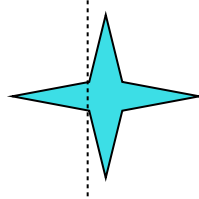
3)



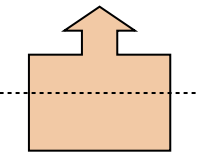
4)



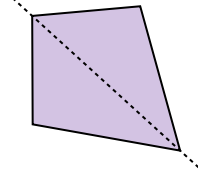
5)



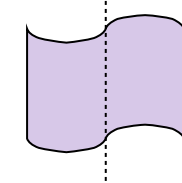
6)



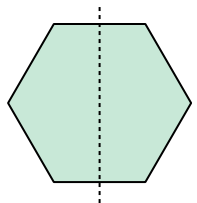
7)



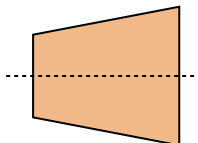
8)



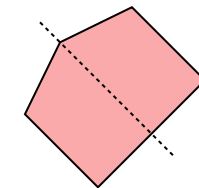
9)



10)



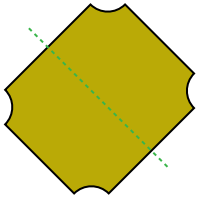
11)



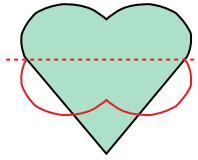


Déterminez si la droite qui parcourt la figure est un axe de symétrie.

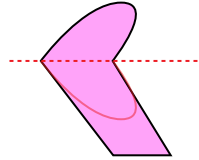
Ex)



1)



2)



Réponses

Ex. oui

1. no

2. no

3. oui

4. no

5. no

6. no

7. oui

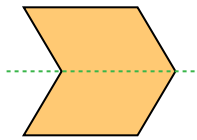
8. no

9. oui

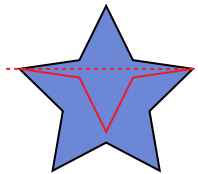
10. oui

11. oui

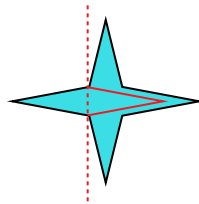
3)



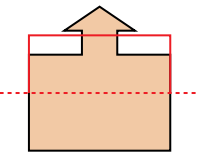
4)



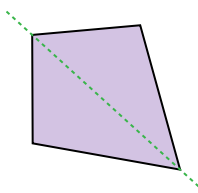
5)



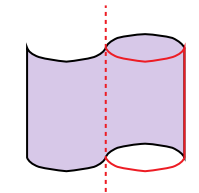
6)



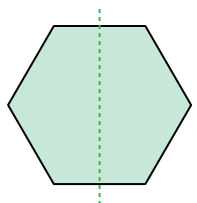
7)



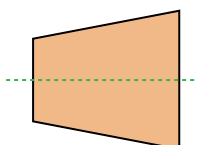
8)



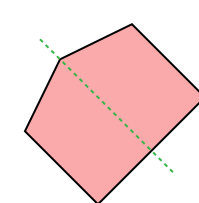
9)



10)



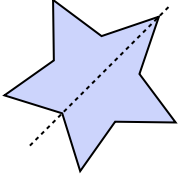
11)



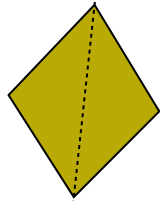


Déterminez si la droite qui parcourt la figure est un axe de symétrie.

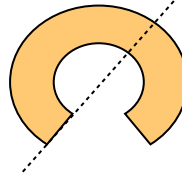
Ex)



1)



2)



Réponses

Ex. oui

1. _____

2. _____

3. _____

4. _____

5. _____

6. _____

7. _____

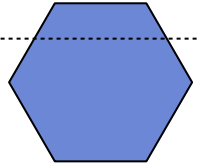
8. _____

9. _____

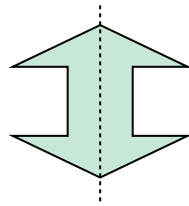
10. _____

11. _____

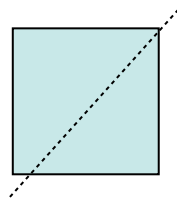
3)



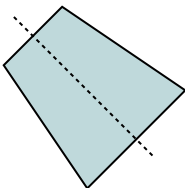
4)



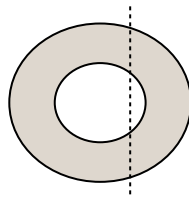
5)



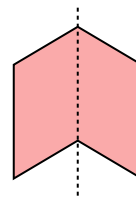
6)



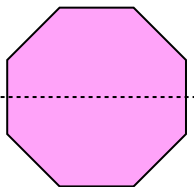
7)



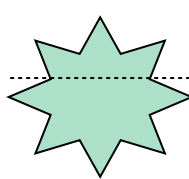
8)



9)



10)



11)

