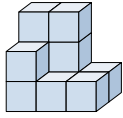




Résoudre chaque problème.

Réponses

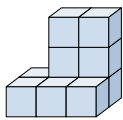
1) If you were looking at the 3d shape from the right side what would you see?



A. B. C. D.

1. _____

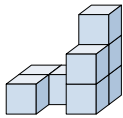
2) If you were looking at the 3d shape from the back what would you see?



A. B. C. D.

2. _____

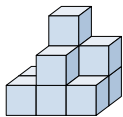
3) If you were looking at the 3d shape from the back what would you see?



A. B. C. D.

3. _____

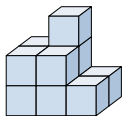
4) If you were looking at the 3d shape from the back what would you see?



A. B. C. D.

4. _____

5) If you were looking at the 3d shape from above what would you see?



A. B. C. D.

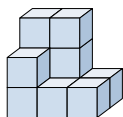
5. _____



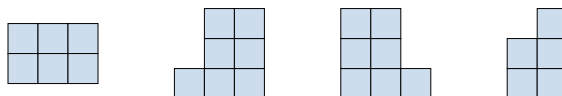
Résoudre chaque problème.

Réponses

1) If you were looking at the 3d shape from the right side what would you see?

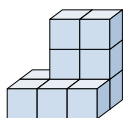


A. B. C. D.

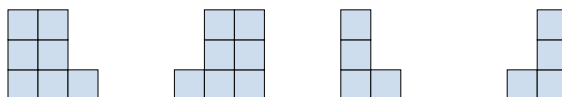


1. **D**

2) If you were looking at the 3d shape from the back what would you see?

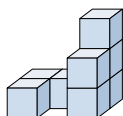


A. B. C. D.

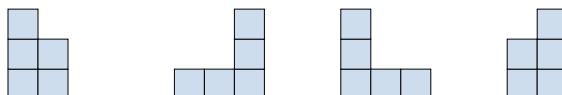


2. **A**

3) If you were looking at the 3d shape from the back what would you see?

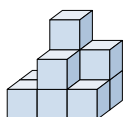


A. B. C. D.

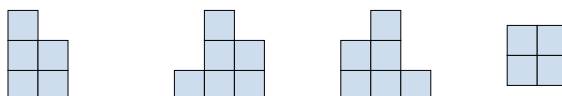


3. **C**

4) If you were looking at the 3d shape from the back what would you see?

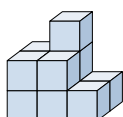


A. B. C. D.

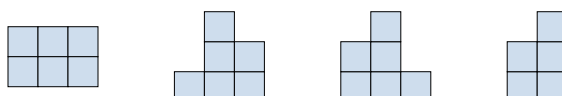


4. **C**

5) If you were looking at the 3d shape from above what would you see?



A. B. C. D.



5. **A**