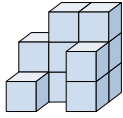




Résoudre chaque problème.

Réponses

1) If you were looking at the 3d shape from the back what would you see?



- A.
- B.
- C.
- D.

1. _____

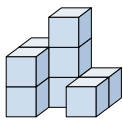
2. _____

3. _____

4. _____

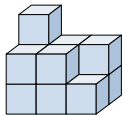
5. _____

2) If you were looking at the 3d shape from the back what would you see?



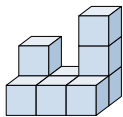
- A.
- B.
- C.
- D.

3) If you were looking at the 3d shape from the back what would you see?



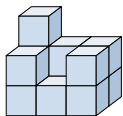
- A.
- B.
- C.
- D.

4) If you were looking at the 3d shape from the left side what would you see?



- A.
- B.
- C.
- D.

5) If you were looking at the 3d shape from the back what would you see?



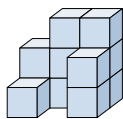
- A.
- B.
- C.
- D.



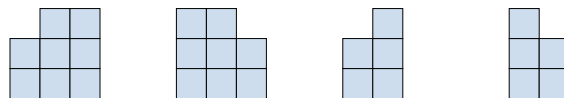
Résoudre chaque problème.

Réponses

1) If you were looking at the 3d shape from the back what would you see?

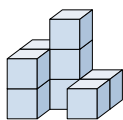


A. B. C. D.

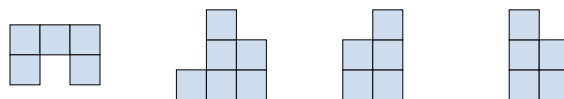


1. **B**

2) If you were looking at the 3d shape from the back what would you see?

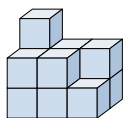


A. B. C. D.

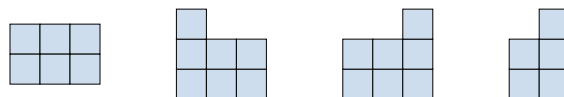


2. **B**

3) If you were looking at the 3d shape from the back what would you see?

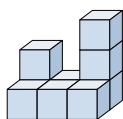


A. B. C. D.



3. **C**

4) If you were looking at the 3d shape from the left side what would you see?

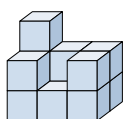


A. B. C. D.



4. **B**

5) If you were looking at the 3d shape from the back what would you see?



A. B. C. D.



5. **C**