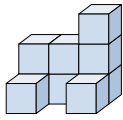








Résoudre chaque problème.

Réponses

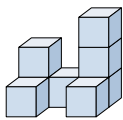
1) If you were looking at the 3d shape from above what would you see?

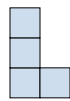
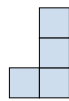
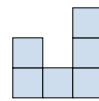
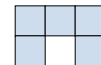


- A.  B.  C.  D. 

1. _____

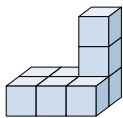
2) If you were looking at the 3d shape from the left side what would you see?







- A.  B.  C.  D. 

2. _____

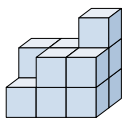
3) If you were looking at the 3d shape from above what would you see?

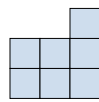
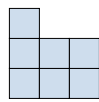

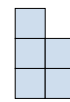


- A.  B.  C.  D. 

3. _____

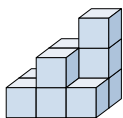
4) If you were looking at the 3d shape from the left side what would you see?







- A.  B.  C.  D. 

4. _____

5) If you were looking at the 3d shape from the right side what would you see?



- A.  B.  C.  D. 

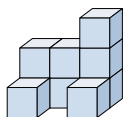
5. _____



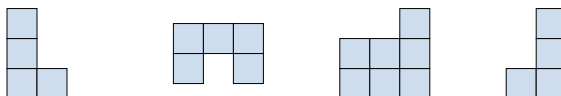
Résoudre chaque problème.

Réponses

1) If you were looking at the 3d shape from above what would you see?

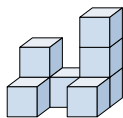


A. B. C. D.



1. **B**

2) If you were looking at the 3d shape from the left side what would you see?

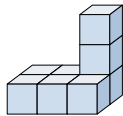


A. B. C. D.

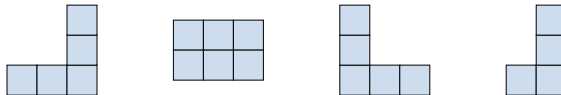


2. **A**

3) If you were looking at the 3d shape from above what would you see?

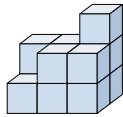


A. B. C. D.

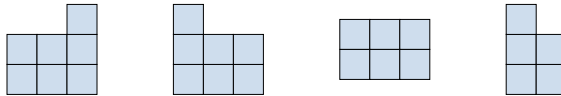


3. **B**

4) If you were looking at the 3d shape from the left side what would you see?

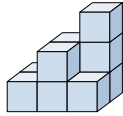


A. B. C. D.

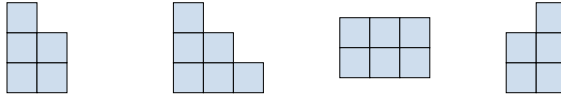


4. **D**

5) If you were looking at the 3d shape from the right side what would you see?



A. B. C. D.



5. **D**