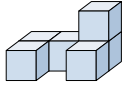








Résoudre chaque problème.

Réponses

1) If you were looking at the 3d shape from the right side what would you see?



- A.  B.  C.  D. 

1. _____

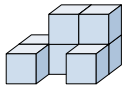
2. _____





3. _____

4. _____

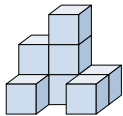
5. _____





2) If you were looking at the 3d shape from the right side what would you see?



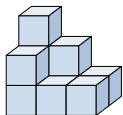
- A.  B.  C.  D. 





3) If you were looking at the 3d shape from the back what would you see?



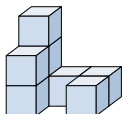
- A.  B.  C.  D. 





4) If you were looking at the 3d shape from above what would you see?



- A.  B.  C.  D. 

5) If you were looking at the 3d shape from the right side what would you see?



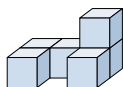
- A.  B.  C.  D. 



Résoudre chaque problème.

Réponses

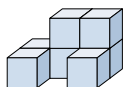
1) If you were looking at the 3d shape from the right side what would you see?



- A.
- B.
- C.
- D.

1. **A**

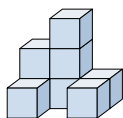
2) If you were looking at the 3d shape from the right side what would you see?



- A.
- B.
- C.
- D.

2. **C**

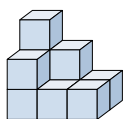
3) If you were looking at the 3d shape from the back what would you see?



- A.
- B.
- C.
- D.

3. **D**

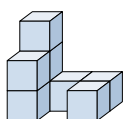
4) If you were looking at the 3d shape from above what would you see?



- A.
- B.
- C.
- D.

4. **B**

5) If you were looking at the 3d shape from the right side what would you see?



- A.
- B.
- C.
- D.

5. **B**