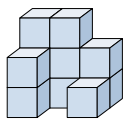




Résoudre chaque problème.

Réponses

1) If you were looking at the 3d shape from the right side what would you see?



- A.
- B.
- C.
- D.

1. _____

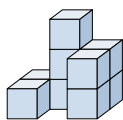
2. _____

3. _____

4. _____

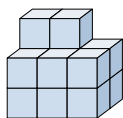
5. _____

2) If you were looking at the 3d shape from the right side what would you see?



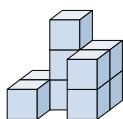
- A.
- B.
- C.
- D.

3) If you were looking at the 3d shape from above what would you see?



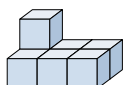
- A.
- B.
- C.
- D.

4) If you were looking at the 3d shape from the left side what would you see?



- A.
- B.
- C.
- D.

5) If you were looking at the 3d shape from the left side what would you see?



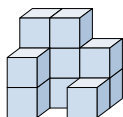
- A.
- B.
- C.
- D.



Résoudre chaque problème.

Réponses

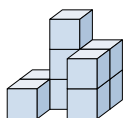
1) If you were looking at the 3d shape from the right side what would you see?



- A.
- B.
- C.
- D.

1. **B**

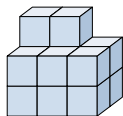
2) If you were looking at the 3d shape from the right side what would you see?



- A.
- B.
- C.
- D.

2. **C**

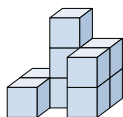
3) If you were looking at the 3d shape from above what would you see?



- A.
- B.
- C.
- D.

3. **B**

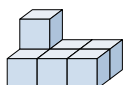
4) If you were looking at the 3d shape from the left side what would you see?



- A.
- B.
- C.
- D.

4. **D**

5) If you were looking at the 3d shape from the left side what would you see?



- A.
- B.
- C.
- D.

5. **B**