



Associez chaque tableau au graphique approprié.

Réponses

1)

| Nom | Canettes recyclées |
|--------|--------------------|
| Allen | |
| Beth | |
| Meule | |
| Andréa | |
| Vallée | |

2)

| Nom | Canettes recyclées |
|--------|--------------------|
| Allen | |
| Beth | |
| Meule | |
| Andréa | |
| Vallée | |

3)

| Nom | Canettes recyclées |
|--------|--------------------|
| Allen | |
| Beth | |
| Meule | |
| Andréa | |
| Vallée | |

4)

| Nom | Canettes recyclées |
|--------|--------------------|
| Allen | |
| Beth | |
| Meule | |
| Andréa | |
| Vallée | |

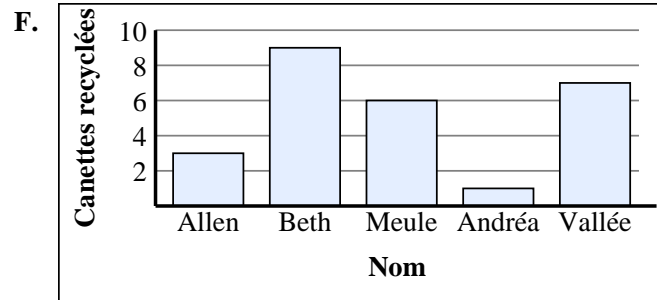
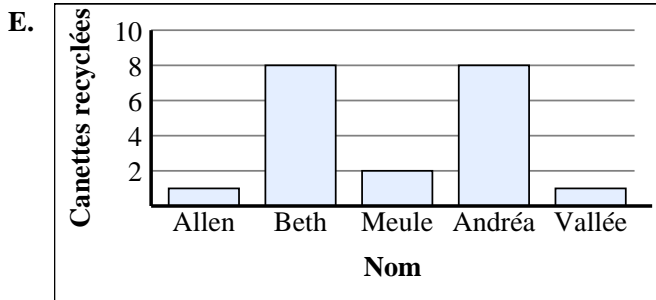
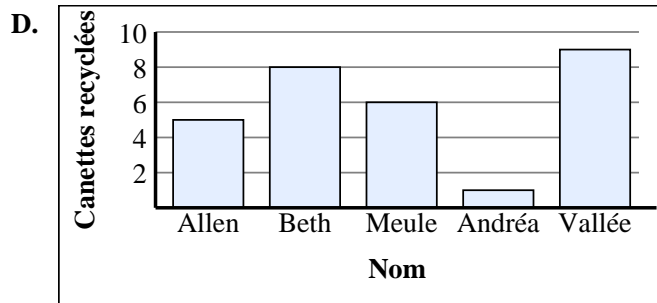
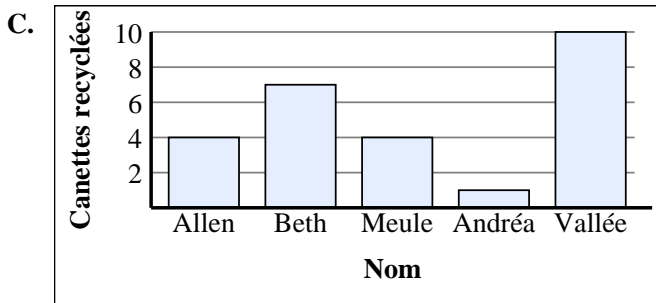
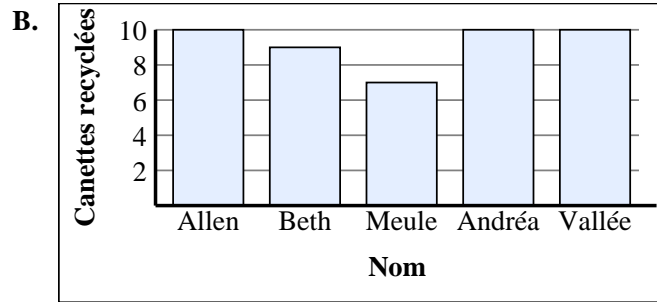
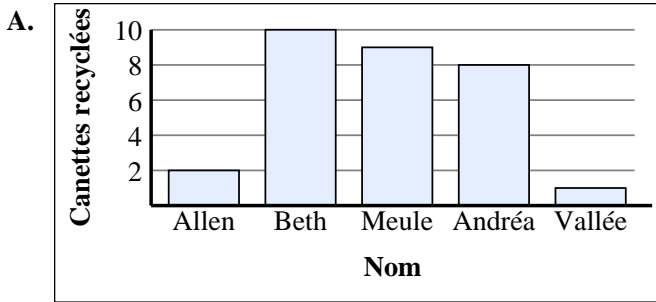
5)

| Nom | Canettes recyclées |
|--------|--------------------|
| Allen | |
| Beth | |
| Meule | |
| Andréa | |
| Vallée | |

6)

| Nom | Canettes recyclées |
|--------|--------------------|
| Allen | |
| Beth | |
| Meule | |
| Andréa | |
| Vallée | |

1. _____
2. _____
3. _____
4. _____
5. _____
6. _____





Associez chaque tableau au graphique approprié.

Réponses

1)

| Nom | Canettes recyclées |
|--------|--------------------|
| Allen | |
| Beth | |
| Meule | |
| Andréa | |
| Vallée | |

2)

| Nom | Canettes recyclées |
|--------|--------------------|
| Allen | |
| Beth | |
| Meule | |
| Andréa | |
| Vallée | |

3)

| Nom | Canettes recyclées |
|--------|--------------------|
| Allen | |
| Beth | |
| Meule | |
| Andréa | |
| Vallée | |

4)

| Nom | Canettes recyclées |
|--------|--------------------|
| Allen | |
| Beth | |
| Meule | |
| Andréa | |
| Vallée | |

5)

| Nom | Canettes recyclées |
|--------|--------------------|
| Allen | |
| Beth | |
| Meule | |
| Andréa | |
| Vallée | |

6)

| Nom | Canettes recyclées |
|--------|--------------------|
| Allen | |
| Beth | |
| Meule | |
| Andréa | |
| Vallée | |

1. **A**
2. **B**
3. **D**
4. **F**
5. **E**
6. **C**

