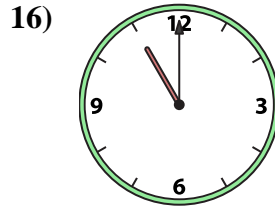
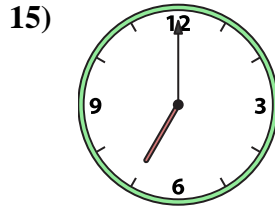
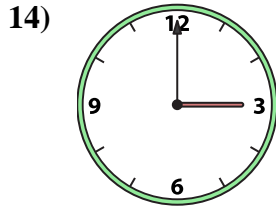
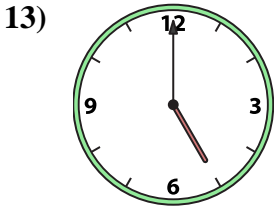
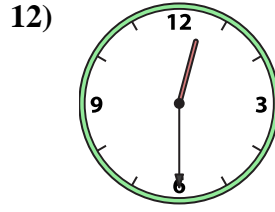
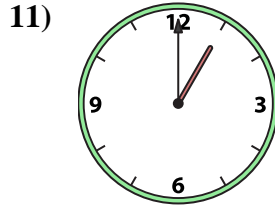
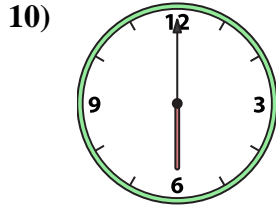
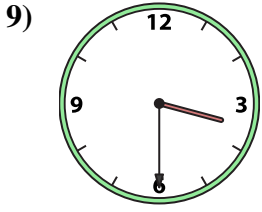
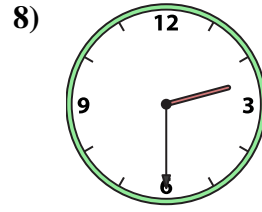
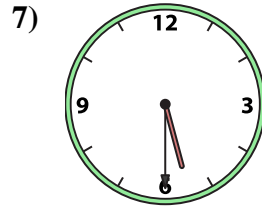
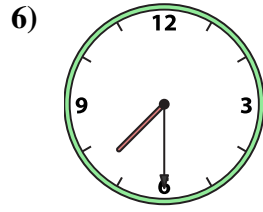
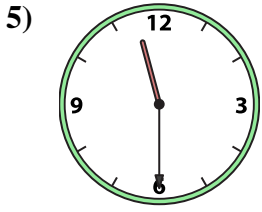
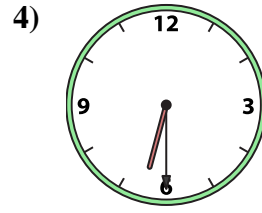
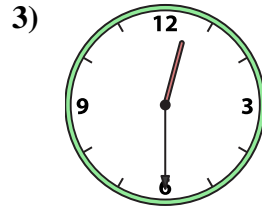
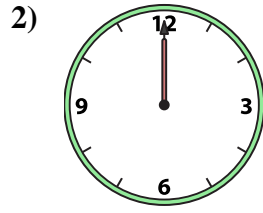
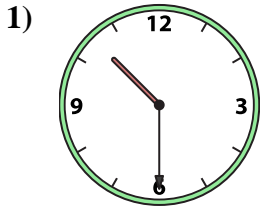




Faites correspondre l'horloge analogique à l'horloge numérique.

Réponses



1. _____
2. _____
3. _____
4. _____
5. _____
6. _____
7. _____
8. _____
9. _____
10. _____
11. _____
12. _____
13. _____
14. _____
15. _____
16. _____

A. 2:30

B. 10:30

C. 7:30

D. 6:00

E. 3:00

F. 5:30

G. 1:00

H. 5:00

I. 7:00

J. 12:30

K. 11:00

L. 6:30

M. 12:30

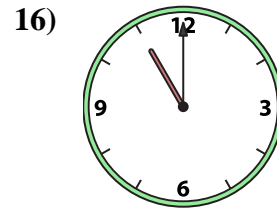
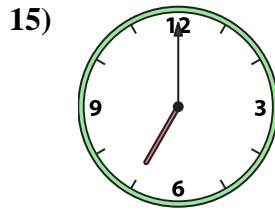
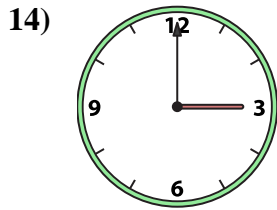
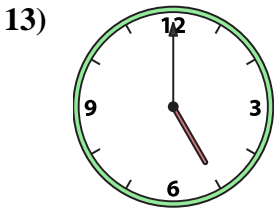
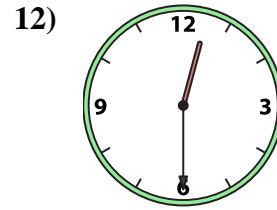
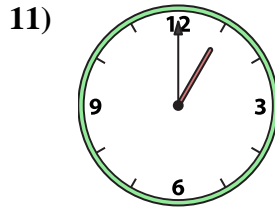
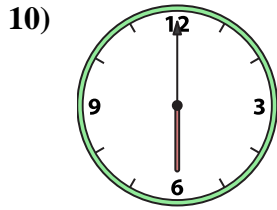
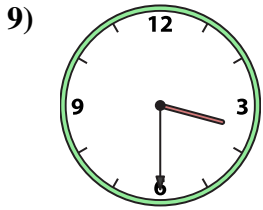
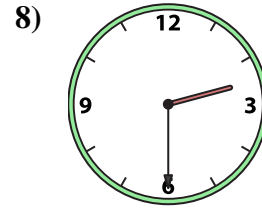
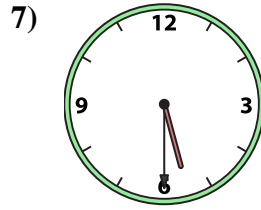
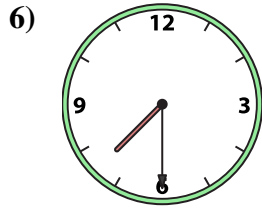
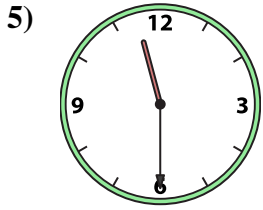
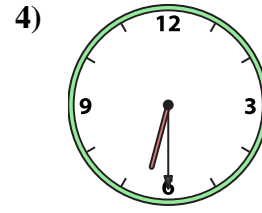
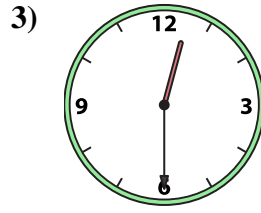
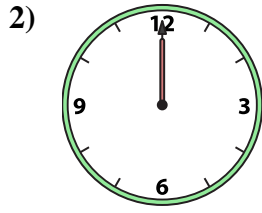
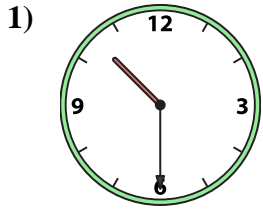
N. 11:30

O. 3:30

P. 12:00



Faites correspondre l'horloge analogique à l'horloge numérique.



A.

B.

C.

D.

E.

F.

G.

H.

I.

J.

K.

L.

M.

N.

O.

P.

Réponses

1. **B**

2. **P**

3. **J**

4. **L**

5. **N**

6. **C**

7. **F**

8. **A**

9. **O**

10. **D**

11. **G**

12. **M**

13. **H**

14. **E**

15. **I**

16. **K**