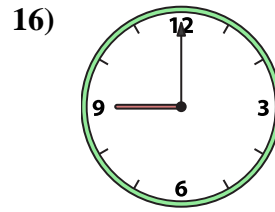
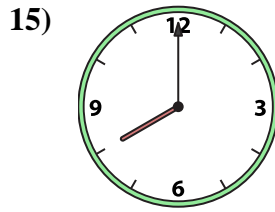
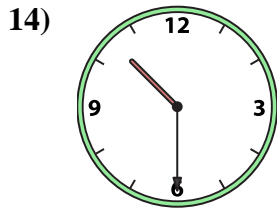
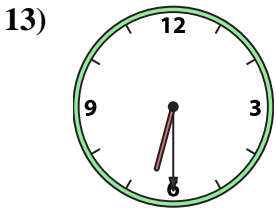
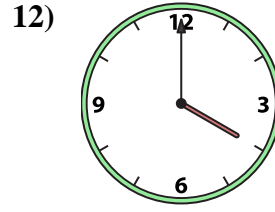
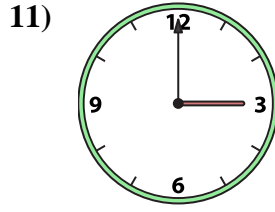
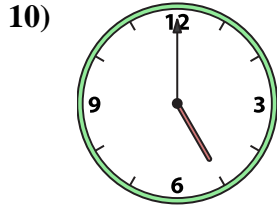
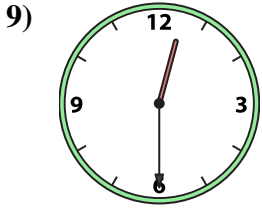
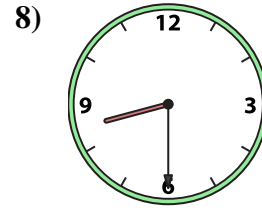
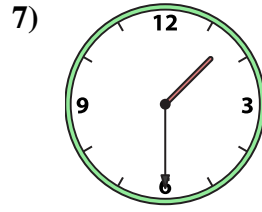
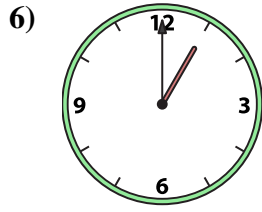
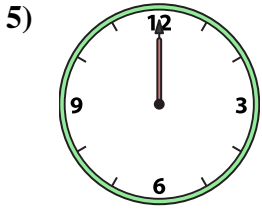
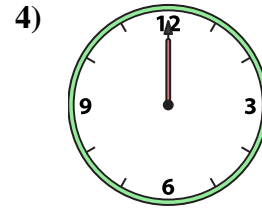
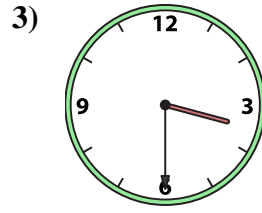
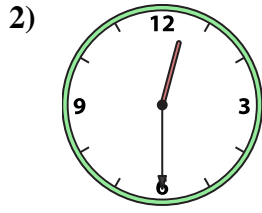





Faites correspondre l'horloge analogique à l'horloge numérique.

Réponses



1. _____

2. _____

3. _____

4. _____

5. _____

6. _____

7. _____

8. _____

9. _____

10. _____

11. _____

12. _____

13. _____

14. _____

15. _____

16. _____

A. 3:30

B. 9:00

C. 12:00

D. 12:00

E. 10:30

F. 12:30

G. 8:00

H. 11:00

I. 5:00

J. 1:30

K. 12:30

L. 4:00

M. 3:00

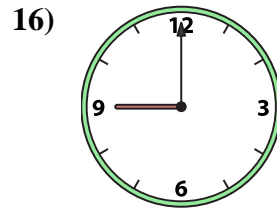
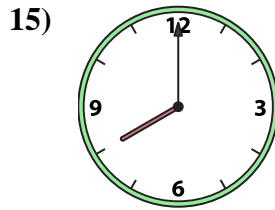
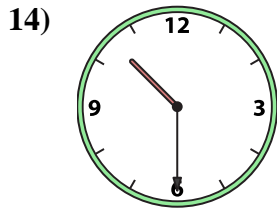
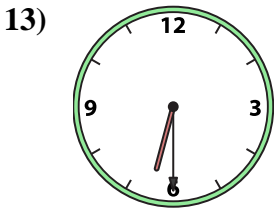
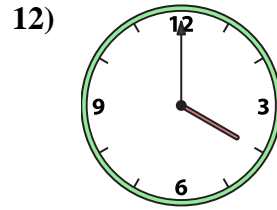
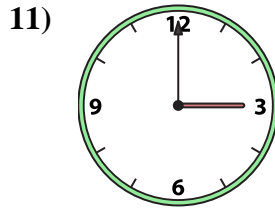
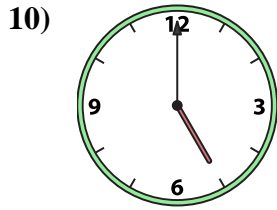
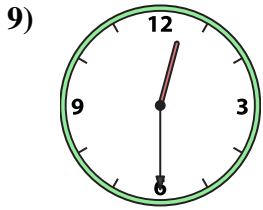
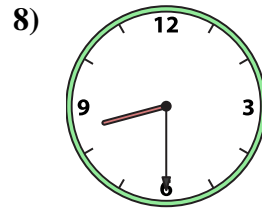
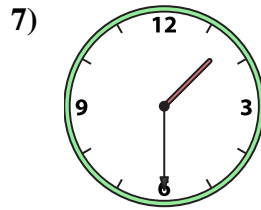

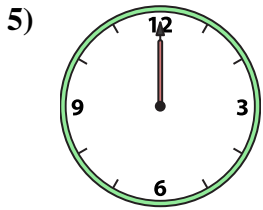
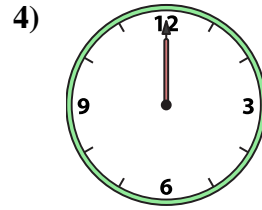
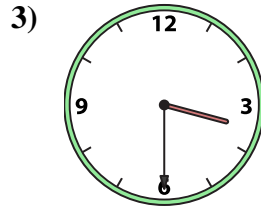
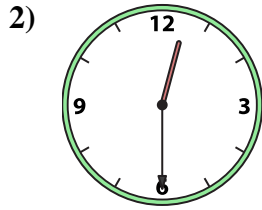

N. 6:30

O. 8:30

P. 1:00



Faites correspondre l'horloge analogique à l'horloge numérique.



A.

B.

C.

D.

E.

F.

G.

H.

I.

J.

K.

L.

M.

N.

O.

P.

Réponses

1. **H**

2. **F**

3. **A**

4. **C**

5. **D**

6. **P**

7. **J**

8. **O**

9. **K**

10. **I**

11. **M**

12. **L**

13. **N**

14. **E**

15. **G**

16. **B**