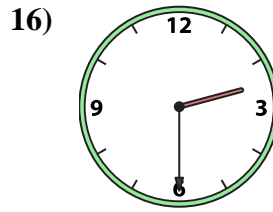
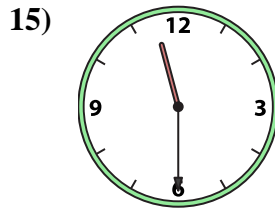
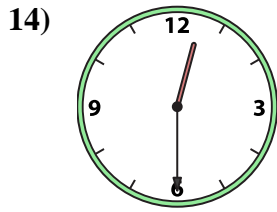
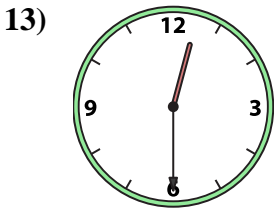
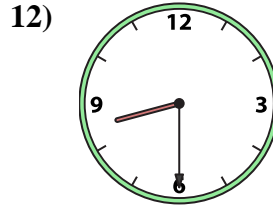
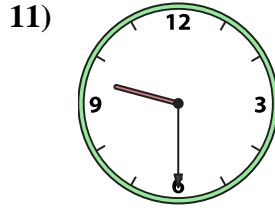
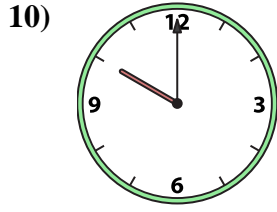

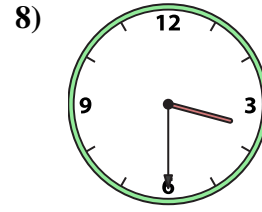
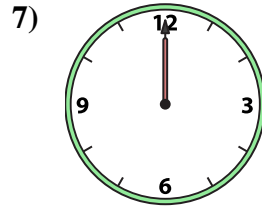
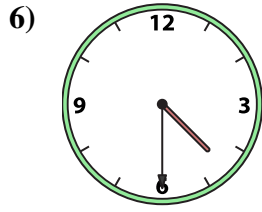
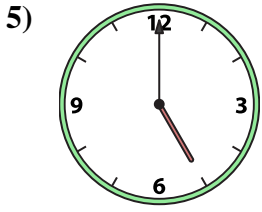
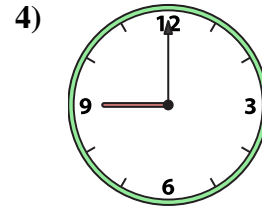
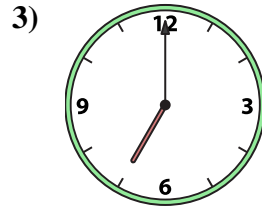
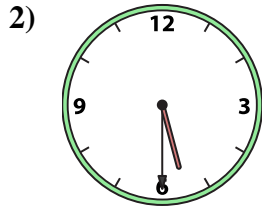





Faites correspondre l'horloge analogique à l'horloge numérique.

Réponses



A. 12:30

B. 3:30

C. 2:00

D. 12:30

E. 5:00

F. 9:00

G. 5:30

H. 10:00

I. 11:00

J. 4:30

K. 9:30

L. 7:00

M. 12:00

N. 2:30

O. 11:30

P. 8:30

1. _____

2. _____

3. _____

4. _____

5. _____

6. _____

7. _____

8. _____

9. _____

10. _____

11. _____

12. _____

13. _____

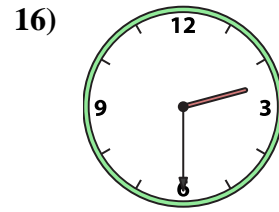
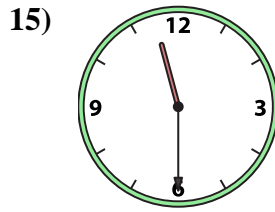
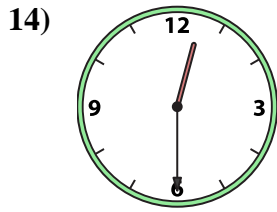
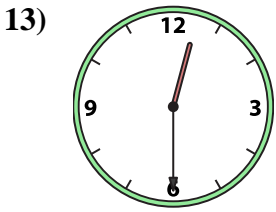
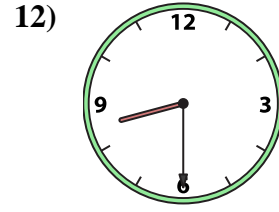
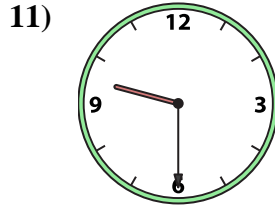
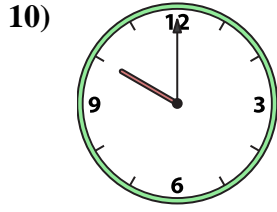

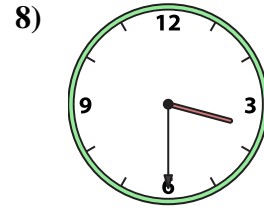
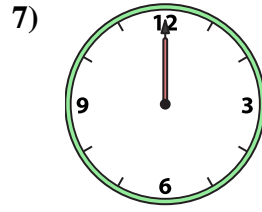
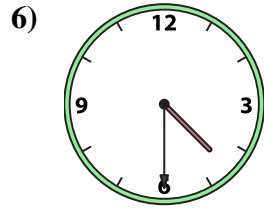
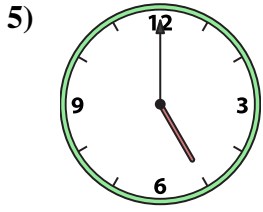
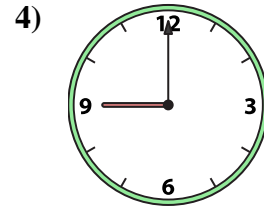
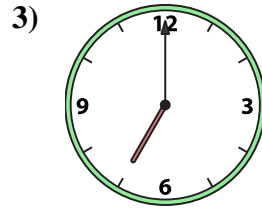
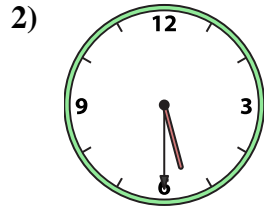

14. _____

15. _____

16. _____



Faites correspondre l'horloge analogique à l'horloge numérique.



A. 12:30

B. 3:30

C. 2:00

D. 12:30

E. 5:00

F. 9:00

G. 5:30

H. 10:00

I. 11:00

J. 4:30

K. 9:30

L. 7:00

M. 12:00

N. 2:30

O. 11:30

P. 8:30

Réponses

1. **I**

2. **G**

3. **L**

4. **F**

5. **E**

6. **J**

7. **M**

8. **B**

9. **C**

10. **H**

11. **K**

12. **P**

13. **A**

14. **D**

15. **O**

16. **N**