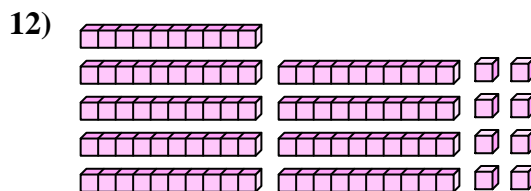
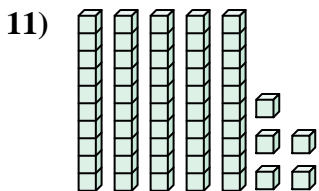
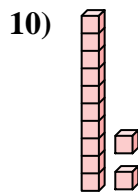
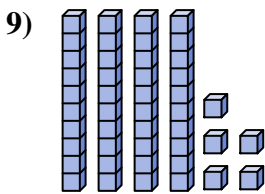
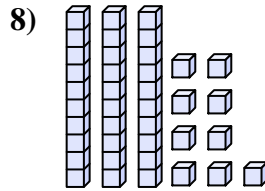
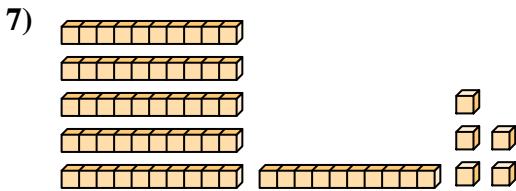
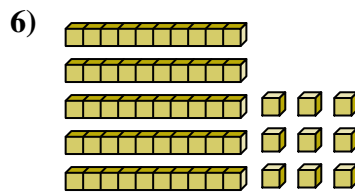
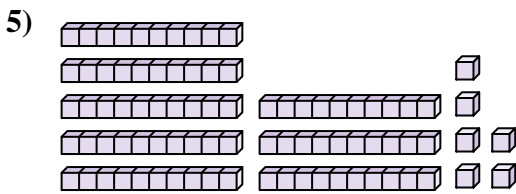

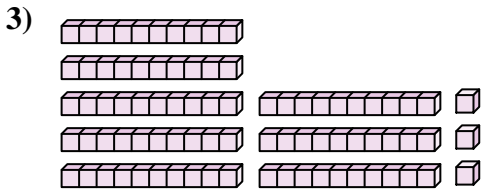
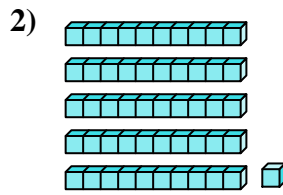





Comptez le nombre total de blocs.

**Réponses**



1. \_\_\_\_\_

2. \_\_\_\_\_

3. \_\_\_\_\_

4. \_\_\_\_\_

5. \_\_\_\_\_

6. \_\_\_\_\_

7. \_\_\_\_\_

8. \_\_\_\_\_

9. \_\_\_\_\_

10. \_\_\_\_\_

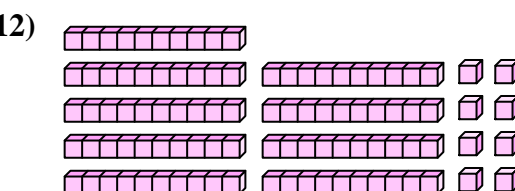
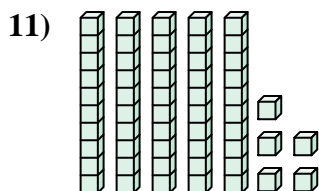
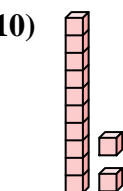
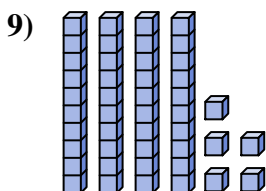
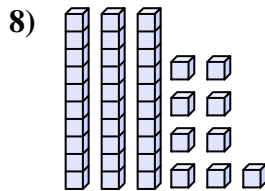
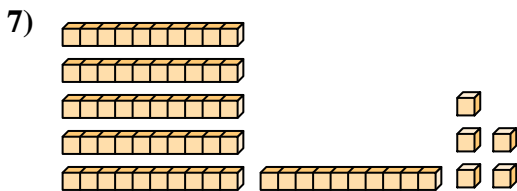
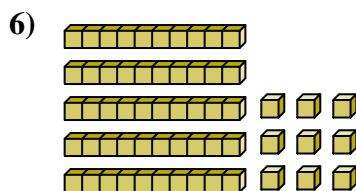
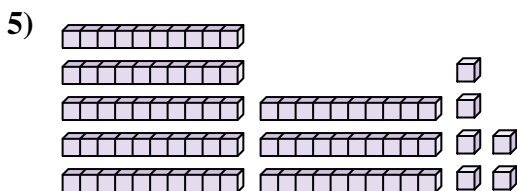
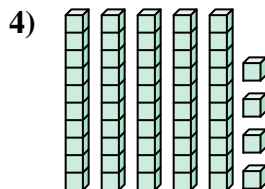
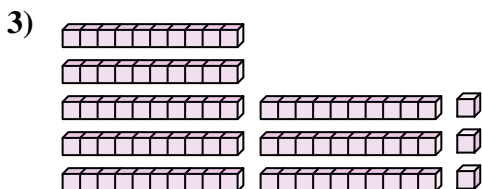
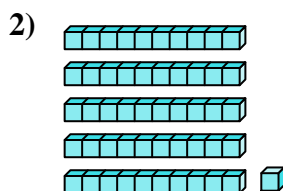
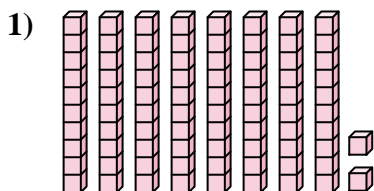
11. \_\_\_\_\_

12. \_\_\_\_\_



Comptez le nombre total de blocs.

**Réponses**



1. **82**

2. **51**

3. **83**

4. **54**

5. **86**

6. **59**

7. **65**

8. **39**

9. **45**

10. **12**

11. **55**

12. **98**



Comptez le nombre total de blocs.

51

45

54

39

65

86

59

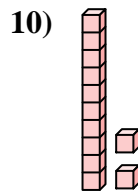
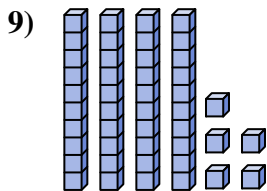
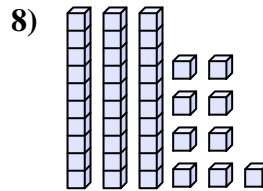
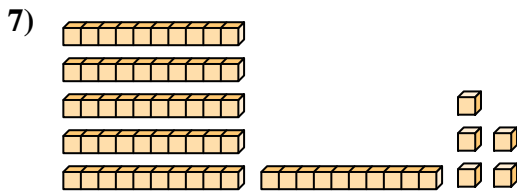
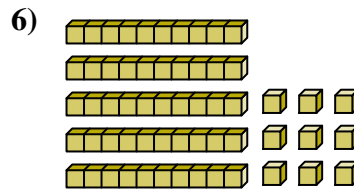
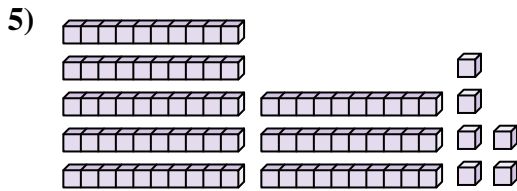
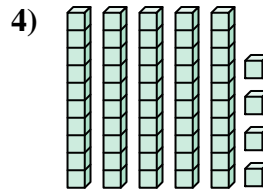
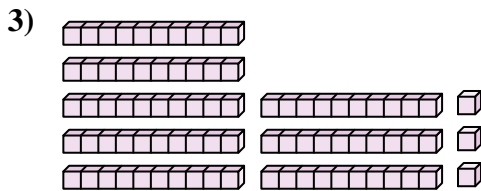
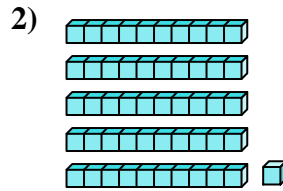
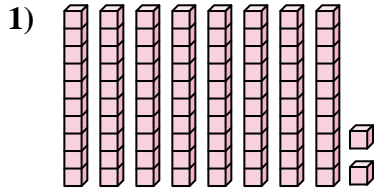
82

12

83

**Réponses**

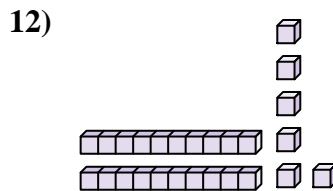
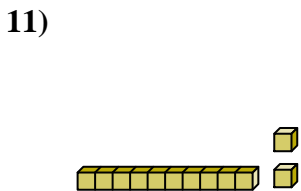
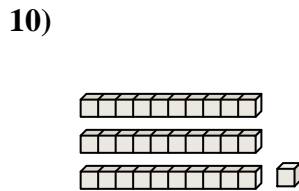
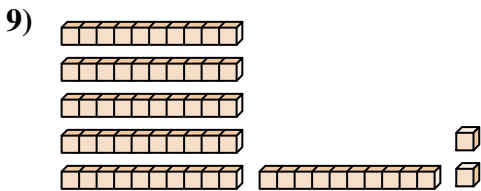
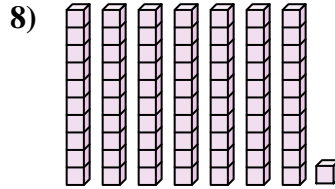
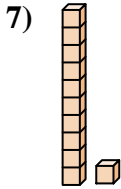
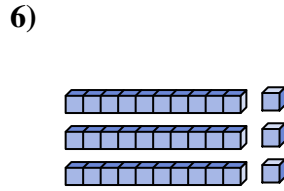
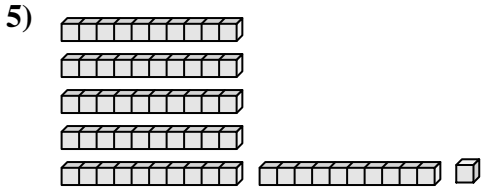
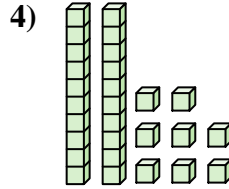
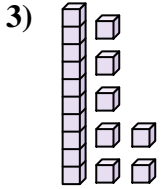
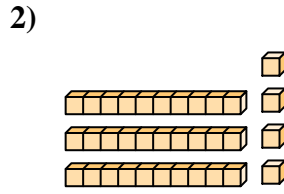
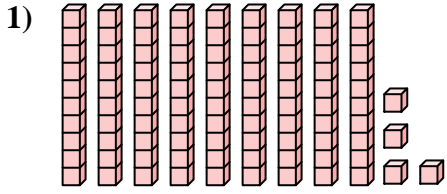
1. \_\_\_\_\_
2. \_\_\_\_\_
3. \_\_\_\_\_
4. \_\_\_\_\_
5. \_\_\_\_\_
6. \_\_\_\_\_
7. \_\_\_\_\_
8. \_\_\_\_\_
9. \_\_\_\_\_
10. \_\_\_\_\_





Comptez le nombre total de blocs.

**Réponses**



1. \_\_\_\_\_

2. \_\_\_\_\_

3. \_\_\_\_\_

4. \_\_\_\_\_

5. \_\_\_\_\_

6. \_\_\_\_\_

7. \_\_\_\_\_

8. \_\_\_\_\_

9. \_\_\_\_\_

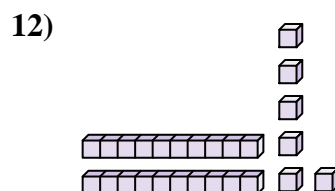

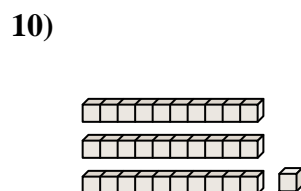
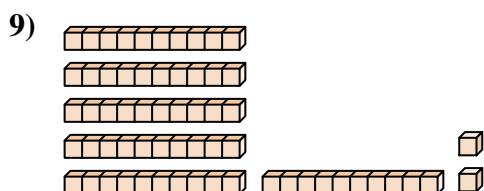
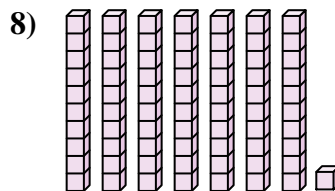
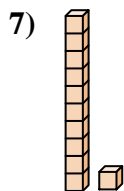
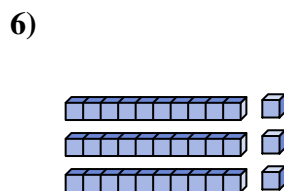
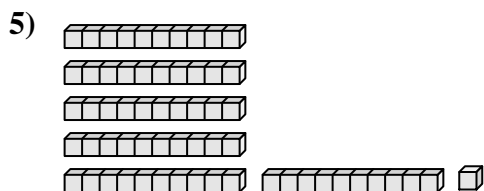
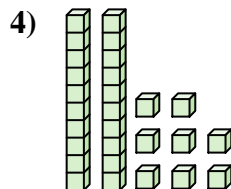
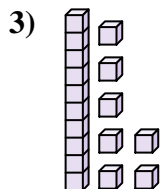
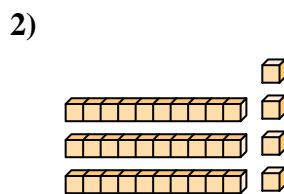
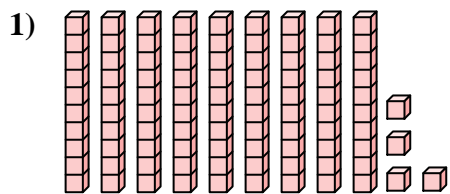
10. \_\_\_\_\_

11. \_\_\_\_\_

12. \_\_\_\_\_



Comptez le nombre total de blocs.



**Réponses**

1. 94

2. 34

3. 17

4. 28

5. 61

6. 33

7. 11

8. 71

9. 62

10. 31

11. 12

12. 26



Comptez le nombre total de blocs.

62

11

33

31

61

71

28

17

34

94

**Réponses**

1. \_\_\_\_\_

2. \_\_\_\_\_

3. \_\_\_\_\_

4. \_\_\_\_\_

5. \_\_\_\_\_

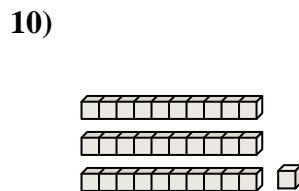
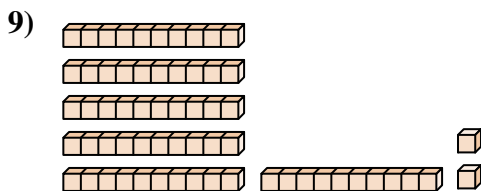
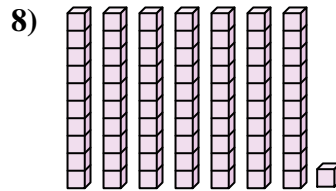
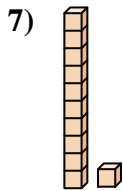
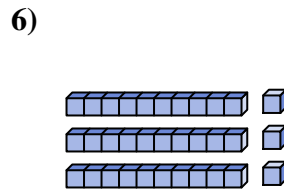
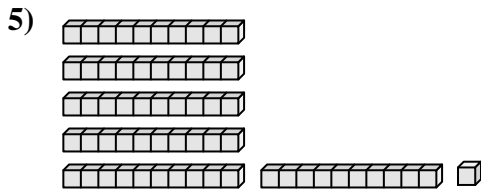
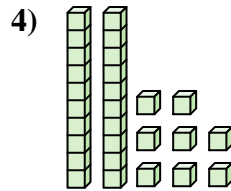
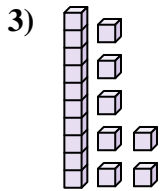
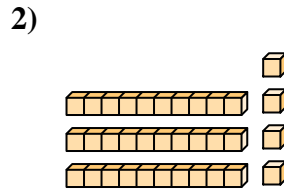
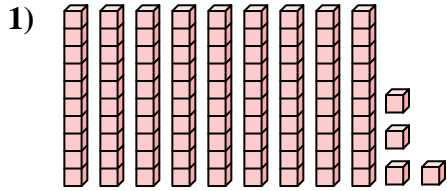
6. \_\_\_\_\_

7. \_\_\_\_\_

8. \_\_\_\_\_

9. \_\_\_\_\_

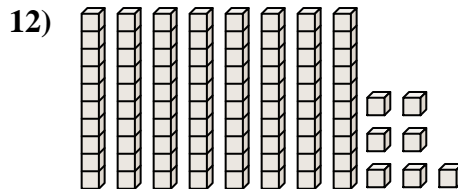
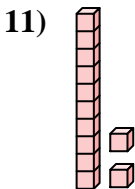
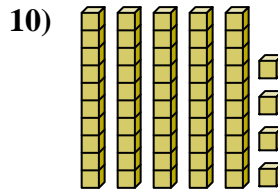
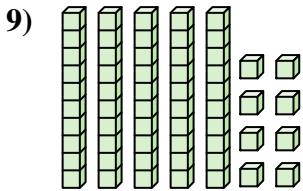
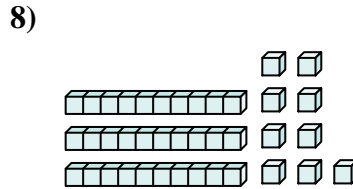
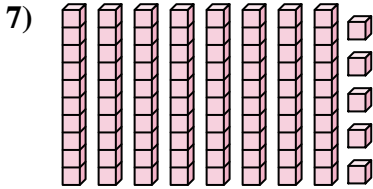
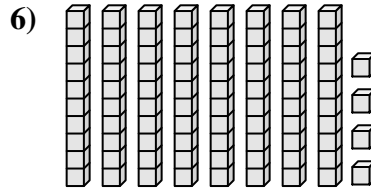
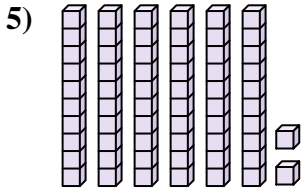
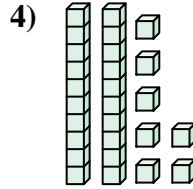
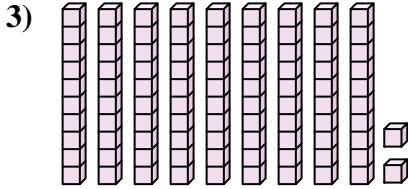
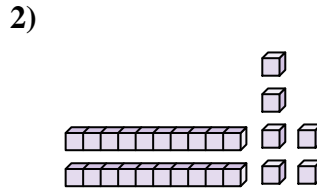
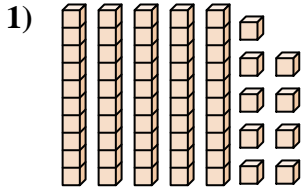
10. \_\_\_\_\_





Comptez le nombre total de blocs.

**Réponses**



1. \_\_\_\_\_

2. \_\_\_\_\_

3. \_\_\_\_\_

4. \_\_\_\_\_

5. \_\_\_\_\_

6. \_\_\_\_\_

7. \_\_\_\_\_

8. \_\_\_\_\_

9. \_\_\_\_\_

10. \_\_\_\_\_

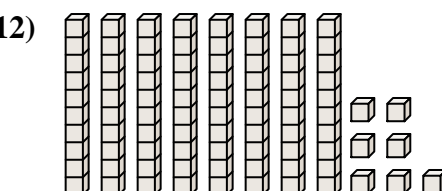
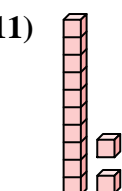
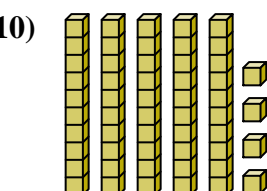
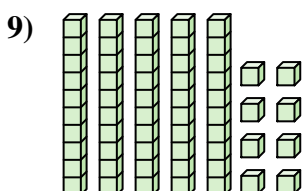
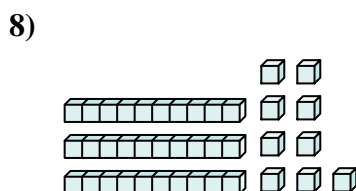
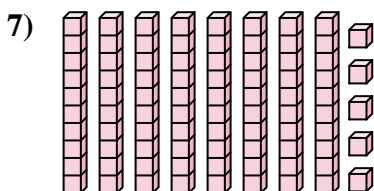
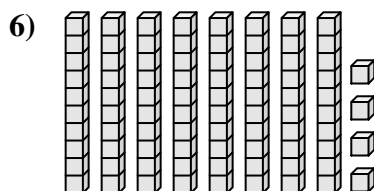
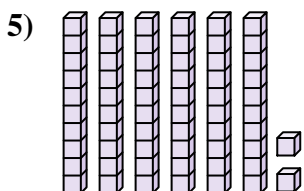
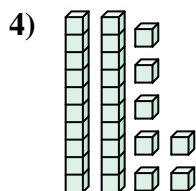
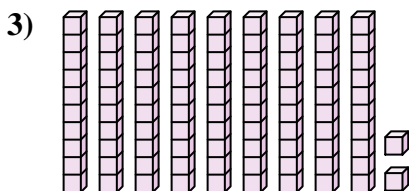
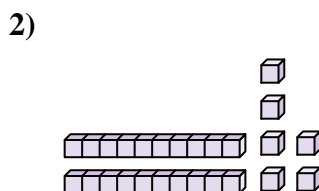
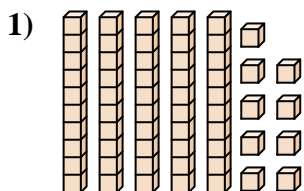
11. \_\_\_\_\_

12. \_\_\_\_\_



Comptez le nombre total de blocs.

**Réponses**



1. **59**

2. **26**

3. **92**

4. **27**

5. **62**

6. **84**

7. **85**

8. **39**

9. **58**

10. **54**

11. **12**

12. **87**





Comptez le nombre total de blocs.

62

54

58

27

84

59

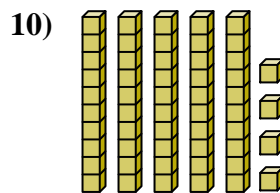
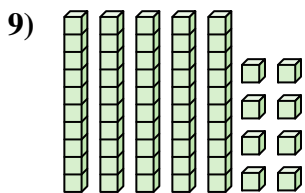
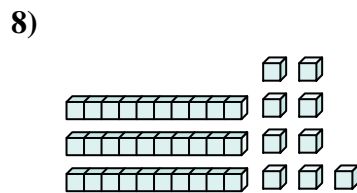
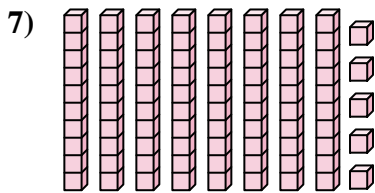
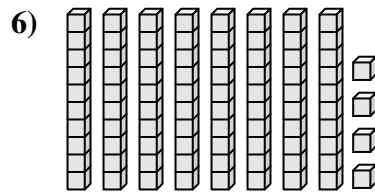
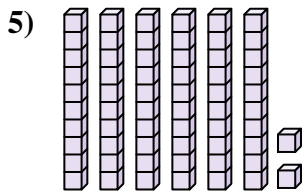
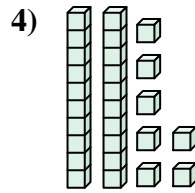
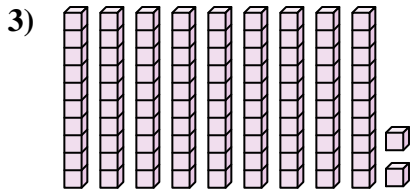
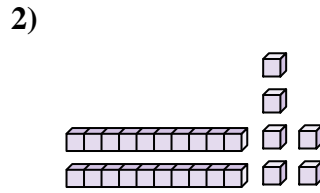
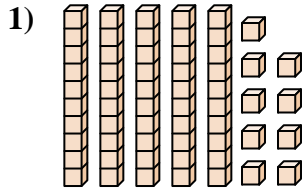
85

26

92

39

**Réponses**

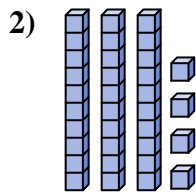
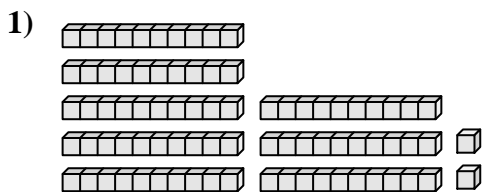


1. \_\_\_\_\_
2. \_\_\_\_\_
3. \_\_\_\_\_
4. \_\_\_\_\_
5. \_\_\_\_\_
6. \_\_\_\_\_
7. \_\_\_\_\_
8. \_\_\_\_\_
9. \_\_\_\_\_
10. \_\_\_\_\_



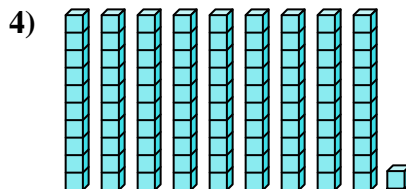
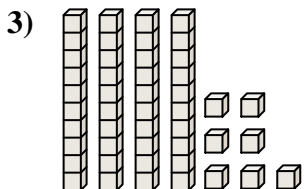
Comptez le nombre total de blocs.

**Réponses**



1. \_\_\_\_\_

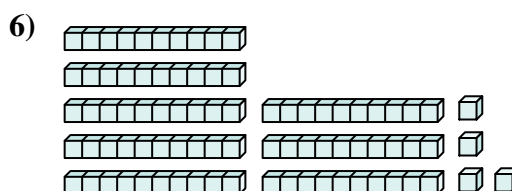
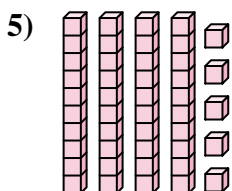
2. \_\_\_\_\_



3. \_\_\_\_\_

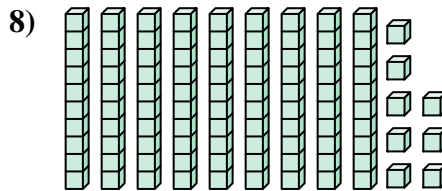
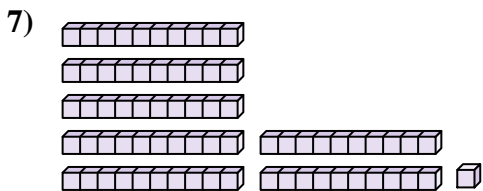
4. \_\_\_\_\_

5. \_\_\_\_\_



6. \_\_\_\_\_

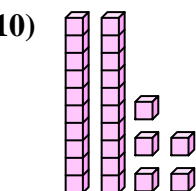
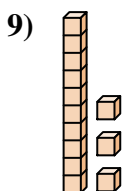
7. \_\_\_\_\_



8. \_\_\_\_\_

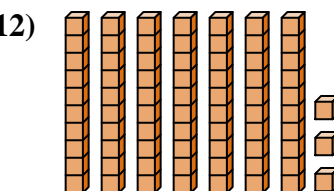
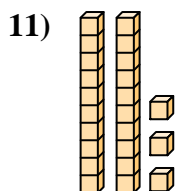
9. \_\_\_\_\_

10. \_\_\_\_\_



11. \_\_\_\_\_

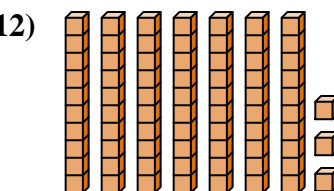
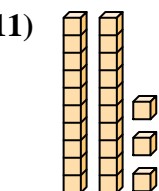
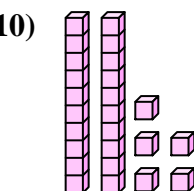
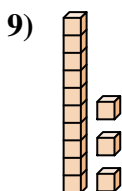
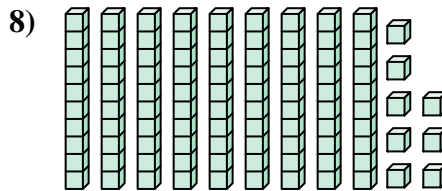
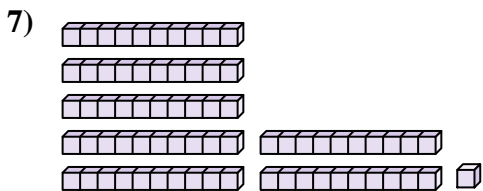
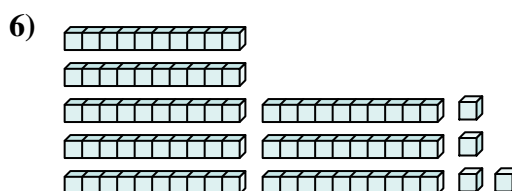
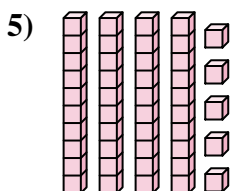
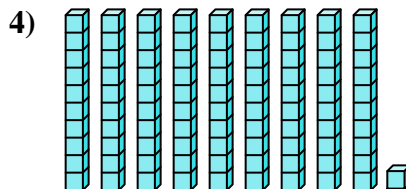
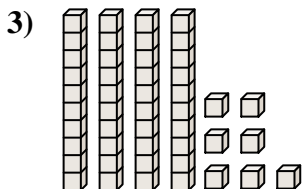
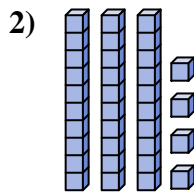
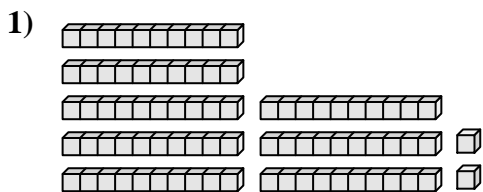
12. \_\_\_\_\_





Comptez le nombre total de blocs.

**Réponses**



1. **82**

2. **34**

3. **47**

4. **91**

5. **45**

6. **84**

7. **71**

8. **98**

9. **13**

10. **25**

11. **23**

12. **73**



Comptez le nombre total de blocs.

45

71

98

84

47

34

91

13

25

82

**Réponses**

1. \_\_\_\_\_

2. \_\_\_\_\_

3. \_\_\_\_\_

4. \_\_\_\_\_

5. \_\_\_\_\_

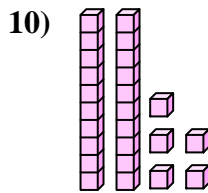
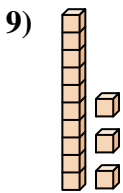
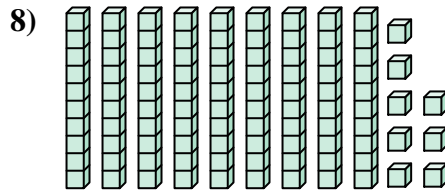
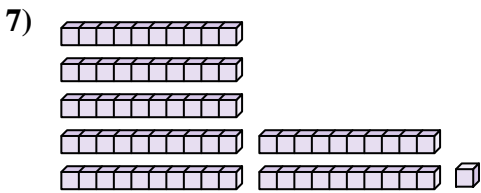
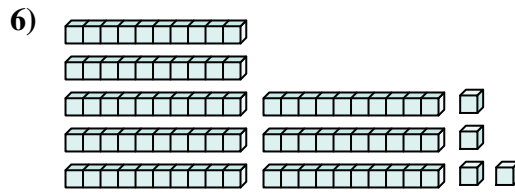
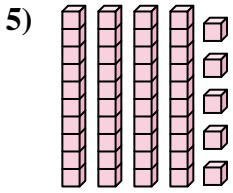
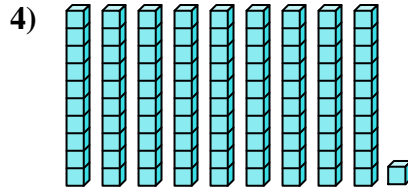
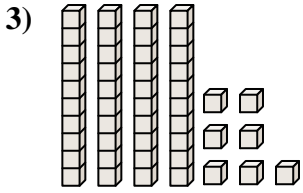
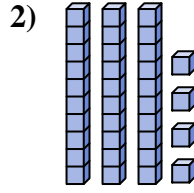
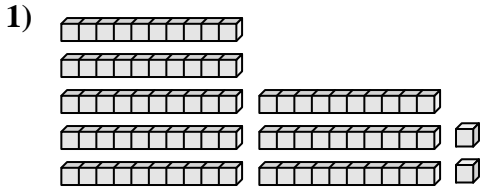
6. \_\_\_\_\_

7. \_\_\_\_\_

8. \_\_\_\_\_

9. \_\_\_\_\_

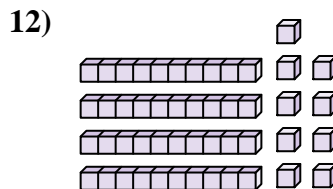
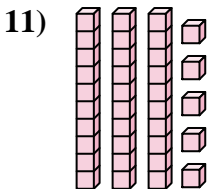
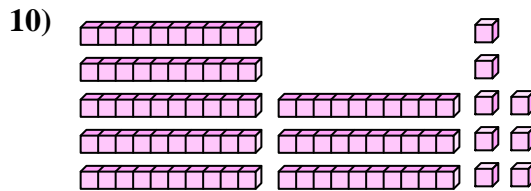
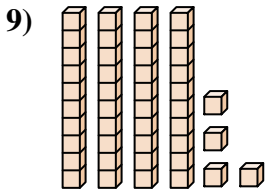
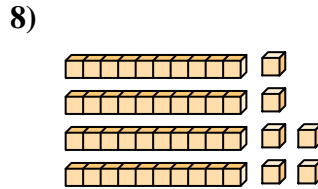
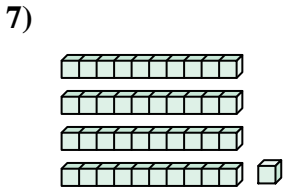
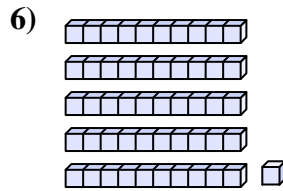
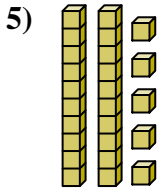
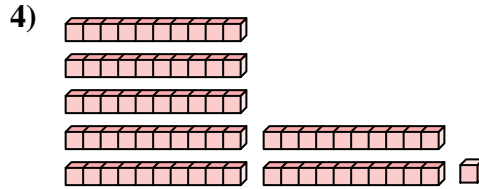
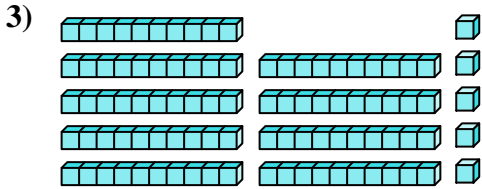
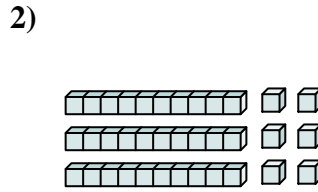
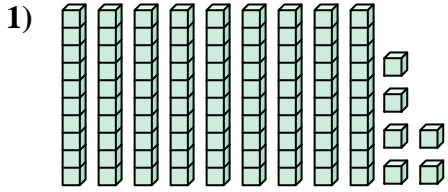
10. \_\_\_\_\_





Comptez le nombre total de blocs.

**Réponses**



1. \_\_\_\_\_

2. \_\_\_\_\_

3. \_\_\_\_\_

4. \_\_\_\_\_

5. \_\_\_\_\_

6. \_\_\_\_\_

7. \_\_\_\_\_

8. \_\_\_\_\_

9. \_\_\_\_\_

10. \_\_\_\_\_

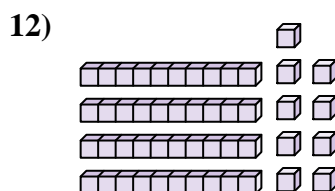
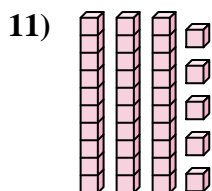
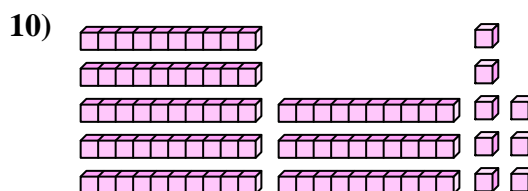
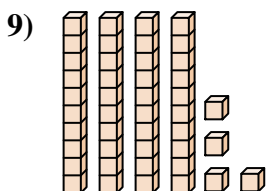
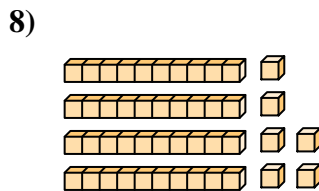
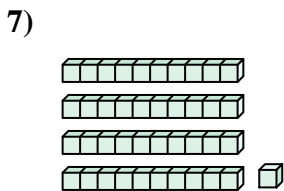
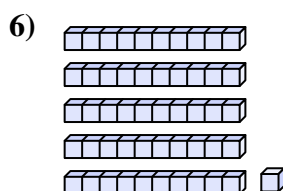
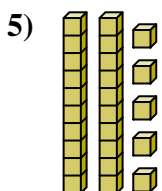
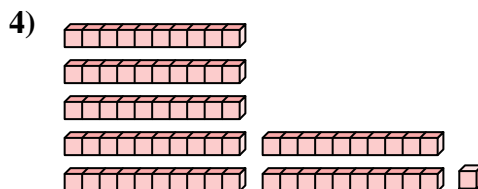
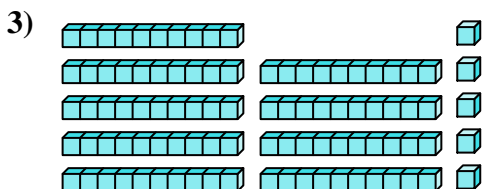
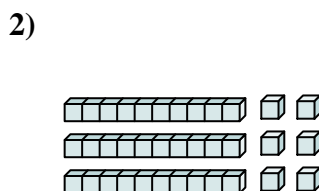
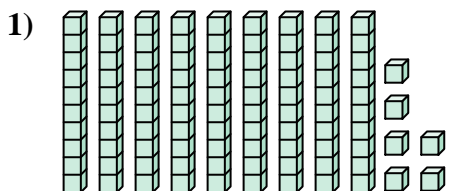
11. \_\_\_\_\_

12. \_\_\_\_\_



Comptez le nombre total de blocs.

**Réponses**



1. 96

2. 36

3. 95

4. 71

5. 25

6. 51

7. 41

8. 46

9. 44

10. 88

11. 35

12. 49



Comptez le nombre total de blocs.

88

25

36

44

46

41

51

96

71

95

**Réponses**

1. \_\_\_\_\_

2. \_\_\_\_\_

3. \_\_\_\_\_

4. \_\_\_\_\_

5. \_\_\_\_\_

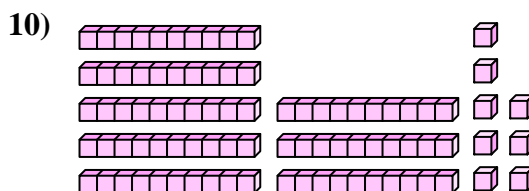
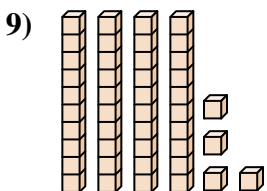
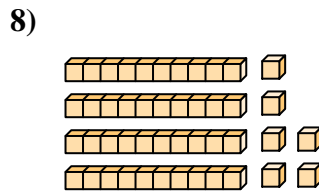
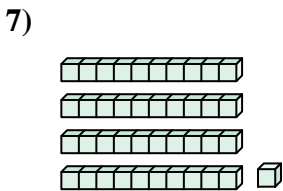
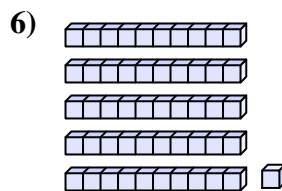
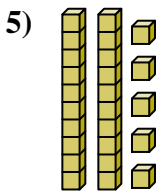
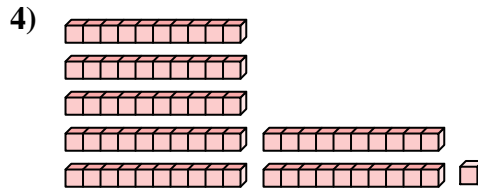
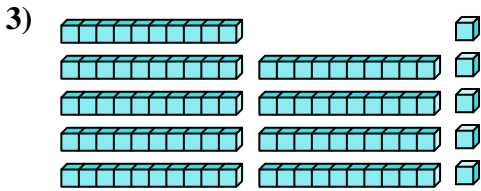
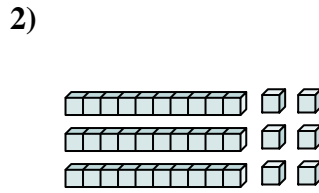
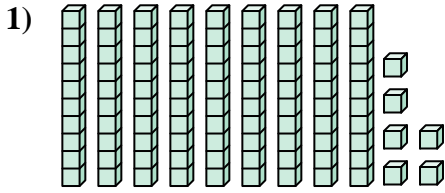
6. \_\_\_\_\_

7. \_\_\_\_\_

8. \_\_\_\_\_

9. \_\_\_\_\_

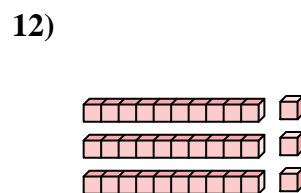
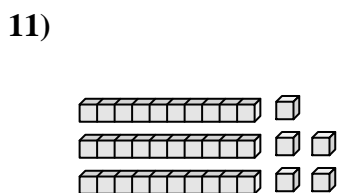
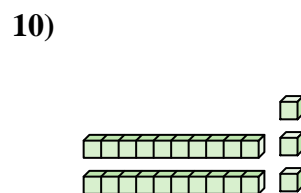
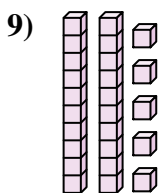
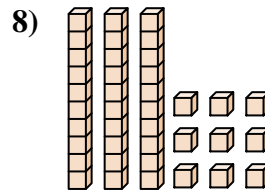
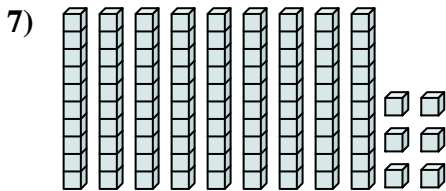
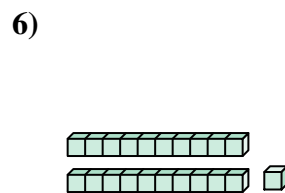
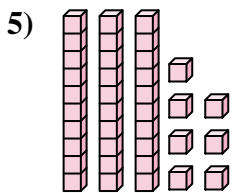
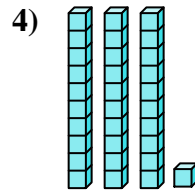
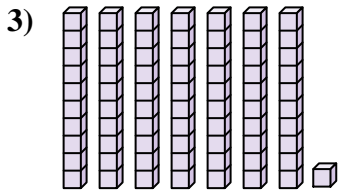
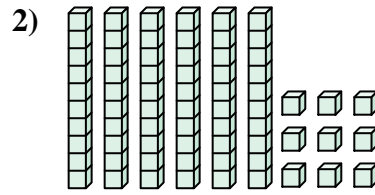
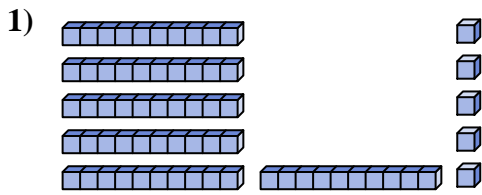
10. \_\_\_\_\_





Comptez le nombre total de blocs.

**Réponses**



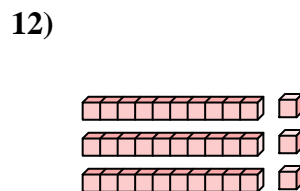
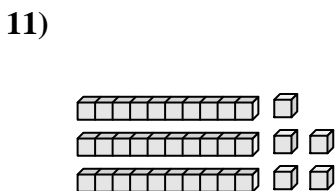
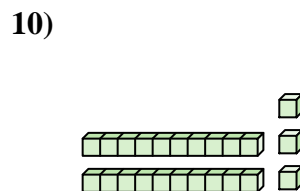
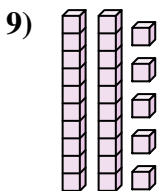
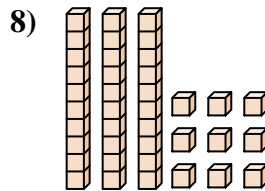
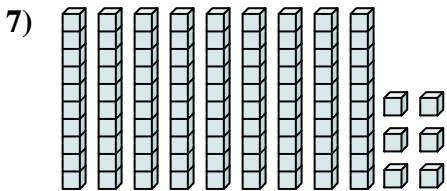
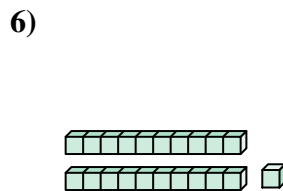
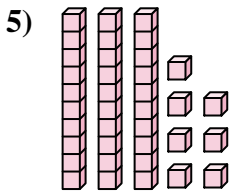
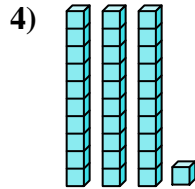
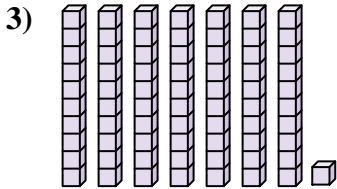
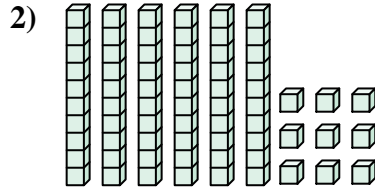
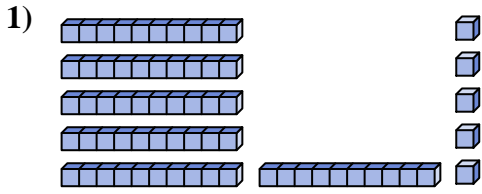
- 1. \_\_\_\_\_
- 2. \_\_\_\_\_
- 3. \_\_\_\_\_
- 4. \_\_\_\_\_
- 5. \_\_\_\_\_
- 6. \_\_\_\_\_
- 7. \_\_\_\_\_
- 8. \_\_\_\_\_
- 9. \_\_\_\_\_
- 10. \_\_\_\_\_
- 11. \_\_\_\_\_
- 12. \_\_\_\_\_





Comptez le nombre total de blocs.

**Réponses**



1. 65

2. 69

3. 71

4. 31

5. 37

6. 21

7. 96

8. 39

9. 25

10. 23

11. 35

12. 33



Comptez le nombre total de blocs.

**Réponses**

23

71

65

31

69

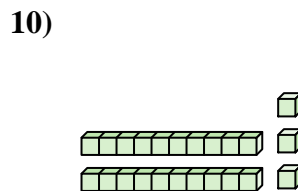
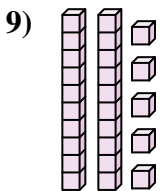
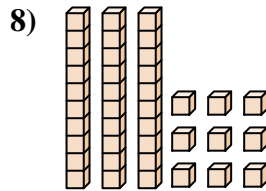
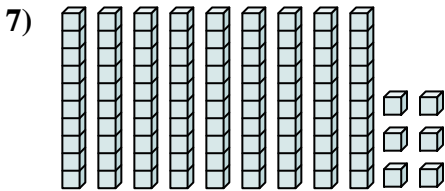
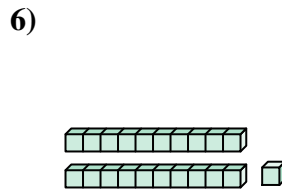
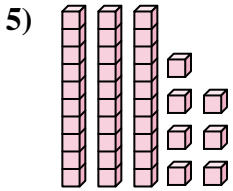
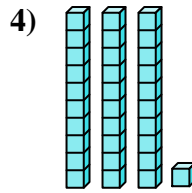
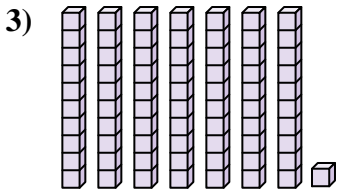
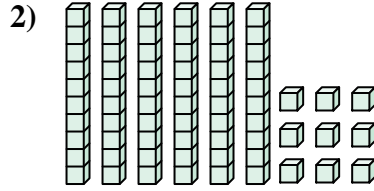
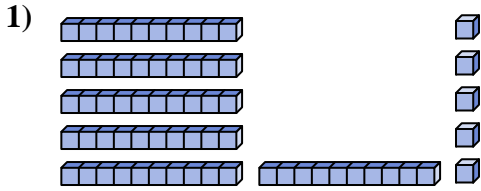
96

21

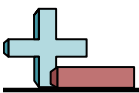
37

39

25

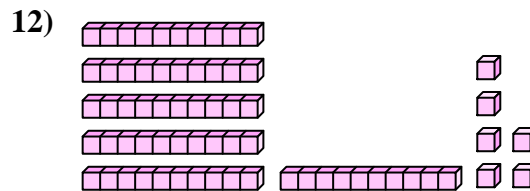
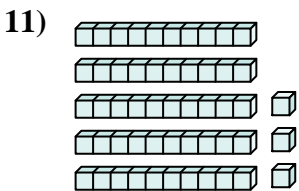
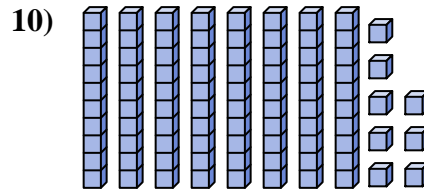
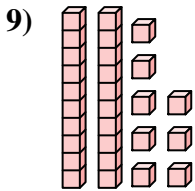
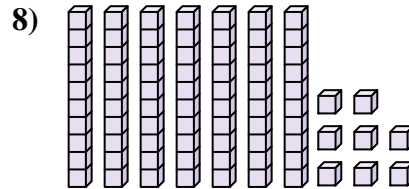
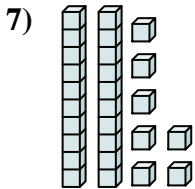
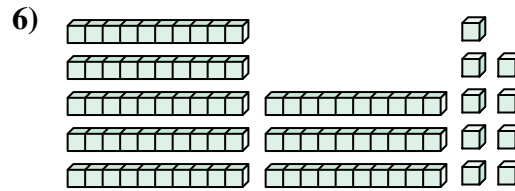
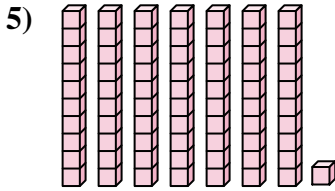
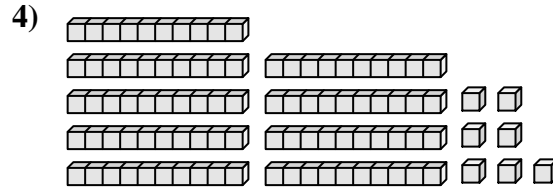
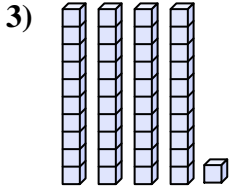
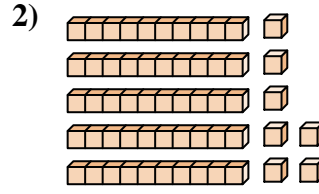
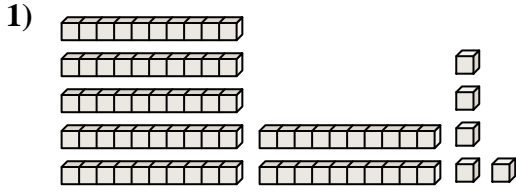


1. \_\_\_\_\_
2. \_\_\_\_\_
3. \_\_\_\_\_
4. \_\_\_\_\_
5. \_\_\_\_\_
6. \_\_\_\_\_
7. \_\_\_\_\_
8. \_\_\_\_\_
9. \_\_\_\_\_
10. \_\_\_\_\_



Comptez le nombre total de blocs.

**Réponses**



1. \_\_\_\_\_

2. \_\_\_\_\_

3. \_\_\_\_\_

4. \_\_\_\_\_

5. \_\_\_\_\_

6. \_\_\_\_\_

7. \_\_\_\_\_

8. \_\_\_\_\_

9. \_\_\_\_\_

10. \_\_\_\_\_

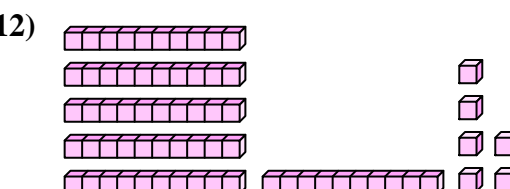
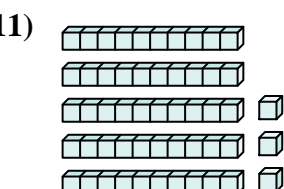
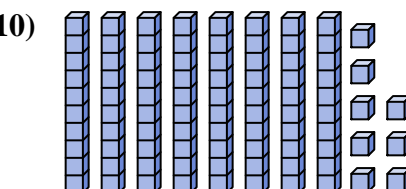
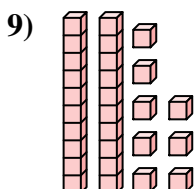
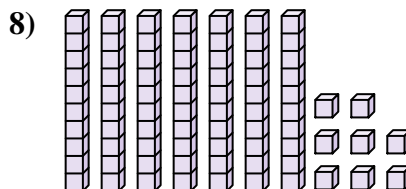
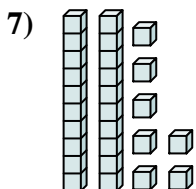
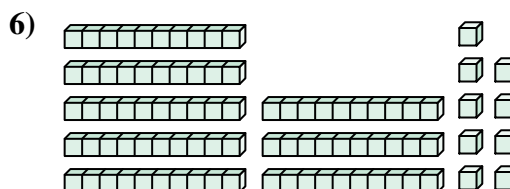
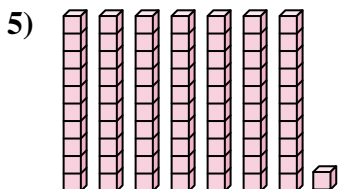
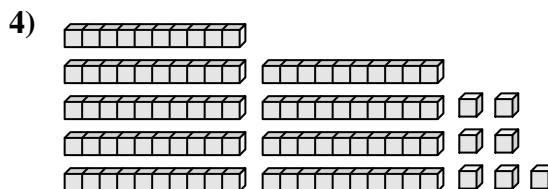
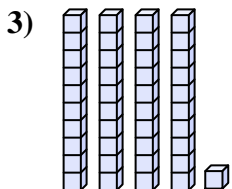
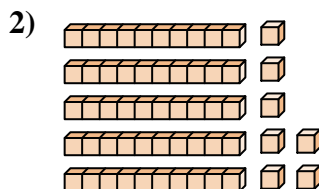
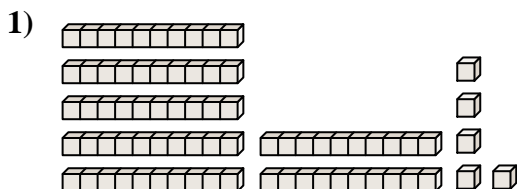
11. \_\_\_\_\_

12. \_\_\_\_\_



Comptez le nombre total de blocs.

**Réponses**



1. **75**

2. **57**

3. **41**

4. **97**

5. **71**

6. **89**

7. **27**

8. **78**

9. **28**

10. **88**

11. **53**

12. **66**



Comptez le nombre total de blocs.

27

88

57

41

71

78

97

89

28

75

**Réponses**

1. \_\_\_\_\_

2. \_\_\_\_\_

3. \_\_\_\_\_

4. \_\_\_\_\_

5. \_\_\_\_\_

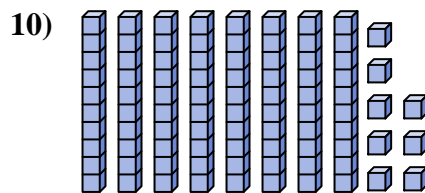
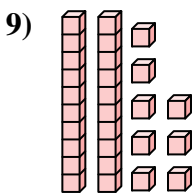
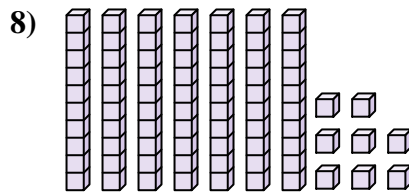
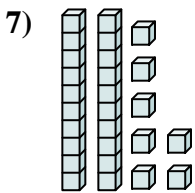
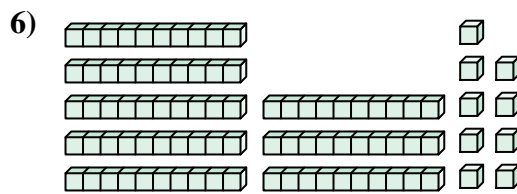

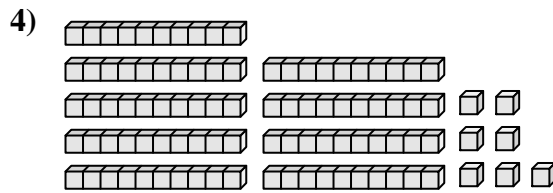
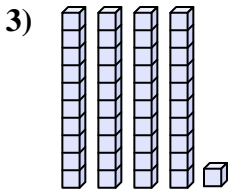
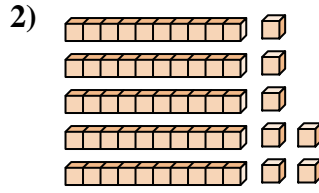
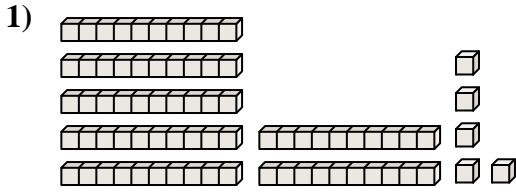
6. \_\_\_\_\_

7. \_\_\_\_\_

8. \_\_\_\_\_

9. \_\_\_\_\_

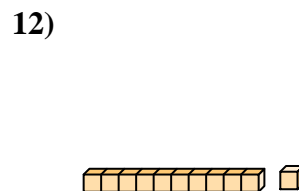
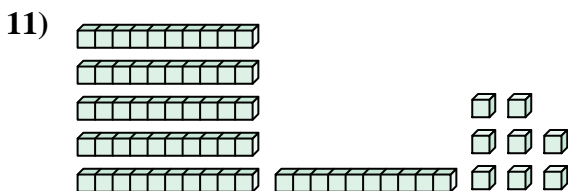
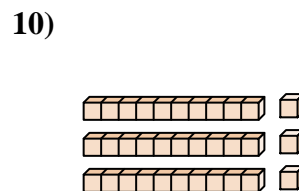
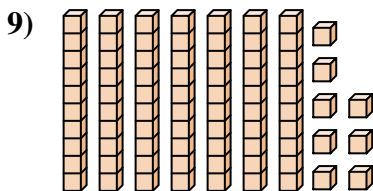
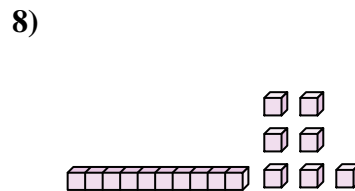
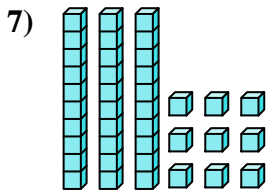
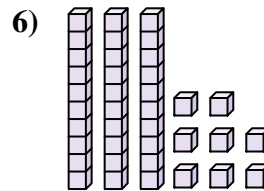
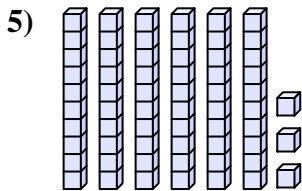
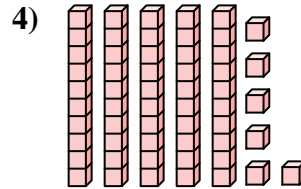
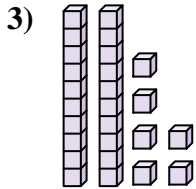
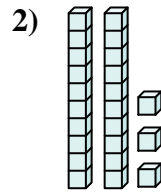
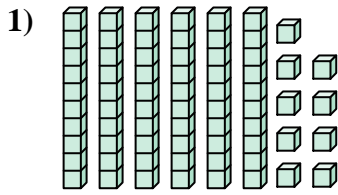
10. \_\_\_\_\_





Comptez le nombre total de blocs.

**Réponses**

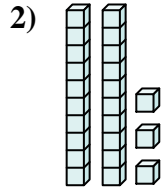
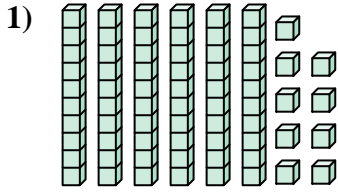


- 1. \_\_\_\_\_
- 2. \_\_\_\_\_
- 3. \_\_\_\_\_
- 4. \_\_\_\_\_
- 5. \_\_\_\_\_
- 6. \_\_\_\_\_
- 7. \_\_\_\_\_
- 8. \_\_\_\_\_
- 9. \_\_\_\_\_
- 10. \_\_\_\_\_
- 11. \_\_\_\_\_
- 12. \_\_\_\_\_



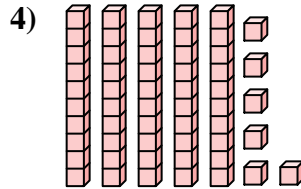
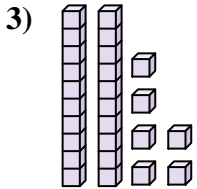
Comptez le nombre total de blocs.

**Réponses**



1. 69

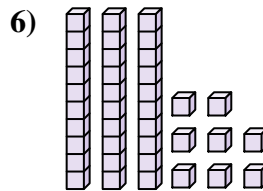
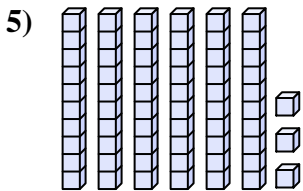
2. 23



3. 26

4. 56

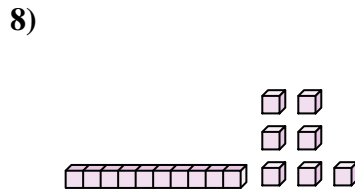
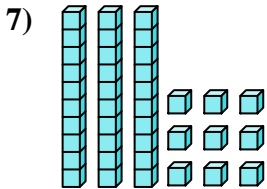
5. 63



6. 38

7. 39

8. 17

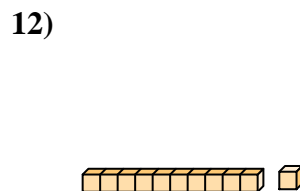
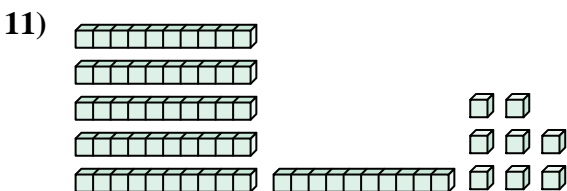
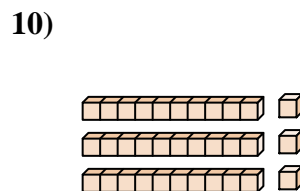
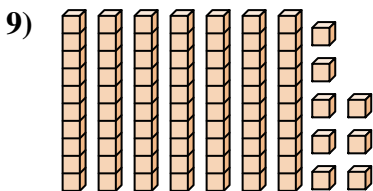


9. 78

10. 33

11. 68

12. 11





Comptez le nombre total de blocs.

23

26

39

17

69

63

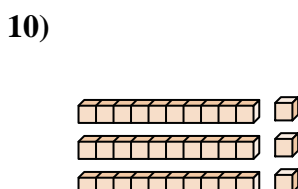
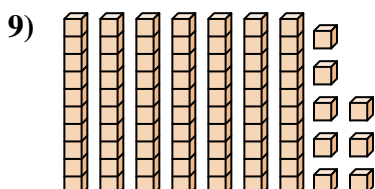
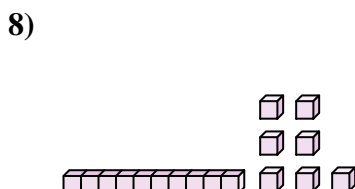

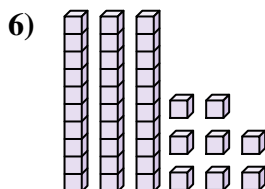
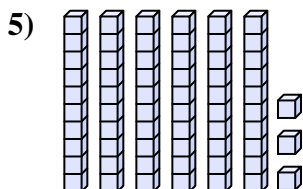
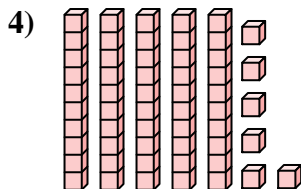
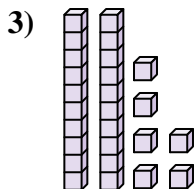
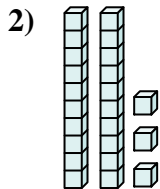
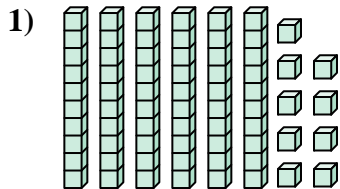
56

78

38

33

Réponses



1. \_\_\_\_\_

2. \_\_\_\_\_

3. \_\_\_\_\_

4. \_\_\_\_\_

5. \_\_\_\_\_

6. \_\_\_\_\_

7. \_\_\_\_\_

8. \_\_\_\_\_

9. \_\_\_\_\_

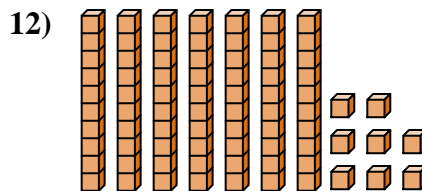
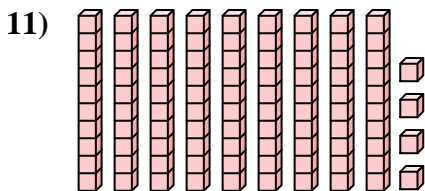
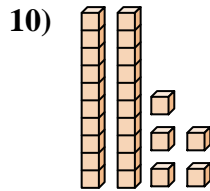
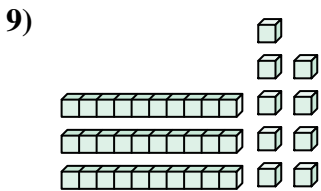
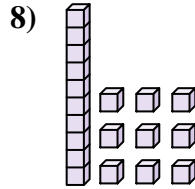
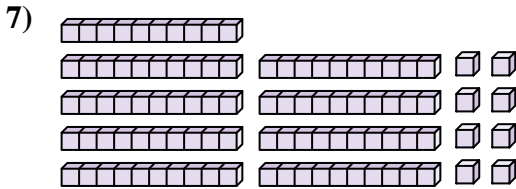
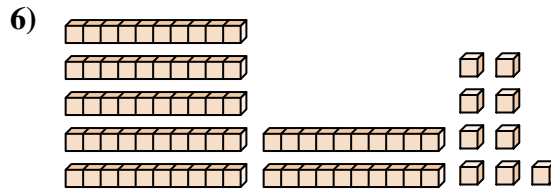
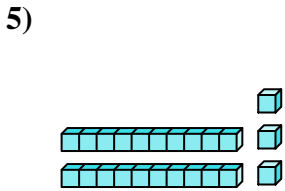
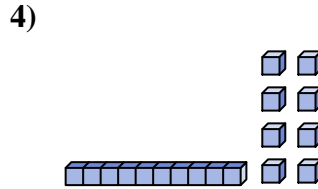
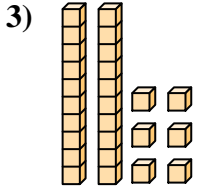
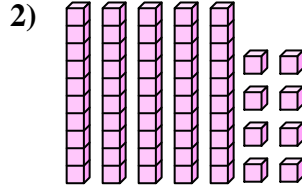
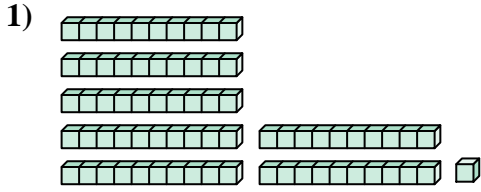
10. \_\_\_\_\_





Comptez le nombre total de blocs.

**Réponses**



1. \_\_\_\_\_

2. \_\_\_\_\_

3. \_\_\_\_\_

4. \_\_\_\_\_

5. \_\_\_\_\_

6. \_\_\_\_\_

7. \_\_\_\_\_

8. \_\_\_\_\_

9. \_\_\_\_\_

10. \_\_\_\_\_

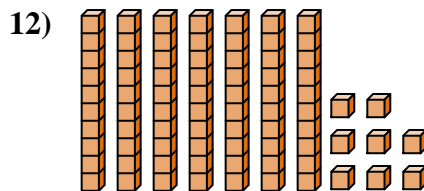
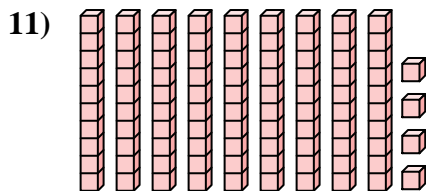
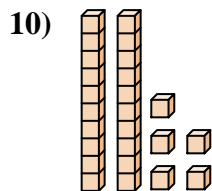
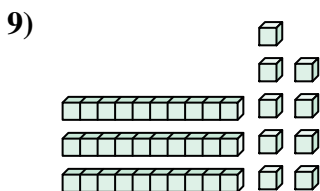
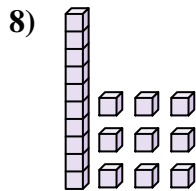
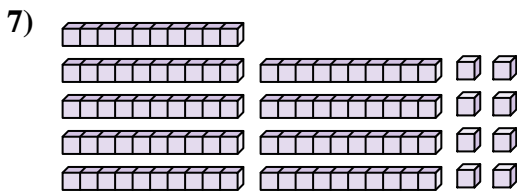
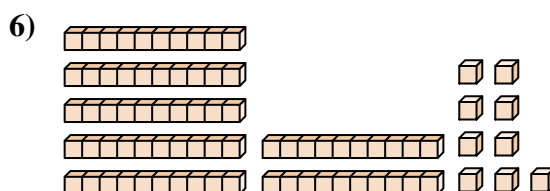
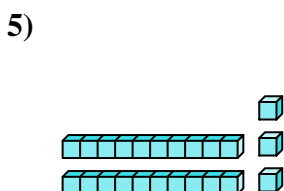
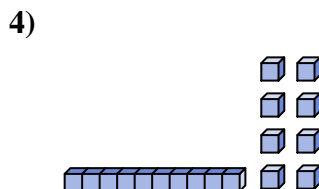
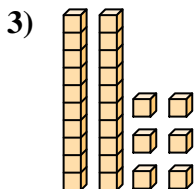
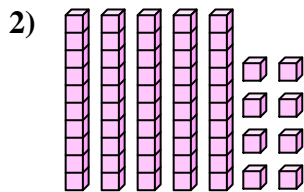
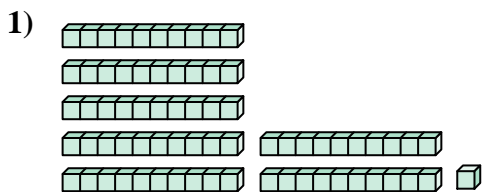
11. \_\_\_\_\_

12. \_\_\_\_\_



Comptez le nombre total de blocs.

**Réponses**



1. 71
2. 58
3. 26
4. 18
5. 23
6. 79
7. 98
8. 19
9. 39
10. 25
11. 94
12. 78



Comptez le nombre total de blocs.

19

26

79

58

23

98

39

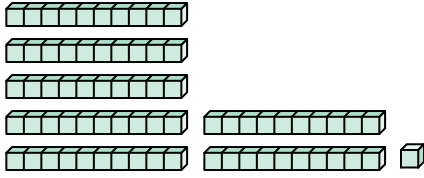
25

71

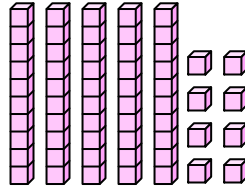
18

Réponses

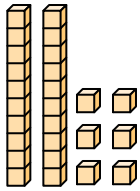
1)



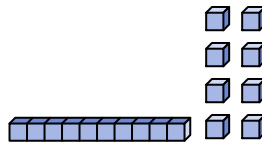
2)



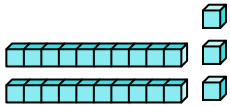
3)



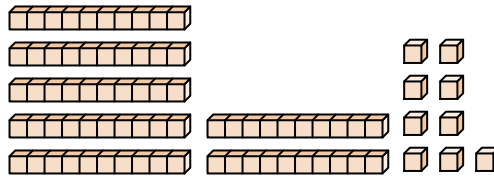
4)



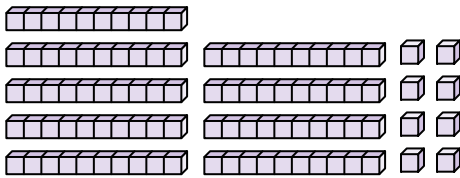
5)



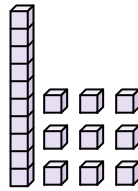
6)



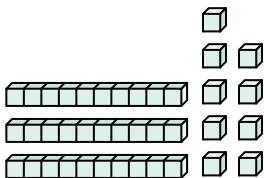
7)



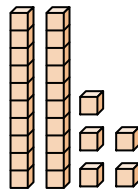
8)



9)



10)



1. \_\_\_\_\_

2. \_\_\_\_\_

3. \_\_\_\_\_

4. \_\_\_\_\_

5. \_\_\_\_\_

6. \_\_\_\_\_

7. \_\_\_\_\_

8. \_\_\_\_\_

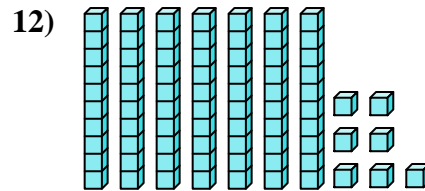
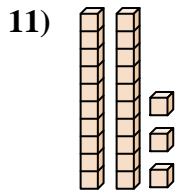
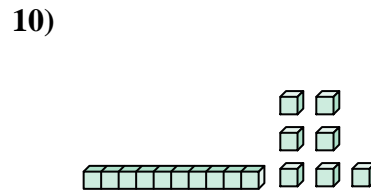
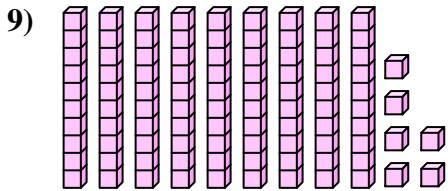
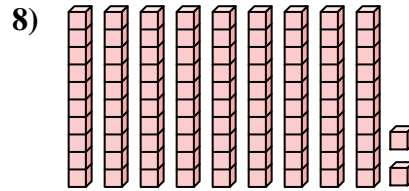
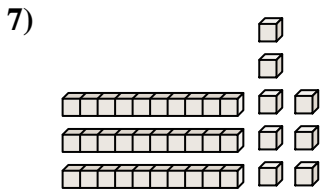
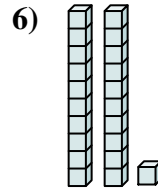
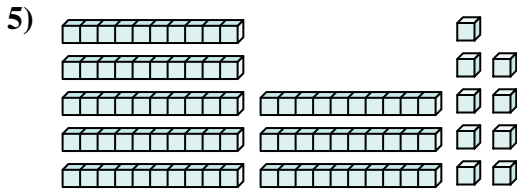
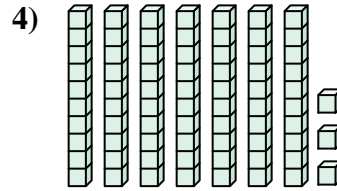
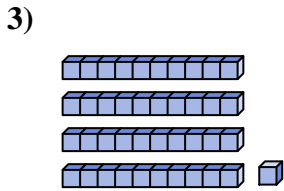
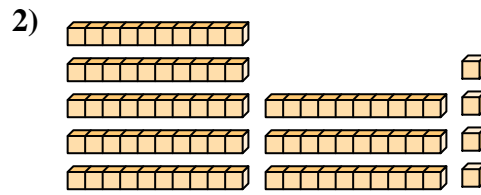
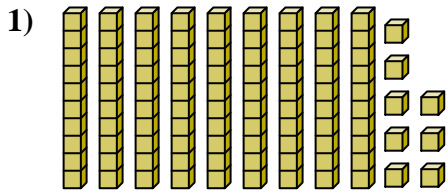
9. \_\_\_\_\_

10. \_\_\_\_\_



Comptez le nombre total de blocs.

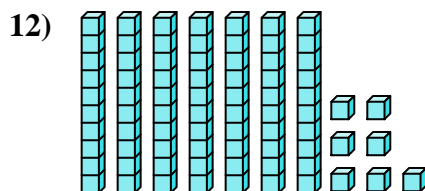
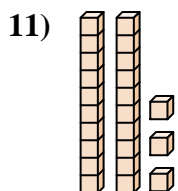
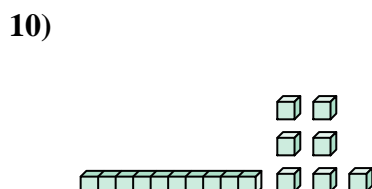
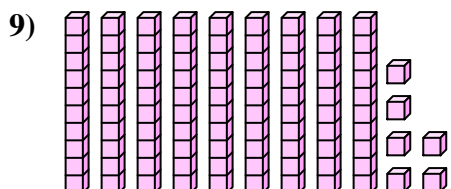
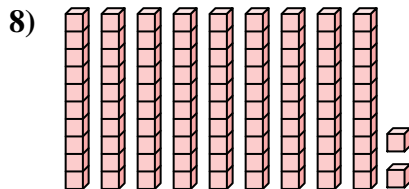
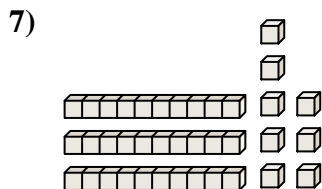
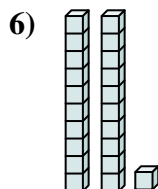
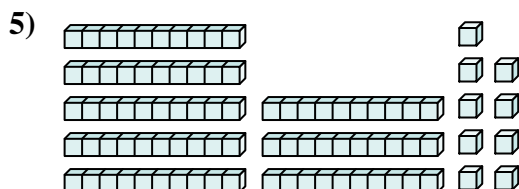
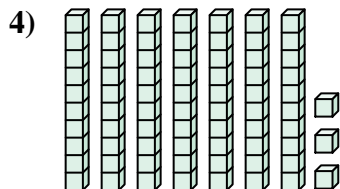
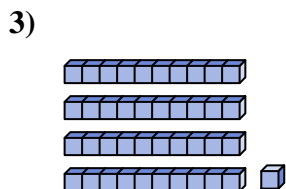
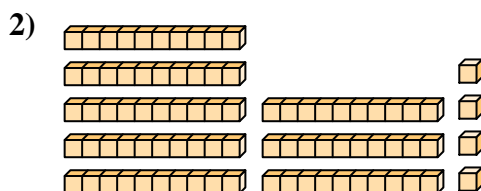
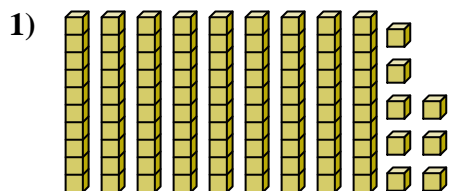
**Réponses**



- 1. \_\_\_\_\_
- 2. \_\_\_\_\_
- 3. \_\_\_\_\_
- 4. \_\_\_\_\_
- 5. \_\_\_\_\_
- 6. \_\_\_\_\_
- 7. \_\_\_\_\_
- 8. \_\_\_\_\_
- 9. \_\_\_\_\_
- 10. \_\_\_\_\_
- 11. \_\_\_\_\_
- 12. \_\_\_\_\_



Comptez le nombre total de blocs.



**Réponses**

1. **98**

2. **84**

3. **41**

4. **73**

5. **89**

6. **21**

7. **38**

8. **92**

9. **96**

10. **17**

11. **23**

12. **77**



Comptez le nombre total de blocs.

38

96

98

92

21

41

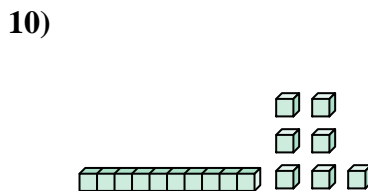
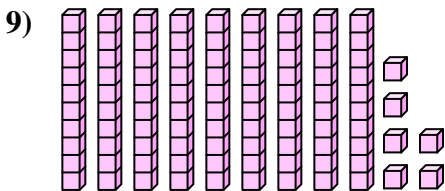
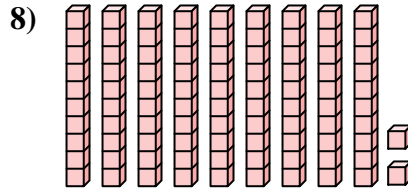
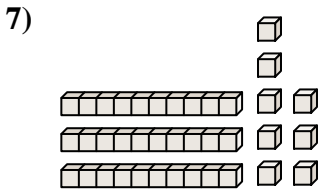
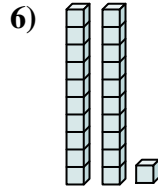
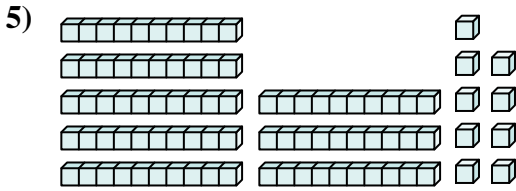
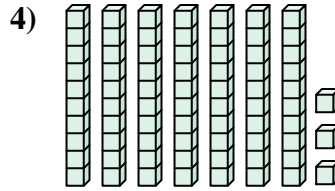
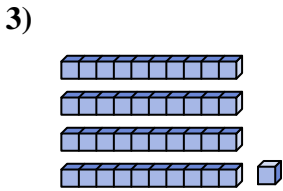
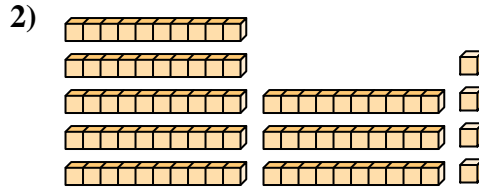
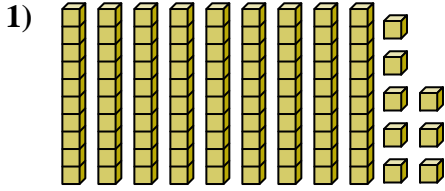
89

84

73

17

**Réponses**



1. \_\_\_\_\_
2. \_\_\_\_\_
3. \_\_\_\_\_
4. \_\_\_\_\_
5. \_\_\_\_\_
6. \_\_\_\_\_
7. \_\_\_\_\_
8. \_\_\_\_\_
9. \_\_\_\_\_
10. \_\_\_\_\_