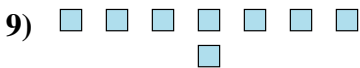
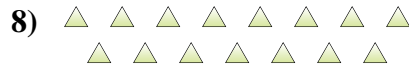
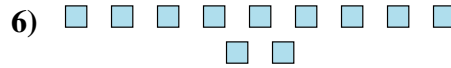
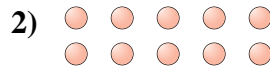





Déterminez si le nombre de figures dans chaque boîte est pair ou impair.


Réponses

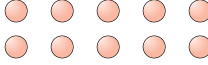



- 1. _____
- 2. _____
- 3. _____
- 4. _____
- 5. _____
- 6. _____
- 7. _____
- 8. _____
- 9. _____
- 10. _____



Déterminez si le nombre de figures dans chaque boîte est pair ou impair.

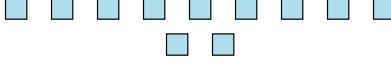
1) 
18

2) 
10

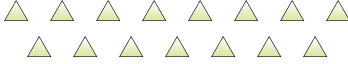
3) 
6

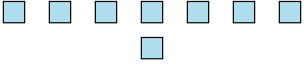
4) 
13


5) 
6

6) 
11

7) 
12

8) 
15

9) 
8

10) 
16

Réponses

1. pair

2. pair

3. pair

4. impair

5. pair

6. impair

7. pair

8. impair

9. pair

10. pair